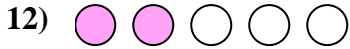
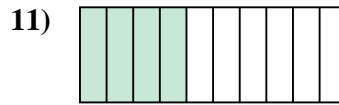
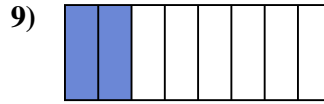
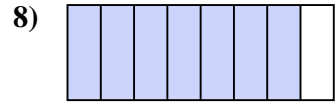
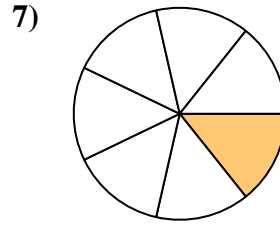
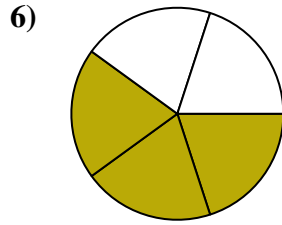
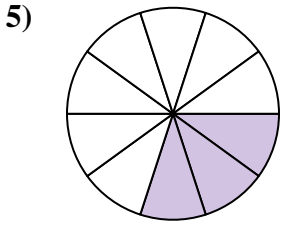

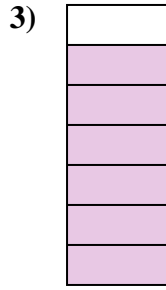






Determine if the shaded amount is 'more', 'less' or 'equal' to half.

Answers



1. _____

2. _____

3. _____

4. _____

5. _____

6. _____

7. _____

8. _____

9. _____

10. _____

11. _____

12. _____

13. _____

14. _____

15. _____

16. _____

17. _____


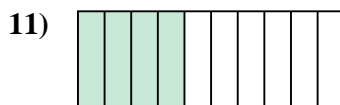

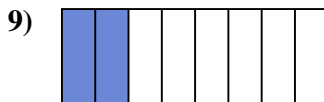
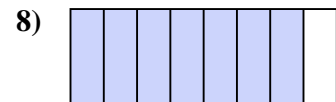
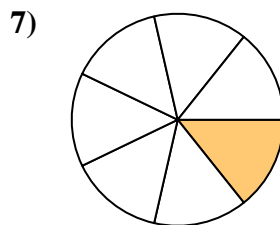
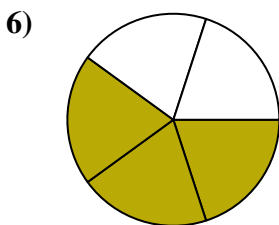
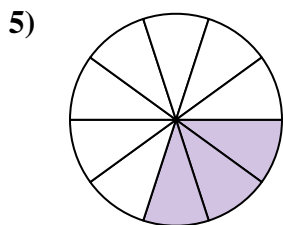

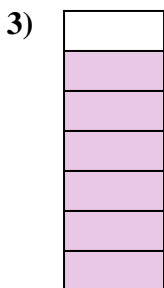


18. _____

19. _____

20. _____



Determine if the shaded amount is 'more', 'less' or 'equal' to half.



Answers

1. less

2. more

3. more

4. less

5. less

6. more

7. less

8. more

9. less

10. equal

11. less

12. less

13. more

14. more

15. less

16. less

17. equal

18. less

19. less

20. more