

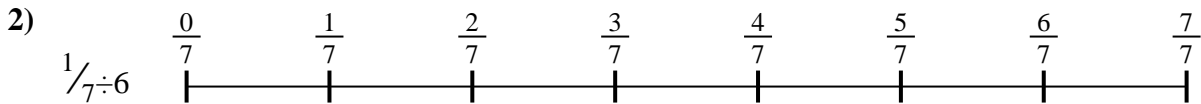


Use the numberline to solve each problem. The first is marked for you.

Answers



1. _____



2. _____



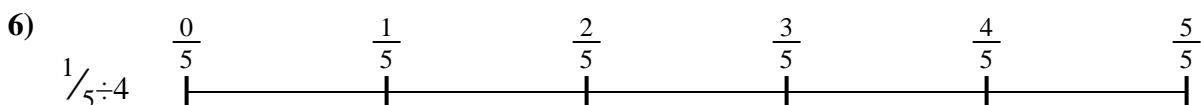
3. _____




4. _____



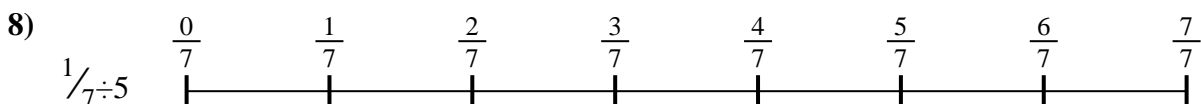
5. _____



6. _____



7. _____



8. _____

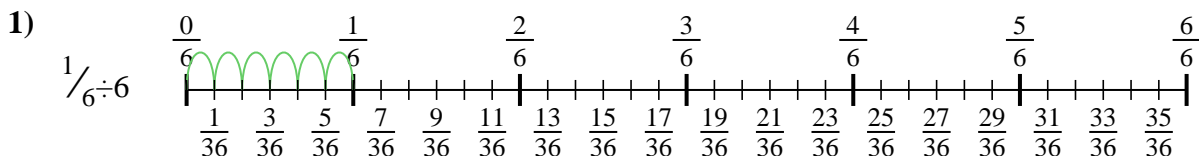


9. _____

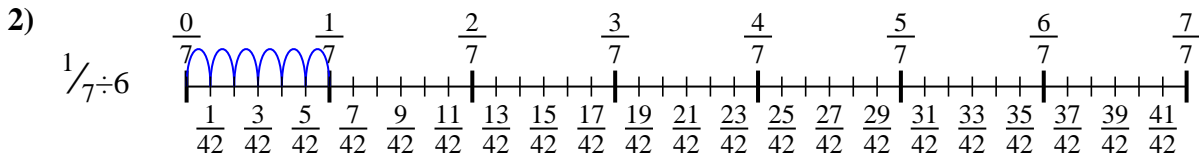


Use the numberline to solve each problem. The first is marked for you.

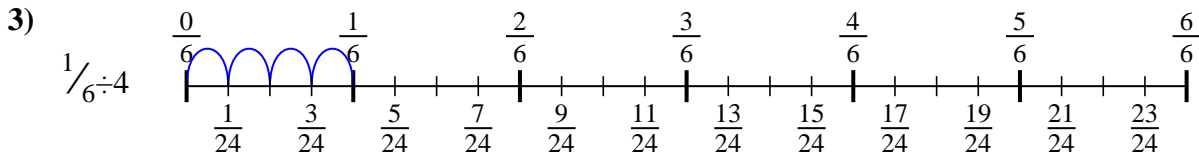
Answers



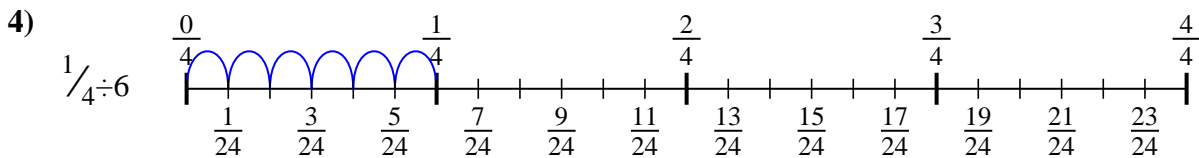
1. $\frac{1}{36}$



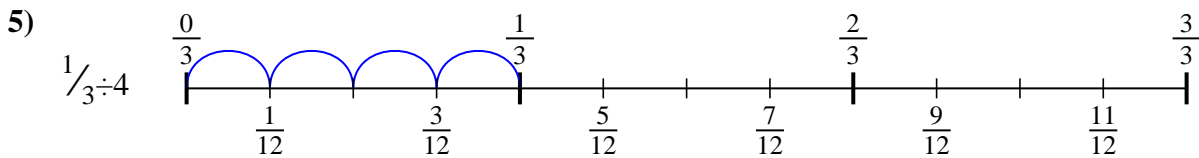
2. $\frac{1}{42}$



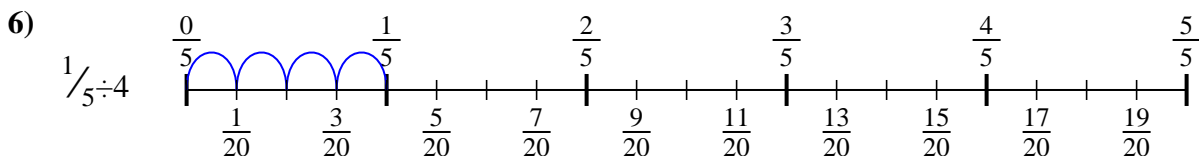
3. $\frac{1}{24}$



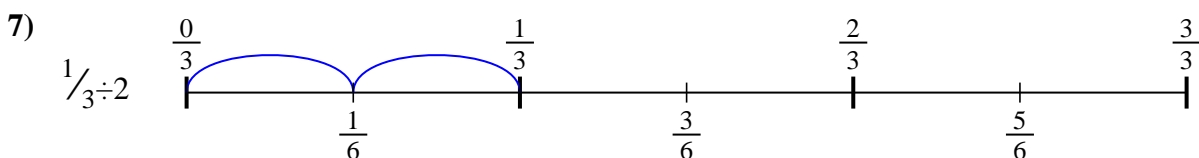
4. $\frac{1}{24}$



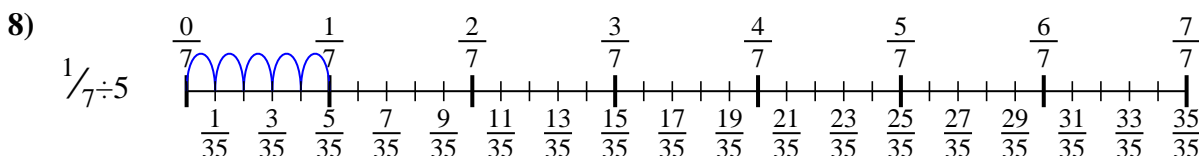
5. $\frac{1}{12}$




6. $\frac{1}{20}$



7. $\frac{1}{6}$



8. $\frac{1}{35}$



9. $\frac{1}{20}$



Use the numberline to solve each problem. The first is marked for you.

Answers

$\frac{1}{35}$

$\frac{1}{6}$

$\frac{1}{24}$

$\frac{1}{42}$

$\frac{1}{24}$

$\frac{1}{36}$

$\frac{1}{20}$

$\frac{1}{20}$

$\frac{1}{12}$

1. _____

2. _____

3. _____

4. _____

5. _____

6. _____

7. _____

8. _____

9. _____

