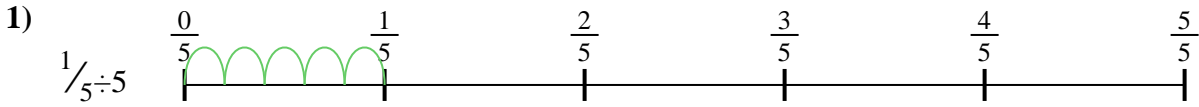


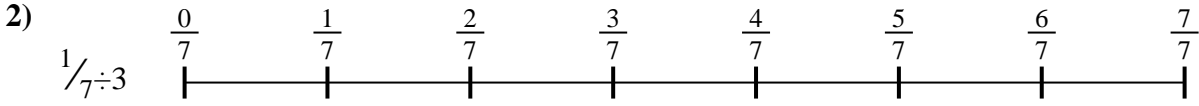


Use the numberline to solve each problem. The first is marked for you.

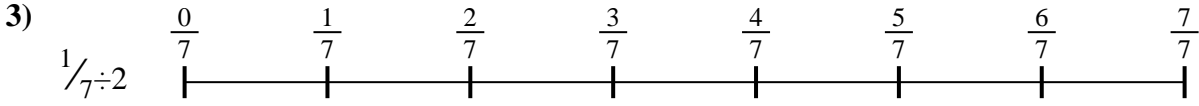
**Answers**



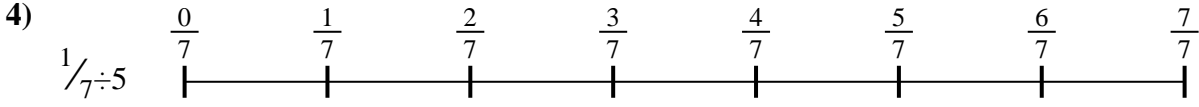
1. \_\_\_\_\_



2. \_\_\_\_\_




3. \_\_\_\_\_



4. \_\_\_\_\_




5. \_\_\_\_\_



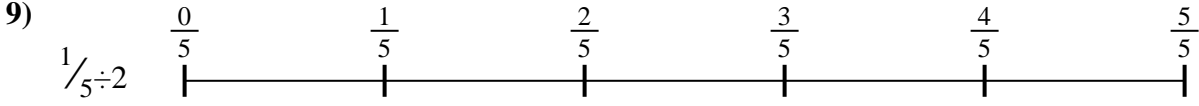
6. \_\_\_\_\_



7. \_\_\_\_\_



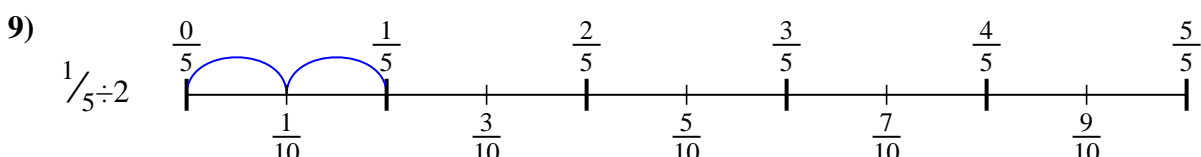
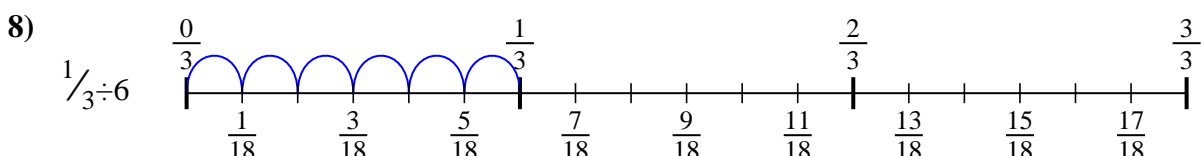
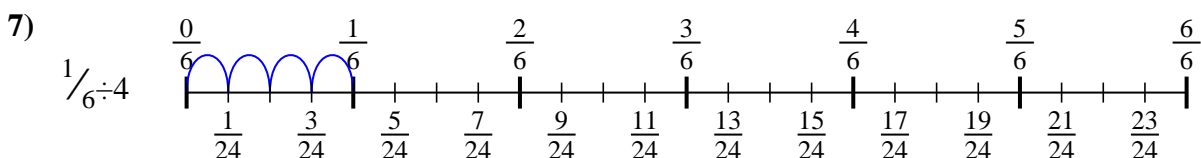
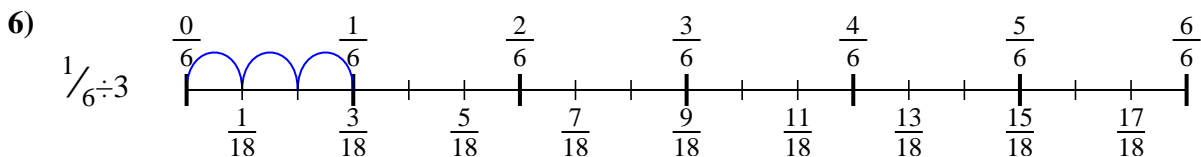
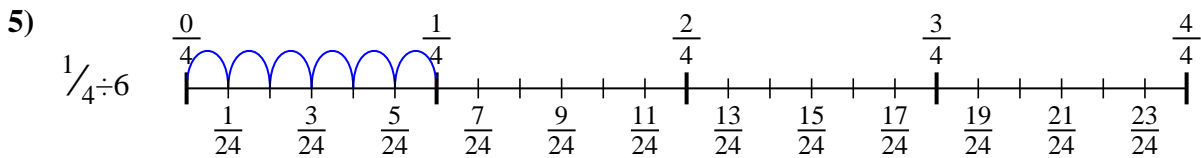
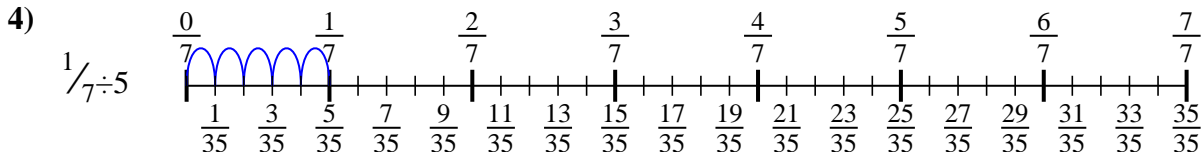
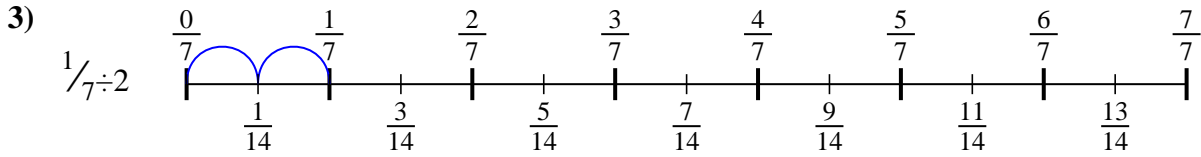
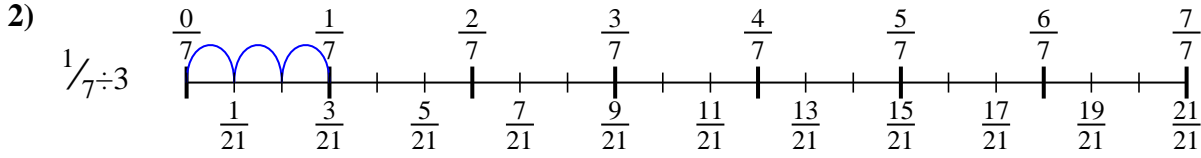
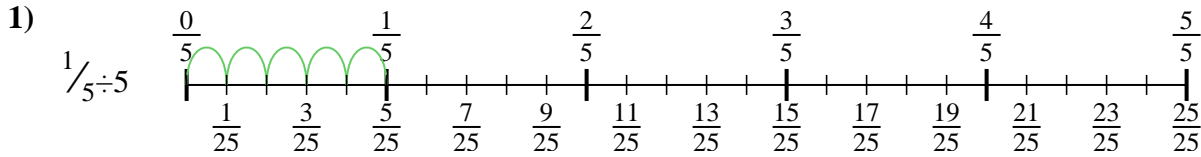
8. \_\_\_\_\_



9. \_\_\_\_\_



Use the numberline to solve each problem. The first is marked for you.



**Answers**

1.  $\frac{1}{25}$
2.  $\frac{1}{21}$
3.  $\frac{1}{14}$
4.  $\frac{1}{35}$
5.  $\frac{1}{24}$
6.  $\frac{1}{18}$
7.  $\frac{1}{24}$
8.  $\frac{1}{18}$
9.  $\frac{1}{10}$



Use the numberline to solve each problem. The first is marked for you.

**Answers**

$\frac{1}{18}$

$\frac{1}{35}$

$\frac{1}{18}$

$\frac{1}{21}$

$\frac{1}{24}$

$\frac{1}{14}$

$\frac{1}{10}$

$\frac{1}{25}$

$\frac{1}{24}$

1. \_\_\_\_\_

2. \_\_\_\_\_

3. \_\_\_\_\_

4. \_\_\_\_\_

5. \_\_\_\_\_

6. \_\_\_\_\_

7. \_\_\_\_\_

8. \_\_\_\_\_

9. \_\_\_\_\_

