





Use the numberline to solve each problem. The first is marked for you.

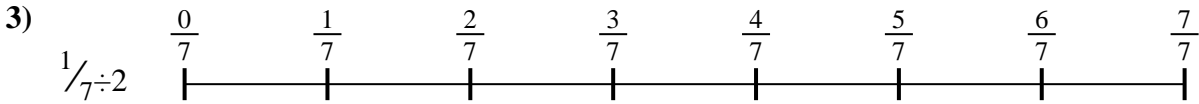
**Answers**



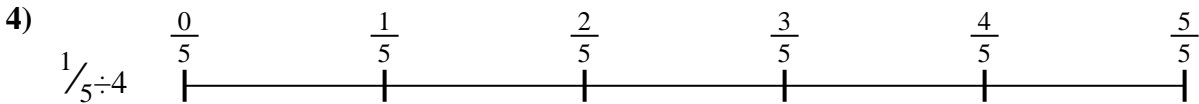
1. \_\_\_\_\_



2. \_\_\_\_\_



3. \_\_\_\_\_



4. \_\_\_\_\_



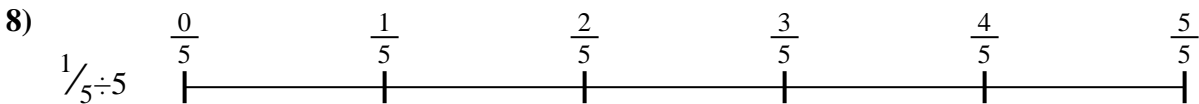
5. \_\_\_\_\_



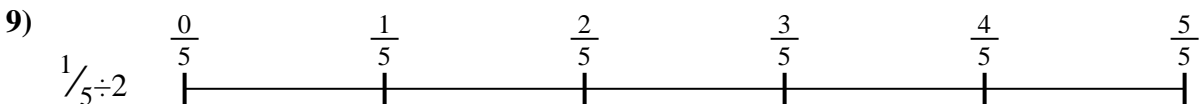
6. \_\_\_\_\_



7. \_\_\_\_\_



8. \_\_\_\_\_

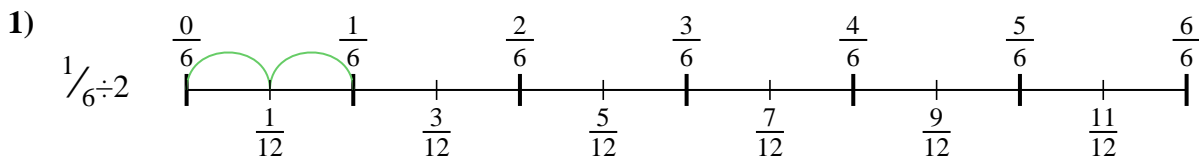


9. \_\_\_\_\_

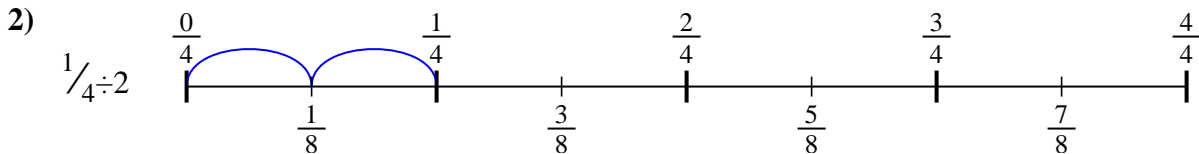


Use the numberline to solve each problem. The first is marked for you.

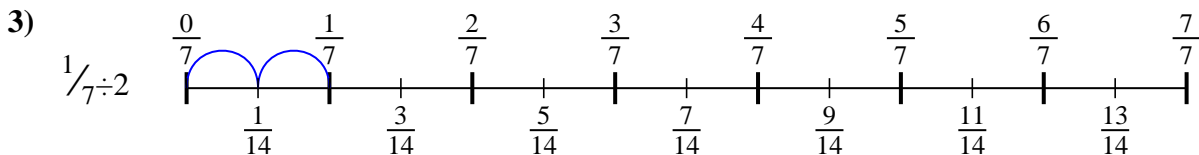
**Answers**



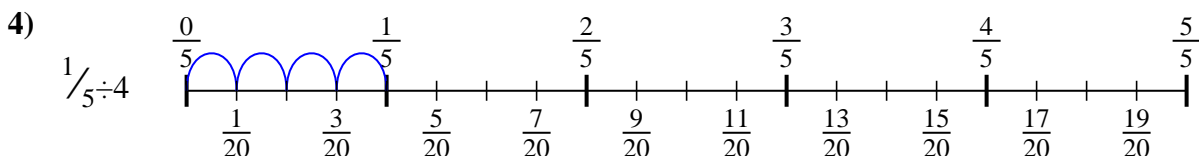
1.  $\frac{1}{12}$



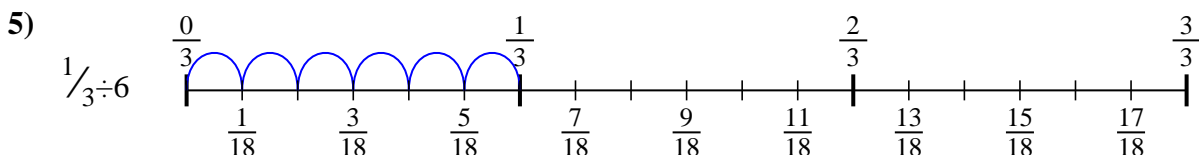
2.  $\frac{1}{8}$



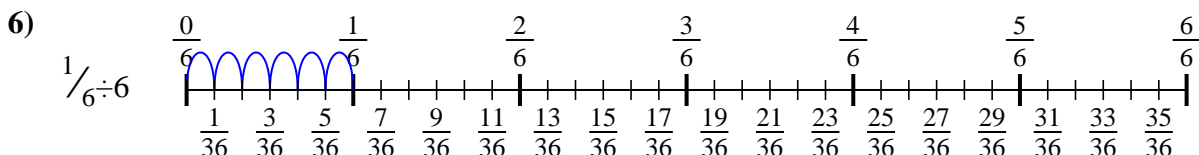
3.  $\frac{1}{14}$



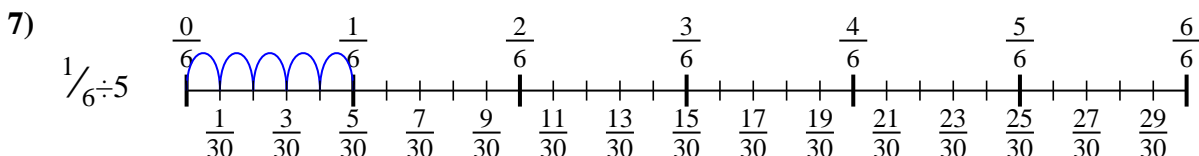
4.  $\frac{1}{20}$



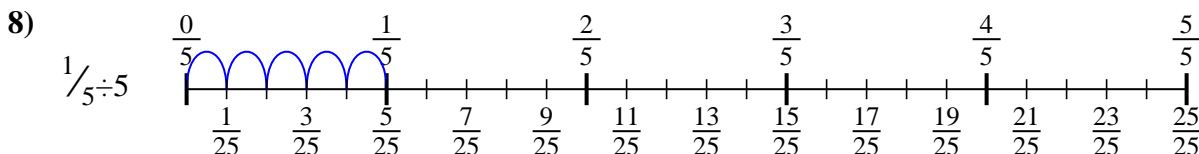
5.  $\frac{1}{18}$



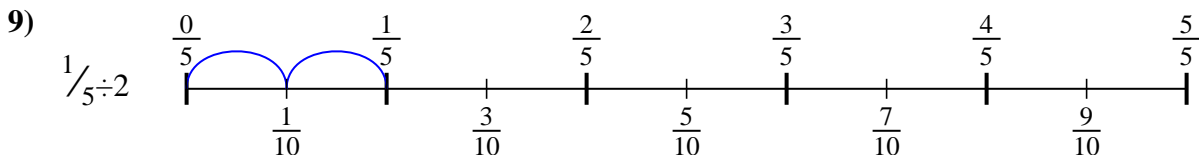
6.  $\frac{1}{36}$



7.  $\frac{1}{30}$



8.  $\frac{1}{25}$



9.  $\frac{1}{10}$



Use the numberline to solve each problem. The first is marked for you.

**Answers**

$\frac{1}{30}$

$\frac{1}{12}$

$\frac{1}{36}$

$\frac{1}{8}$

$\frac{1}{18}$

$\frac{1}{25}$

$\frac{1}{14}$

$\frac{1}{20}$

$\frac{1}{10}$

1. \_\_\_\_\_

2. \_\_\_\_\_

3. \_\_\_\_\_

4. \_\_\_\_\_

5. \_\_\_\_\_

6. \_\_\_\_\_

7. \_\_\_\_\_

8. \_\_\_\_\_

9. \_\_\_\_\_

