




Use the numberline to solve each problem. The first is marked for you.

**Answers**



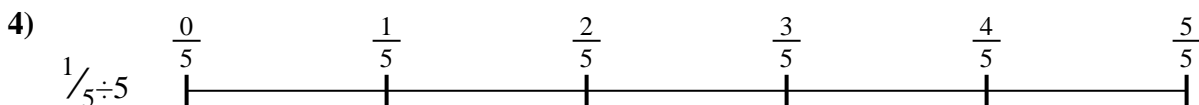
1. \_\_\_\_\_



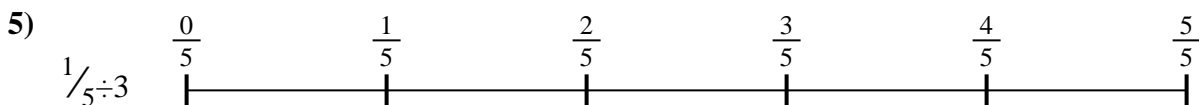
2. \_\_\_\_\_




3. \_\_\_\_\_



4. \_\_\_\_\_



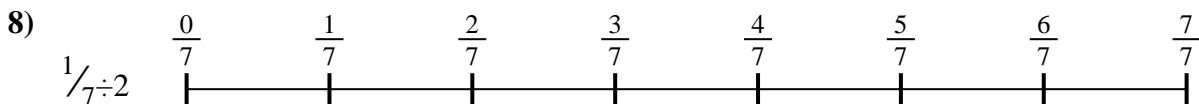
5. \_\_\_\_\_



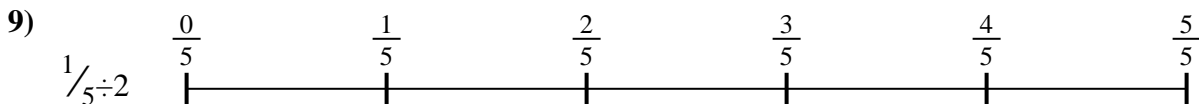
6. \_\_\_\_\_



7. \_\_\_\_\_



8. \_\_\_\_\_

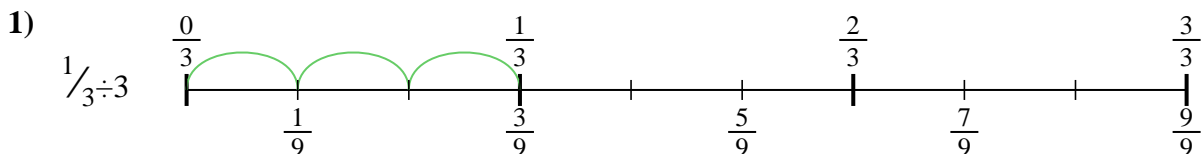


9. \_\_\_\_\_

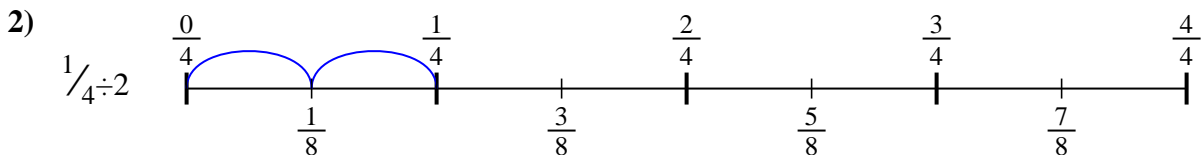


Use the numberline to solve each problem. The first is marked for you.

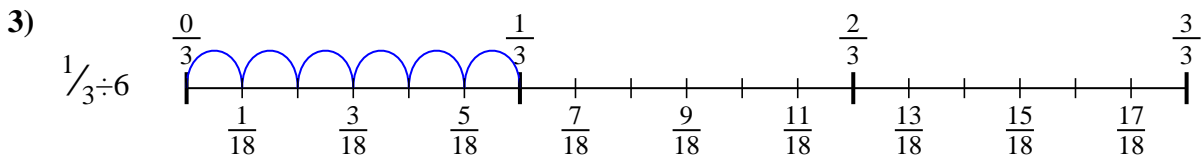
**Answers**



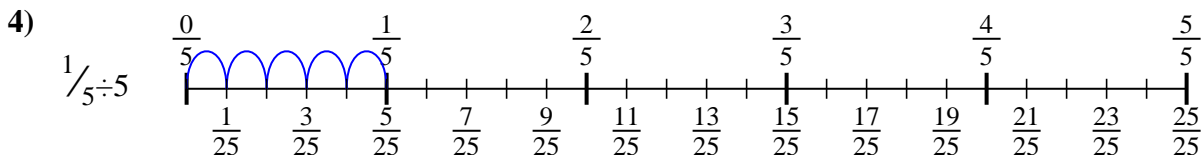
1.  $\frac{1}{9}$



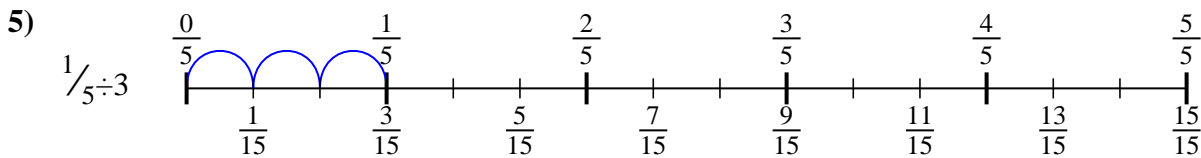
2.  $\frac{1}{8}$



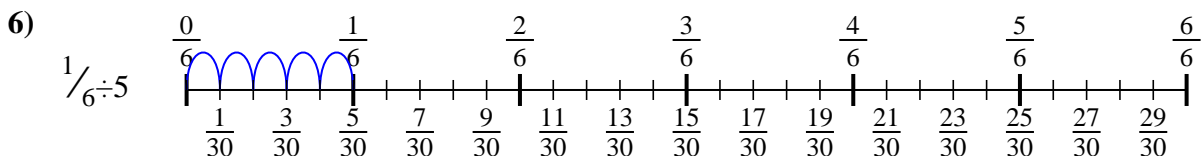
3.  $\frac{1}{18}$



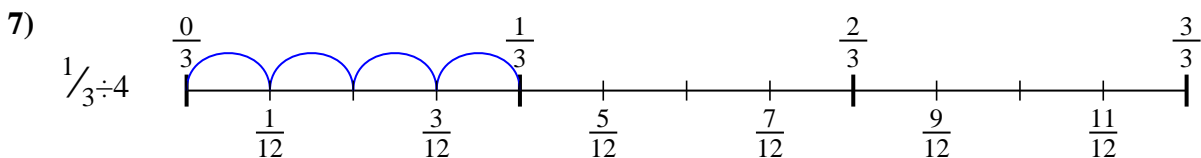
4.  $\frac{1}{25}$



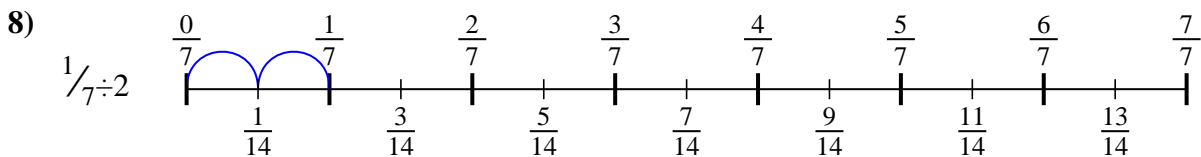
5.  $\frac{1}{15}$



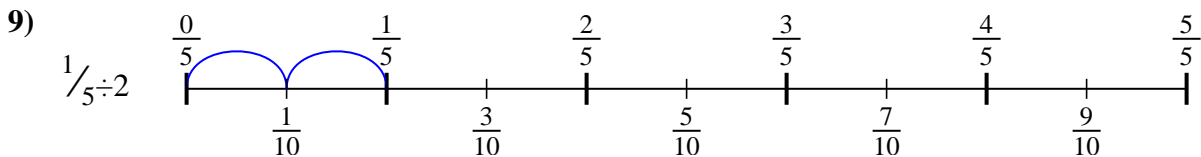
6.  $\frac{1}{30}$



7.  $\frac{1}{12}$



8.  $\frac{1}{14}$



9.  $\frac{1}{10}$



Use the numberline to solve each problem. The first is marked for you.

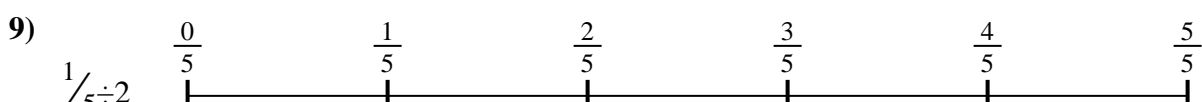
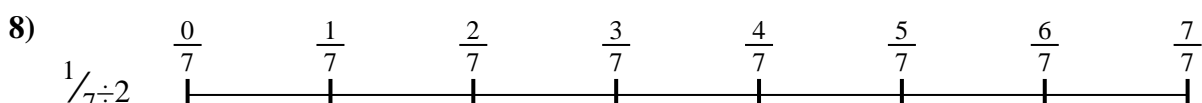
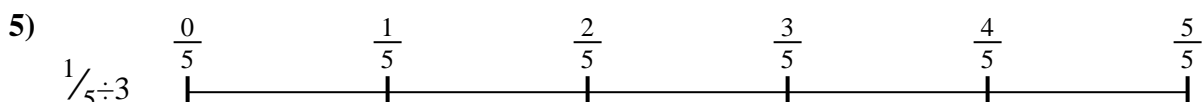
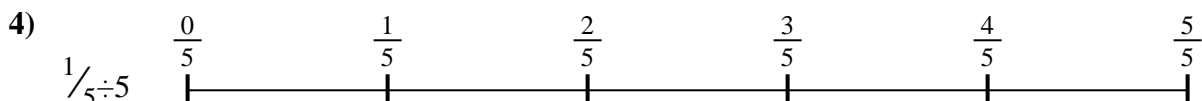
**Answers**

$\frac{1}{14}$   
 $\frac{1}{18}$   
 $\frac{1}{12}$

$\frac{1}{9}$   
 $\frac{1}{8}$

$\frac{1}{30}$   
 $\frac{1}{25}$

$\frac{1}{10}$   
 $\frac{1}{15}$



1. \_\_\_\_\_
2. \_\_\_\_\_
3. \_\_\_\_\_
4. \_\_\_\_\_
5. \_\_\_\_\_
6. \_\_\_\_\_
7. \_\_\_\_\_
8. \_\_\_\_\_
9. \_\_\_\_\_