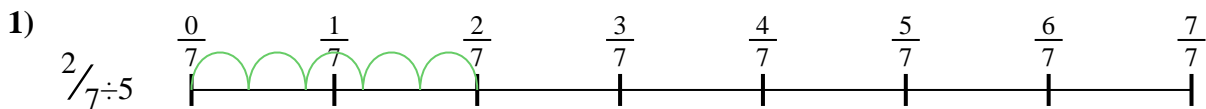




Use the numberline to solve each problem. The first is marked for you.

**Answers**




1. \_\_\_\_\_



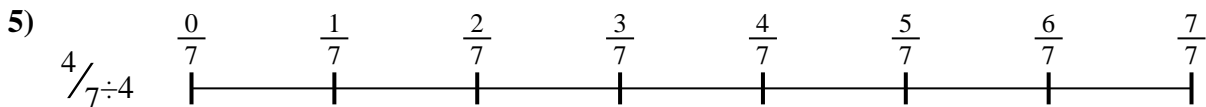
2. \_\_\_\_\_



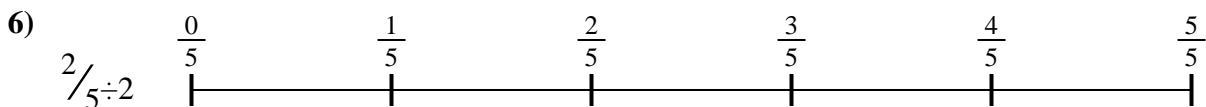
3. \_\_\_\_\_



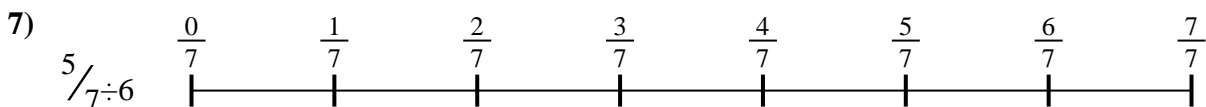
4. \_\_\_\_\_



5. \_\_\_\_\_



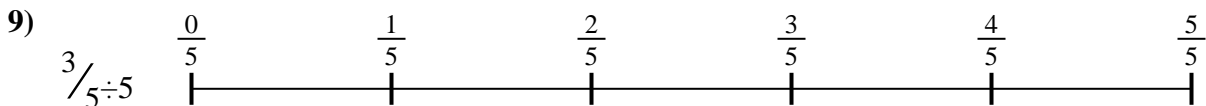
6. \_\_\_\_\_



7. \_\_\_\_\_



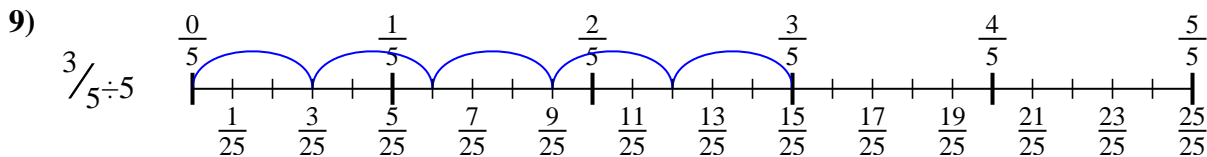
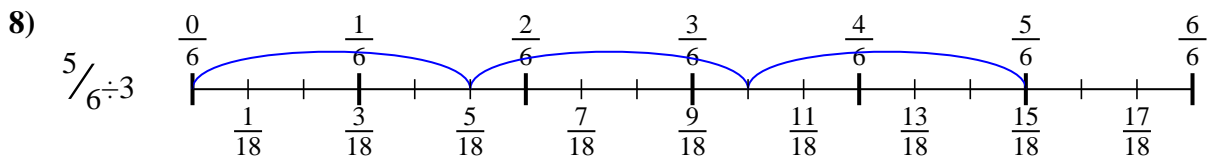
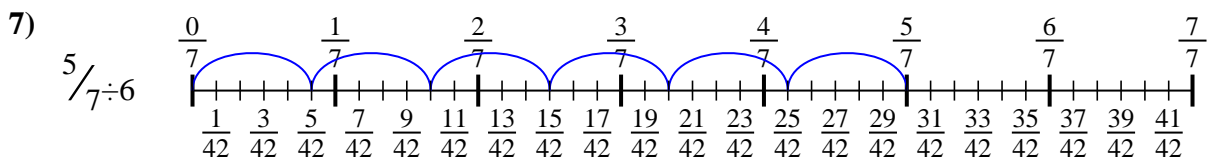
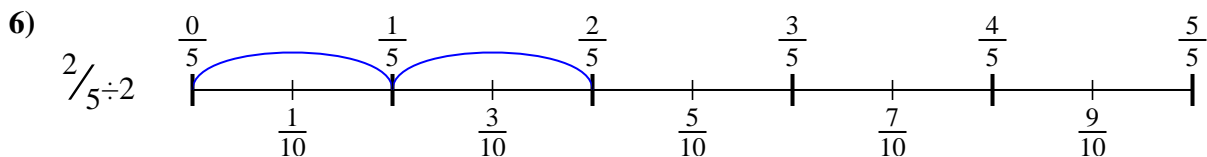
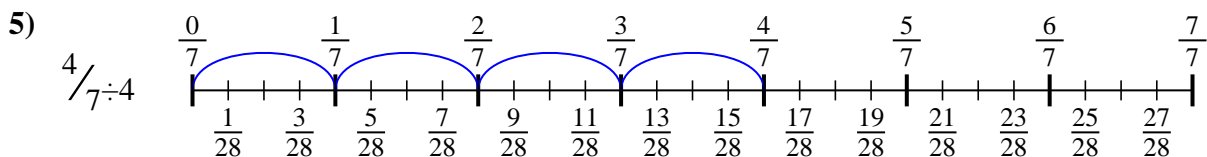
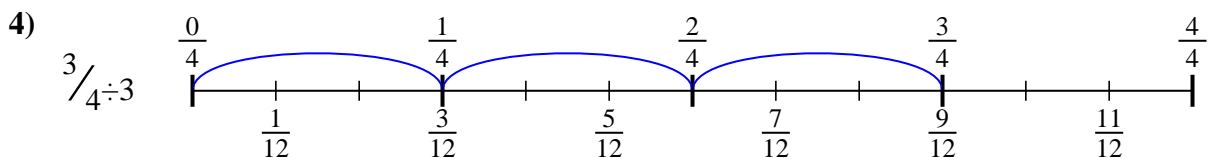
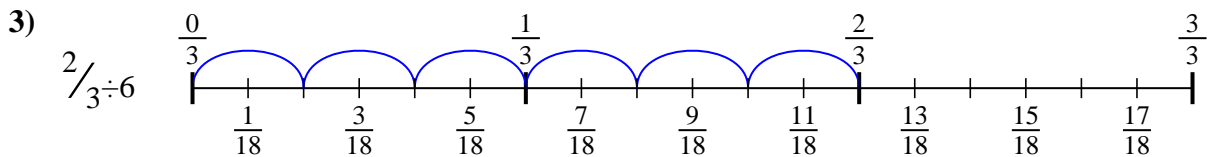
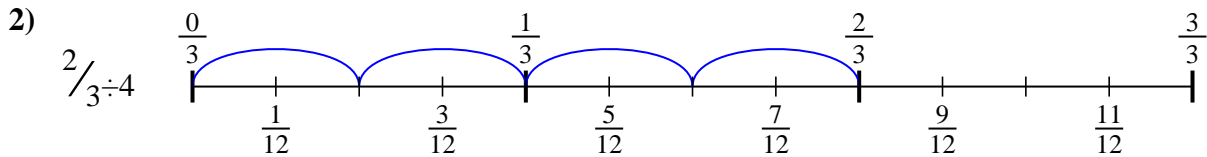
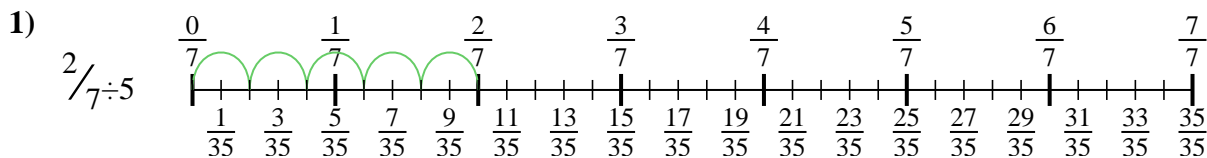
8. \_\_\_\_\_



9. \_\_\_\_\_



Use the numberline to solve each problem. The first is marked for you.



**Answers**

1.  $\frac{2}{35}$

2.  $\frac{2}{12}$

3.  $\frac{2}{18}$

4.  $\frac{3}{12}$

5.  $\frac{4}{28}$

6.  $\frac{2}{10}$

7.  $\frac{5}{42}$

8.  $\frac{5}{18}$

9.  $\frac{3}{25}$



Use the numberline to solve each problem. The first is marked for you.

**Answers**

$2/10$

$2/12$

$3/25$

$3/12$

$2/35$

$5/42$

$4/28$

$5/18$

$2/18$

1. \_\_\_\_\_

2. \_\_\_\_\_

3. \_\_\_\_\_

4. \_\_\_\_\_

5. \_\_\_\_\_

6. \_\_\_\_\_

7. \_\_\_\_\_

8. \_\_\_\_\_

9. \_\_\_\_\_

