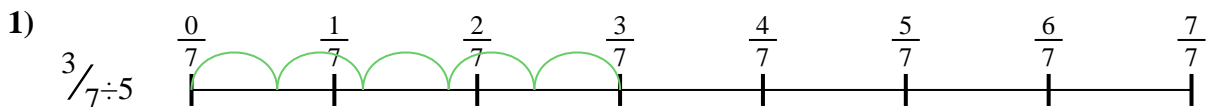





Use the numberline to solve each problem. The first is marked for you.

**Answers**



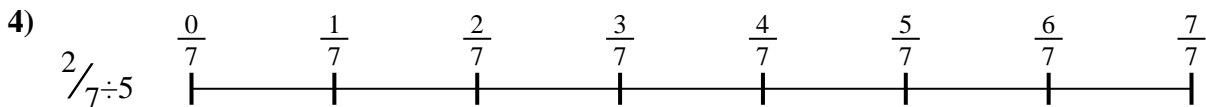
1. \_\_\_\_\_



2. \_\_\_\_\_



3. \_\_\_\_\_



4. \_\_\_\_\_



5. \_\_\_\_\_




6. \_\_\_\_\_



7. \_\_\_\_\_



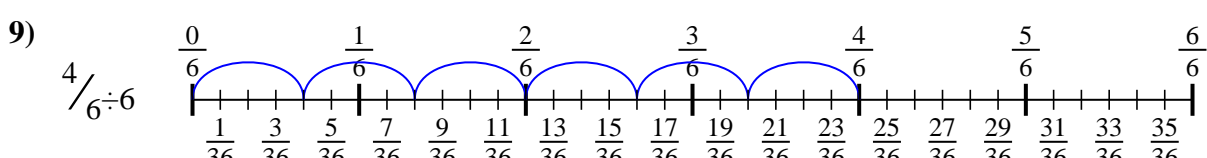
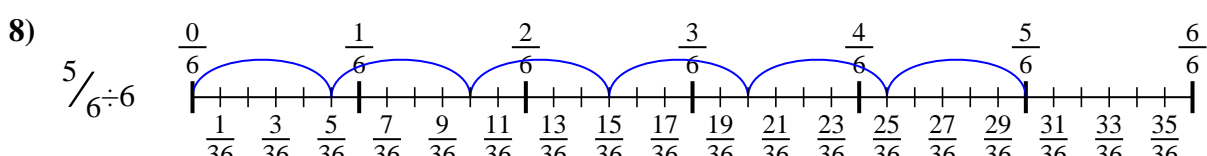
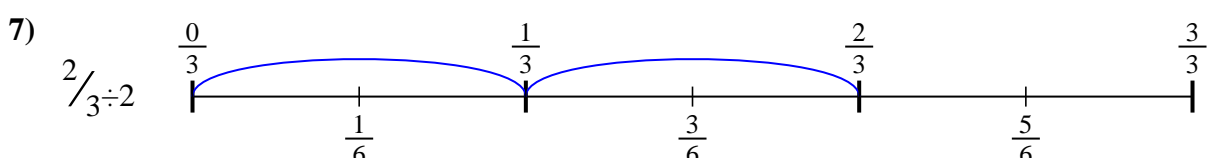
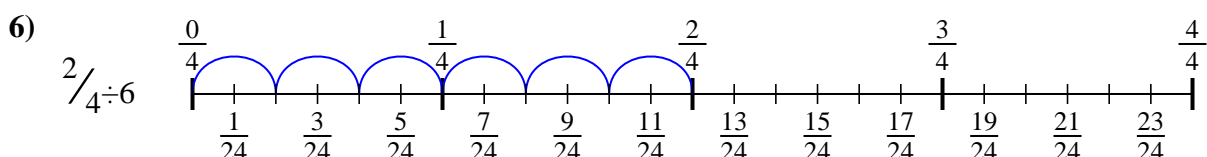
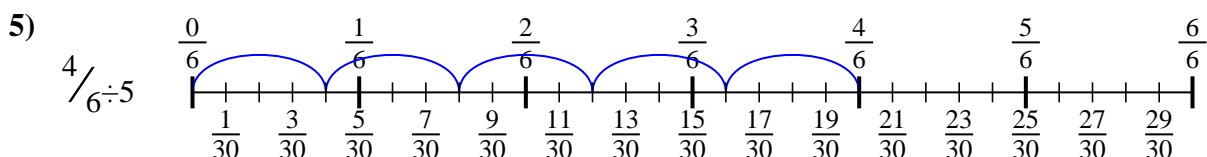
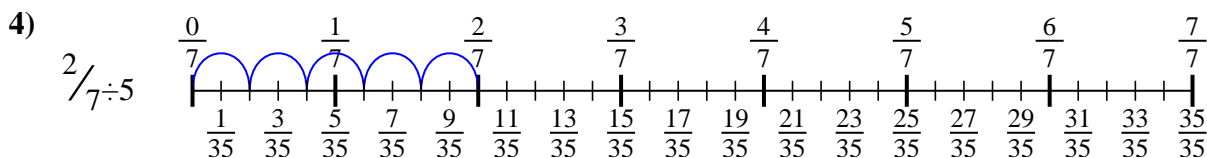
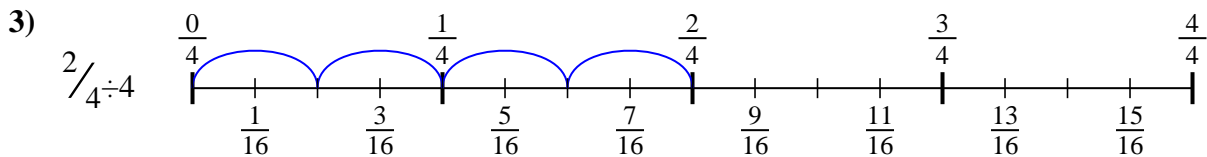
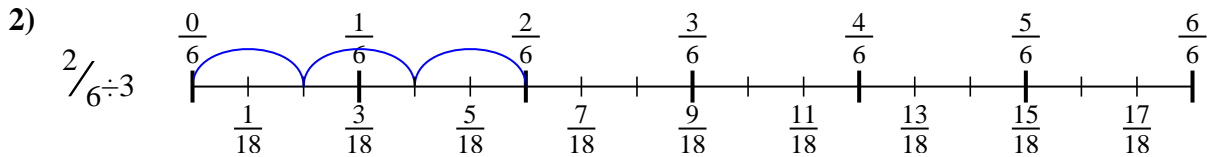
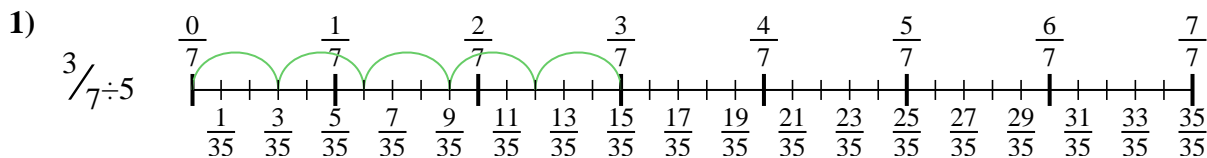
8. \_\_\_\_\_



9. \_\_\_\_\_



Use the numberline to solve each problem. The first is marked for you.



**Answers**

1.  $3/35$

2.  $2/18$

3.  $2/16$

4.  $2/35$

5.  $4/30$

6.  $2/24$

7.  $2/6$

8.  $5/36$

9.  $4/36$



Use the numberline to solve each problem. The first is marked for you.

**Answers**

$$\frac{2}{18}$$

$$\frac{4}{36}$$

$$\frac{2}{6}$$

$$\frac{2}{24}$$



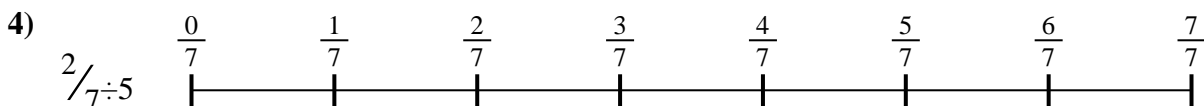
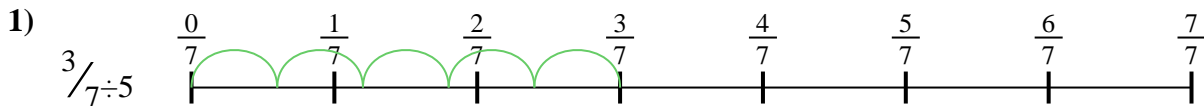
$$\frac{3}{35}$$

$$\frac{5}{36}$$

$$\frac{2}{35}$$

$$\frac{2}{16}$$

$$\frac{4}{30}$$



1. \_\_\_\_\_
2. \_\_\_\_\_
3. \_\_\_\_\_
4. \_\_\_\_\_
5. \_\_\_\_\_
6. \_\_\_\_\_
7. \_\_\_\_\_
8. \_\_\_\_\_
9. \_\_\_\_\_