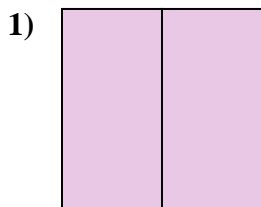
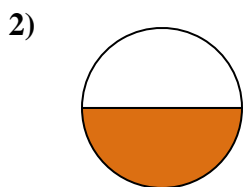
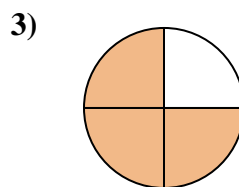


**Determine which letter best describes the shaded portion.****Answers**

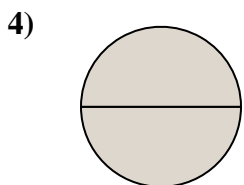
- A. one-half
B. one-quarter
C. two-halves



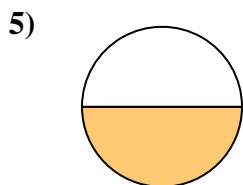
- A. one-half
B. two-halves
C. three-quarters



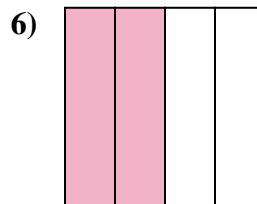
- A. one-half
B. one-fourth
C. three-quarters



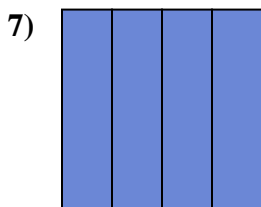
- A. two-halves
B. one-quarter
C. three-quarters



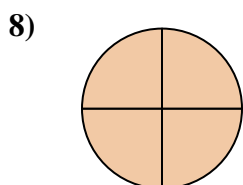
- A. four-fourths
B. three-quarters
C. one-half



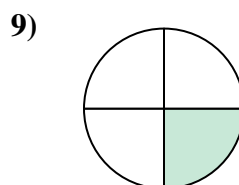
- A. four-quarters
B. one-half
C. two-quarters



- A. four-fourths
B. two-halves
C. one-fourth



- A. one-fourth
B. four-quarters
C. two-fourths

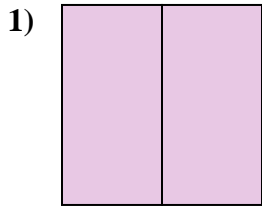


- A. four-quarters
B. two-halves
C. one-quarter

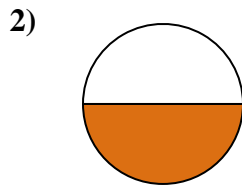
1. _____
2. _____
3. _____
4. _____
5. _____
6. _____
7. _____
8. _____
9. _____



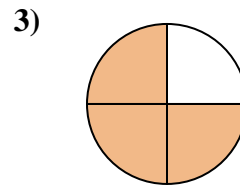
Determine which letter best describes the shaded portion.



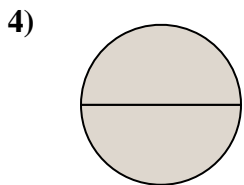
- A. one-half
B. one-quarter
C. two-halves



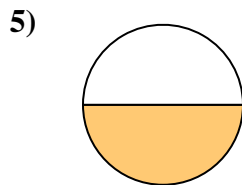
- A. one-half
B. two-halves
C. three-quarters



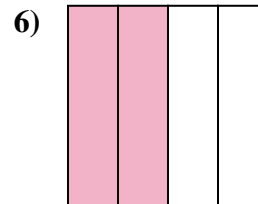
- A. one-half
B. one-fourth
C. three-quarters



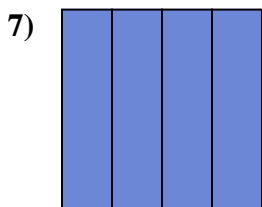
- A. two-halves
B. one-quarter
C. three-quarters



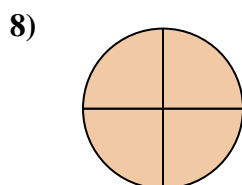
- A. four-fourths
B. three-quarters
C. one-half



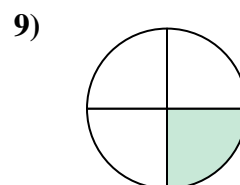
- A. four-quarters
B. one-half
C. two-quarters



- A. four-fourths
B. two-halves
C. one-fourth



- A. one-fourth
B. four-quarters
C. two-fourths



- A. four-quarters
B. two-halves
C. one-quarter

Answers

1. **C**
2. **A**
3. **C**
4. **A**
5. **C**
6. **C**
7. **A**
8. **B**
9. **C**