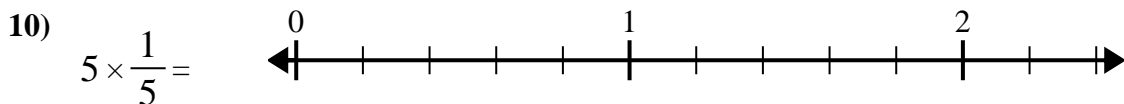
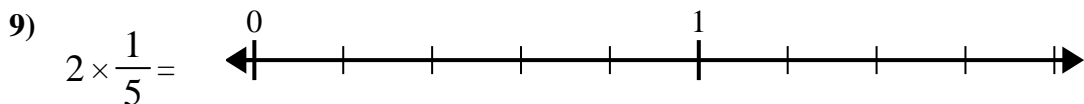
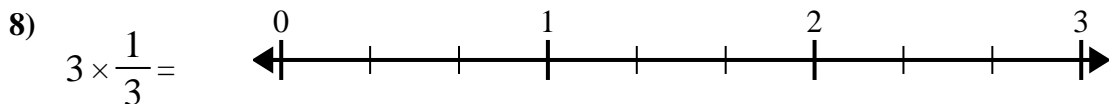
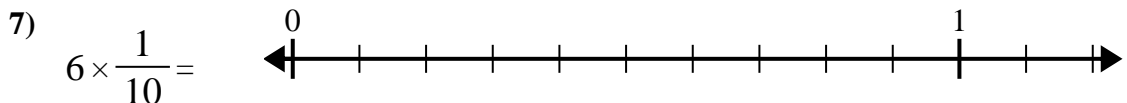
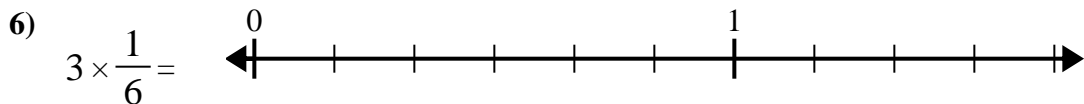
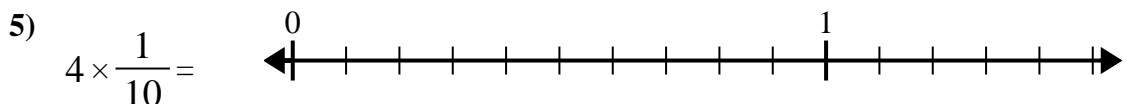
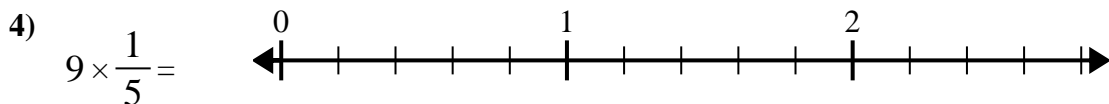
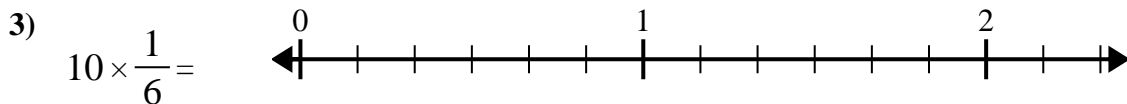
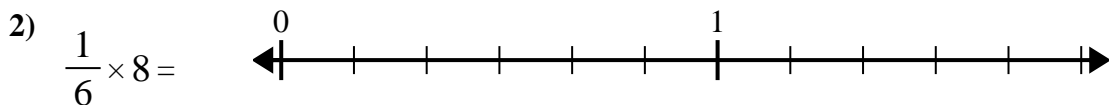
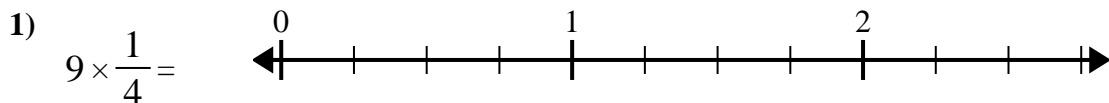




Use the numberline to solve.

**Answers**

1. _____

2. _____

3. _____

4. _____

5. _____

6. _____

7. _____

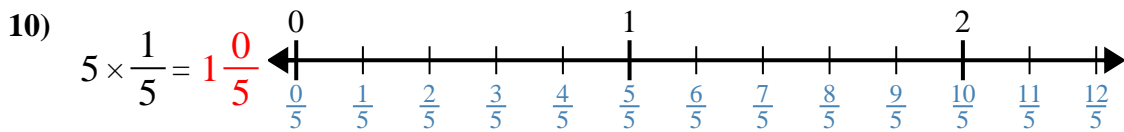
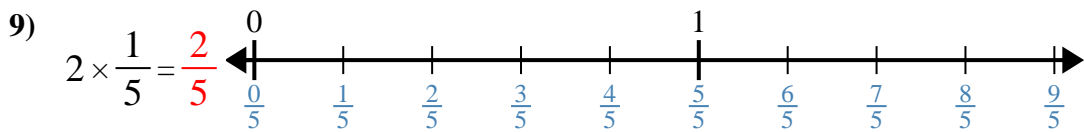
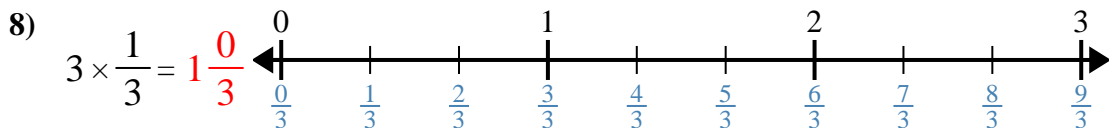
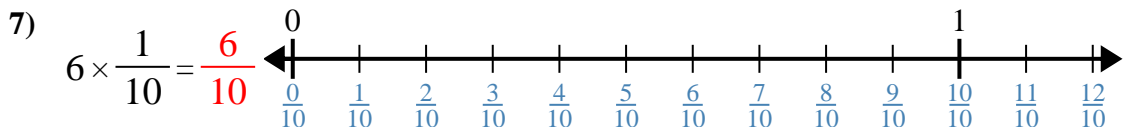
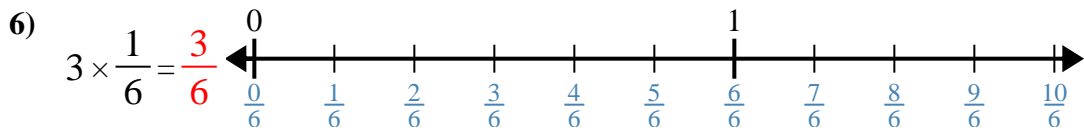
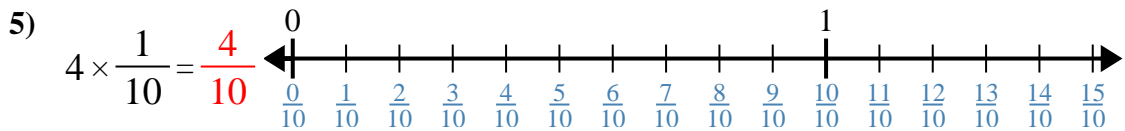
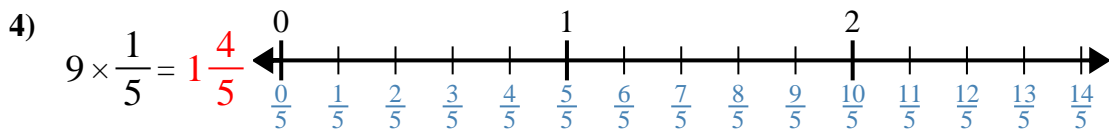
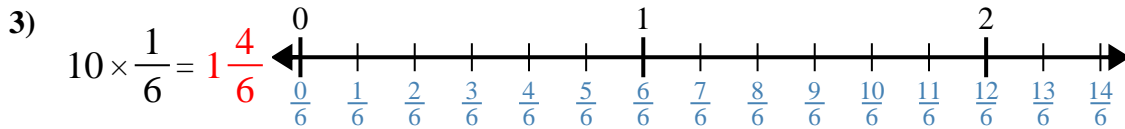
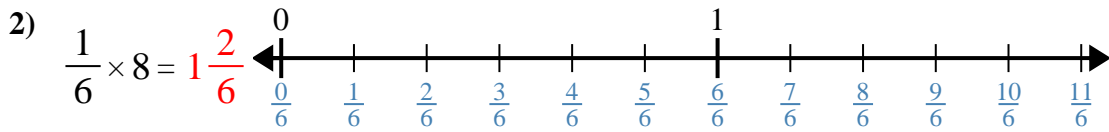
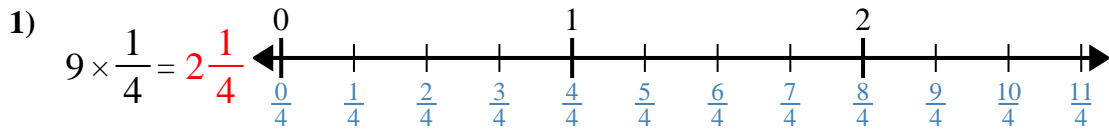
8. _____

9. _____

10. _____



Use the numberline to solve.



Answers

1. $2\frac{1}{4}$

2. $1\frac{2}{6}$

3. $1\frac{4}{6}$

4. $1\frac{4}{5}$

5. $\frac{4}{10}$

6. $\frac{3}{6}$

7. $\frac{6}{10}$

8. $1\frac{0}{3}$

9. $\frac{2}{5}$

10. $1\frac{0}{5}$



Use the numberline to solve.

Answers

$\frac{6}{10}$

$\frac{4}{10}$

$1\frac{0}{5}$

$1\frac{4}{5}$

$1\frac{2}{6}$

$\frac{2}{5}$

$1\frac{0}{3}$

$2\frac{1}{4}$

$\frac{3}{6}$

$1\frac{4}{6}$

1) $9 \times \frac{1}{4} =$

2) $\frac{1}{6} \times 8 =$

3) $10 \times \frac{1}{6} =$

4) $9 \times \frac{1}{5} =$

5) $4 \times \frac{1}{10} =$

6) $3 \times \frac{1}{6} =$

7) $6 \times \frac{1}{10} =$

8) $3 \times \frac{1}{3} =$

9) $2 \times \frac{1}{5} =$

10) $5 \times \frac{1}{5} =$

1. _____
2. _____
3. _____
4. _____
5. _____
6. _____
7. _____
8. _____
9. _____
10. _____