



Use the box provided to show a visual example of how to multiply two fractions.

Answers

Ex) $\frac{1}{9} \times \frac{1}{3} =$

1) $\frac{4}{8} \times \frac{4}{7} =$

2) $\frac{1}{6} \times \frac{1}{2} =$

3) $\frac{2}{7} \times \frac{1}{4} =$

4) $\frac{4}{5} \times \frac{1}{3} =$

5) $\frac{3}{4} \times \frac{2}{5} =$

6) $\frac{2}{4} \times \frac{3}{4} =$

7) $\frac{1}{6} \times \frac{1}{5} =$

8) $\frac{2}{3} \times \frac{6}{7} =$

9) $\frac{1}{4} \times \frac{1}{4} =$

10) $\frac{2}{3} \times \frac{5}{9} =$

11) $\frac{3}{5} \times \frac{2}{4} =$

Ex. $\frac{1}{27}$

1. _____

2. _____

3. _____

4. _____

5. _____

6. _____

7. _____

8. _____

9. _____

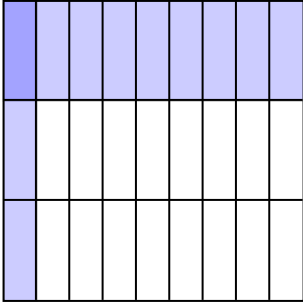
10. _____

11. _____

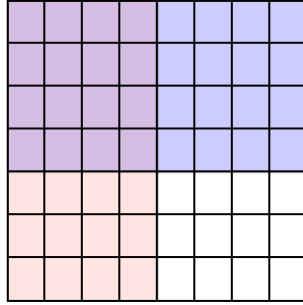


Use the box provided to show a visual example of how to multiply two fractions.

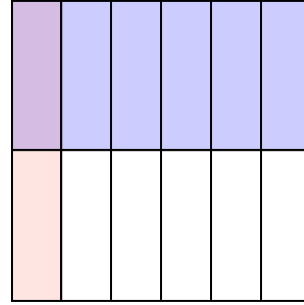
Ex) $\frac{1}{9} \times \frac{1}{3} =$



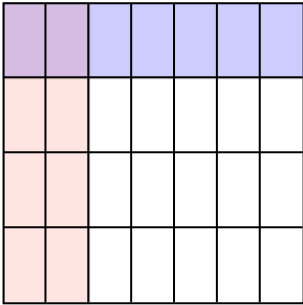
1) $\frac{4}{8} \times \frac{4}{7} =$



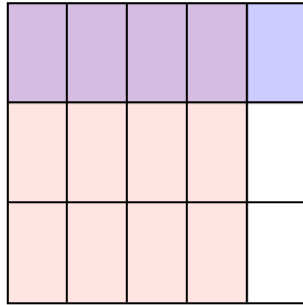
2) $\frac{1}{6} \times \frac{1}{2} =$



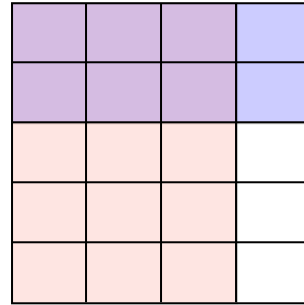
3) $\frac{2}{7} \times \frac{1}{4} =$




4) $\frac{4}{5} \times \frac{1}{3} =$



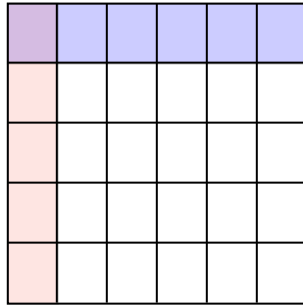
5) $\frac{3}{4} \times \frac{2}{5} =$



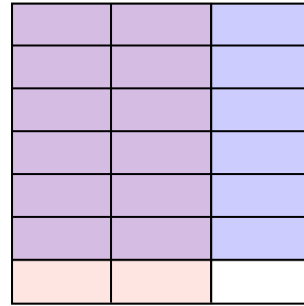
6) $\frac{2}{4} \times \frac{3}{4} =$




7) $\frac{1}{6} \times \frac{1}{5} =$



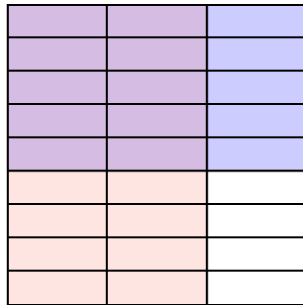
8) $\frac{2}{3} \times \frac{6}{7} =$



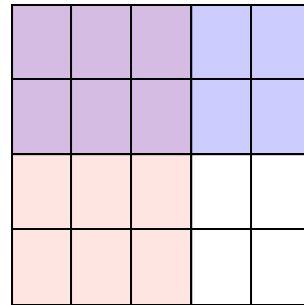
9) $\frac{1}{4} \times \frac{1}{4} =$



10) $\frac{2}{3} \times \frac{5}{9} =$



11) $\frac{3}{5} \times \frac{2}{4} =$



Answers

Ex. $\frac{1}{27}$

1. $\frac{16}{56}$

2. $\frac{1}{12}$

3. $\frac{2}{28}$

4. $\frac{4}{15}$

5. $\frac{6}{20}$

6. $\frac{6}{16}$

7. $\frac{1}{30}$

8. $\frac{12}{21}$

9. $\frac{1}{16}$

10. $\frac{10}{27}$

11. $\frac{6}{20}$