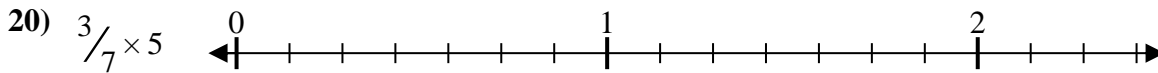
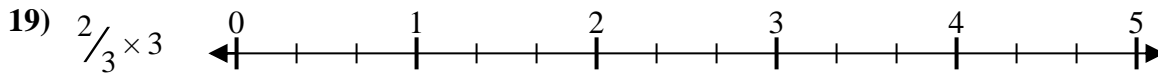
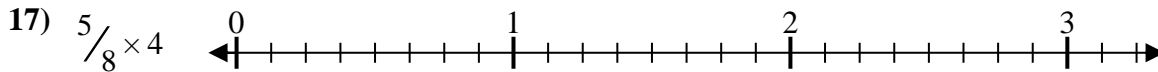
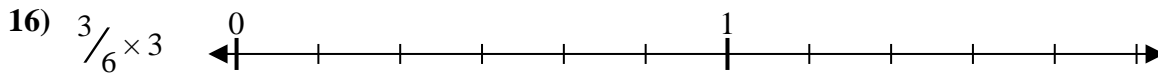
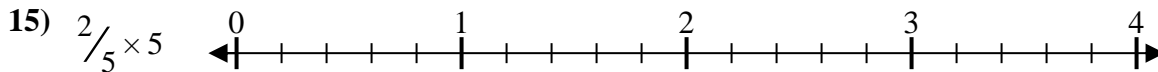
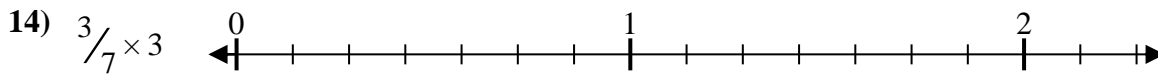
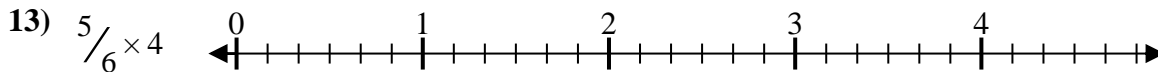

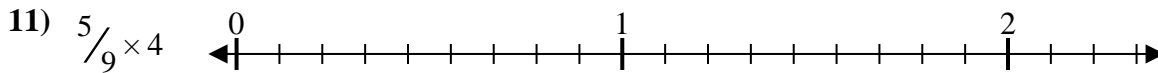
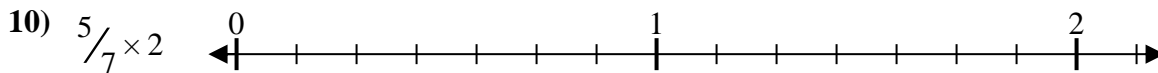
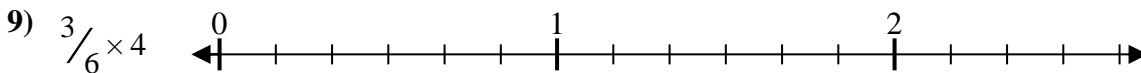
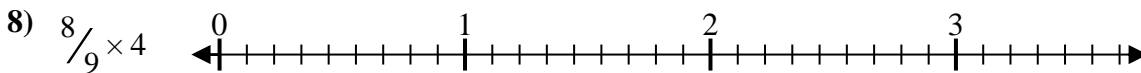
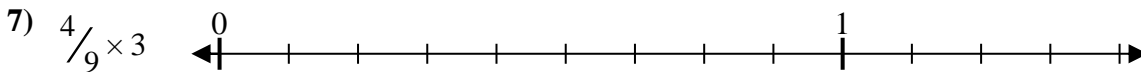
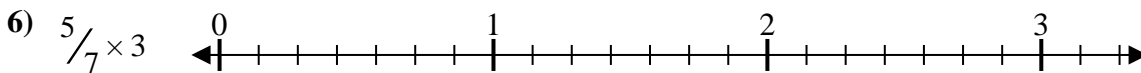

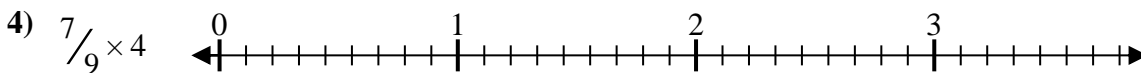
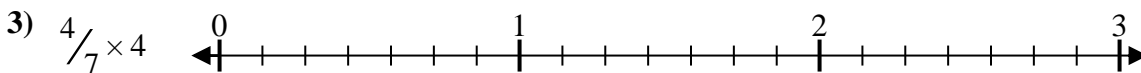
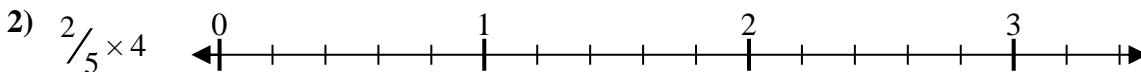
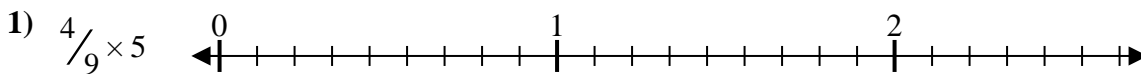




Solve each problem.

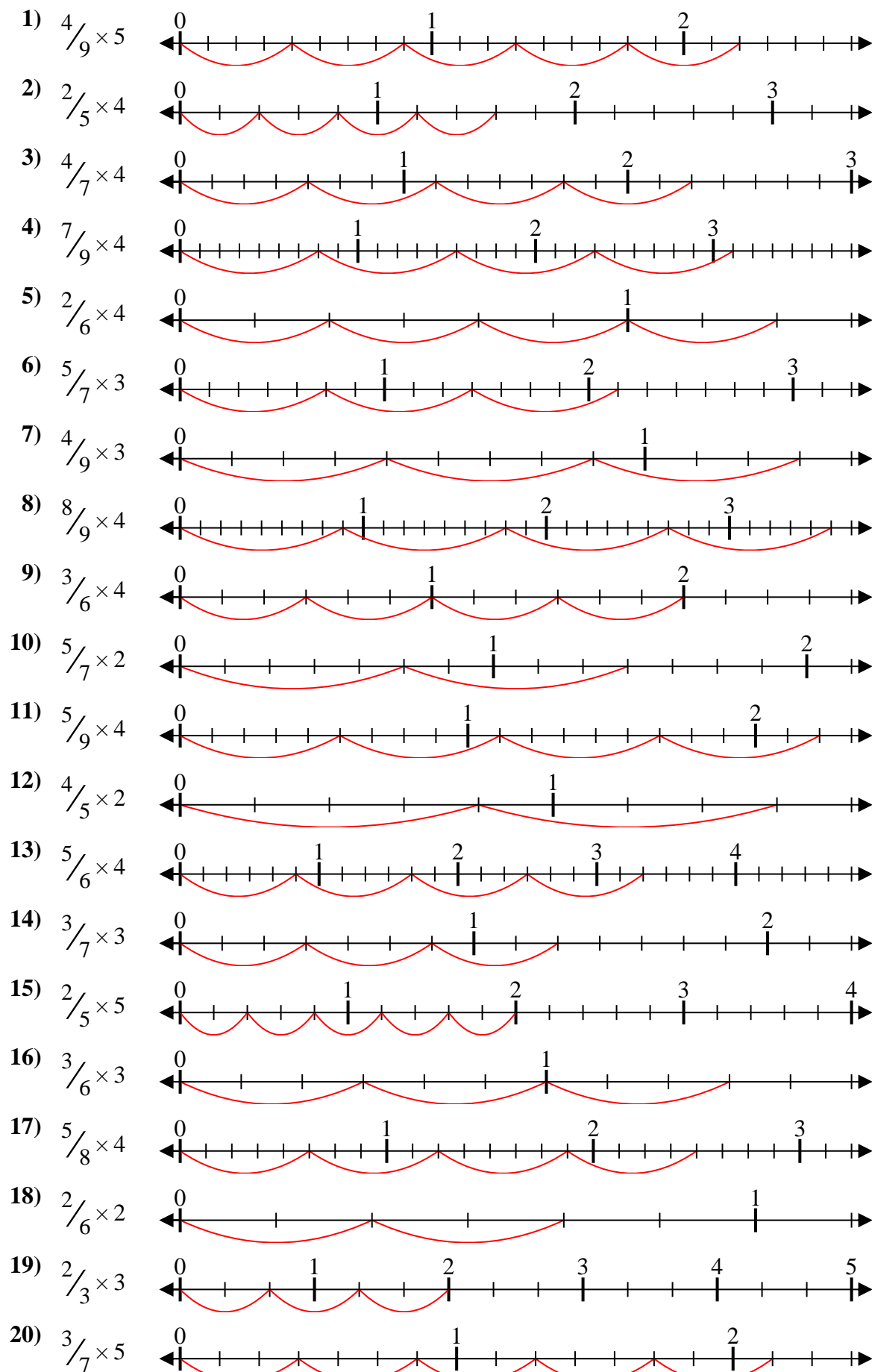
Answers



1. \_\_\_\_\_
2. \_\_\_\_\_
3. \_\_\_\_\_
4. \_\_\_\_\_
5. \_\_\_\_\_
6. \_\_\_\_\_
7. \_\_\_\_\_
8. \_\_\_\_\_
9. \_\_\_\_\_
10. \_\_\_\_\_
11. \_\_\_\_\_
12. \_\_\_\_\_
13. \_\_\_\_\_
14. \_\_\_\_\_
15. \_\_\_\_\_
16. \_\_\_\_\_
17. \_\_\_\_\_
18. \_\_\_\_\_
19. \_\_\_\_\_
20. \_\_\_\_\_



Solve each problem.



**Answers**

1.  $\frac{20}{9} = 2\frac{2}{9}$
2.  $\frac{8}{5} = 1\frac{3}{5}$
3.  $\frac{16}{7} = 2\frac{2}{7}$
4.  $\frac{28}{9} = 3\frac{1}{9}$
5.  $\frac{8}{6} = 1\frac{1}{3}$
6.  $\frac{15}{7} = 2\frac{1}{7}$
7.  $\frac{12}{9} = 1\frac{1}{3}$
8.  $\frac{32}{9} = 3\frac{5}{9}$
9.  $\frac{12}{6} = 2$
10.  $\frac{10}{7} = 1\frac{3}{7}$
11.  $\frac{20}{9} = 2\frac{2}{9}$
12.  $\frac{8}{5} = 1\frac{3}{5}$
13.  $\frac{20}{6} = 3\frac{1}{3}$
14.  $\frac{9}{7} = 1\frac{2}{7}$
15.  $\frac{10}{5} = 2$
16.  $\frac{9}{6} = 1\frac{1}{2}$
17.  $\frac{20}{8} = 2\frac{1}{2}$
18.  $\frac{4}{6} = \frac{2}{3}$
19.  $\frac{6}{3} = 2$
20.  $\frac{15}{7} = 2\frac{1}{7}$