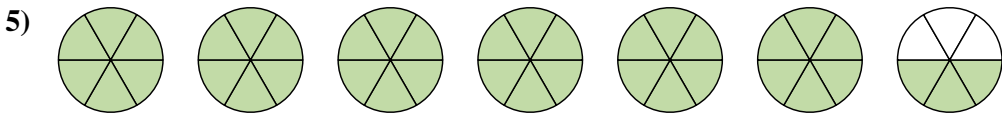
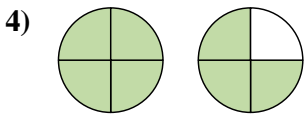
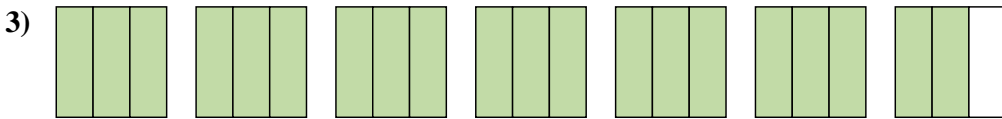
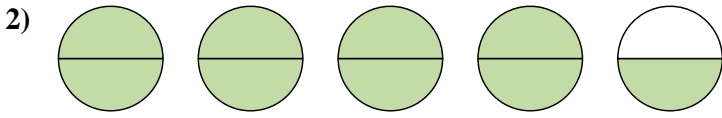
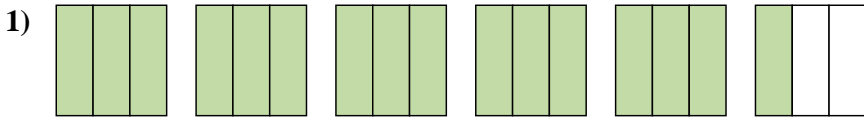
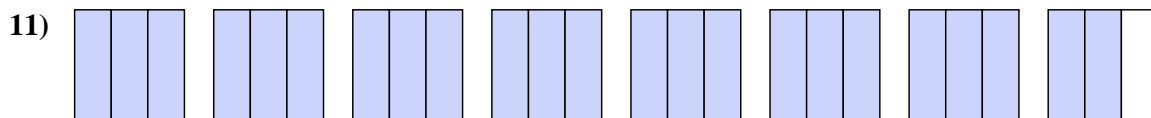
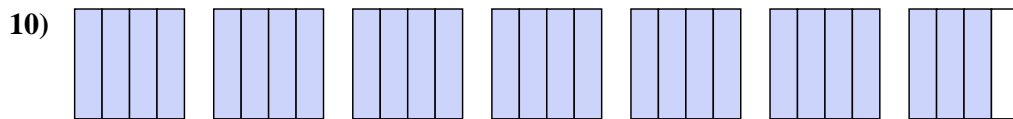
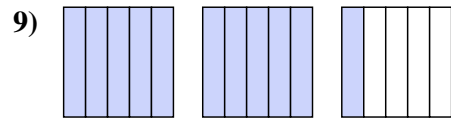
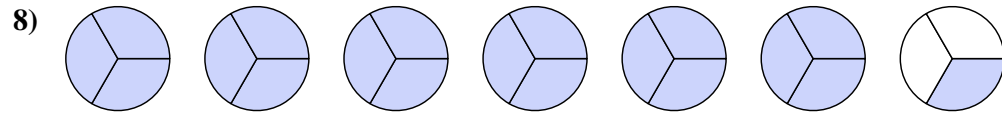
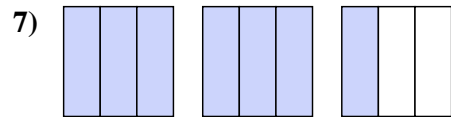
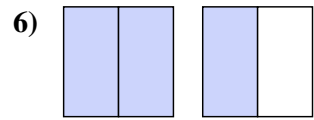




Write each amount as a mixed number.



Write each amount as an improper fraction.



Answers

1. $5\frac{1}{3}$

2. $4\frac{1}{2}$

3. $6\frac{2}{3}$

4. $1\frac{3}{4}$

5. $6\frac{3}{6}$

6. $\frac{3}{2}$

7. $\frac{7}{3}$

8. $\frac{19}{3}$

9. $\frac{11}{5}$

10. $\frac{27}{4}$

11. $\frac{23}{3}$