


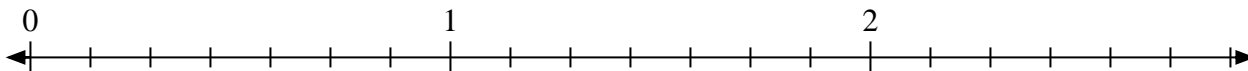


Solve each problem.

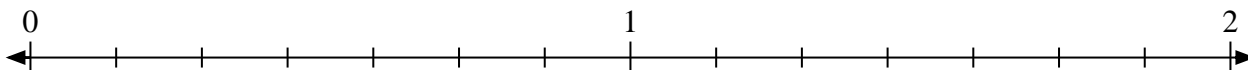
- 1) Mark the location of
- $\frac{5}{3}$



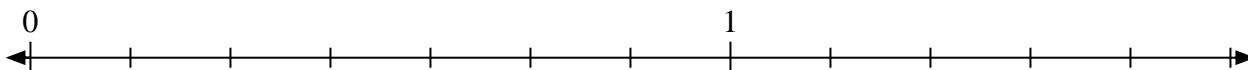
- 2) Mark the location of
- $\frac{16}{7}$




- 3) Mark the location of
- $\frac{13}{7}$



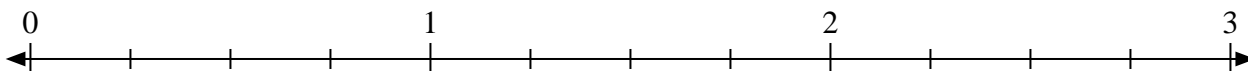
- 4) Mark the location of
- $\frac{8}{7}$



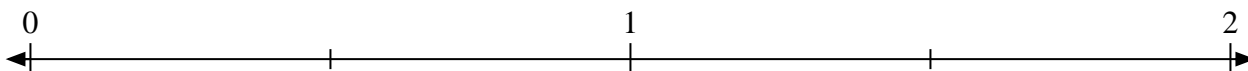
- 5) Mark the location of
- $\frac{10}{8}$



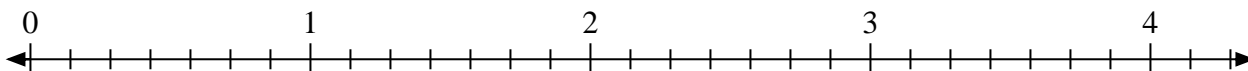
- 6) Mark the location of
- $\frac{10}{4}$



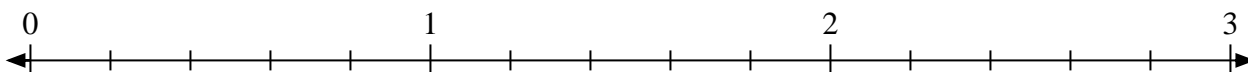
- 7) Mark the location of
- $\frac{3}{2}$



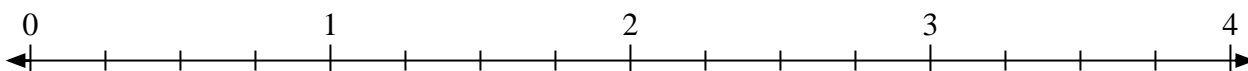
- 8) Mark the location of
- $\frac{14}{7}$



- 9) Mark the location of
- $\frac{6}{5}$




- 10) Mark the location of
- $\frac{11}{4}$



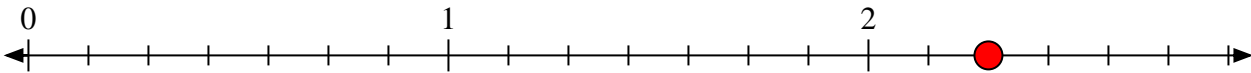


Solve each problem.

- 1) Mark the location of
- $\frac{5}{3}$



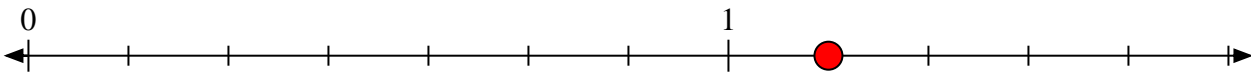
- 2) Mark the location of
- $\frac{16}{7}$




- 3) Mark the location of
- $\frac{13}{7}$



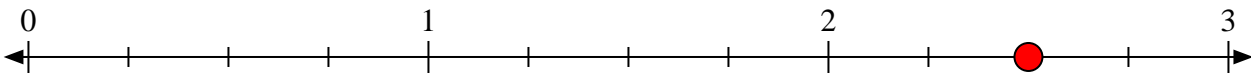
- 4) Mark the location of
- $\frac{8}{7}$



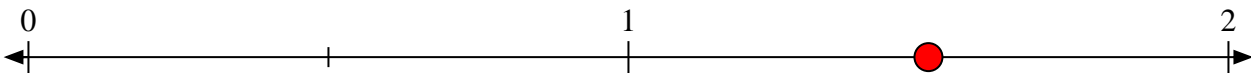
- 5) Mark the location of
- $\frac{10}{8}$



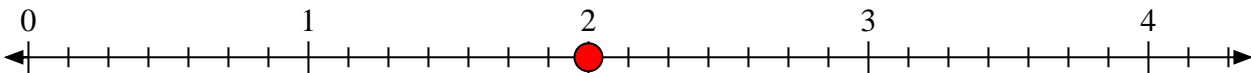
- 6) Mark the location of
- $\frac{10}{4}$



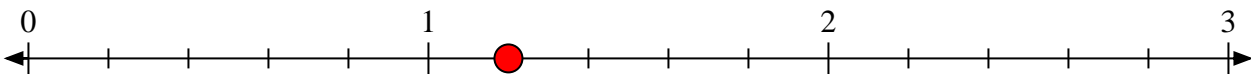
- 7) Mark the location of
- $\frac{3}{2}$



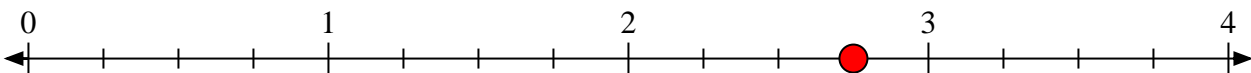
- 8) Mark the location of
- $\frac{14}{7}$



- 9) Mark the location of
- $\frac{6}{5}$



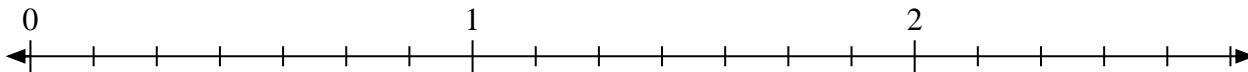
- 10) Mark the location of
- $\frac{11}{4}$






Solve each problem.

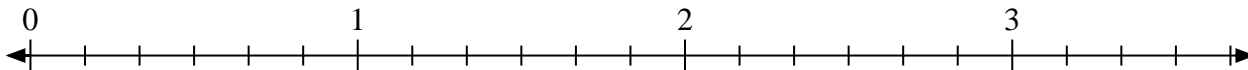
- 1) Mark the location of
- $\frac{14}{7}$



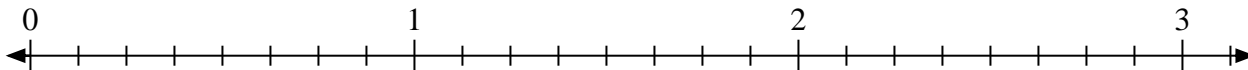
- 2) Mark the location of
- $\frac{5}{3}$



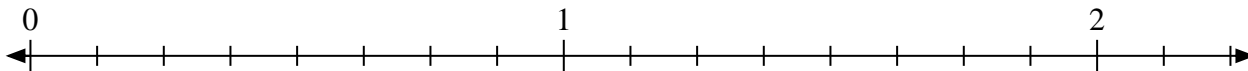
- 3) Mark the location of
- $\frac{12}{6}$



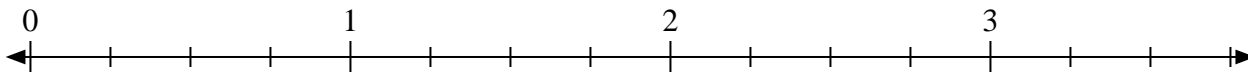
- 4) Mark the location of
- $\frac{17}{8}$



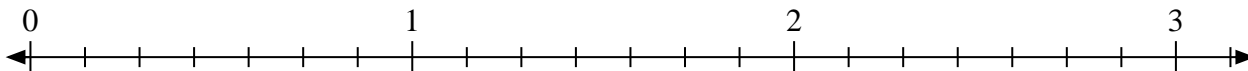
- 5) Mark the location of
- $\frac{13}{8}$



- 6) Mark the location of
- $\frac{9}{4}$



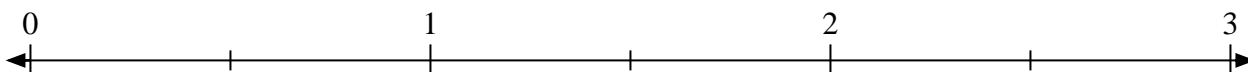
- 7) Mark the location of
- $\frac{18}{7}$



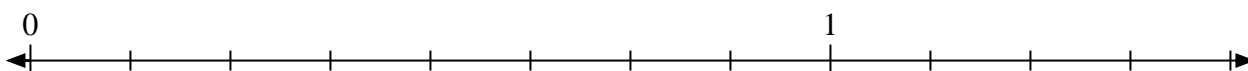
- 8) Mark the location of
- $\frac{6}{3}$



- 9) Mark the location of
- $\frac{3}{2}$



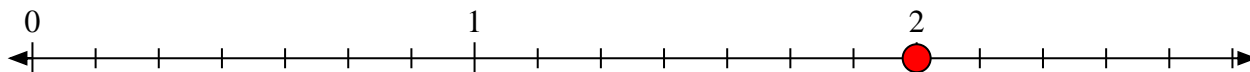
- 10) Mark the location of
- $\frac{10}{8}$





Solve each problem.

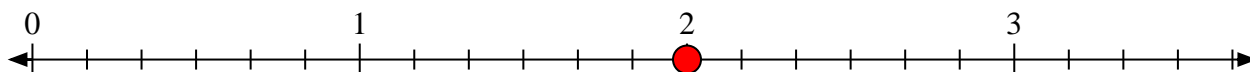
- 1) Mark the location of
- $\frac{14}{7}$



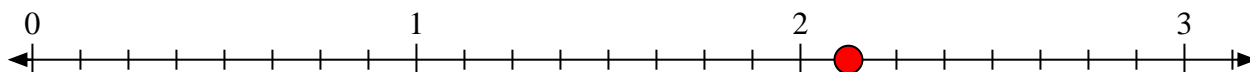
- 2) Mark the location of
- $\frac{5}{3}$



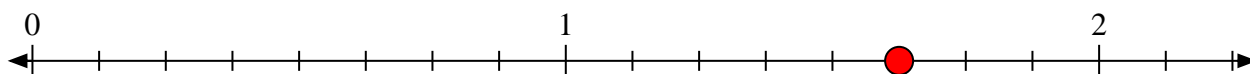
- 3) Mark the location of
- $\frac{12}{6}$



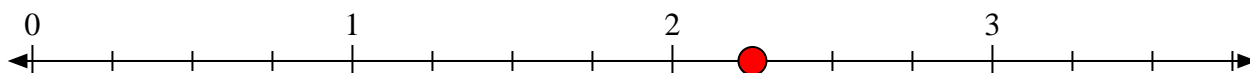
- 4) Mark the location of
- $\frac{17}{8}$



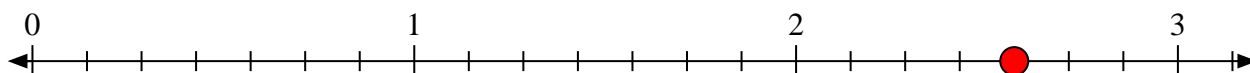
- 5) Mark the location of
- $\frac{13}{8}$




- 6) Mark the location of
- $\frac{9}{4}$



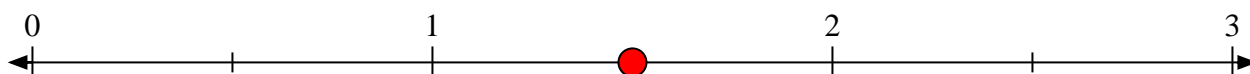
- 7) Mark the location of
- $\frac{18}{7}$



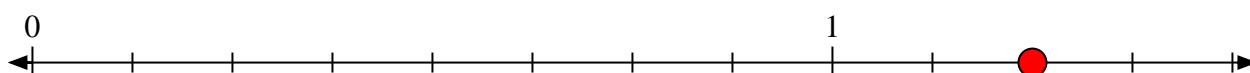
- 8) Mark the location of
- $\frac{6}{3}$



- 9) Mark the location of
- $\frac{3}{2}$




- 10) Mark the location of
- $\frac{10}{8}$






Solve each problem.

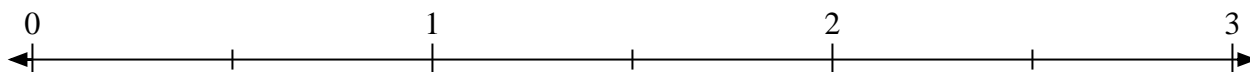
- 1) Mark the location of
- $\frac{6}{3}$



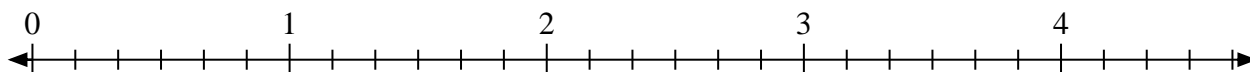
- 2) Mark the location of
- $\frac{5}{4}$



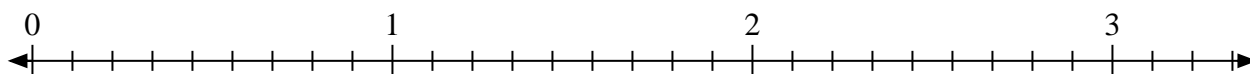
- 3) Mark the location of
- $\frac{3}{2}$




- 4) Mark the location of
- $\frac{12}{6}$



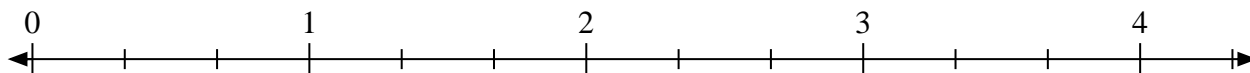
- 5) Mark the location of
- $\frac{20}{9}$



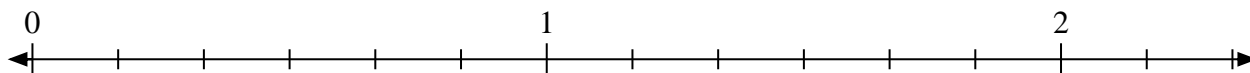
- 6) Mark the location of
- $\frac{4}{2}$



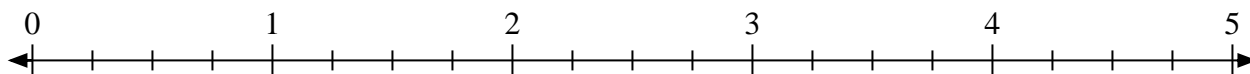
- 7) Mark the location of
- $\frac{5}{3}$



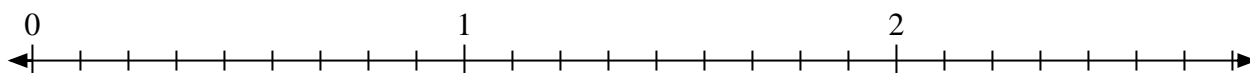
- 8) Mark the location of
- $\frac{11}{6}$



- 9) Mark the location of
- $\frac{9}{4}$




- 10) Mark the location of
- $\frac{14}{9}$






Solve each problem.

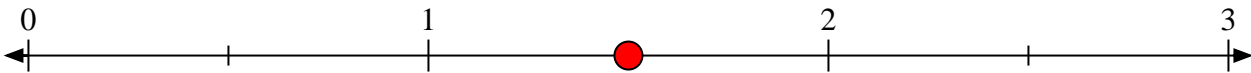
- 1) Mark the location of
- $\frac{6}{3}$



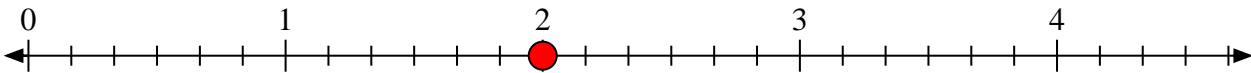
- 2) Mark the location of
- $\frac{5}{4}$



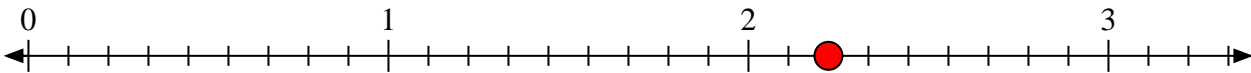
- 3) Mark the location of
- $\frac{3}{2}$




- 4) Mark the location of
- $\frac{12}{6}$




- 5) Mark the location of
- $\frac{20}{9}$



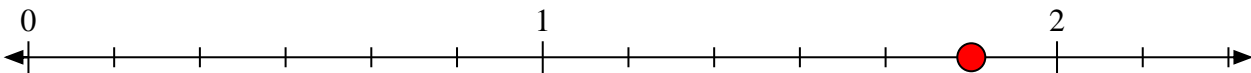
- 6) Mark the location of
- $\frac{4}{2}$



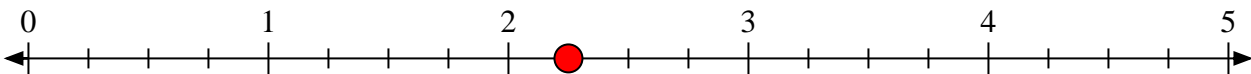
- 7) Mark the location of
- $\frac{5}{3}$



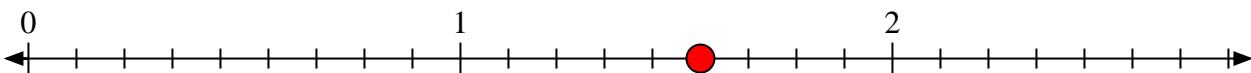
- 8) Mark the location of
- $\frac{11}{6}$



- 9) Mark the location of
- $\frac{9}{4}$



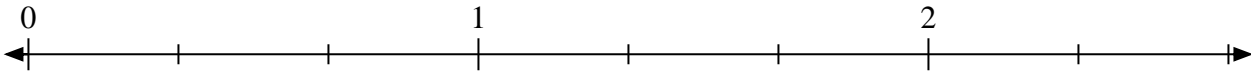
- 10) Mark the location of
- $\frac{14}{9}$



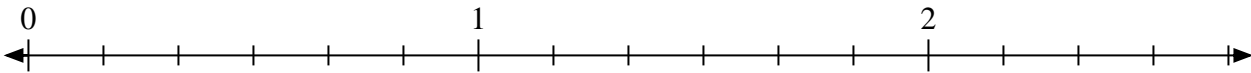


Solve each problem.

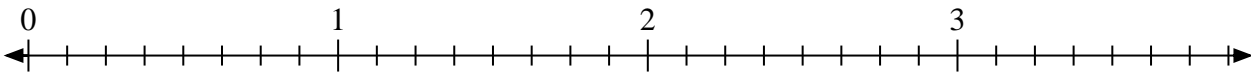
- 1) Mark the location of
- $\frac{4}{3}$




- 2) Mark the location of
- $\frac{15}{6}$



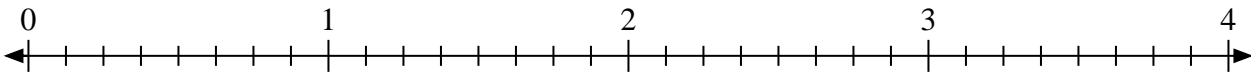
- 3) Mark the location of
- $\frac{11}{8}$



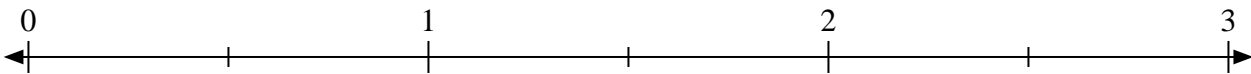
- 4) Mark the location of
- $\frac{10}{4}$




- 5) Mark the location of
- $\frac{21}{8}$



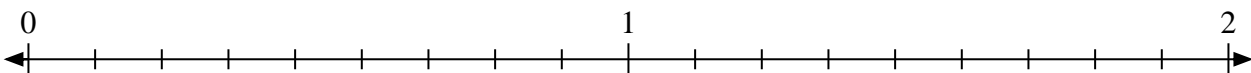
- 6) Mark the location of
- $\frac{4}{2}$



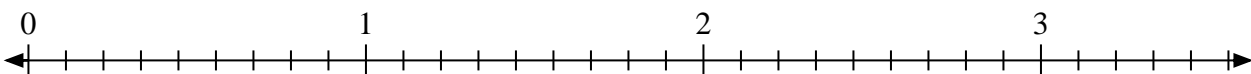
- 7) Mark the location of
- $\frac{3}{2}$



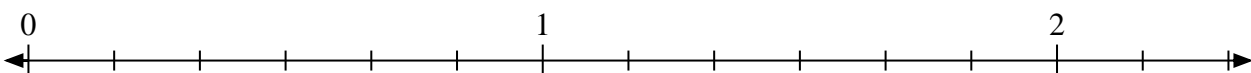
- 8) Mark the location of
- $\frac{14}{9}$



- 9) Mark the location of
- $\frac{20}{9}$



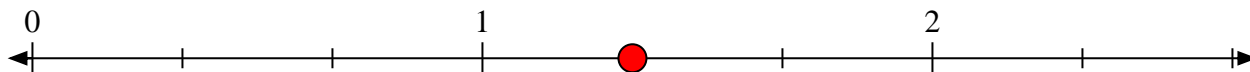
- 10) Mark the location of
- $\frac{9}{6}$



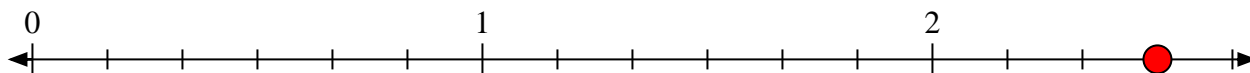


Solve each problem.

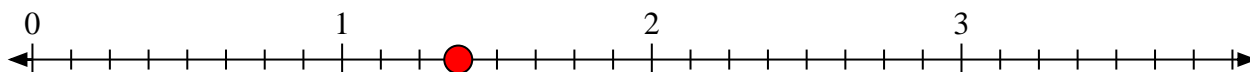
- 1) Mark the location of
- $\frac{4}{3}$




- 2) Mark the location of
- $\frac{15}{6}$



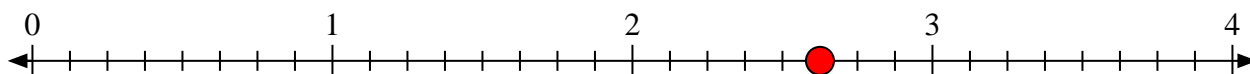
- 3) Mark the location of
- $\frac{11}{8}$



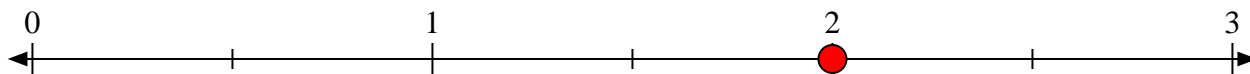
- 4) Mark the location of
- $\frac{10}{4}$




- 5) Mark the location of
- $\frac{21}{8}$



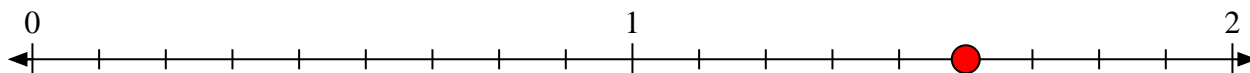
- 6) Mark the location of
- $\frac{4}{2}$



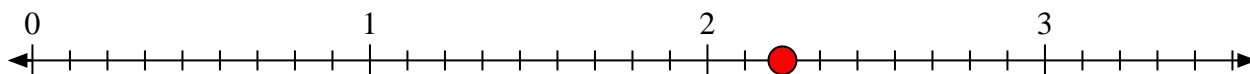
- 7) Mark the location of
- $\frac{3}{2}$



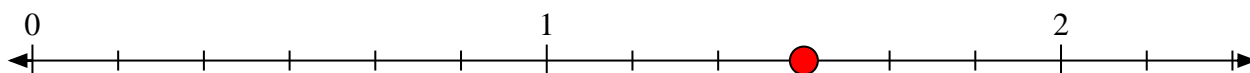
- 8) Mark the location of
- $\frac{14}{9}$



- 9) Mark the location of
- $\frac{20}{9}$



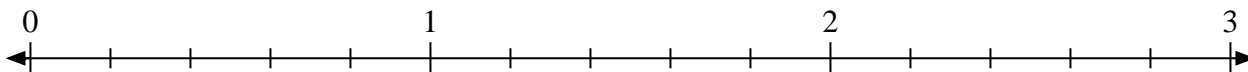
- 10) Mark the location of
- $\frac{9}{6}$



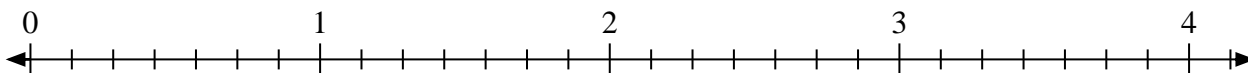


Solve each problem.

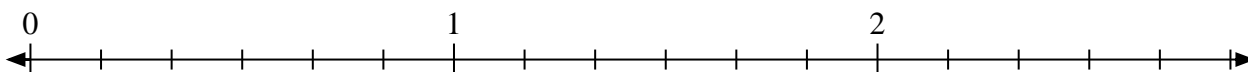
- 1) Mark the location of
- $\frac{8}{5}$



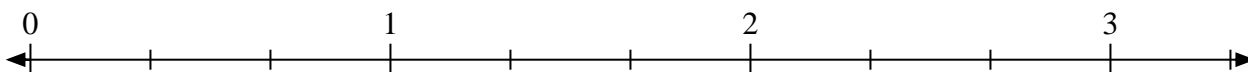
- 2) Mark the location of
- $\frac{14}{7}$




- 3) Mark the location of
- $\frac{10}{6}$



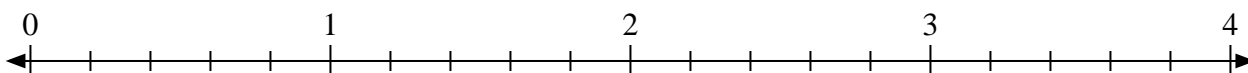
- 4) Mark the location of
- $\frac{7}{3}$



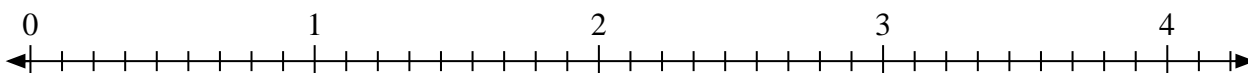
- 5) Mark the location of
- $\frac{3}{2}$



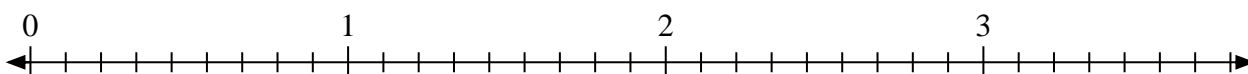
- 6) Mark the location of
- $\frac{11}{5}$



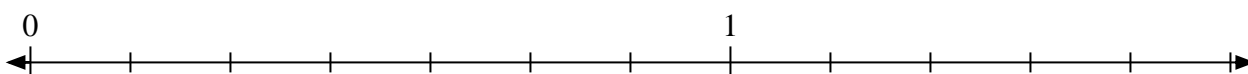
- 7) Mark the location of
- $\frac{15}{9}$




- 8) Mark the location of
- $\frac{21}{9}$



- 9) Mark the location of
- $\frac{8}{7}$



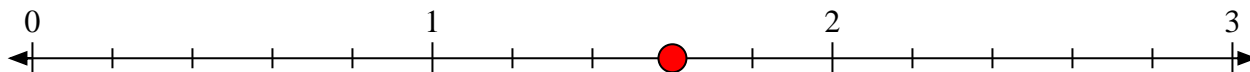
- 10) Mark the location of
- $\frac{6}{2}$



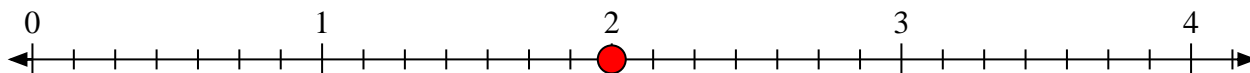


Solve each problem.

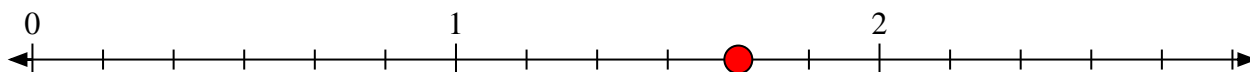
- 1) Mark the location of
- $\frac{8}{5}$



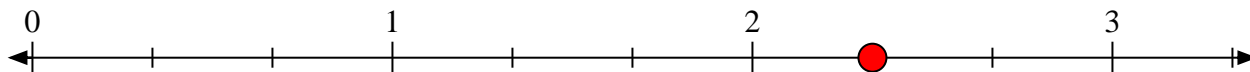
- 2) Mark the location of
- $\frac{14}{7}$




- 3) Mark the location of
- $\frac{10}{6}$



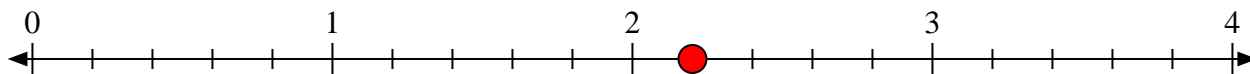
- 4) Mark the location of
- $\frac{7}{3}$



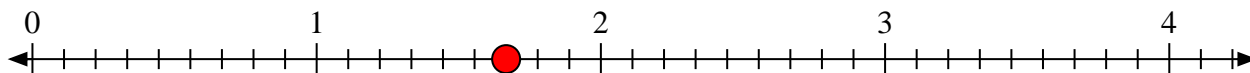
- 5) Mark the location of
- $\frac{3}{2}$



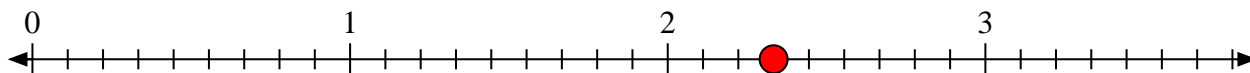
- 6) Mark the location of
- $\frac{11}{5}$



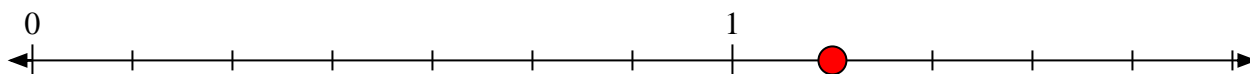
- 7) Mark the location of
- $\frac{15}{9}$



- 8) Mark the location of
- $\frac{21}{9}$



- 9) Mark the location of
- $\frac{8}{7}$




- 10) Mark the location of
- $\frac{6}{2}$



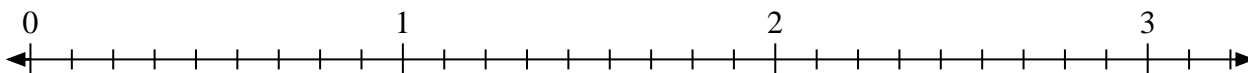


Solve each problem.

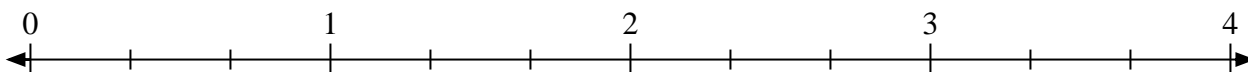
- 1) Mark the location of
- $\frac{3}{2}$



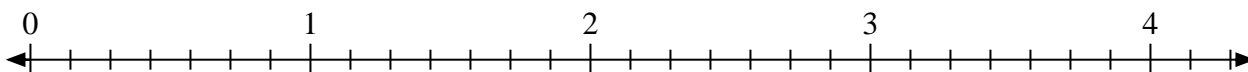
- 2) Mark the location of
- $\frac{26}{9}$




- 3) Mark the location of
- $\frac{6}{3}$



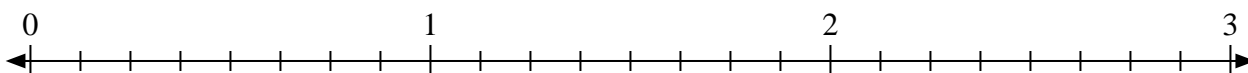
- 4) Mark the location of
- $\frac{14}{7}$



- 5) Mark the location of
- $\frac{5}{2}$



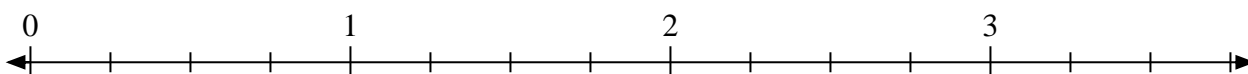
- 6) Mark the location of
- $\frac{22}{8}$



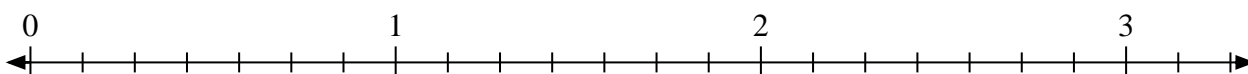
- 7) Mark the location of
- $\frac{12}{9}$



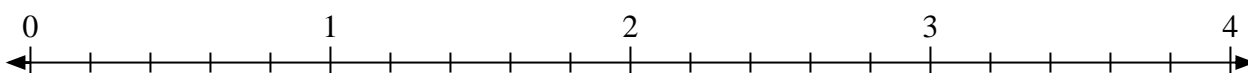
- 8) Mark the location of
- $\frac{11}{4}$



- 9) Mark the location of
- $\frac{8}{7}$




- 10) Mark the location of
- $\frac{11}{5}$



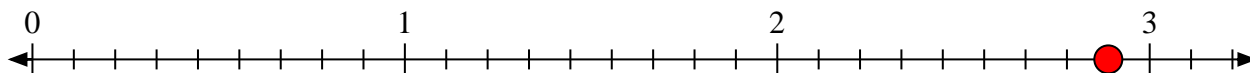


Solve each problem.

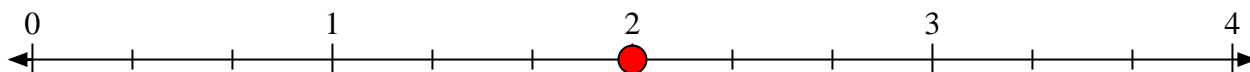
- 1) Mark the location of
- $\frac{3}{2}$



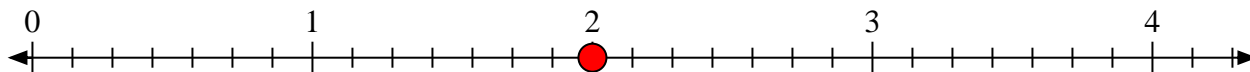
- 2) Mark the location of
- $\frac{26}{9}$




- 3) Mark the location of
- $\frac{6}{3}$



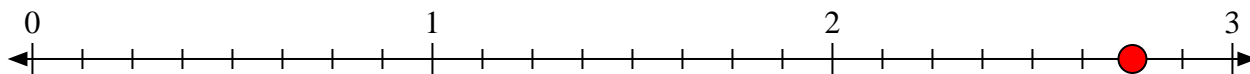
- 4) Mark the location of
- $\frac{14}{7}$




- 5) Mark the location of
- $\frac{5}{2}$



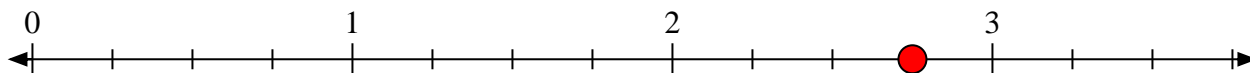
- 6) Mark the location of
- $\frac{22}{8}$



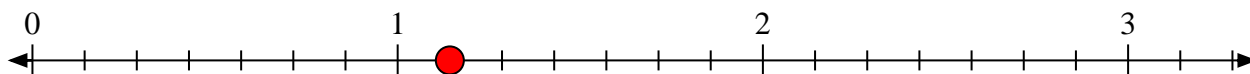
- 7) Mark the location of
- $\frac{12}{9}$



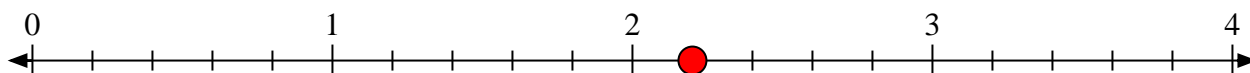
- 8) Mark the location of
- $\frac{11}{4}$



- 9) Mark the location of
- $\frac{8}{7}$



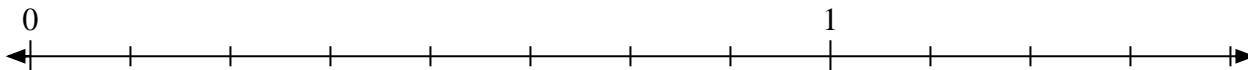
- 10) Mark the location of
- $\frac{11}{5}$



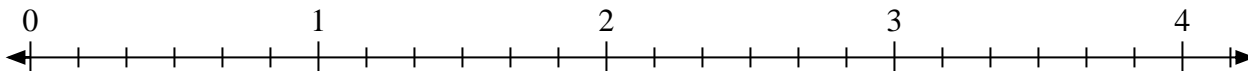


Solve each problem.

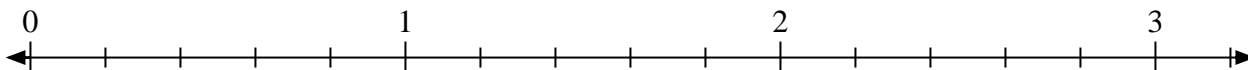
- 1) Mark the location of
- $\frac{9}{8}$



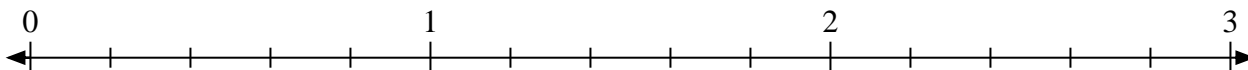
- 2) Mark the location of
- $\frac{11}{6}$



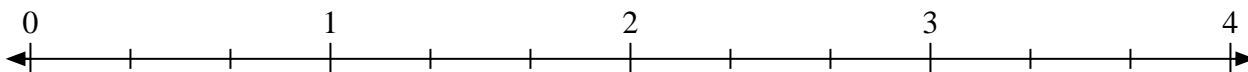
- 3) Mark the location of
- $\frac{12}{5}$




- 4) Mark the location of
- $\frac{11}{5}$



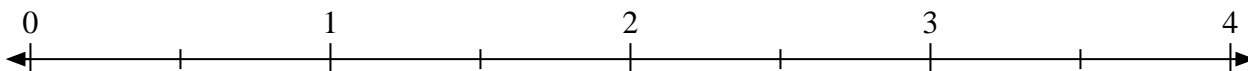
- 5) Mark the location of
- $\frac{4}{3}$



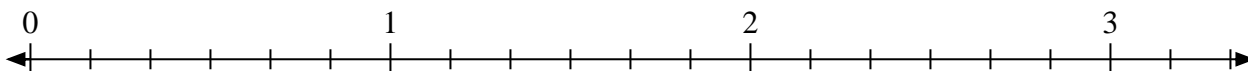
- 6) Mark the location of
- $\frac{8}{4}$



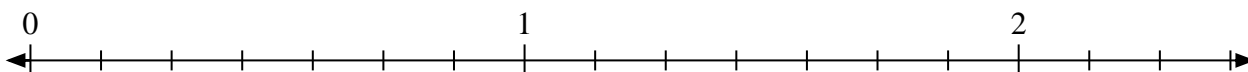
- 7) Mark the location of
- $\frac{5}{2}$



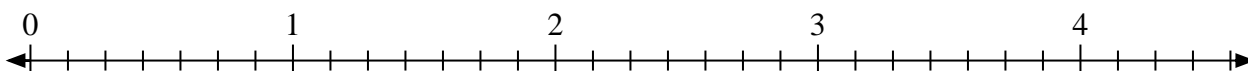
- 8) Mark the location of
- $\frac{17}{6}$



- 9) Mark the location of
- $\frac{11}{7}$



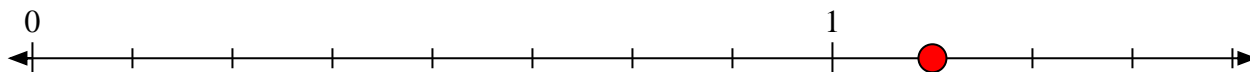
- 10) Mark the location of
- $\frac{16}{7}$



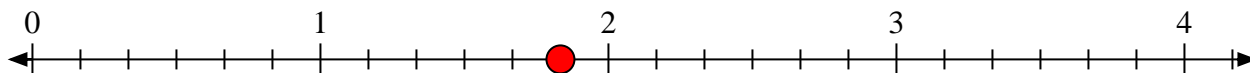


Solve each problem.

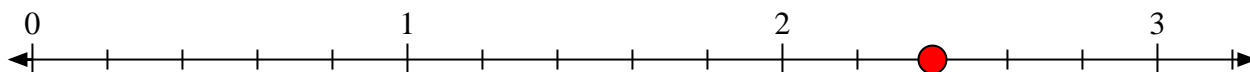
- 1) Mark the location of
- $\frac{9}{8}$



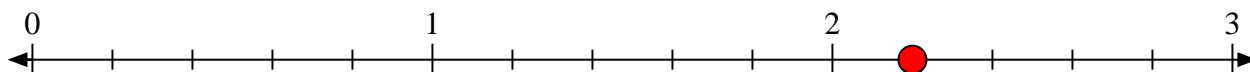
- 2) Mark the location of
- $\frac{11}{6}$



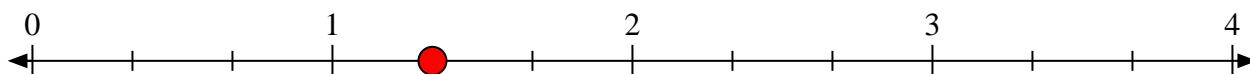
- 3) Mark the location of
- $\frac{12}{5}$




- 4) Mark the location of
- $\frac{11}{5}$



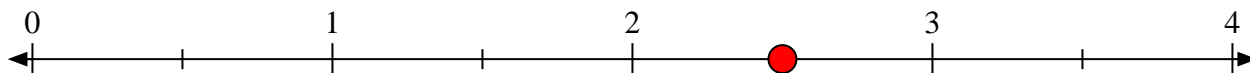
- 5) Mark the location of
- $\frac{4}{3}$



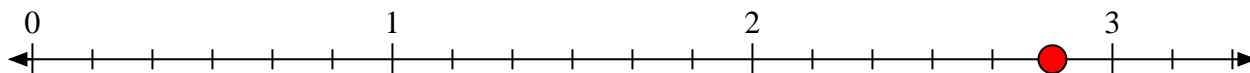
- 6) Mark the location of
- $\frac{8}{4}$



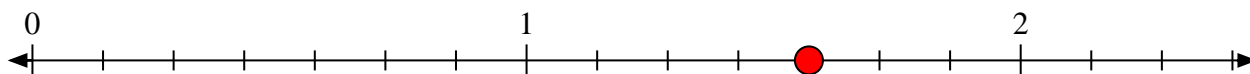
- 7) Mark the location of
- $\frac{5}{2}$



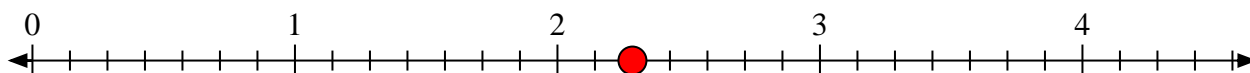
- 8) Mark the location of
- $\frac{17}{6}$



- 9) Mark the location of
- $\frac{11}{7}$




- 10) Mark the location of
- $\frac{16}{7}$






Solve each problem.

- 1) Mark the location of
- $\frac{12}{5}$



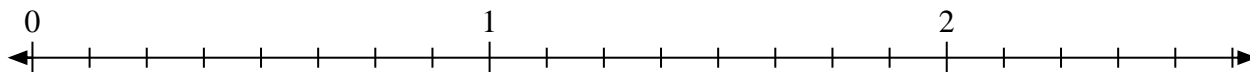
- 2) Mark the location of
- $\frac{5}{4}$



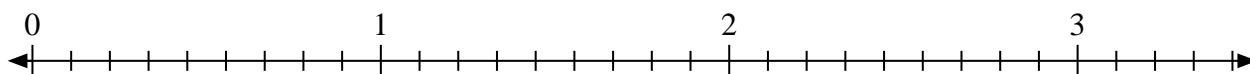
- 3) Mark the location of
- $\frac{5}{2}$



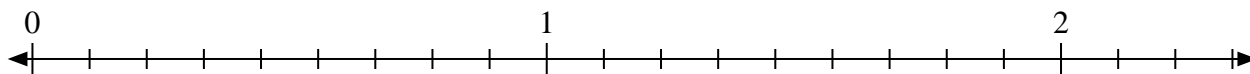
- 4) Mark the location of
- $\frac{10}{8}$



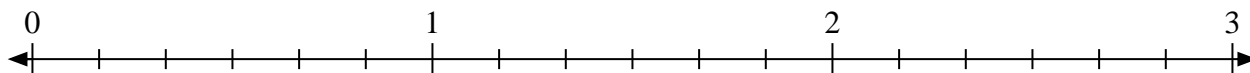
- 5) Mark the location of
- $\frac{18}{9}$



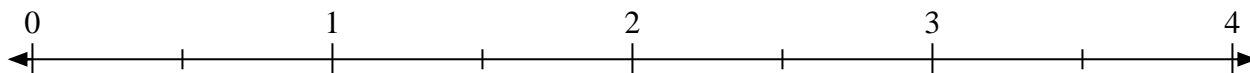
- 6) Mark the location of
- $\frac{19}{9}$



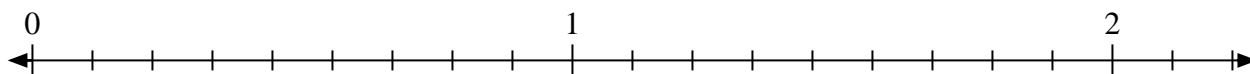
- 7) Mark the location of
- $\frac{17}{6}$



- 8) Mark the location of
- $\frac{4}{2}$



- 9) Mark the location of
- $\frac{15}{9}$




- 10) Mark the location of
- $\frac{9}{5}$



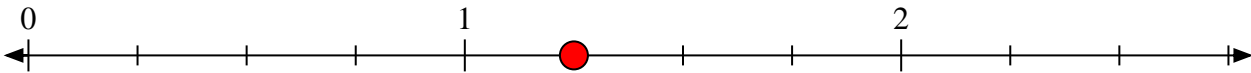


Solve each problem.


- 1) Mark the location of
- $\frac{12}{5}$



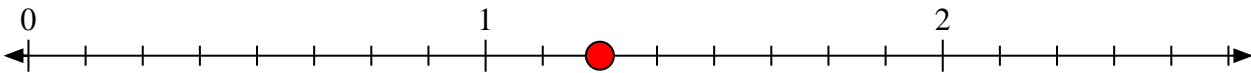
- 2) Mark the location of
- $\frac{5}{4}$



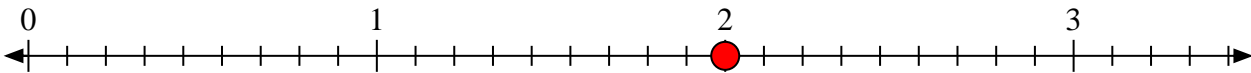
- 3) Mark the location of
- $\frac{5}{2}$



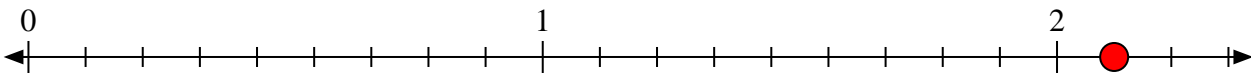
- 4) Mark the location of
- $\frac{10}{8}$



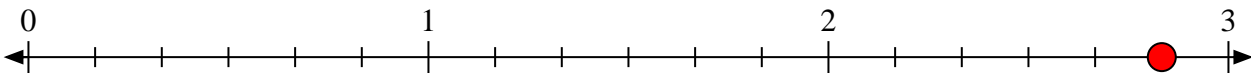
- 5) Mark the location of
- $\frac{18}{9}$



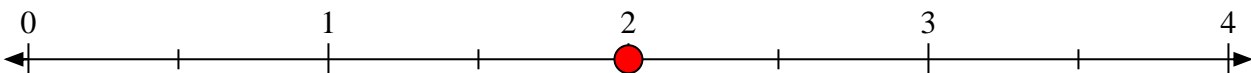
- 6) Mark the location of
- $\frac{19}{9}$



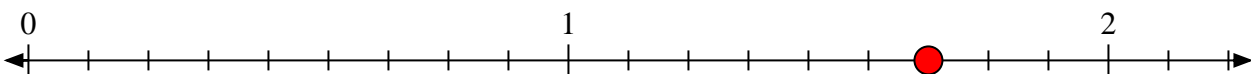
- 7) Mark the location of
- $\frac{17}{6}$



- 8) Mark the location of
- $\frac{4}{2}$



- 9) Mark the location of
- $\frac{15}{9}$




- 10) Mark the location of
- $\frac{9}{5}$



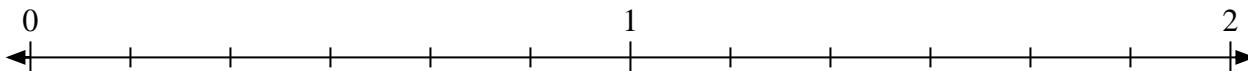


Solve each problem.

- 1) Mark the location of
- $\frac{9}{7}$



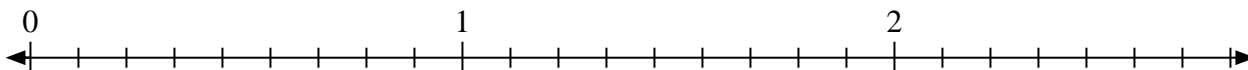
- 2) Mark the location of
- $\frac{7}{6}$



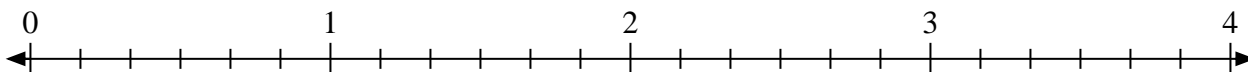
- 3) Mark the location of
- $\frac{5}{4}$



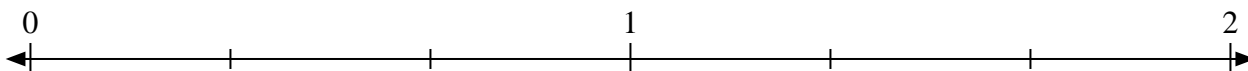
- 4) Mark the location of
- $\frac{23}{9}$



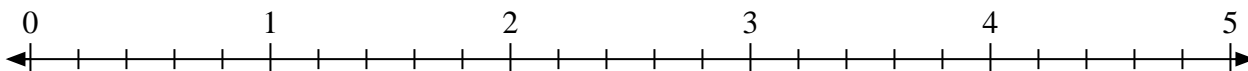
- 5) Mark the location of
- $\frac{16}{6}$




- 6) Mark the location of
- $\frac{5}{3}$



- 7) Mark the location of
- $\frac{13}{5}$



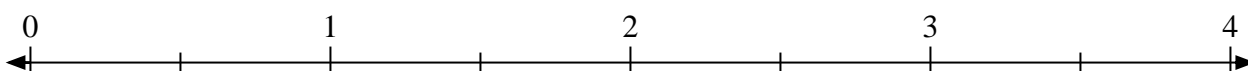
- 8) Mark the location of
- $\frac{8}{7}$



- 9) Mark the location of
- $\frac{8}{5}$




- 10) Mark the location of
- $\frac{5}{2}$



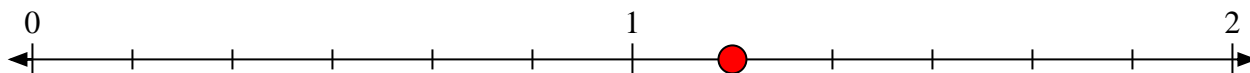


Solve each problem.

- 1) Mark the location of
- $\frac{9}{7}$



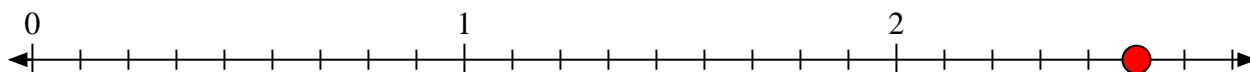
- 2) Mark the location of
- $\frac{7}{6}$



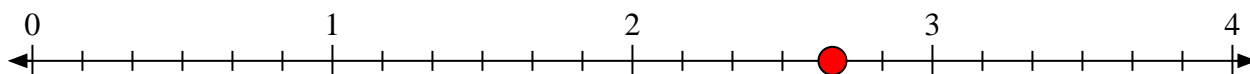
- 3) Mark the location of
- $\frac{5}{4}$



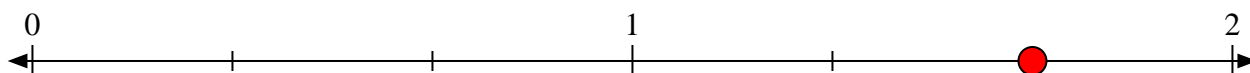
- 4) Mark the location of
- $\frac{23}{9}$



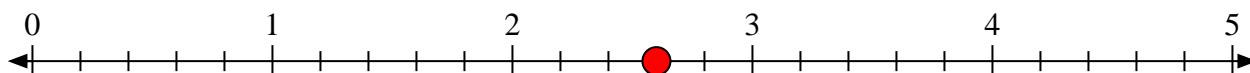
- 5) Mark the location of
- $\frac{16}{6}$



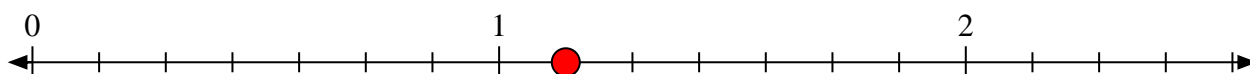
- 6) Mark the location of
- $\frac{5}{3}$



- 7) Mark the location of
- $\frac{13}{5}$



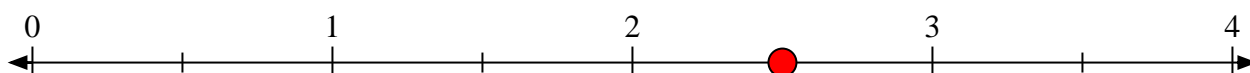
- 8) Mark the location of
- $\frac{8}{7}$



- 9) Mark the location of
- $\frac{8}{5}$



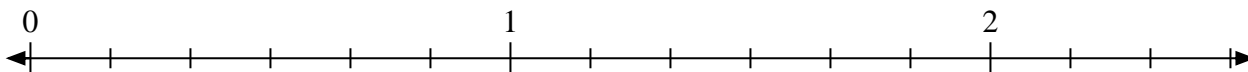
- 10) Mark the location of
- $\frac{5}{2}$



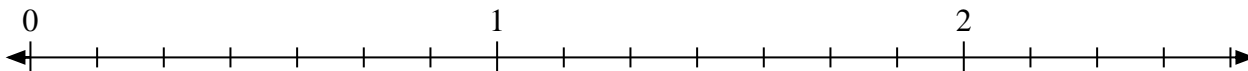


Solve each problem.

- 1) Mark the location of
- $\frac{11}{6}$



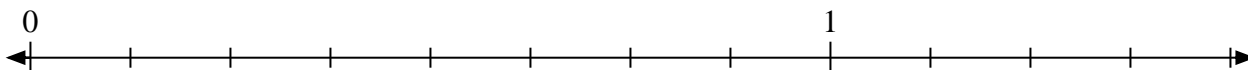
- 2) Mark the location of
- $\frac{14}{7}$



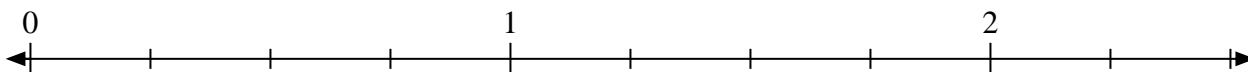
- 3) Mark the location of
- $\frac{6}{4}$



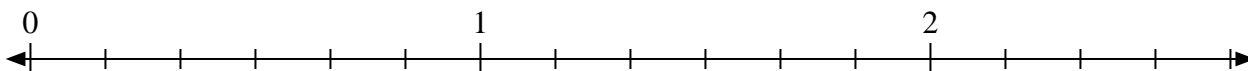
- 4) Mark the location of
- $\frac{11}{8}$



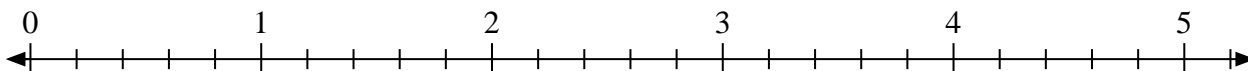
- 5) Mark the location of
- $\frac{8}{4}$



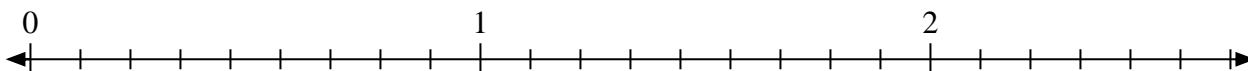
- 6) Mark the location of
- $\frac{15}{6}$



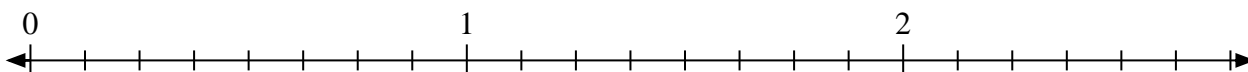
- 7) Mark the location of
- $\frac{12}{5}$



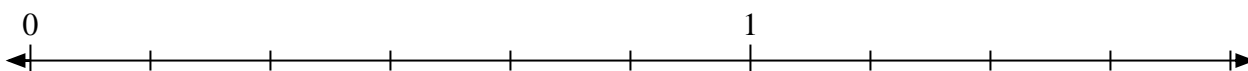
- 8) Mark the location of
- $\frac{11}{9}$



- 9) Mark the location of
- $\frac{14}{8}$



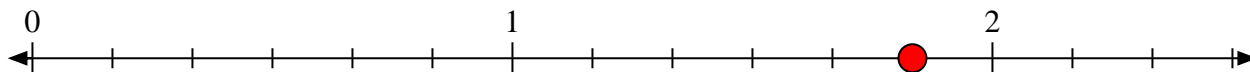
- 10) Mark the location of
- $\frac{9}{6}$



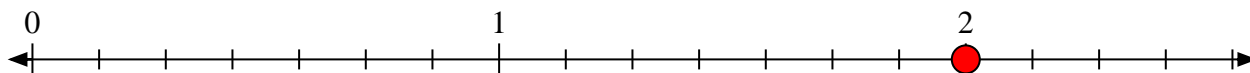


Solve each problem.

- 1) Mark the location of
- $\frac{11}{6}$



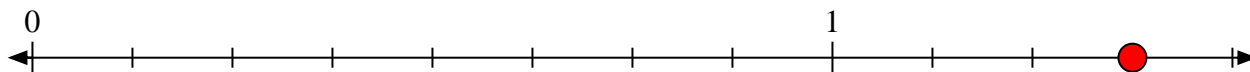
- 2) Mark the location of
- $\frac{14}{7}$



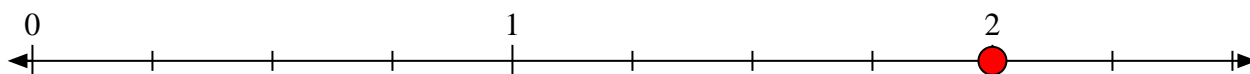
- 3) Mark the location of
- $\frac{6}{4}$



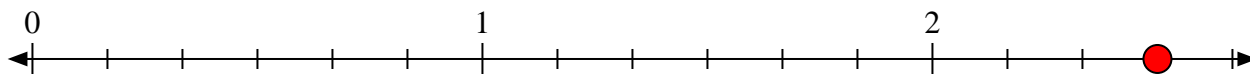
- 4) Mark the location of
- $\frac{11}{8}$



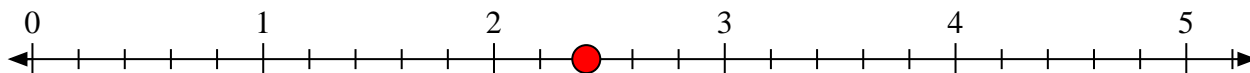
- 5) Mark the location of
- $\frac{8}{4}$



- 6) Mark the location of
- $\frac{15}{6}$



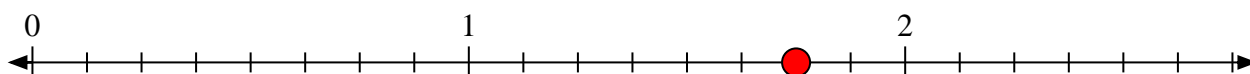
- 7) Mark the location of
- $\frac{12}{5}$



- 8) Mark the location of
- $\frac{11}{9}$



- 9) Mark the location of
- $\frac{14}{8}$



- 10) Mark the location of
- $\frac{9}{6}$

