





Solve each problem.

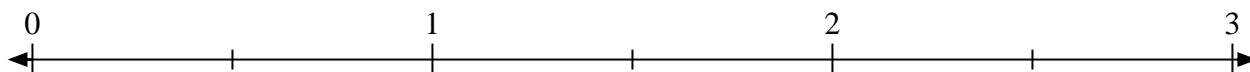
- 1) Mark the location of
- $\frac{6}{3}$



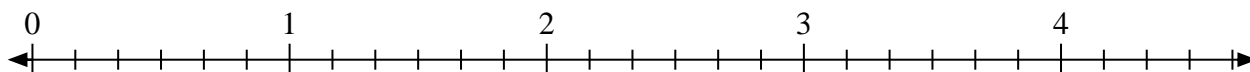
- 2) Mark the location of
- $\frac{5}{4}$



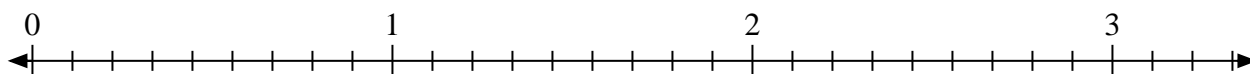
- 3) Mark the location of
- $\frac{3}{2}$




- 4) Mark the location of
- $\frac{12}{6}$



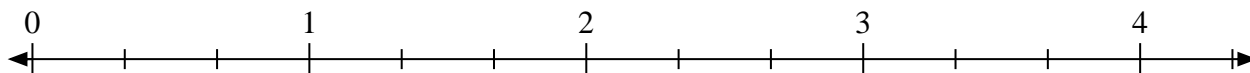
- 5) Mark the location of
- $\frac{20}{9}$



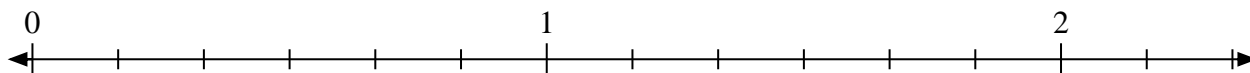
- 6) Mark the location of
- $\frac{4}{2}$



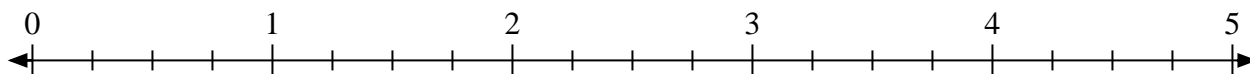
- 7) Mark the location of
- $\frac{5}{3}$



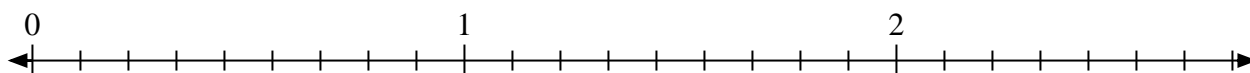
- 8) Mark the location of
- $\frac{11}{6}$



- 9) Mark the location of
- $\frac{9}{4}$




- 10) Mark the location of
- $\frac{14}{9}$






Solve each problem.

- 1) Mark the location of
- $\frac{6}{3}$



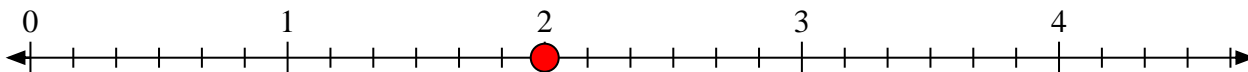
- 2) Mark the location of
- $\frac{5}{4}$



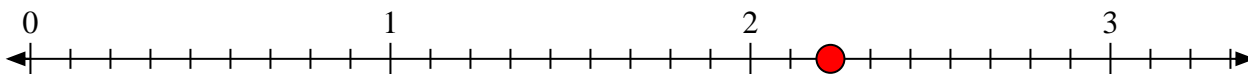
- 3) Mark the location of
- $\frac{3}{2}$




- 4) Mark the location of
- $\frac{12}{6}$



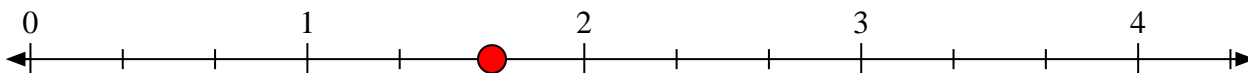
- 5) Mark the location of
- $\frac{20}{9}$



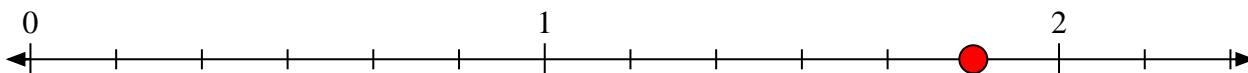
- 6) Mark the location of
- $\frac{4}{2}$



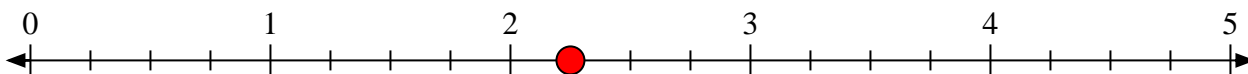
- 7) Mark the location of
- $\frac{5}{3}$



- 8) Mark the location of
- $\frac{11}{6}$



- 9) Mark the location of
- $\frac{9}{4}$



- 10) Mark the location of
- $\frac{14}{9}$

