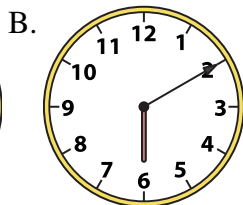
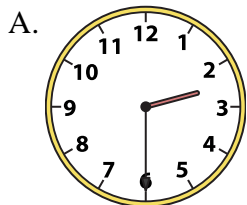




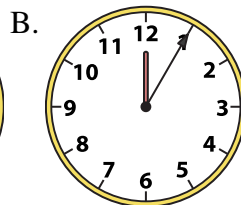
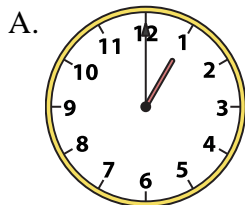
Determine which clock accurately shows the time.

Answers


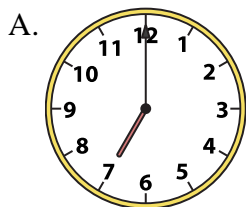
1) 2:30



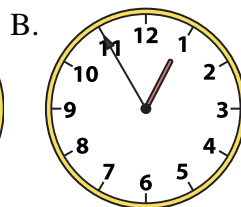
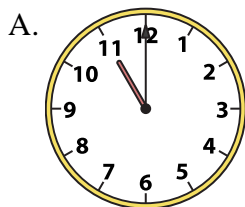
2) 1:00



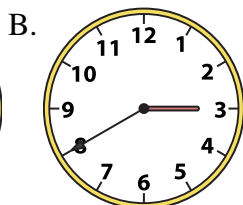
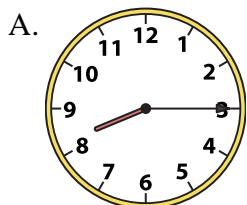
3) 7:00



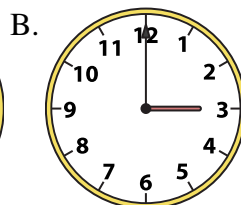
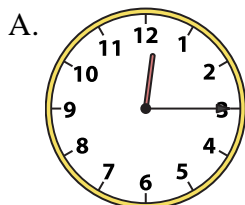
4) 11:00




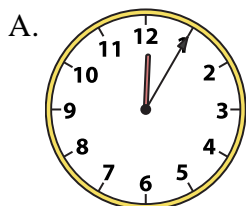
5) 8:15



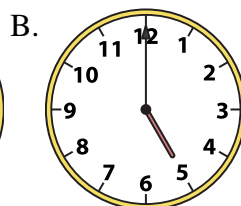
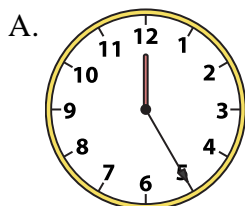
6) 3:00




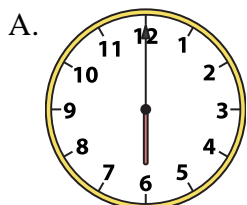
7) 1:00



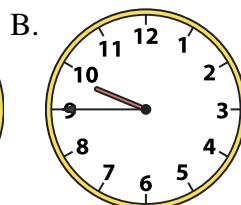
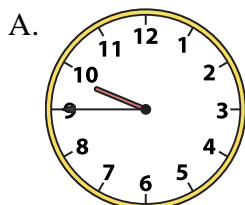
8) 5:00




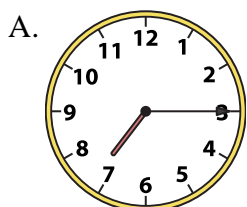
9) 6:00





10) 9:45



11) 7:15



12) 5:30



1. _____
2. _____
3. _____
4. _____
5. _____
6. _____
7. _____
8. _____
9. _____
10. _____
11. _____
12. _____

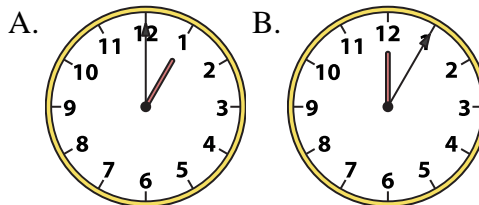
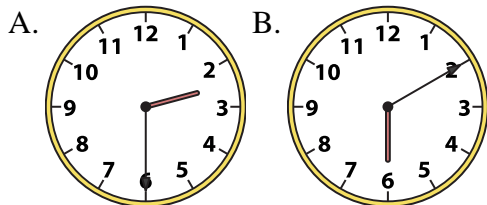


Determine which clock accurately shows the time.

Answers

1) 2:30

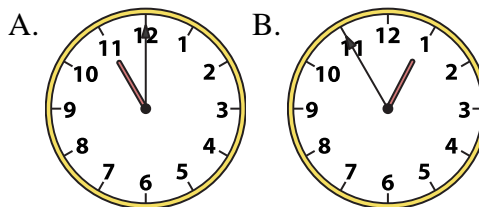
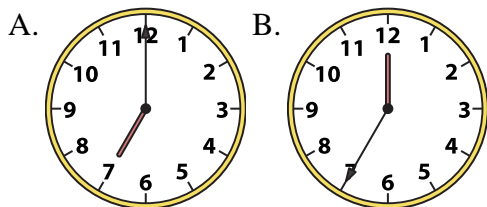
2) 1:00



1. **A**

3) 7:00

4) 11:00



2. **A**

3. **A**

4. **A**

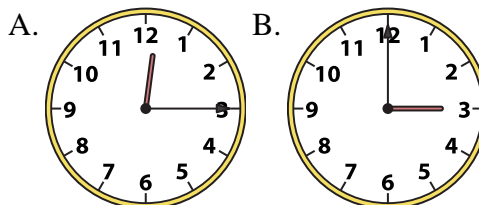
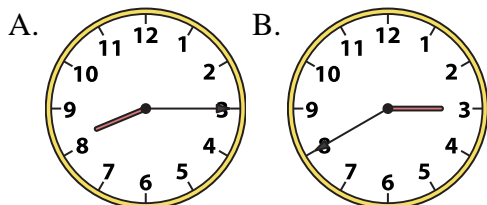
5. **A**

6. **B**

7. **B**

5) 8:15

6) 3:00



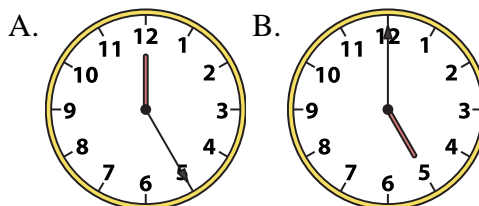
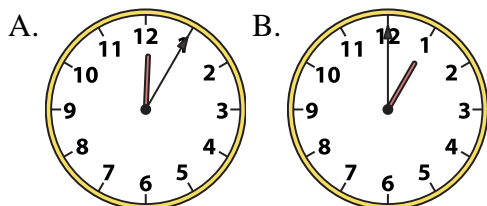
8. **B**

9. **A**

10. **B**

7) 1:00

8) 5:00

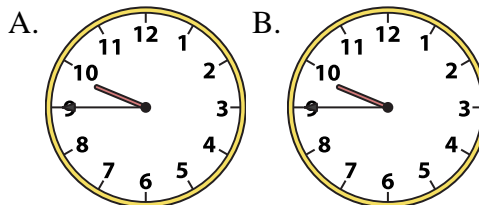
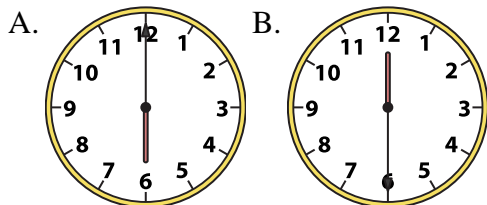


11. **A**

12. **A**

9) 6:00

10) 9:45



11) 7:15

12) 5:30

