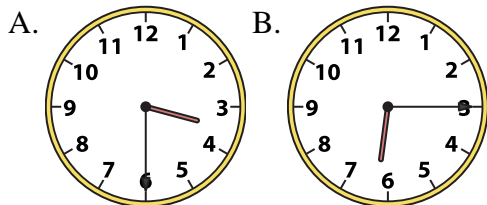




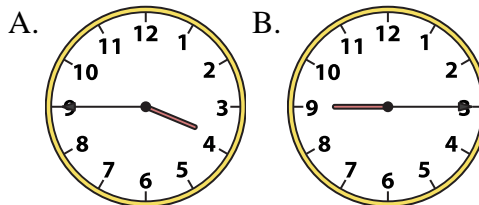
Determine which clock accurately shows the time.

**Answers**

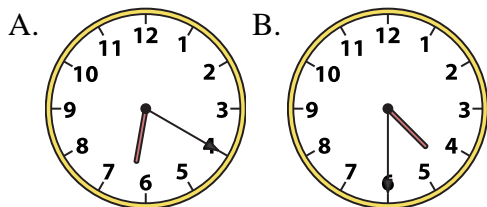
1) 3:30



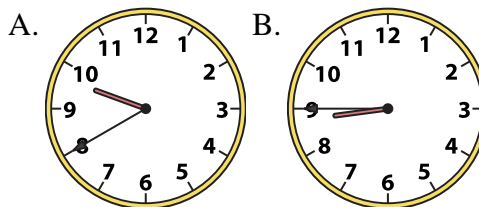
2) 3:45



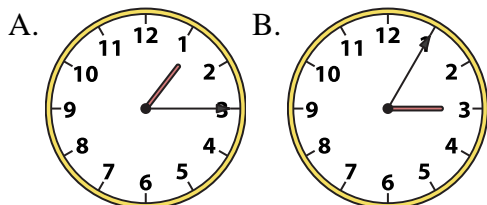
3) 4:30



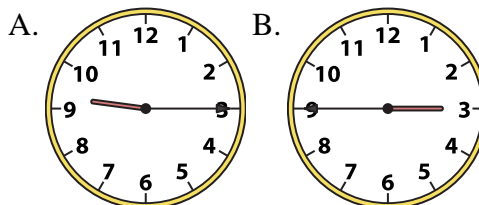
4) 8:45



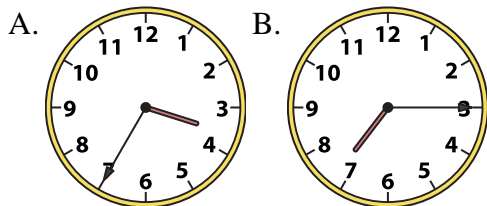
5) 1:15



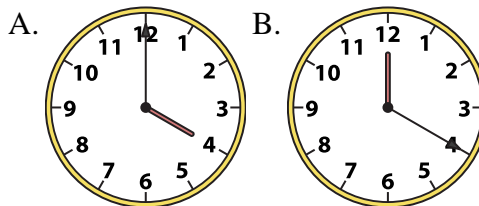
6) 9:15



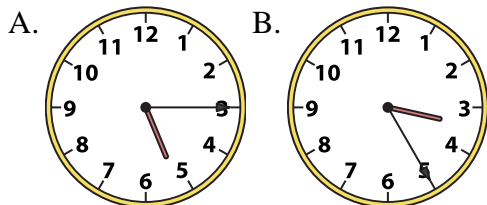
7) 7:15



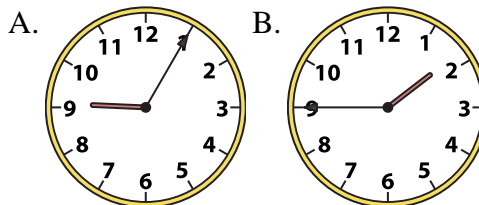
8) 4:00



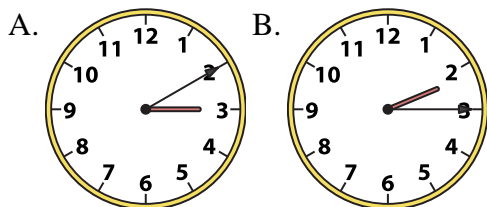
9) 5:15



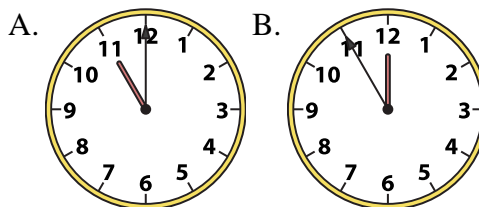
10) 1:45



11) 2:15



12) 11:00



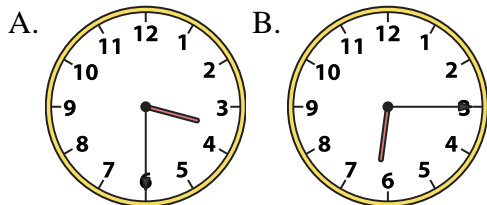
1. \_\_\_\_\_
2. \_\_\_\_\_
3. \_\_\_\_\_
4. \_\_\_\_\_
5. \_\_\_\_\_
6. \_\_\_\_\_
7. \_\_\_\_\_
8. \_\_\_\_\_
9. \_\_\_\_\_
10. \_\_\_\_\_
11. \_\_\_\_\_
12. \_\_\_\_\_



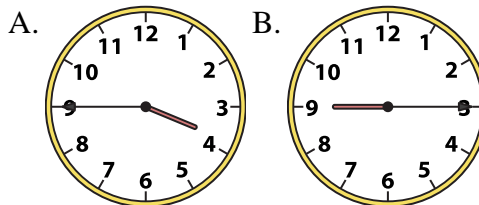
Determine which clock accurately shows the time.

**Answers**

1) 3:30

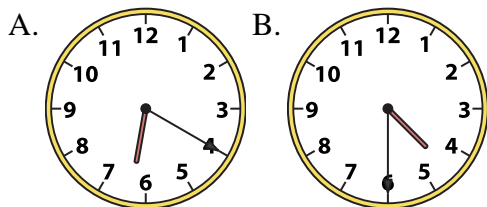


2) 3:45

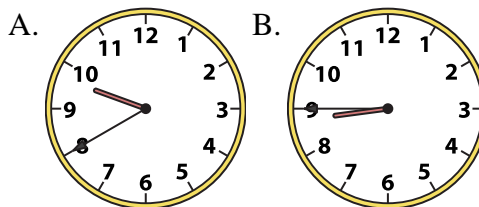


1. **A**

3) 4:30



4) 8:45



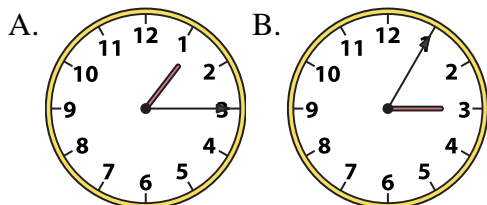
2. **A**

3. **B**

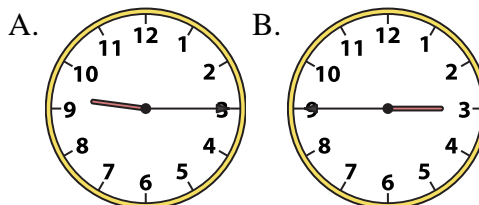
4. **B**

5. **A**

5) 1:15



6) 9:15



6. **A**

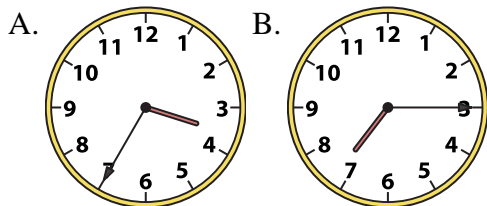
7. **B**

8. **A**

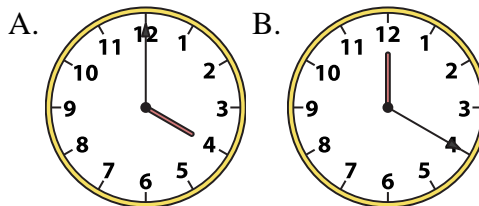
9. **A**

10. **B**

7) 7:15



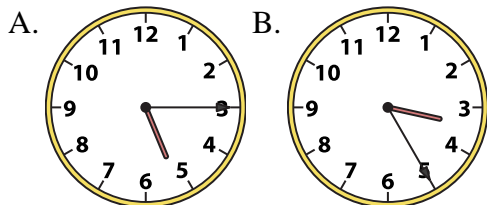
8) 4:00



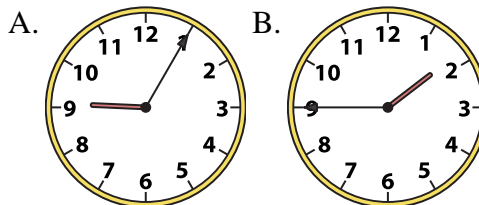
11. **B**

12. **A**

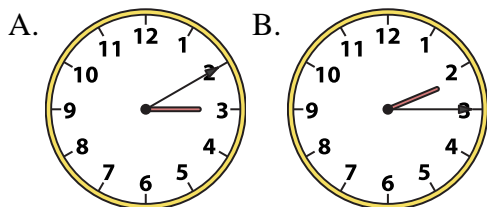
9) 5:15



10) 1:45



11) 2:15



12) 11:00

