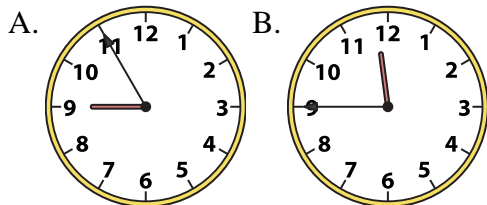




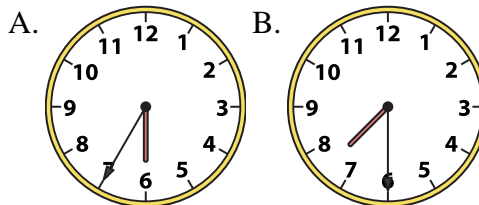
Determine which clock accurately shows the time.

Answers

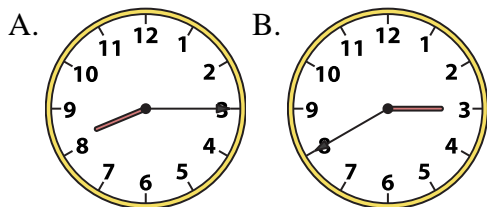
1) 11:45



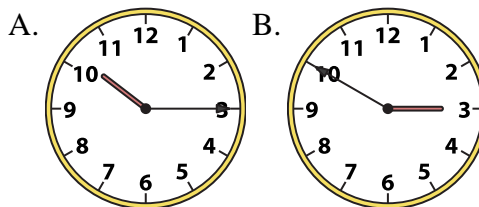
2) 7:30



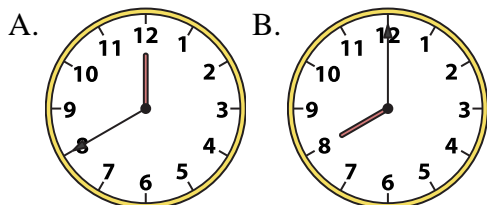
3) 8:15



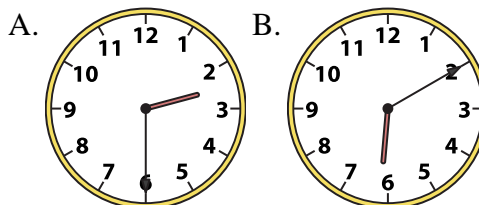
4) 10:15



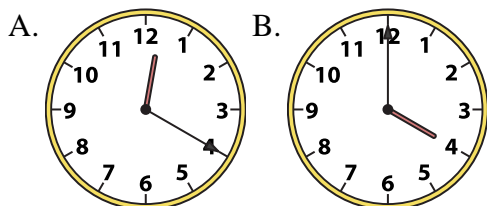
5) 8:00



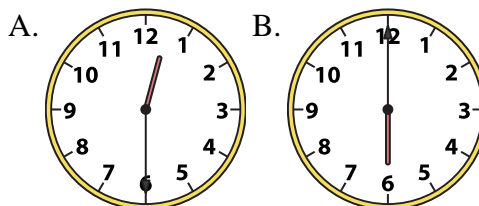
6) 2:30



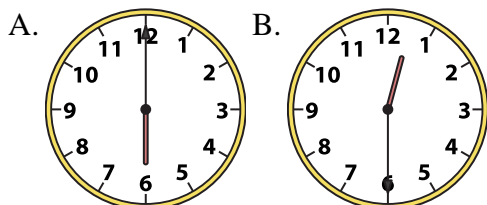
7) 4:00



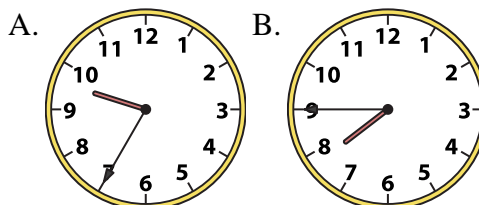
8) 12:30



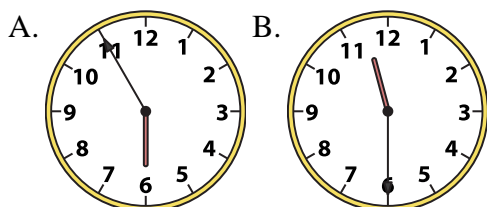
9) 12:30



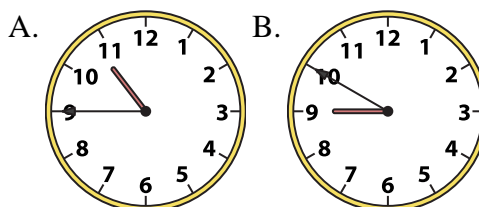
10) 7:45



11) 11:30



12) 10:45



1. _____
2. _____
3. _____
4. _____
5. _____
6. _____
7. _____
8. _____
9. _____
10. _____
11. _____
12. _____

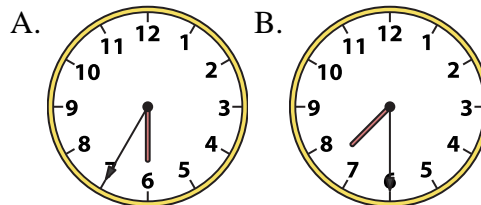
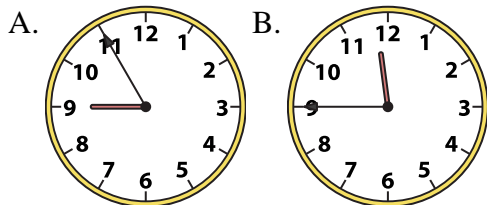


Determine which clock accurately shows the time.

Answers

1) 11:45

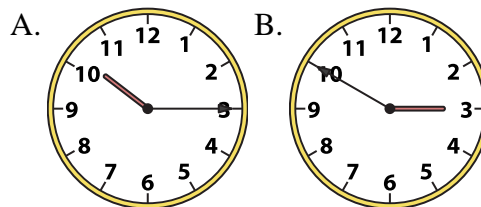
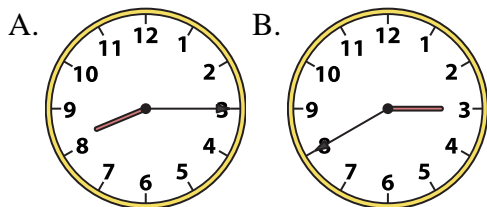
2) 7:30



1. **B**

3) 8:15

4) 10:15



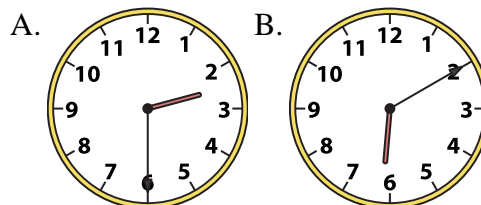
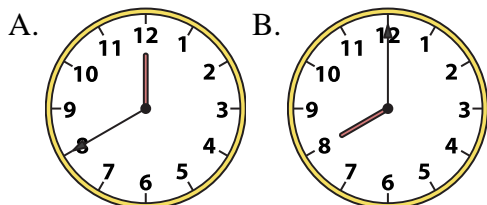
2. **B**

3. **A**

4. **A**

5) 8:00

6) 2:30



5. **B**

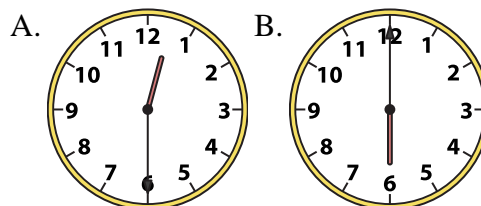
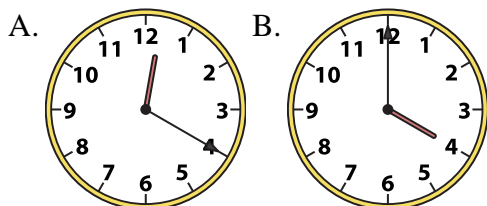
6. **A**

7. **B**

8. **A**

7) 4:00

8) 12:30



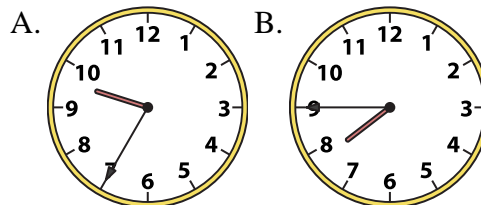
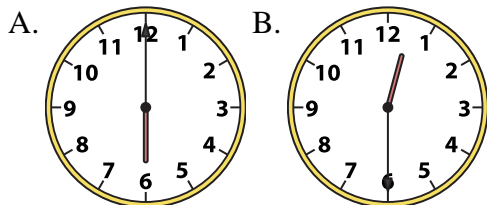
9. **B**

10. **B**

11. **B**

9) 12:30

10) 7:45



12. **A**

11) 11:30

12) 10:45

