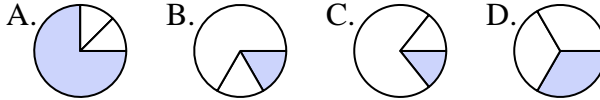




Determine which letter best represents each fraction.

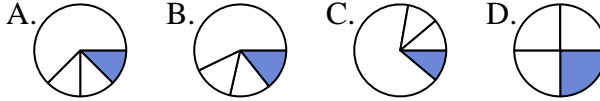
Answers

1) Which choice best represents $\frac{1}{3}$?



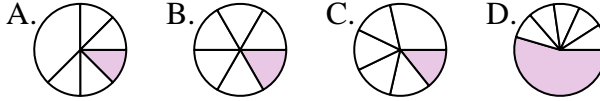
1. _____

2) Which choice best represents $\frac{1}{4}$?



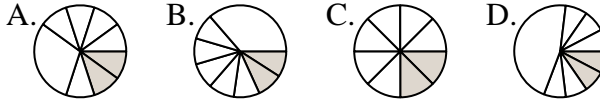
2. _____

3) Which choice best represents $\frac{1}{6}$?



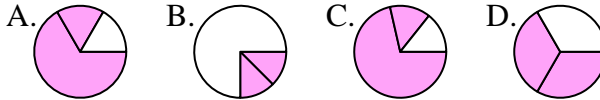
3. _____

4) Which choice best represents $\frac{2}{8}$?



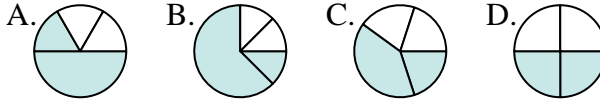
4. _____

5) Which choice best represents $\frac{2}{3}$?



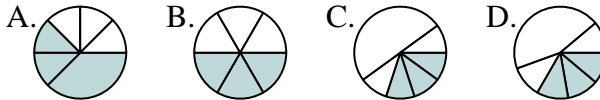
5. _____

6) Which choice best represents $\frac{2}{4}$?



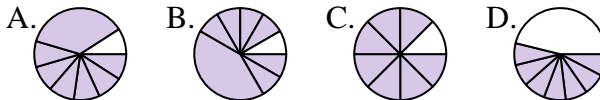
6. _____

7) Which choice best represents $\frac{3}{6}$?



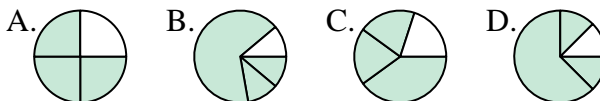
7. _____

8) Which choice best represents $\frac{7}{8}$?



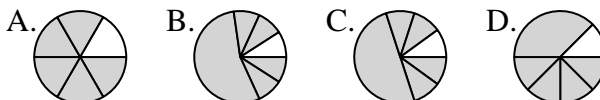
8. _____

9) Which choice best represents $\frac{3}{4}$?



9. _____

10) Which choice best represents $\frac{5}{6}$?



10. _____

11) Which choice best represents $\frac{5}{8}$?



11. _____

12) Which choice best represents $\frac{2}{6}$?



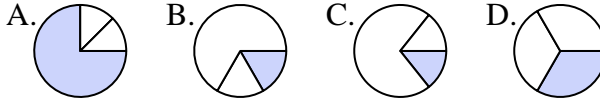
12. _____



Determine which letter best represents each fraction.

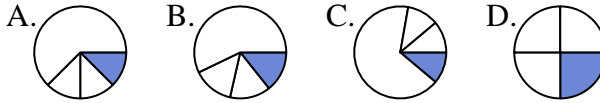
Answers

1) Which choice best represents $\frac{1}{3}$?



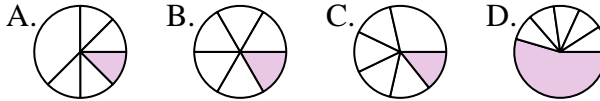
1. **D**

2) Which choice best represents $\frac{1}{4}$?



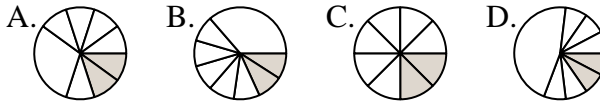
2. **D**

3) Which choice best represents $\frac{1}{6}$?



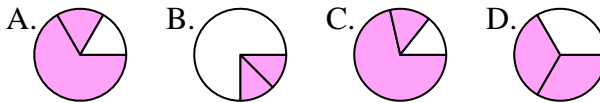
3. **B**

4) Which choice best represents $\frac{2}{8}$?



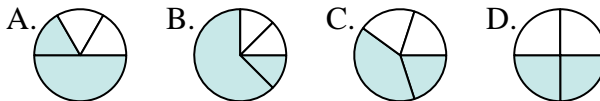
4. **C**

5) Which choice best represents $\frac{2}{3}$?



5. **D**

6) Which choice best represents $\frac{2}{4}$?



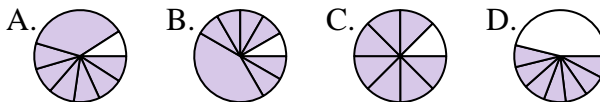
6. **D**

7) Which choice best represents $\frac{3}{6}$?



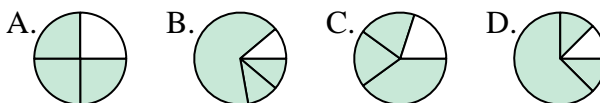
7. **B**

8) Which choice best represents $\frac{7}{8}$?



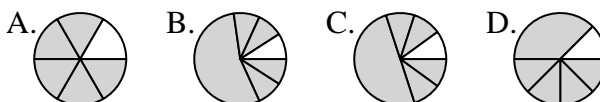
8. **C**

9) Which choice best represents $\frac{3}{4}$?



9. **A**

10) Which choice best represents $\frac{5}{6}$?



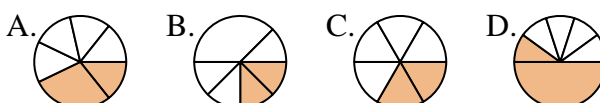
10. **A**

11) Which choice best represents $\frac{5}{8}$?



11. **C**

12) Which choice best represents $\frac{2}{6}$?



12. **C**