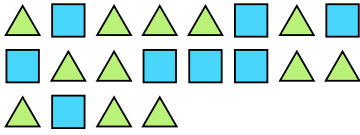





Solve each problem.

Ex) Express the triangles as a fraction of the entire set.



1) Express the stars as a fraction of the entire set.



Answers

Ex. $\frac{12}{20}$

2) Express the moons as a fraction of the entire set.




3) Express the moons as a fraction of the entire set.



4) Express the stars as a fraction of the entire set.



5) Express the triangles as a fraction of the entire set.




6) Express the hearts as a fraction of the entire set.



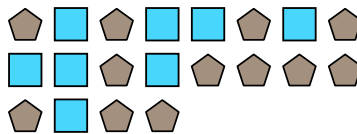
7) Express the hearts as a fraction of the entire set.



8) Express the hearts as a fraction of the entire set.




9) Express the squares as a fraction of the entire set.



10) Express the hearts as a fraction of the entire set.



11) Express the squares as a fraction of the entire set.

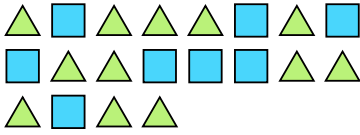


- 1. _____
- 2. _____
- 3. _____
- 4. _____
- 5. _____
- 6. _____
- 7. _____
- 8. _____
- 9. _____
- 10. _____
- 11. _____




Solve each problem.

Ex) Express the triangles as a fraction of the entire set.



1) Express the stars as a fraction of the entire set.



Answers

Ex. $\frac{12}{20}$

2) Express the moons as a fraction of the entire set.



3) Express the moons as a fraction of the entire set.



1. $\frac{3}{12}$

2. $\frac{11}{13}$

3. $\frac{10}{14}$


4. $\frac{8}{19}$

5. $\frac{8}{14}$

4) Express the stars as a fraction of the entire set.



5) Express the triangles as a fraction of the entire set.



6. $\frac{2}{12}$

7. $\frac{9}{22}$

8. $\frac{9}{16}$

6) Express the hearts as a fraction of the entire set.



7) Express the hearts as a fraction of the entire set.




9. $\frac{8}{20}$

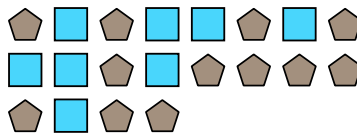
10. $\frac{4}{6}$

11. $\frac{13}{27}$

8) Express the hearts as a fraction of the entire set.




9) Express the squares as a fraction of the entire set.



10) Express the hearts as a fraction of the entire set.



11) Express the squares as a fraction of the entire set.





Solve each problem.

Ex) Express the moons as a fraction of the entire set.



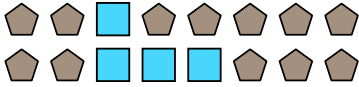
1) Express the stars as a fraction of the entire set.




Answers

Ex. $\frac{15}{22}$

2) Express the squares as a fraction of the entire set.



3) Express the hearts as a fraction of the entire set.



1. _____


2. _____

3. _____


4. _____

5. _____

4) Express the stars as a fraction of the entire set.



5) Express the hearts as a fraction of the entire set.



6. _____

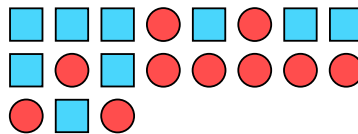
7. _____

8. _____

6) Express the moons as a fraction of the entire set.



7) Express the squares as a fraction of the entire set.



9. _____


10. _____

11. _____

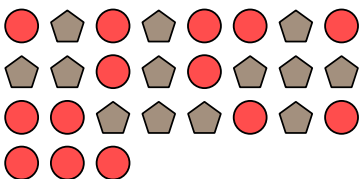
8) Express the stars as a fraction of the entire set.




9) Express the triangles as a fraction of the entire set.



10) Express the circles as a fraction of the entire set.



11) Express the stars as a fraction of the entire set.





Solve each problem.

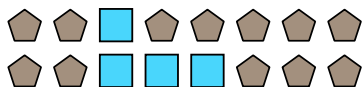
Ex) Express the moons as a fraction of the entire set.




1) Express the stars as a fraction of the entire set.




2) Express the squares as a fraction of the entire set.




3) Express the hearts as a fraction of the entire set.



4) Express the stars as a fraction of the entire set.



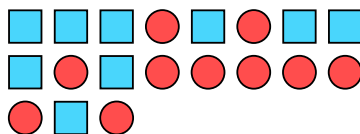
5) Express the hearts as a fraction of the entire set.



6) Express the moons as a fraction of the entire set.




7) Express the squares as a fraction of the entire set.



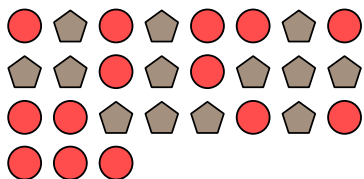
8) Express the stars as a fraction of the entire set.




9) Express the triangles as a fraction of the entire set.



10) Express the circles as a fraction of the entire set.



11) Express the stars as a fraction of the entire set.



Answers

Ex. $\frac{15}{22}$

1. $\frac{3}{13}$

2. $\frac{4}{16}$

3. $\frac{6}{9}$

4. $\frac{2}{17}$

5. $\frac{9}{19}$

6. $\frac{4}{12}$

7. $\frac{9}{19}$

8. $\frac{2}{10}$

9. $\frac{6}{11}$

10. $\frac{14}{27}$

11. $\frac{7}{17}$

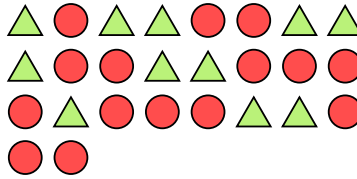


Solve each problem.

Ex) Express the triangles as a fraction of the entire set.



1) Express the circles as a fraction of the entire set.



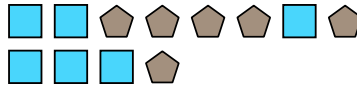
Answers

Ex. $\frac{3}{12}$

2) Express the pentagons as a fraction of the entire set.



3) Express the squares as a fraction of the entire set.



1. _____


2. _____

3. _____

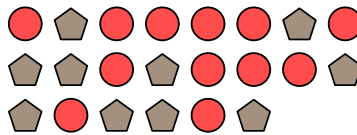
4. _____

5. _____

4) Express the moons as a fraction of the entire set.



5) Express the circles as a fraction of the entire set.



6. _____


7. _____

8. _____

6) Express the triangles as a fraction of the entire set.



7) Express the hearts as a fraction of the entire set.




9. _____


10. _____

11. _____


8) Express the hearts as a fraction of the entire set.



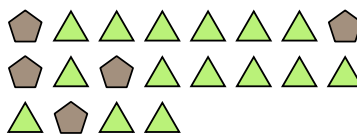
9) Express the hearts as a fraction of the entire set.



10) Express the squares as a fraction of the entire set.



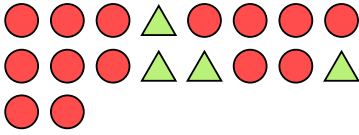
11) Express the triangles as a fraction of the entire set.






Solve each problem.

Ex) Express the triangles as a fraction of the entire set.



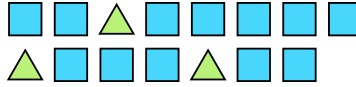
1) Express the moons as a fraction of the entire set.



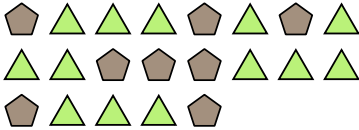
2) Express the circles as a fraction of the entire set.



3) Express the squares as a fraction of the entire set.



4) Express the triangles as a fraction of the entire set.




5) Express the triangles as a fraction of the entire set.



6) Express the moons as a fraction of the entire set.




7) Express the circles as a fraction of the entire set.




8) Express the moons as a fraction of the entire set.



9) Express the stars as a fraction of the entire set.



10) Express the circles as a fraction of the entire set.



11) Express the pentagons as a fraction of the entire set.



Answers

Ex. $\frac{4}{18}$

1. _____

2. _____

3. _____

4. _____

5. _____

6. _____

7. _____

8. _____

9. _____

10. _____

11. _____

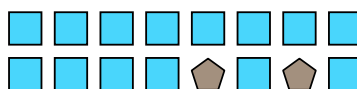


Solve each problem.

Ex) Express the moons as a fraction of the entire set.



1) Express the squares as a fraction of the entire set.




2) Express the stars as a fraction of the entire set.



3) Express the stars as a fraction of the entire set.



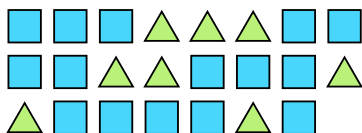
4) Express the moons as a fraction of the entire set.




5) Express the squares as a fraction of the entire set.



6) Express the triangles as a fraction of the entire set.



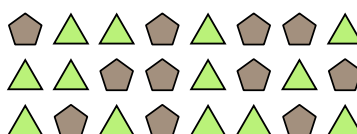
7) Express the stars as a fraction of the entire set.



8) Express the stars as a fraction of the entire set.



9) Express the triangles as a fraction of the entire set.



10) Express the circles as a fraction of the entire set.



11) Express the hearts as a fraction of the entire set.



Answers

Ex. $\frac{6}{8}$

1. $\frac{14}{16}$

2. $\frac{11}{19}$

3. $\frac{13}{25}$

4. $\frac{5}{14}$

5. $\frac{4}{7}$

6. $\frac{8}{23}$

7. $\frac{9}{24}$

8. $\frac{6}{13}$

9. $\frac{13}{24}$

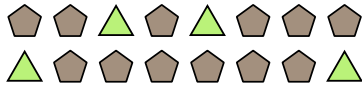
10. $\frac{3}{5}$

11. $\frac{3}{12}$



Solve each problem.

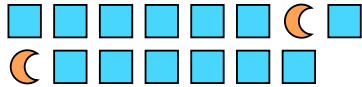
Ex) Express the triangles as a fraction of the entire set.




1) Express the stars as a fraction of the entire set.



2) Express the moons as a fraction of the entire set.



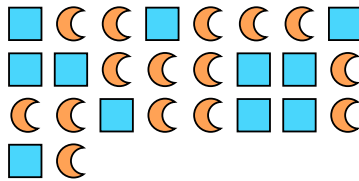
3) Express the pentagons as a fraction of the entire set.



4) Express the stars as a fraction of the entire set.




5) Express the moons as a fraction of the entire set.




6) Express the stars as a fraction of the entire set.



7) Express the circles as a fraction of the entire set.



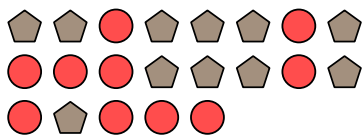
8) Express the circles as a fraction of the entire set.




9) Express the pentagons as a fraction of the entire set.



10) Express the pentagons as a fraction of the entire set.



11) Express the squares as a fraction of the entire set.



Answers

Ex. $\frac{4}{16}$

1. $\frac{9}{21}$

2. $\frac{2}{15}$

3. $\frac{10}{23}$

4. $\frac{12}{17}$

5. $\frac{15}{26}$

6. $\frac{7}{16}$

7. $\frac{12}{19}$

8. $\frac{8}{23}$

9. $\frac{7}{11}$

10. $\frac{11}{21}$

11. $\frac{4}{10}$

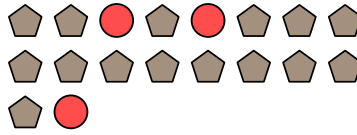


Solve each problem.

Ex) Express the stars as a fraction of the entire set.



1) Express the circles as a fraction of the entire set.




Answers

Ex. $\frac{6}{9}$

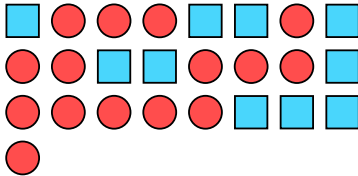
2) Express the circles as a fraction of the entire set.



3) Express the triangles as a fraction of the entire set.



4) Express the circles as a fraction of the entire set.



5) Express the hearts as a fraction of the entire set.



6) Express the circles as a fraction of the entire set.



7) Express the hearts as a fraction of the entire set.




8) Express the pentagons as a fraction of the entire set.




9) Express the stars as a fraction of the entire set.



10) Express the squares as a fraction of the entire set.



11) Express the stars as a fraction of the entire set.



1. _____

2. _____

3. _____

4. _____

5. _____

6. _____

7. _____

8. _____

9. _____

10. _____

11. _____

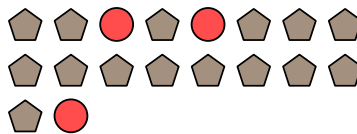


Solve each problem.

Ex) Express the stars as a fraction of the entire set.



1) Express the circles as a fraction of the entire set.




Answers

Ex. $\frac{6}{9}$

2) Express the circles as a fraction of the entire set.



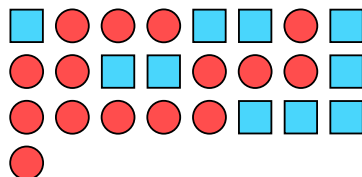
3) Express the triangles as a fraction of the entire set.



1. $\frac{3}{18}$

2. $\frac{4}{9}$

4) Express the circles as a fraction of the entire set.



5) Express the hearts as a fraction of the entire set.



3. $\frac{4}{17}$

4. $\frac{15}{25}$

5. $\frac{2}{15}$

6) Express the circles as a fraction of the entire set.



7) Express the hearts as a fraction of the entire set.



6. $\frac{3}{7}$


7. $\frac{5}{11}$

8. $\frac{5}{9}$

8) Express the pentagons as a fraction of the entire set.



9) Express the stars as a fraction of the entire set.




9. $\frac{5}{20}$

10. $\frac{8}{23}$

11. $\frac{13}{19}$

10) Express the squares as a fraction of the entire set.



11) Express the stars as a fraction of the entire set.

