

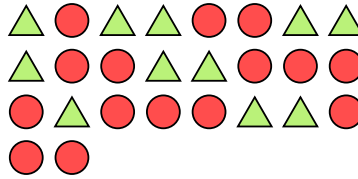


Solve each problem.

Ex) Express the triangles as a fraction of the entire set.



1) Express the circles as a fraction of the entire set.



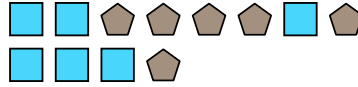
Answers

Ex. $\frac{3}{12}$

2) Express the pentagons as a fraction of the entire set.




3) Express the squares as a fraction of the entire set.

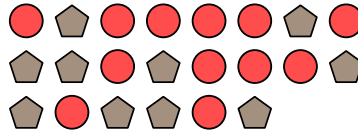


1. $\frac{15}{26}$

4) Express the moons as a fraction of the entire set.



5) Express the circles as a fraction of the entire set.




2. $\frac{4}{15}$

6) Express the triangles as a fraction of the entire set.




7) Express the hearts as a fraction of the entire set.




3. $\frac{6}{12}$

8) Express the hearts as a fraction of the entire set.




9) Express the hearts as a fraction of the entire set.

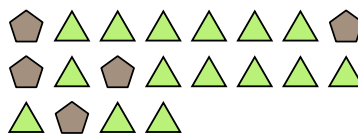


4. $\frac{8}{22}$

10) Express the squares as a fraction of the entire set.



11) Express the triangles as a fraction of the entire set.



5. $\frac{12}{22}$

6. $\frac{6}{10}$

7. $\frac{8}{19}$

8. $\frac{15}{23}$

9. $\frac{5}{14}$

10. $\frac{6}{19}$

11. $\frac{15}{20}$