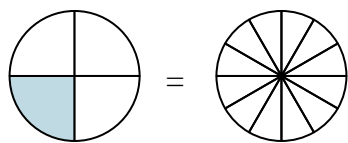


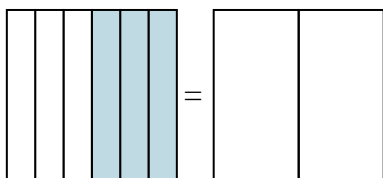


Shade in the visual fraction to find the equivalent fraction.

Ex) $\frac{1}{4} = \frac{3}{12}$



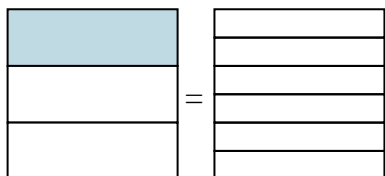
1) $\frac{3}{6} =$



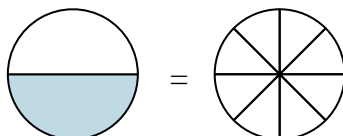
Ex. $\frac{3}{12}$

- 1. _____
- 2. _____
- 3. _____
- 4. _____
- 5. _____
- 6. _____
- 7. _____
- 8. _____
- 9. _____

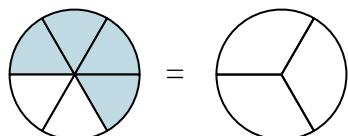
2) $\frac{1}{3} =$



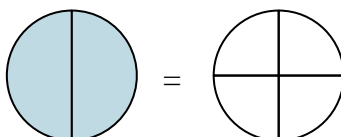
3) $\frac{1}{2} =$



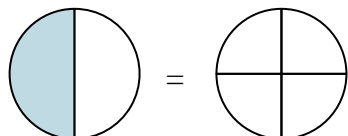
4) $\frac{4}{6} =$



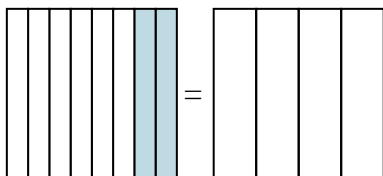
5) $\frac{2}{2} =$



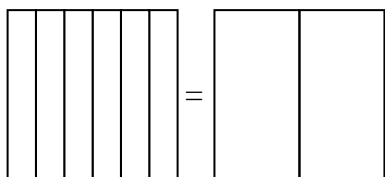
6) $\frac{1}{2} =$



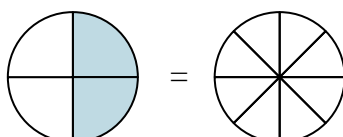
7) $\frac{2}{8} =$



8) $\frac{0}{6} =$

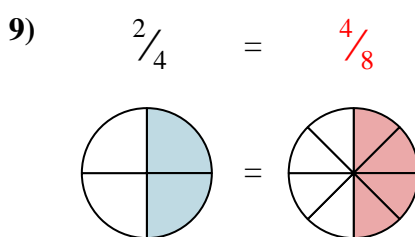
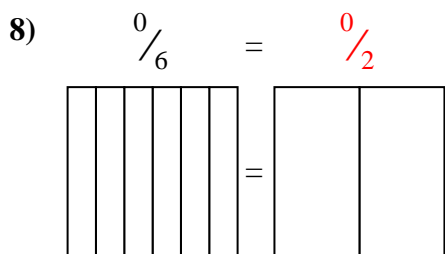
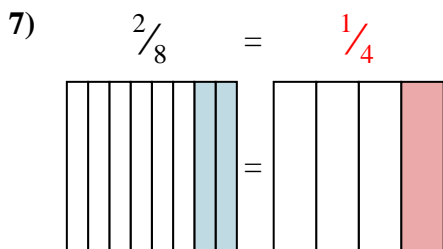
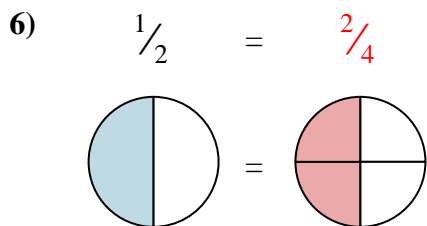
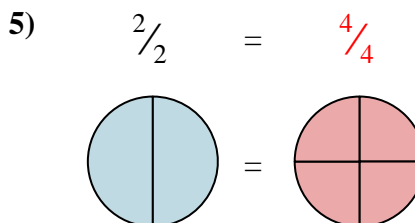
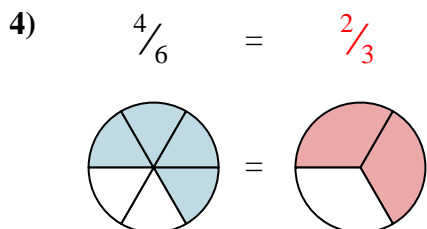
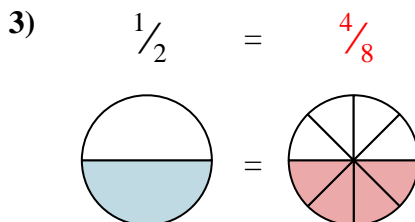
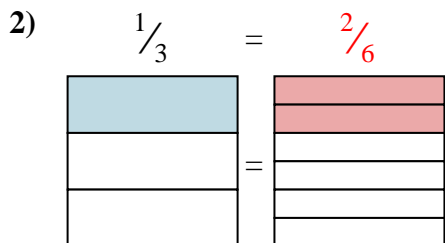
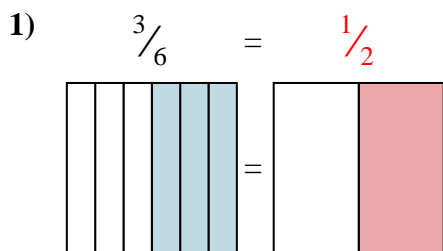
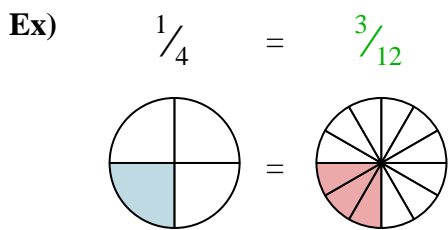


9) $\frac{2}{4} =$





Shade in the visual fraction to find the equivalent fraction.



Answers

- Ex. $\frac{3}{12}$
1. $\frac{1}{2}$
2. $\frac{2}{6}$
3. $\frac{4}{8}$
4. $\frac{2}{3}$
5. $\frac{4}{4}$
6. $\frac{2}{4}$
7. $\frac{1}{4}$
8. $\frac{0}{2}$
9. $\frac{4}{8}$