




Write the shaded amount in word form.

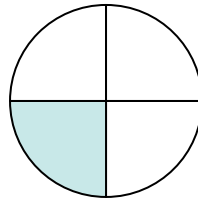
Ex)



1)



2)



Answers

Ex. two-thirds

1. _____

2. _____

3. _____

4. _____

5. _____

6. _____

7. _____

8. _____

9. _____

10. _____


11. _____

12. _____

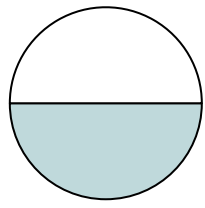
13. _____

14. _____


3)



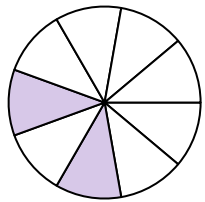
4)



5)




6)



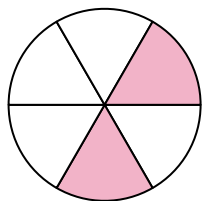
7)



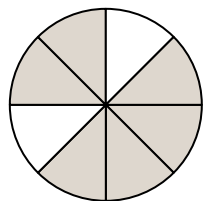
8)



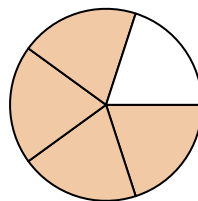
9)




10)



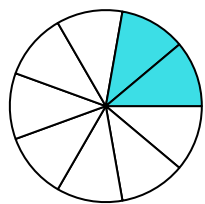
11)



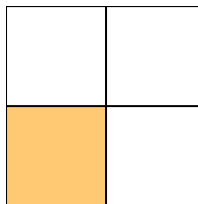
12)



13)

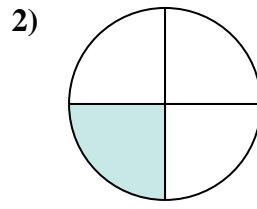
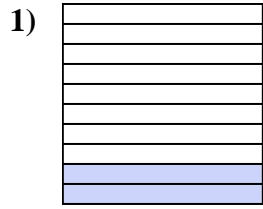
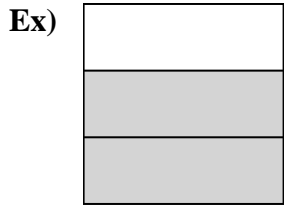


14)





Write the shaded amount in word form.



Answers
Ex. two-thirds

1. two-tenths

2. one-fourth

3. one-seventh

4. one-half

5. one-half

6. two-ninths

7. four-eighths

8. three-fourths

9. two-sixths

10. six-eighths

11. four-fifths

12. eight-tenths

13. two-ninths

14. one-third

