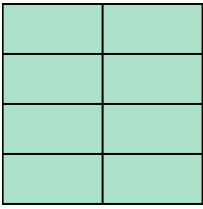





Write the shaded amount as a fraction.

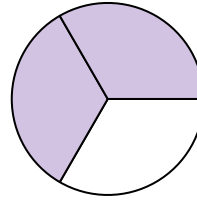
Ex)



1)



2)



**Answers**

Ex.  $\frac{8}{8}$

1. \_\_\_\_\_

2. \_\_\_\_\_

3. \_\_\_\_\_

4. \_\_\_\_\_

5. \_\_\_\_\_

6. \_\_\_\_\_

7. \_\_\_\_\_

8. \_\_\_\_\_

9. \_\_\_\_\_

10. \_\_\_\_\_

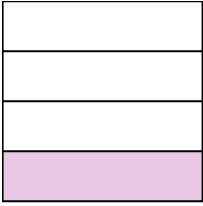
11. \_\_\_\_\_

12. \_\_\_\_\_

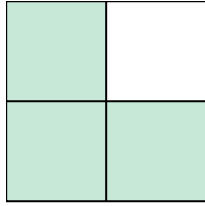
13. \_\_\_\_\_

14. \_\_\_\_\_


3)



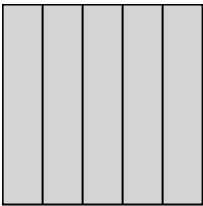
4)



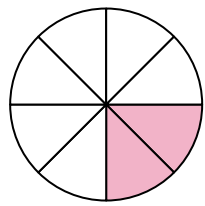
5)



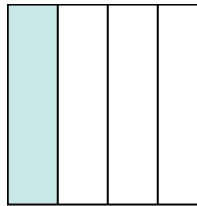
6)




7)



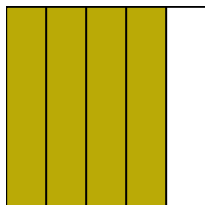
8)



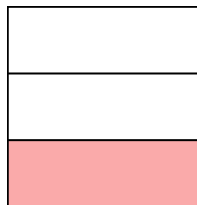
9)




10)




11)




12)



13)

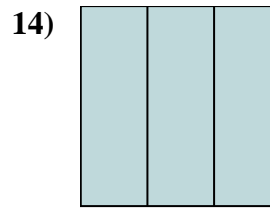
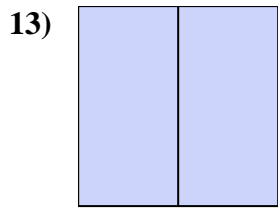
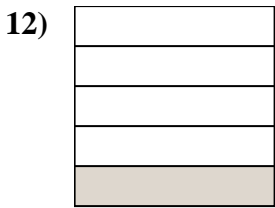
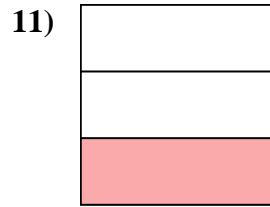
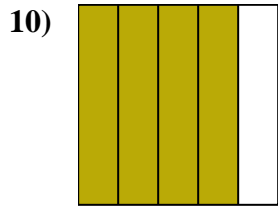
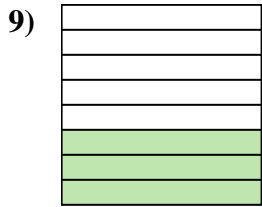
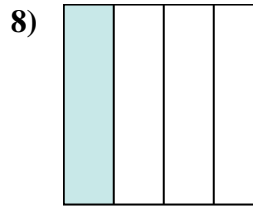
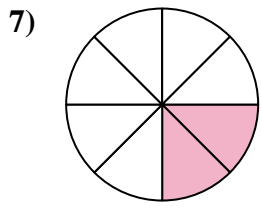
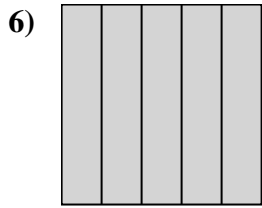
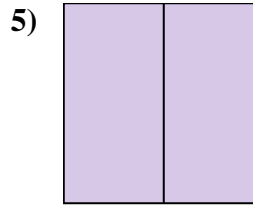
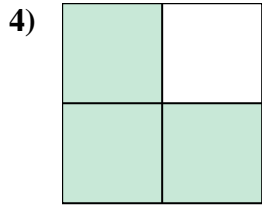
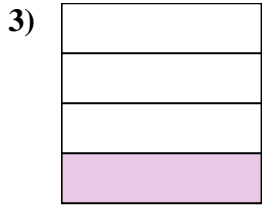
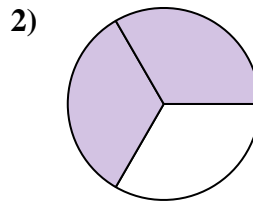
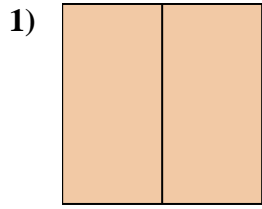
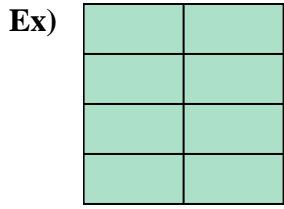


14)





Write the shaded amount as a fraction.



Answers

Ex. 8/8

1. 2/2

2. 2/3

3. 1/4

4. 3/4

5. 2/2

6. 5/5

7. 2/8

8. 1/4

9. 3/8

10. 4/5

11. 1/3

12. 1/5

13. 2/2

14. 3/3