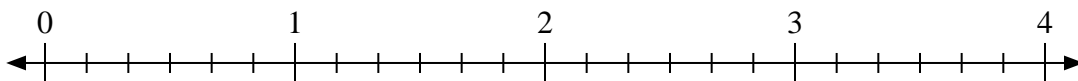


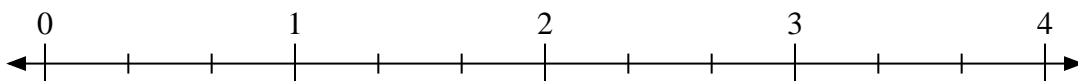


Use the numberline to solve.

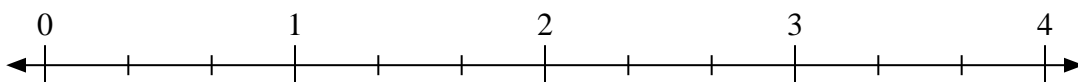
1)  $3 \div \frac{2}{6}$



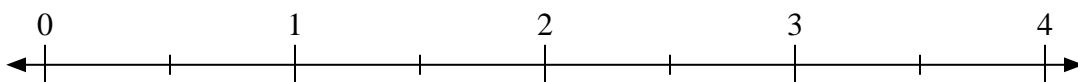
2)  $2 \div \frac{2}{3}$



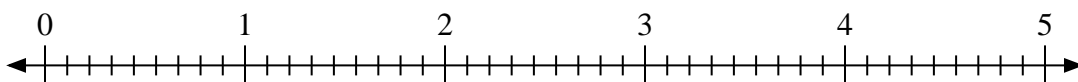
3)  $4 \div \frac{1}{3}$



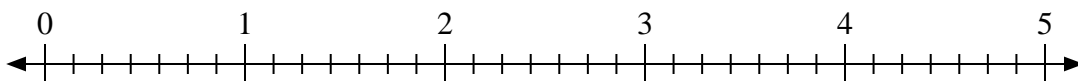
4)  $2 \div \frac{1}{2}$



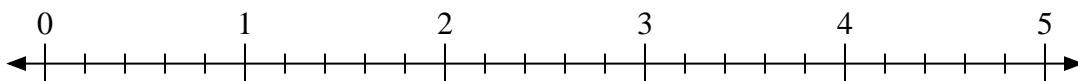
5)  $3 \div \frac{5}{9}$



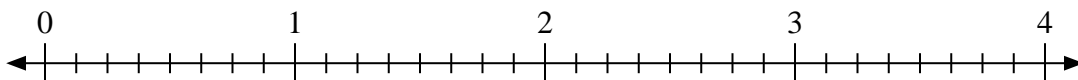
6)  $4 \div \frac{1}{7}$



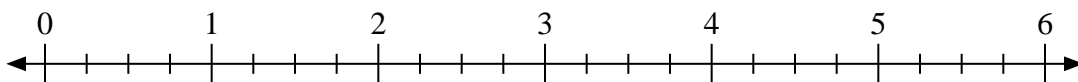
7)  $4 \div \frac{2}{5}$



8)  $4 \div \frac{3}{8}$



9)  $2 \div \frac{1}{4}$

**Answers**

1. \_\_\_\_\_

2. \_\_\_\_\_

3. \_\_\_\_\_

4. \_\_\_\_\_

5. \_\_\_\_\_

6. \_\_\_\_\_

7. \_\_\_\_\_

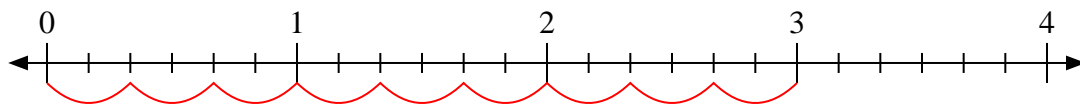
8. \_\_\_\_\_

9. \_\_\_\_\_

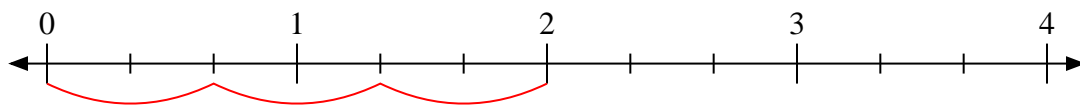


Use the numberline to solve.

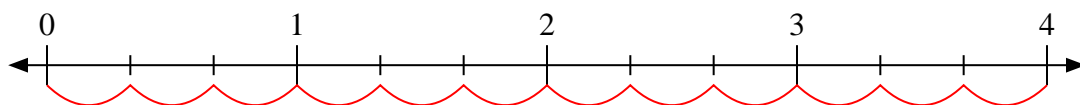
1)  $3 \div \frac{2}{6}$



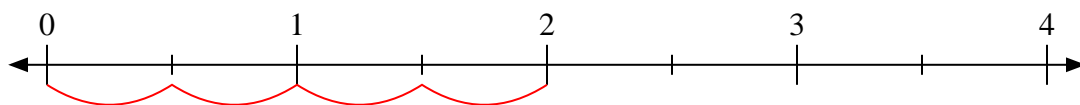
2)  $2 \div \frac{2}{3}$



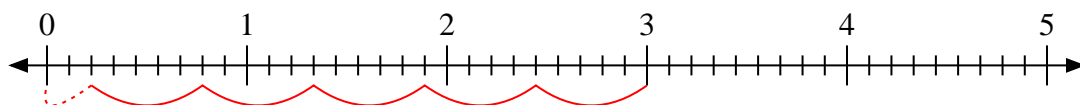
3)  $4 \div \frac{1}{3}$



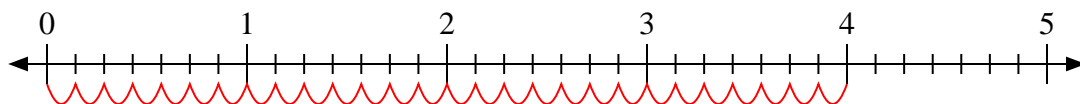
4)  $2 \div \frac{1}{2}$



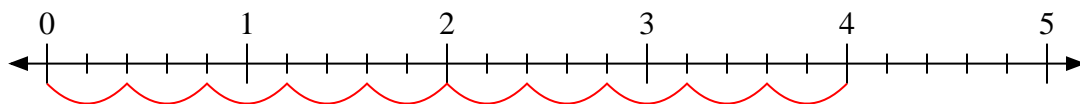
5)  $3 \div \frac{5}{9}$



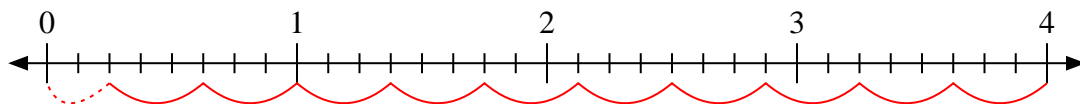
6)  $4 \div \frac{1}{7}$



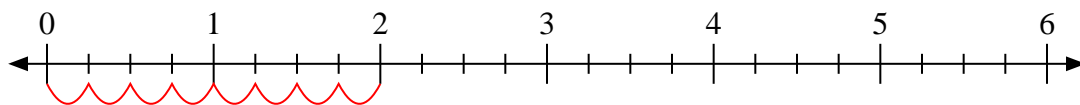
7)  $4 \div \frac{2}{5}$



8)  $4 \div \frac{3}{8}$



9)  $2 \div \frac{1}{4}$



Answers

1. 9

2. 3

3. 12

4. 4

5.  $5 \frac{2}{5}$

6. 28

7. 10

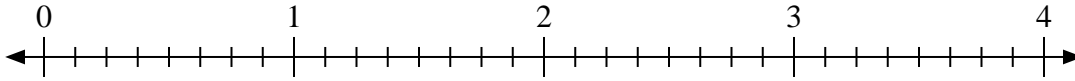
8.  $10 \frac{2}{3}$

9. 8

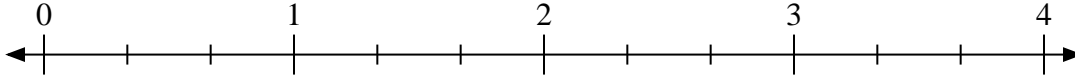


Use the numberline to solve.

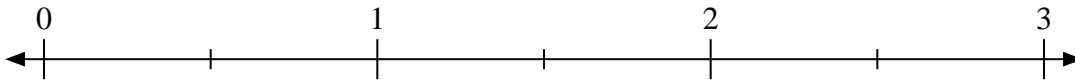
1)  $2 \div \frac{1}{8}$



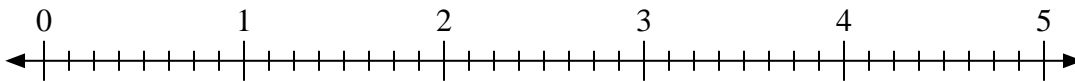
2)  $2 \div \frac{2}{3}$



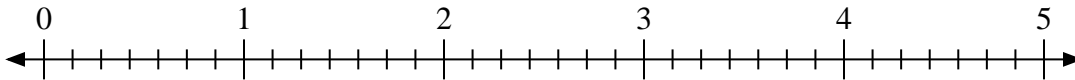
3)  $2 \div \frac{1}{2}$



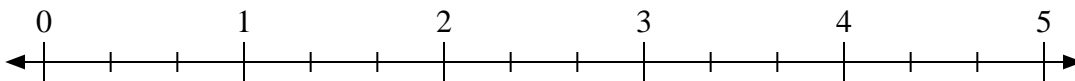
4)  $3 \div \frac{5}{8}$



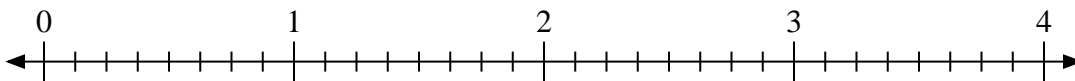
5)  $2 \div \frac{6}{7}$



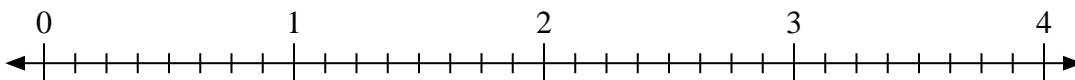
6)  $4 \div \frac{1}{3}$



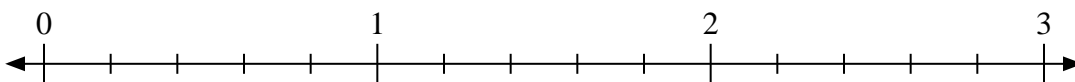
7)  $2 \div \frac{3}{8}$



8)  $2 \div \frac{2}{8}$



9)  $2 \div \frac{3}{5}$



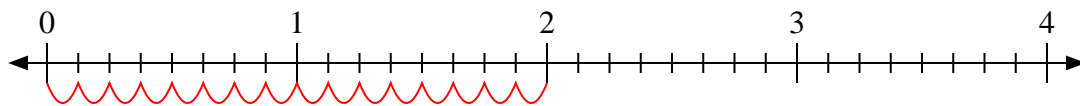
Answers

1. \_\_\_\_\_
2. \_\_\_\_\_
3. \_\_\_\_\_
4. \_\_\_\_\_
5. \_\_\_\_\_
6. \_\_\_\_\_
7. \_\_\_\_\_
8. \_\_\_\_\_
9. \_\_\_\_\_

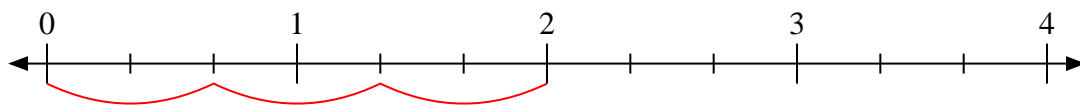


Use the numberline to solve.

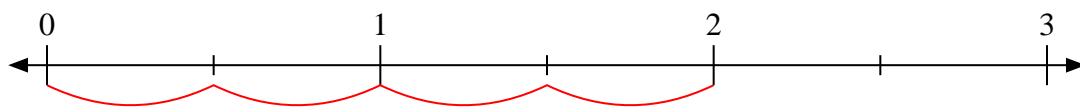
1)  $2 \div \frac{1}{8}$



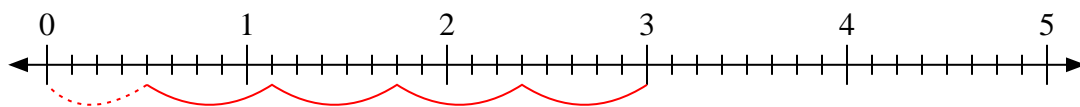
2)  $2 \div \frac{2}{3}$



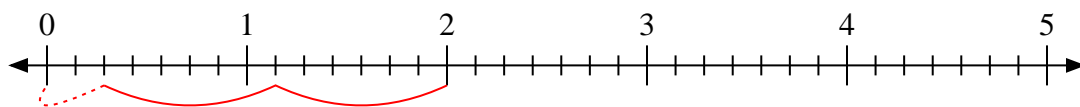
3)  $2 \div \frac{1}{2}$



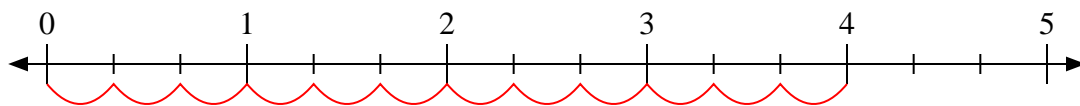
4)  $3 \div \frac{5}{8}$



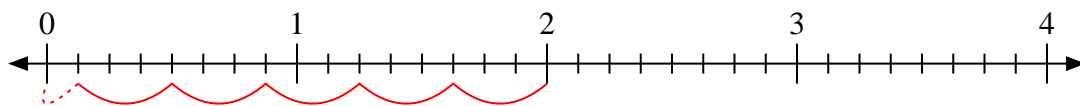
5)  $2 \div \frac{6}{7}$



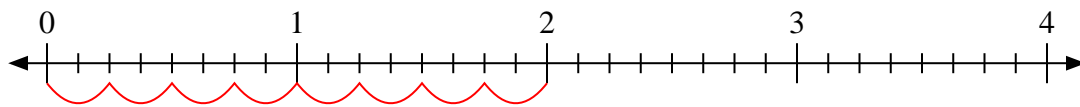
6)  $4 \div \frac{1}{3}$



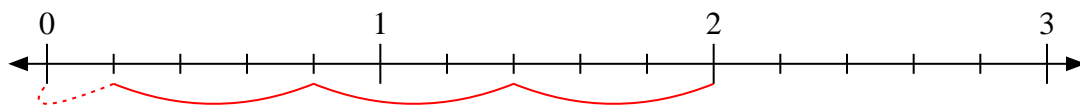
7)  $2 \div \frac{3}{8}$



8)  $2 \div \frac{2}{8}$



9)  $2 \div \frac{3}{5}$



Answers

1. 16

2. 3

3. 4

4.  $4 \frac{4}{5}$

5.  $2 \frac{2}{6}$

6. 12

7.  $5 \frac{1}{3}$

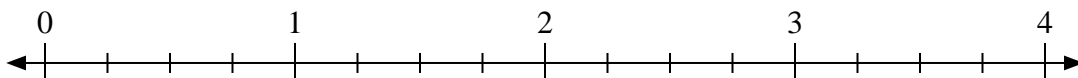
8. 8

9.  $3 \frac{1}{3}$

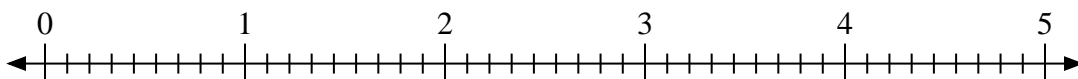


Use the numberline to solve.

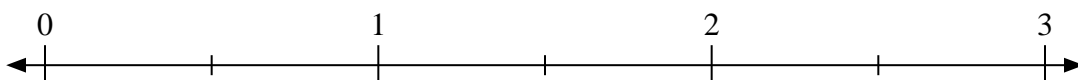
1)  $4 \div \frac{3}{4}$



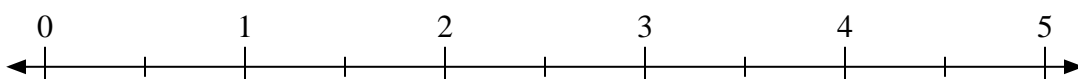
2)  $2 \div \frac{2}{9}$



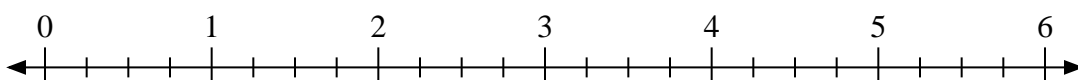
3)  $3 \div \frac{1}{2}$



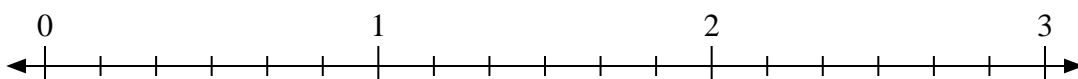
4)  $5 \div \frac{1}{2}$



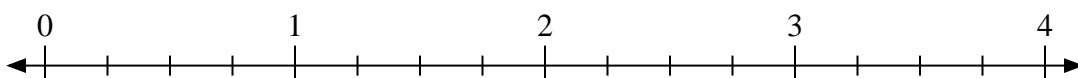
5)  $4 \div \frac{2}{4}$



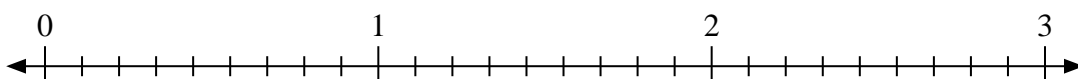
6)  $2 \div \frac{1}{6}$



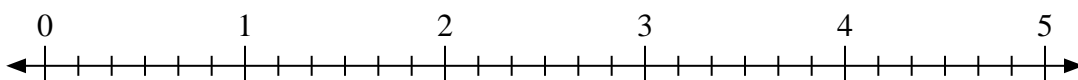
7)  $3 \div \frac{3}{4}$



8)  $2 \div \frac{7}{9}$



9)  $3 \div \frac{2}{6}$



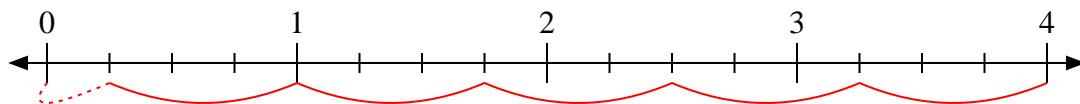
Answers

1. \_\_\_\_\_
2. \_\_\_\_\_
3. \_\_\_\_\_
4. \_\_\_\_\_
5. \_\_\_\_\_
6. \_\_\_\_\_
7. \_\_\_\_\_
8. \_\_\_\_\_
9. \_\_\_\_\_

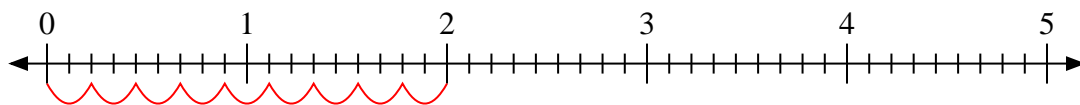


Use the numberline to solve.

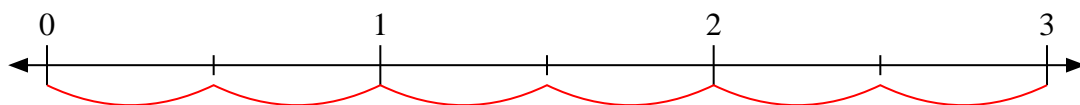
1)  $4 \div \frac{3}{4}$



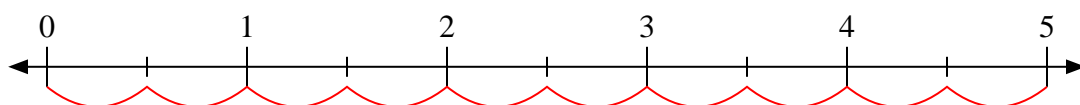
2)  $2 \div \frac{2}{9}$



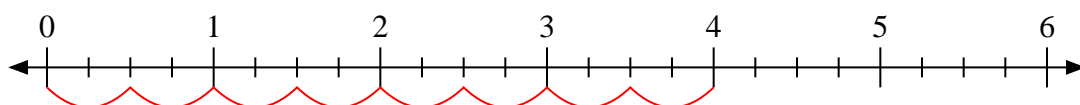
3)  $3 \div \frac{1}{2}$



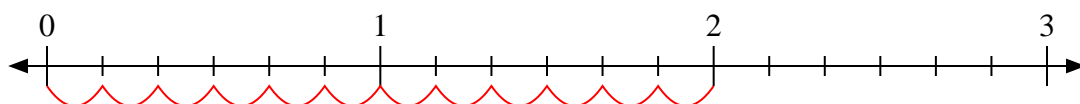
4)  $5 \div \frac{1}{2}$



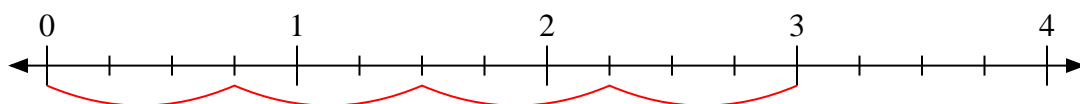
5)  $4 \div \frac{2}{4}$



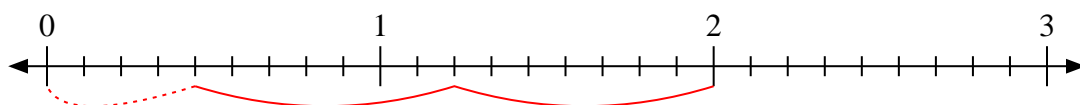
6)  $2 \div \frac{1}{6}$



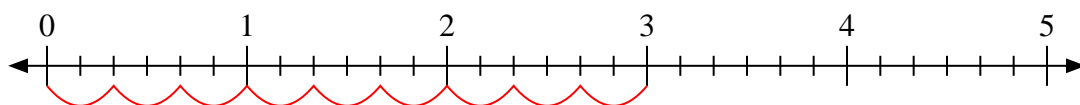
7)  $3 \div \frac{3}{4}$



8)  $2 \div \frac{7}{9}$



9)  $3 \div \frac{2}{6}$



Answers

1. 5  $\frac{1}{3}$

2. 9

3. 6

4. 10

5. 8

6. 12

7. 4

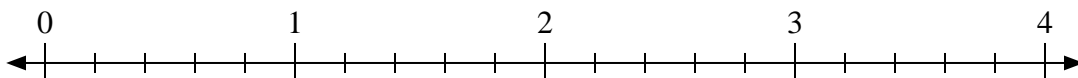
8. 2  $\frac{4}{7}$

9. 9

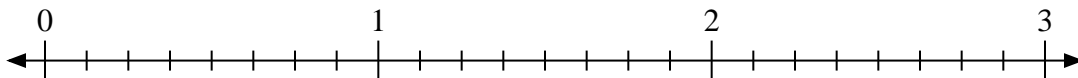


Use the numberline to solve.

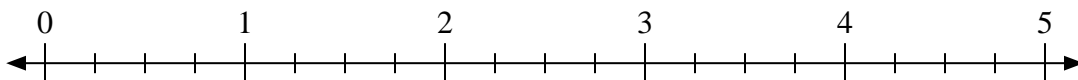
1)  $3 \div \frac{3}{5}$



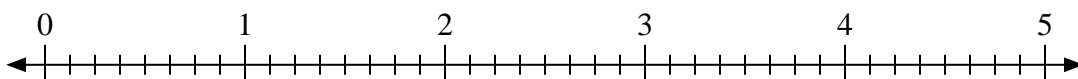
2)  $3 \div \frac{7}{8}$



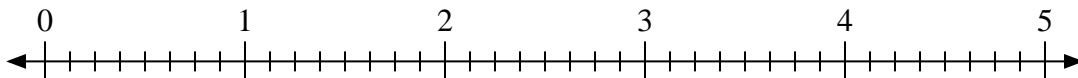
3)  $2 \div \frac{1}{4}$




4)  $4 \div \frac{6}{8}$



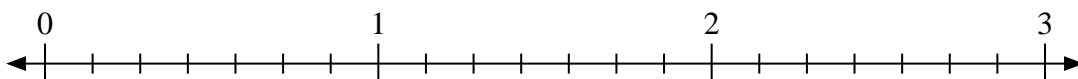
5)  $2 \div \frac{7}{8}$



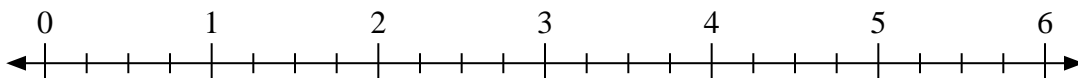
6)  $2 \div \frac{1}{3}$



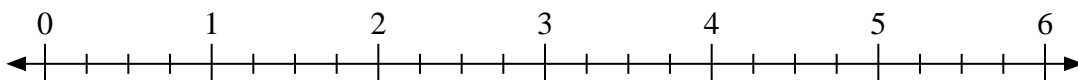
7)  $3 \div \frac{4}{7}$



8)  $5 \div \frac{3}{4}$



9)  $6 \div \frac{3}{4}$



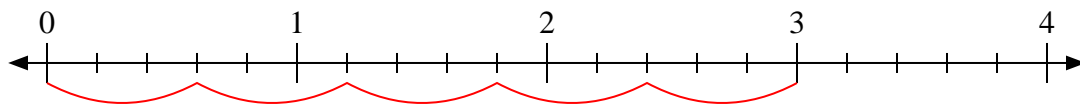
Answers

1. \_\_\_\_\_
2. \_\_\_\_\_
3. \_\_\_\_\_
4. \_\_\_\_\_
5. \_\_\_\_\_
6. \_\_\_\_\_
7. \_\_\_\_\_
8. \_\_\_\_\_
9. \_\_\_\_\_

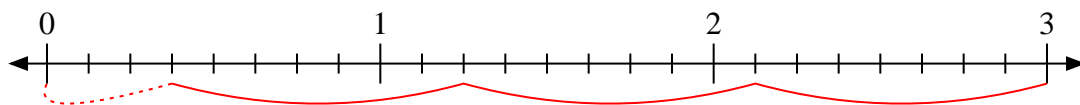


Use the numberline to solve.

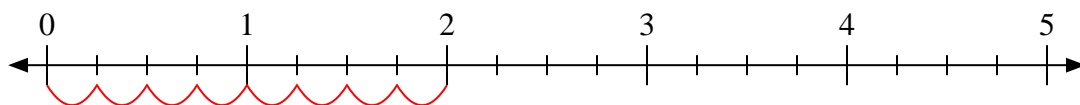
1)  $3 \div \frac{3}{5}$



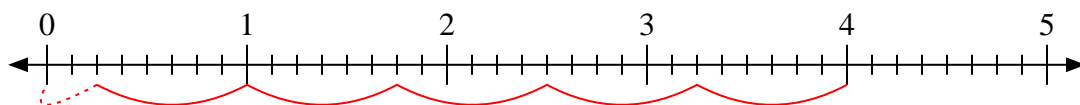
2)  $3 \div \frac{7}{8}$



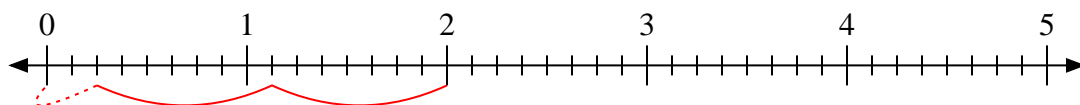
3)  $2 \div \frac{1}{4}$



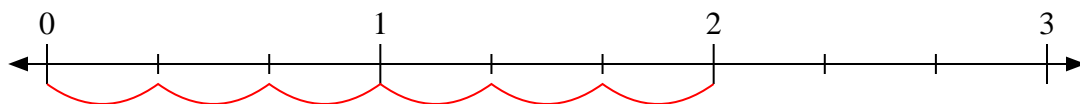
4)  $4 \div \frac{6}{8}$



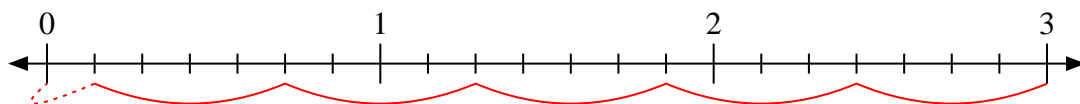
5)  $2 \div \frac{7}{8}$



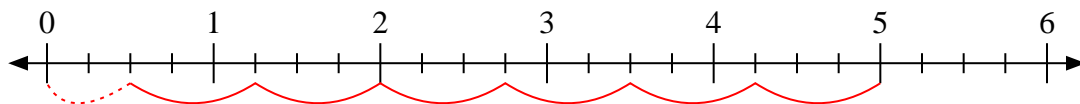
6)  $2 \div \frac{1}{3}$



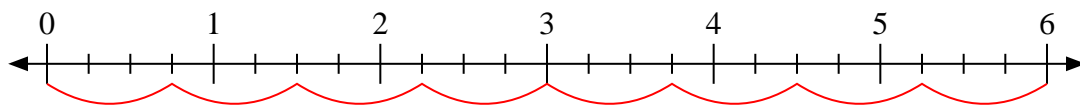
7)  $3 \div \frac{4}{7}$



8)  $5 \div \frac{3}{4}$



9)  $6 \div \frac{3}{4}$



Answers

1. 5

2.  $3 \frac{3}{7}$

3. 8

4.  $5 \frac{2}{6}$

5.  $2 \frac{2}{7}$

6. 6

7.  $5 \frac{1}{4}$

8.  $6 \frac{2}{3}$

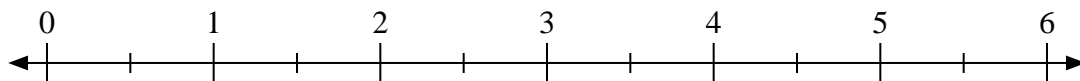
9. 8



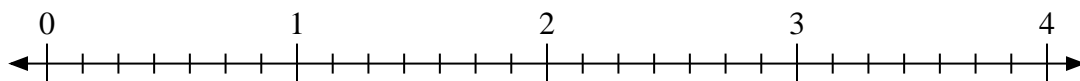


Use the numberline to solve.

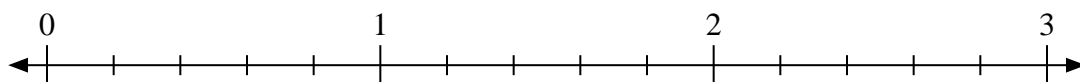
1)  $5 \div \frac{1}{2}$



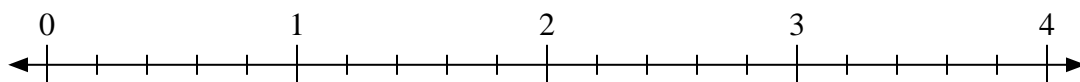
2)  $4 \div \frac{4}{7}$



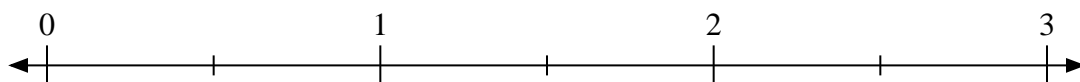
3)  $3 \div \frac{1}{5}$



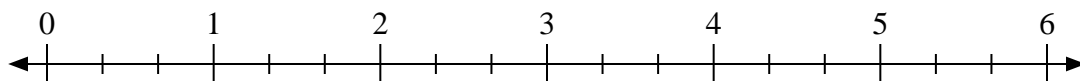
4)  $2 \div \frac{2}{5}$



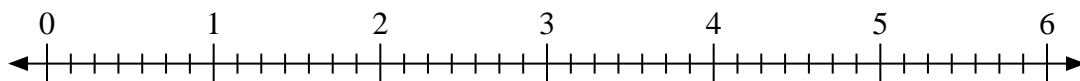
5)  $2 \div \frac{1}{2}$



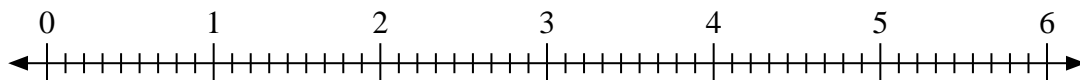
6)  $3 \div \frac{2}{3}$



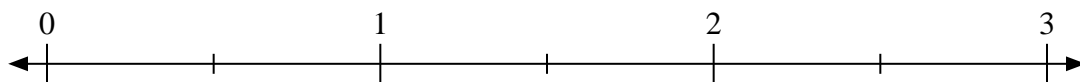
7)  $2 \div \frac{2}{7}$



8)  $2 \div \frac{4}{9}$



9)  $3 \div \frac{1}{2}$



Answers

1. \_\_\_\_\_

2. \_\_\_\_\_

3. \_\_\_\_\_

4. \_\_\_\_\_

5. \_\_\_\_\_

6. \_\_\_\_\_

7. \_\_\_\_\_

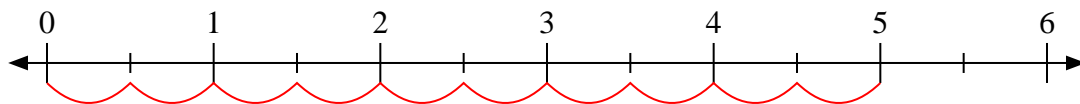
8. \_\_\_\_\_

9. \_\_\_\_\_

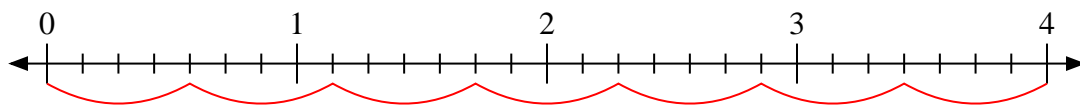


Use the numberline to solve.

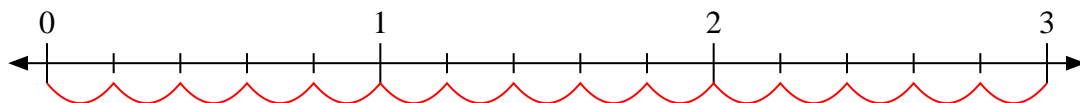
1)  $5 \div \frac{1}{2}$



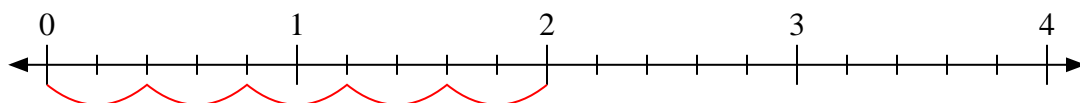
2)  $4 \div \frac{4}{7}$



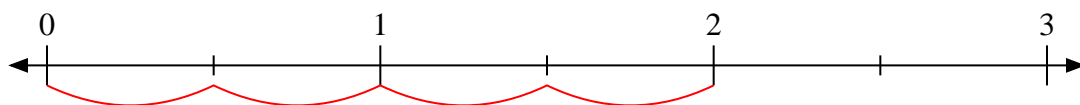
3)  $3 \div \frac{1}{5}$



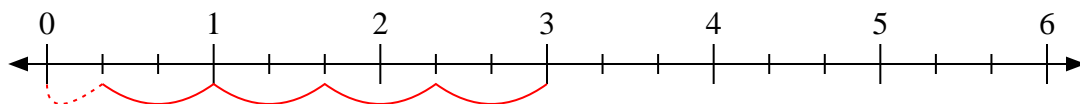
4)  $2 \div \frac{2}{5}$



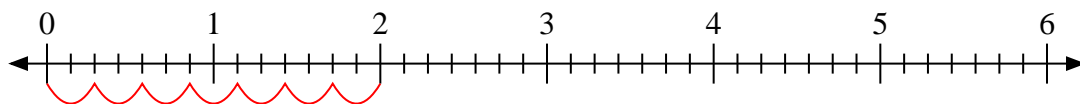
5)  $2 \div \frac{1}{2}$



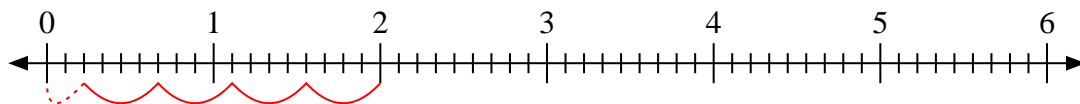
6)  $3 \div \frac{2}{3}$



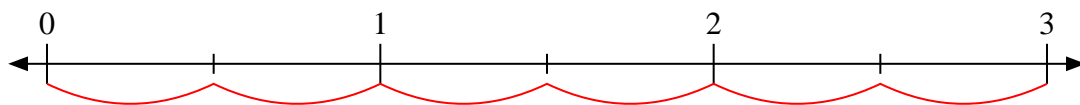
7)  $2 \div \frac{2}{7}$



8)  $2 \div \frac{4}{9}$



9)  $3 \div \frac{1}{2}$



Answers

1. **10**

2. **7**

3. **15**

4. **5**

5. **4**

6.  **$4 \frac{1}{2}$**

7. **7**

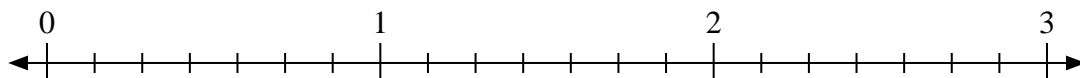
8.  **$4 \frac{2}{4}$**

9. **6**

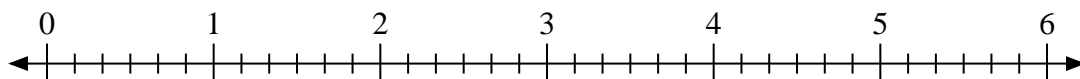


Use the numberline to solve.

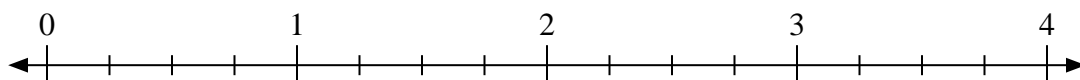
1)  $2 \div \frac{3}{7}$



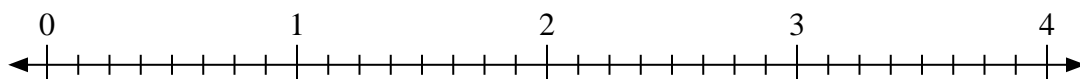
2)  $6 \div \frac{3}{6}$



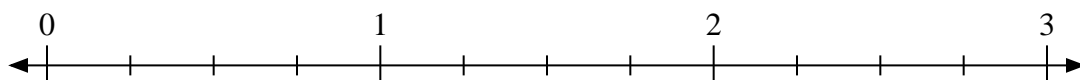
3)  $2 \div \frac{1}{4}$



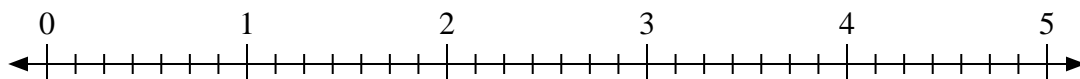
4)  $2 \div \frac{2}{8}$



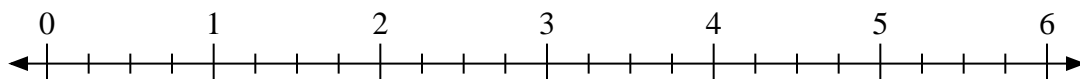
5)  $3 \div \frac{2}{4}$



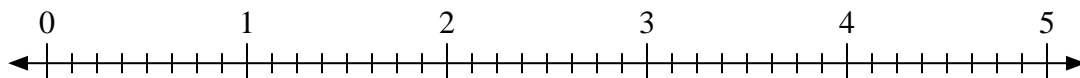
6)  $5 \div \frac{4}{7}$



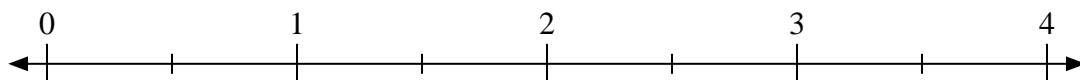
7)  $6 \div \frac{1}{4}$



8)  $5 \div \frac{5}{8}$



9)  $3 \div \frac{1}{2}$



Answers

1. \_\_\_\_\_

2. \_\_\_\_\_

3. \_\_\_\_\_

4. \_\_\_\_\_

5. \_\_\_\_\_

6. \_\_\_\_\_

7. \_\_\_\_\_

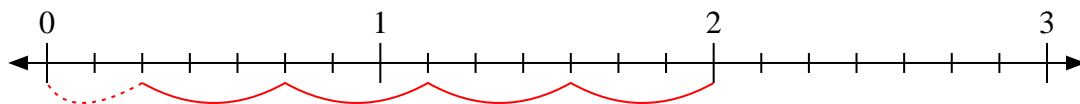
8. \_\_\_\_\_

9. \_\_\_\_\_

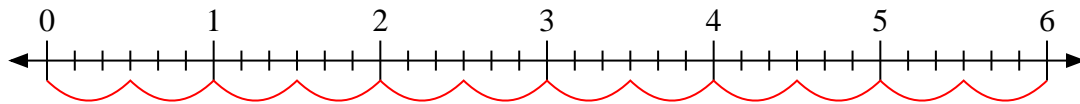


Use the numberline to solve.

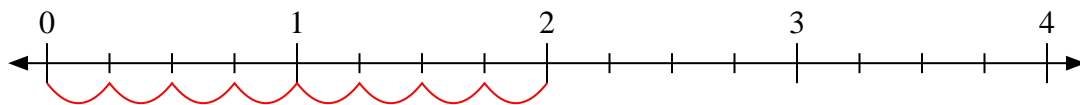
1)  $2 \div \frac{3}{7}$



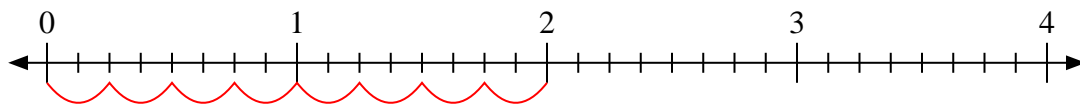
2)  $6 \div \frac{3}{6}$



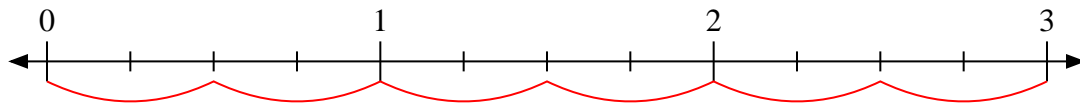
3)  $2 \div \frac{1}{4}$



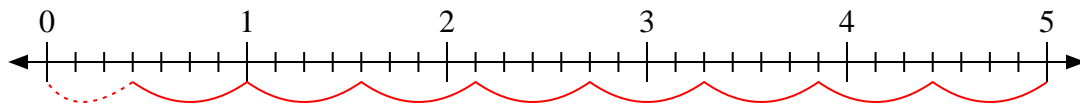
4)  $2 \div \frac{2}{8}$



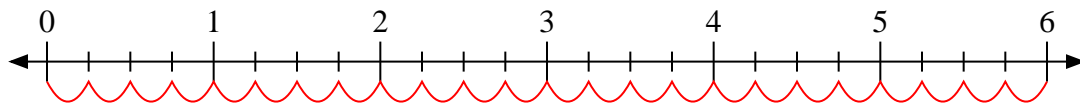
5)  $3 \div \frac{2}{4}$



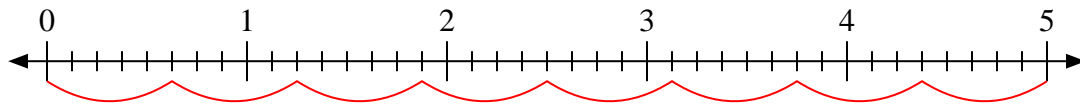
6)  $5 \div \frac{4}{7}$



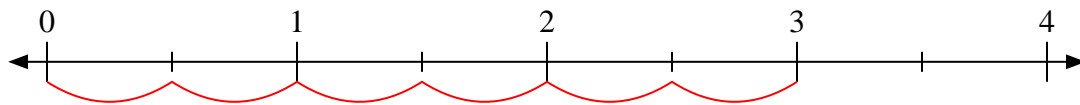
7)  $6 \div \frac{1}{4}$



8)  $5 \div \frac{5}{8}$



9)  $3 \div \frac{1}{2}$



Answers

1. 4  $\frac{2}{3}$

2. 12

3. 8

4. 8

5. 6

6. 8  $\frac{3}{4}$

7. 24

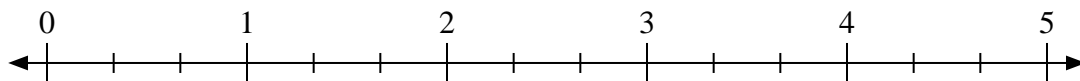
8. 8

9. 6




Use the numberline to solve.

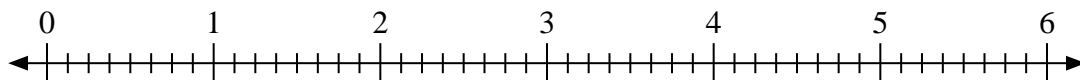
1)  $2 \div \frac{2}{3}$



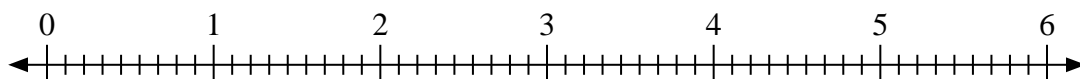
2)  $2 \div \frac{1}{3}$



3)  $4 \div \frac{3}{8}$



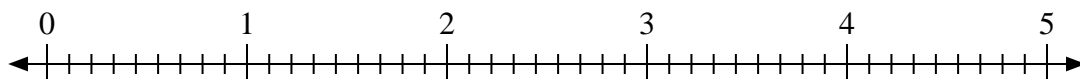
4)  $6 \div \frac{8}{9}$



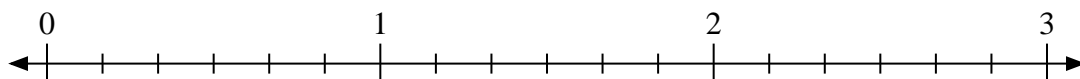
5)  $2 \div \frac{1}{2}$



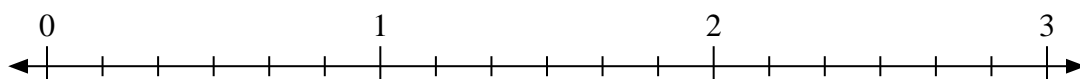
6)  $3 \div \frac{8}{9}$



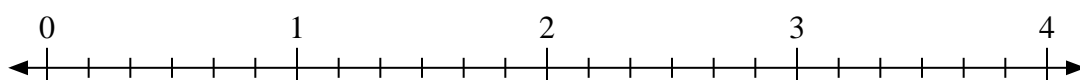
7)  $2 \div \frac{3}{6}$



8)  $2 \div \frac{4}{6}$



9)  $3 \div \frac{5}{6}$



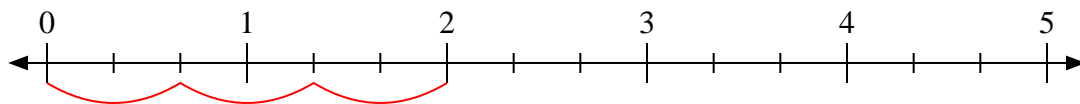
Answers

1. \_\_\_\_\_
2. \_\_\_\_\_
3. \_\_\_\_\_
4. \_\_\_\_\_
5. \_\_\_\_\_
6. \_\_\_\_\_
7. \_\_\_\_\_
8. \_\_\_\_\_
9. \_\_\_\_\_

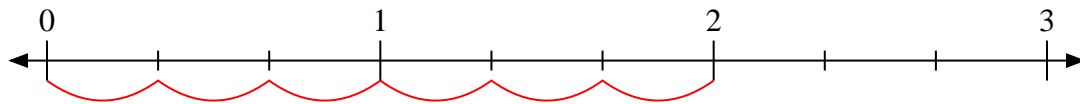


Use the numberline to solve.

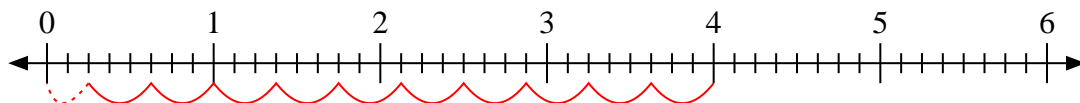
1)  $2 \div \frac{2}{3}$



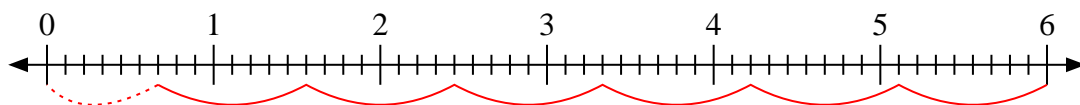
2)  $2 \div \frac{1}{3}$



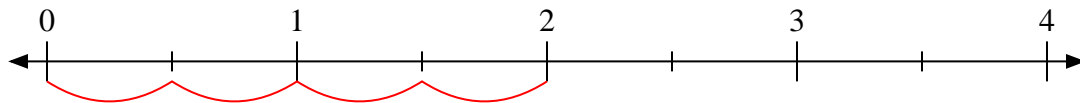
3)  $4 \div \frac{3}{8}$



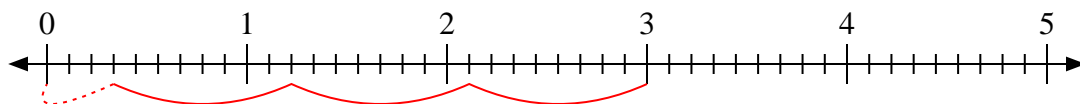
4)  $6 \div \frac{8}{9}$



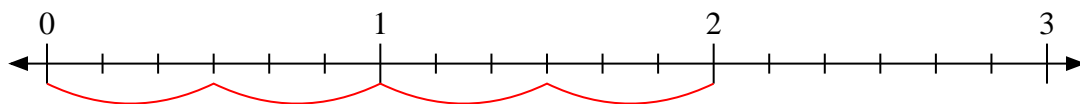
5)  $2 \div \frac{1}{2}$



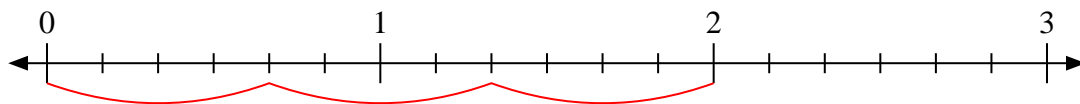
6)  $3 \div \frac{8}{9}$



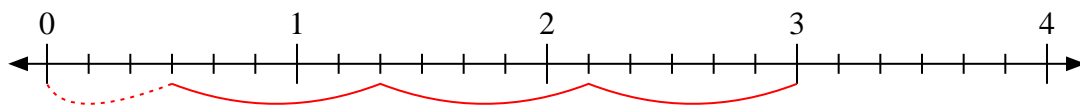
7)  $2 \div \frac{3}{6}$



8)  $2 \div \frac{4}{6}$



9)  $3 \div \frac{5}{6}$



Answers

1. 3

2. 6

3.  $10 \frac{2}{3}$

4.  $6 \frac{6}{8}$

5. 4

6.  $3 \frac{3}{8}$

7. 4

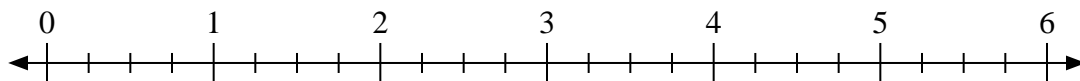
8. 3

9.  $3 \frac{3}{5}$

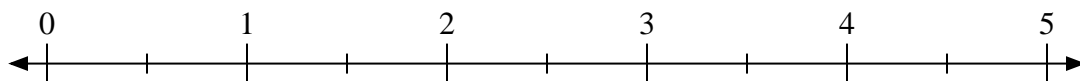


Use the numberline to solve.

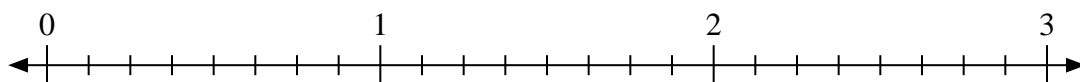
1)  $6 \div \frac{3}{4}$



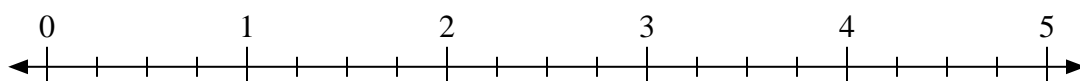
2)  $5 \div \frac{1}{2}$



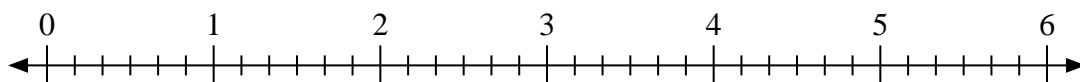
3)  $3 \div \frac{6}{8}$



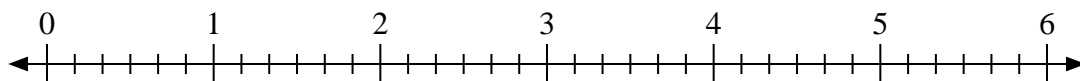
4)  $3 \div \frac{3}{4}$



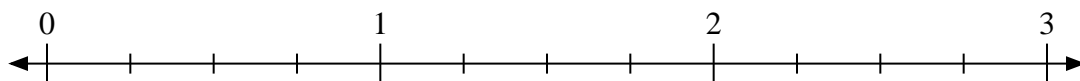
5)  $6 \div \frac{3}{6}$




6)  $5 \div \frac{1}{6}$



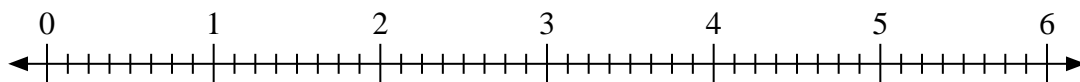
7)  $3 \div \frac{1}{4}$



8)  $3 \div \frac{2}{3}$



9)  $3 \div \frac{3}{8}$

**Answers**

1. \_\_\_\_\_

2. \_\_\_\_\_

3. \_\_\_\_\_

4. \_\_\_\_\_

5. \_\_\_\_\_

6. \_\_\_\_\_

7. \_\_\_\_\_

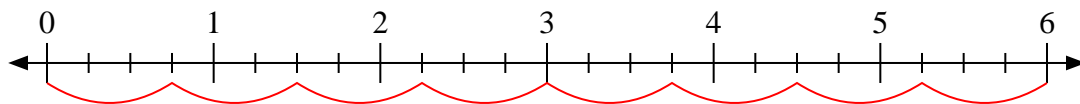
8. \_\_\_\_\_

9. \_\_\_\_\_

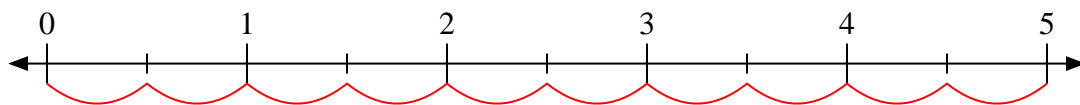


Use the numberline to solve.

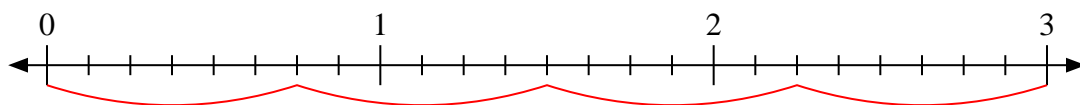
1)  $6 \div \frac{3}{4}$



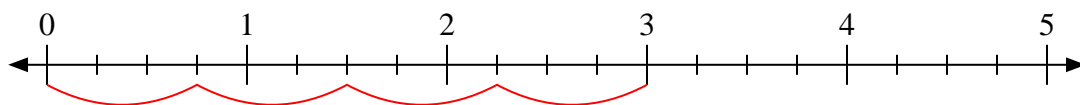
2)  $5 \div \frac{1}{2}$



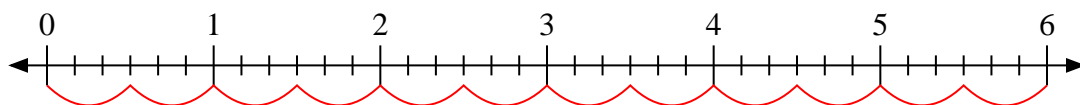
3)  $3 \div \frac{6}{8}$



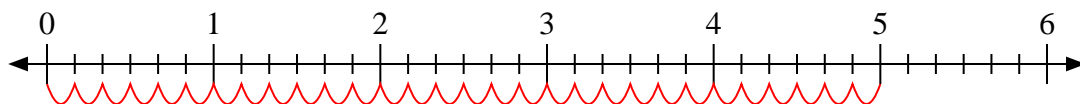
4)  $3 \div \frac{3}{4}$



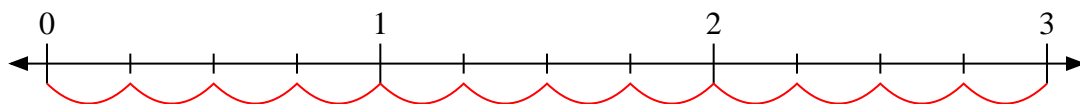
5)  $6 \div \frac{3}{6}$



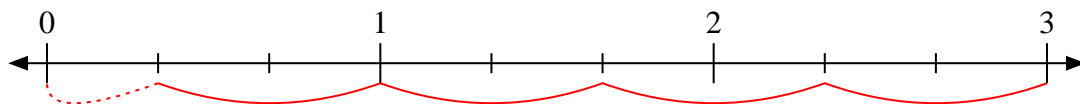
6)  $5 \div \frac{1}{6}$



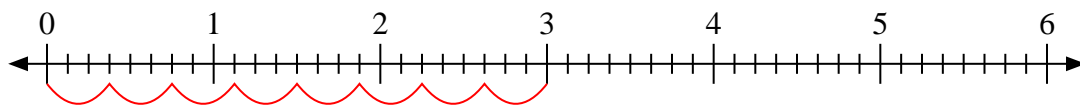
7)  $3 \div \frac{1}{4}$



8)  $3 \div \frac{2}{3}$



9)  $3 \div \frac{3}{8}$



Answers

1. 8

2. 10

3. 4

4. 4

5. 12

6. 30

7. 12

8.  $4 \frac{1}{2}$

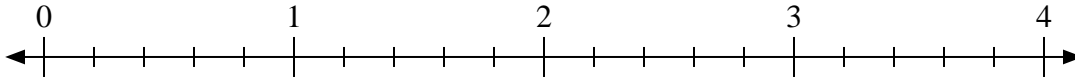
9. 8



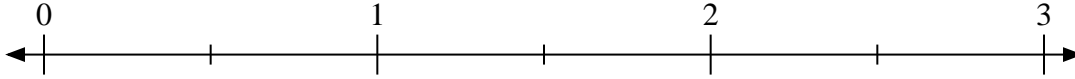


Use the numberline to solve.

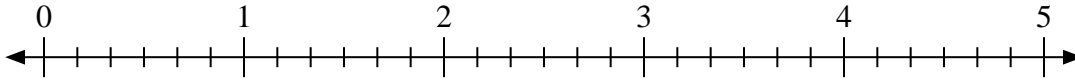
1)  $2 \div \frac{1}{5}$



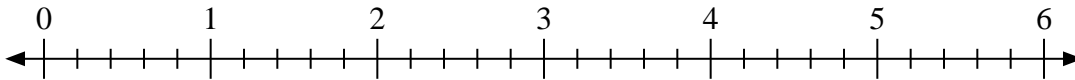
2)  $3 \div \frac{1}{2}$



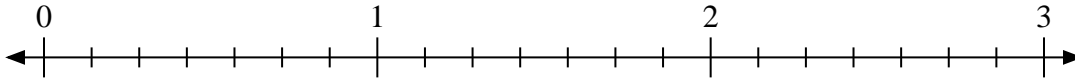
3)  $3 \div \frac{1}{6}$



4)  $6 \div \frac{4}{5}$



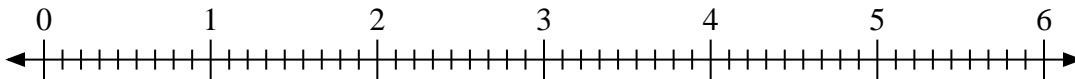
5)  $3 \div \frac{5}{7}$



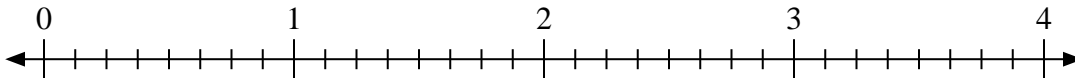
6)  $4 \div \frac{2}{3}$



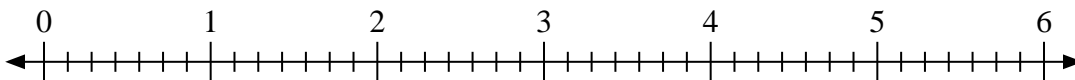
7)  $4 \div \frac{5}{9}$



8)  $4 \div \frac{7}{8}$



9)  $5 \div \frac{3}{7}$



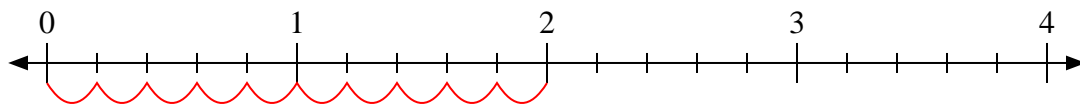
Answers

1. \_\_\_\_\_
2. \_\_\_\_\_
3. \_\_\_\_\_
4. \_\_\_\_\_
5. \_\_\_\_\_
6. \_\_\_\_\_
7. \_\_\_\_\_
8. \_\_\_\_\_
9. \_\_\_\_\_

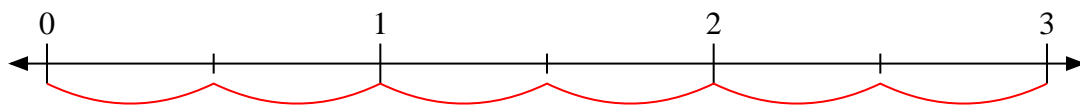


Use the numberline to solve.

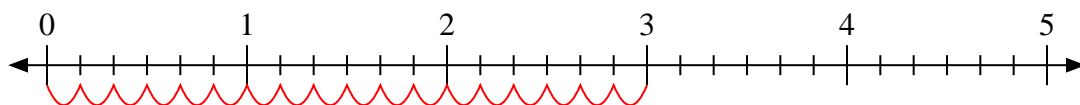
1)  $2 \div \frac{1}{5}$



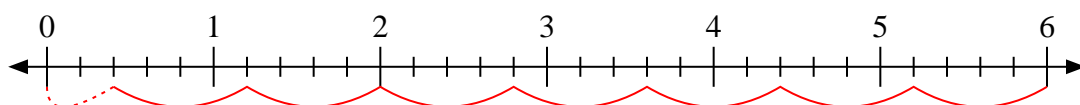
2)  $3 \div \frac{1}{2}$



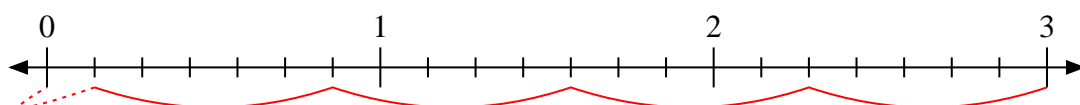
3)  $3 \div \frac{1}{6}$



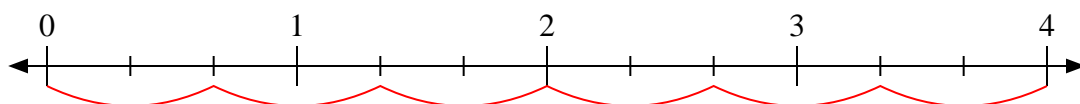
4)  $6 \div \frac{4}{5}$



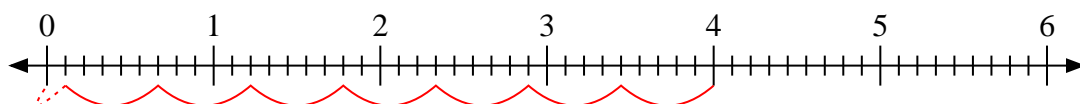
5)  $3 \div \frac{5}{7}$



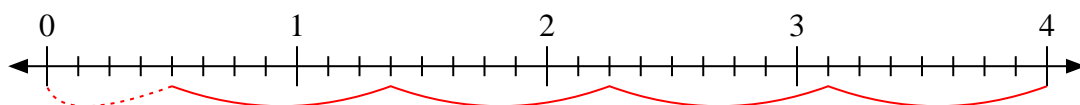
6)  $4 \div \frac{2}{3}$



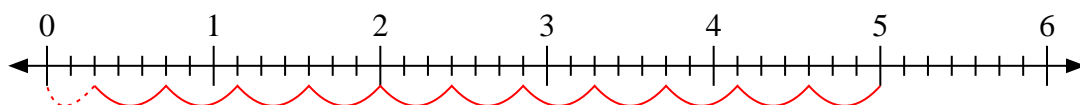
7)  $4 \div \frac{5}{9}$



8)  $4 \div \frac{7}{8}$



9)  $5 \div \frac{3}{7}$



Answers

1. **10**

2. **6**

3. **18**

4.  **$7 \frac{2}{4}$**

5.  **$4 \frac{1}{5}$**

6. **6**

7.  **$7 \frac{1}{5}$**

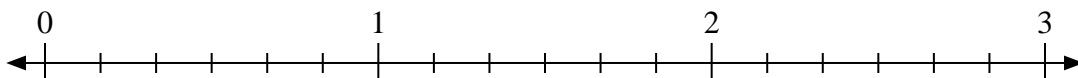
8.  **$4 \frac{4}{7}$**

9.  **$11 \frac{2}{3}$**

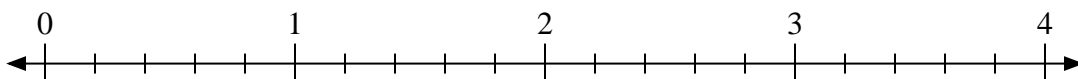


Use the numberline to solve.

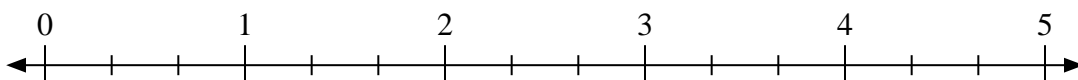
1)  $3 \div \frac{3}{6}$



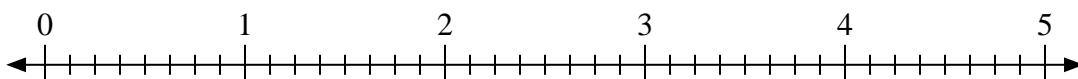
2)  $2 \div \frac{4}{5}$



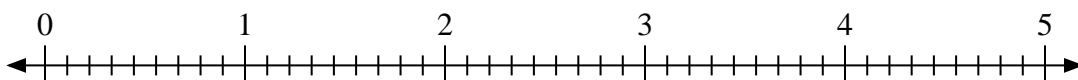
3)  $5 \div \frac{1}{3}$



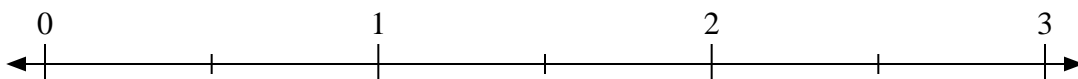
4)  $3 \div \frac{5}{8}$



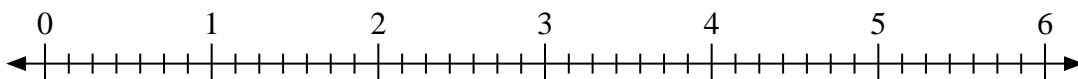
5)  $3 \div \frac{7}{9}$



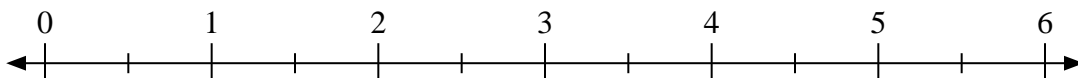
6)  $3 \div \frac{1}{2}$



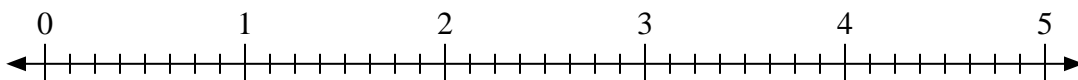
7)  $5 \div \frac{3}{7}$



8)  $5 \div \frac{1}{2}$



9)  $4 \div \frac{4}{8}$



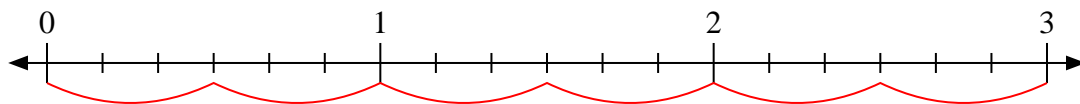
Answers

1. \_\_\_\_\_
2. \_\_\_\_\_
3. \_\_\_\_\_
4. \_\_\_\_\_
5. \_\_\_\_\_
6. \_\_\_\_\_
7. \_\_\_\_\_
8. \_\_\_\_\_
9. \_\_\_\_\_

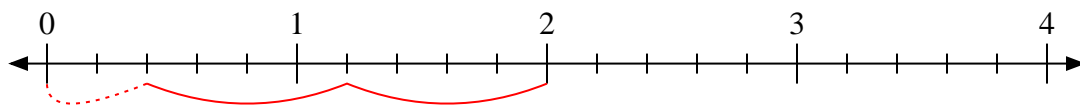


Use the numberline to solve.

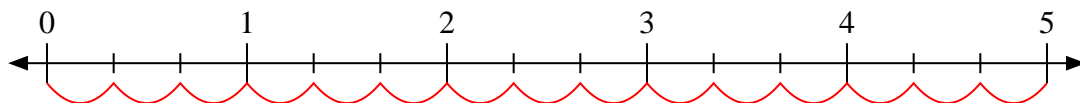
1)  $3 \div \frac{3}{6}$



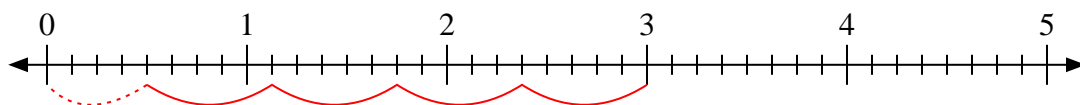
2)  $2 \div \frac{4}{5}$



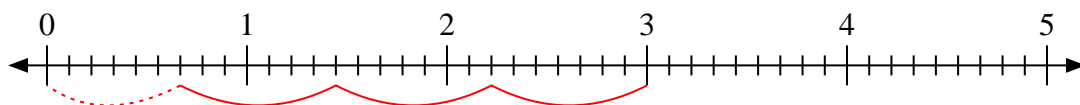
3)  $5 \div \frac{1}{3}$



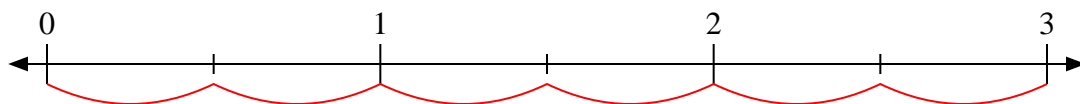
4)  $3 \div \frac{5}{8}$



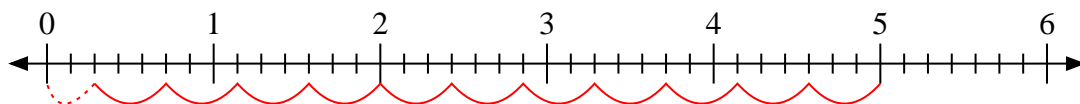
5)  $3 \div \frac{7}{9}$



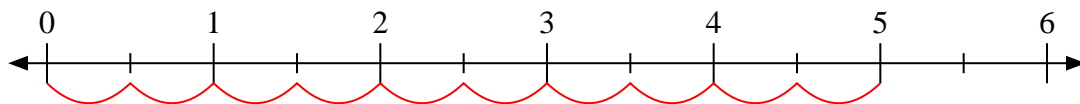
6)  $3 \div \frac{1}{2}$



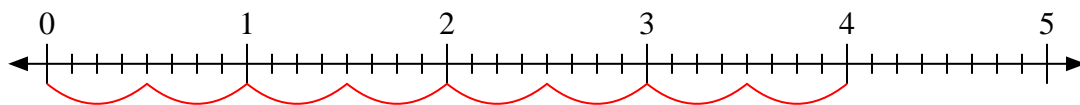
7)  $5 \div \frac{3}{7}$



8)  $5 \div \frac{1}{2}$



9)  $4 \div \frac{4}{8}$



Answers

1. 6

2.  $2 \frac{2}{4}$

3. 15

4.  $4 \frac{4}{5}$

5.  $3 \frac{6}{7}$

6. 6

7.  $11 \frac{2}{3}$

8. 10

9. 8