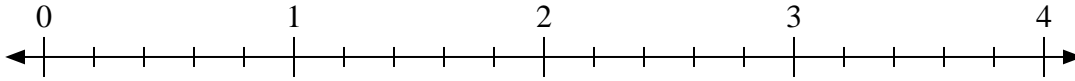


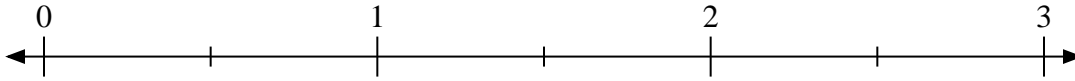


Use the numberline to solve.

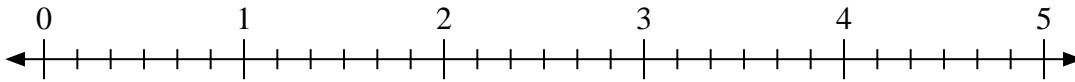
1)  $2 \div \frac{1}{5}$



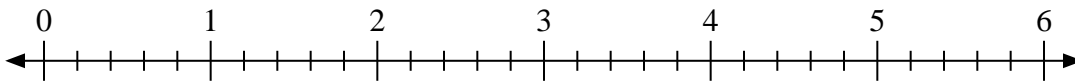
2)  $3 \div \frac{1}{2}$



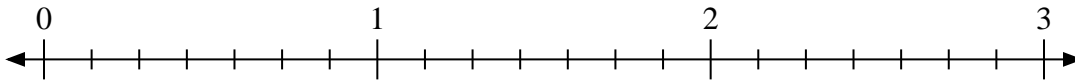
3)  $3 \div \frac{1}{6}$



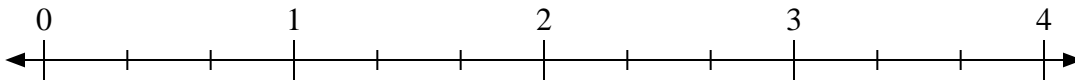
4)  $6 \div \frac{4}{5}$



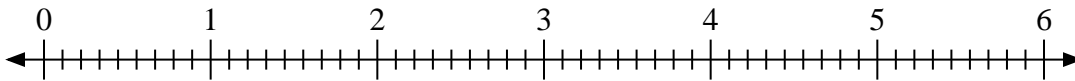
5)  $3 \div \frac{5}{7}$



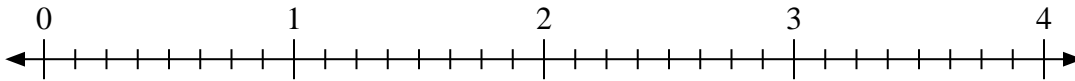
6)  $4 \div \frac{2}{3}$



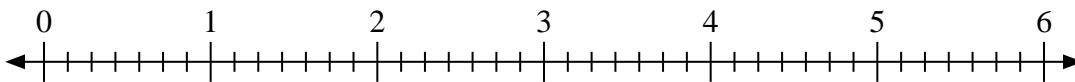
7)  $4 \div \frac{5}{9}$



8)  $4 \div \frac{7}{8}$



9)  $5 \div \frac{3}{7}$



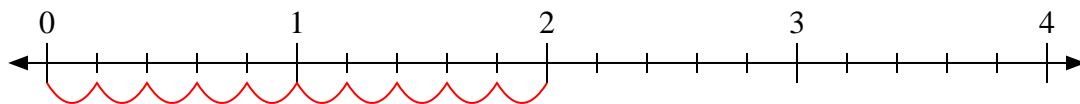
Answers

1. \_\_\_\_\_
2. \_\_\_\_\_
3. \_\_\_\_\_
4. \_\_\_\_\_
5. \_\_\_\_\_
6. \_\_\_\_\_
7. \_\_\_\_\_
8. \_\_\_\_\_
9. \_\_\_\_\_

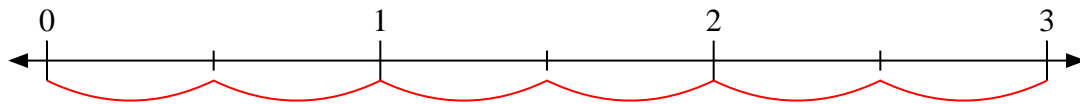


Use the numberline to solve.

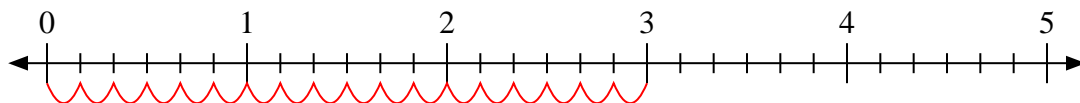
1)  $2 \div \frac{1}{5}$



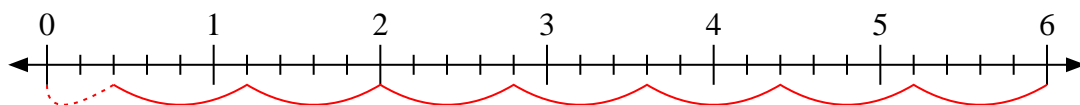
2)  $3 \div \frac{1}{2}$



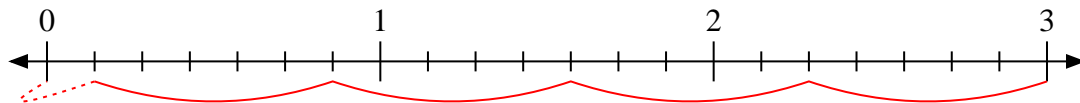
3)  $3 \div \frac{1}{6}$



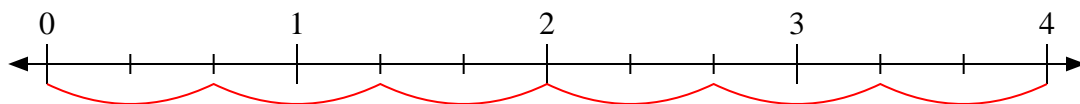
4)  $6 \div \frac{4}{5}$



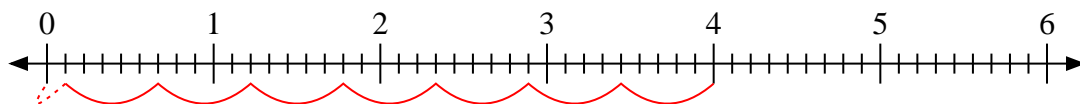
5)  $3 \div \frac{5}{7}$



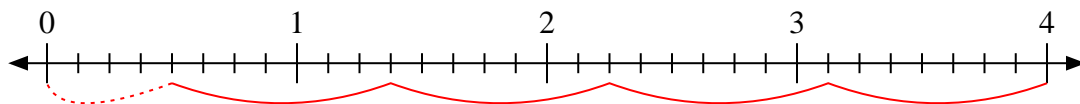
6)  $4 \div \frac{2}{3}$



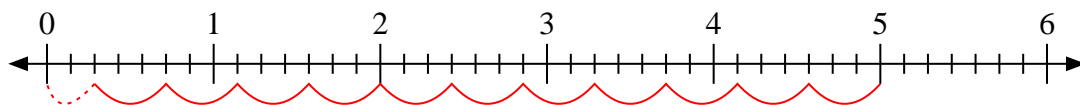
7)  $4 \div \frac{5}{9}$



8)  $4 \div \frac{7}{8}$



9)  $5 \div \frac{3}{7}$



Answers

1. **10**

2. **6**

3. **18**

4.  **$7 \frac{2}{4}$**

5.  **$4 \frac{1}{5}$**

6. **6**

7.  **$7 \frac{1}{5}$**

8.  **$4 \frac{4}{7}$**

9.  **$11 \frac{2}{3}$**