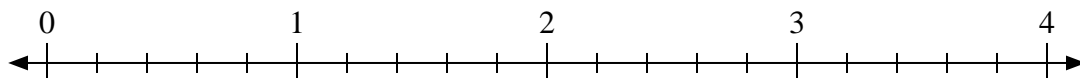


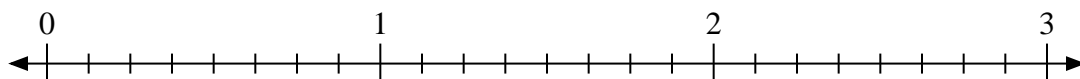


Use the numberline to solve.

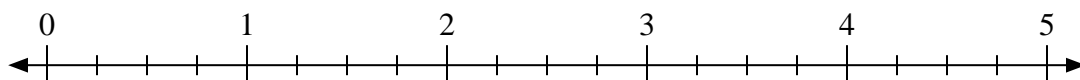
1) $3 \div \frac{3}{5}$



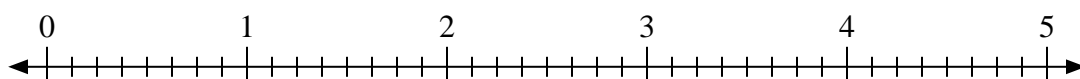
2) $3 \div \frac{7}{8}$



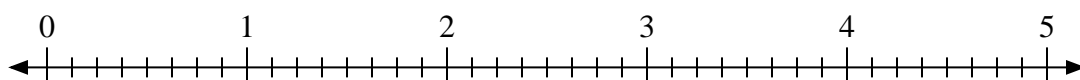
3) $2 \div \frac{1}{4}$




4) $4 \div \frac{6}{8}$



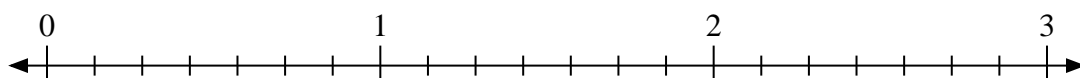
5) $2 \div \frac{7}{8}$



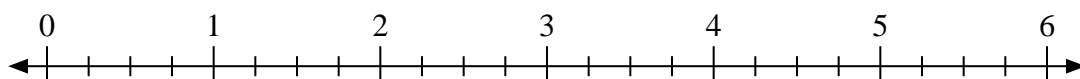
6) $2 \div \frac{1}{3}$



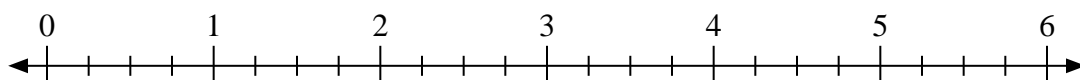
7) $3 \div \frac{4}{7}$



8) $5 \div \frac{3}{4}$



9) $6 \div \frac{3}{4}$



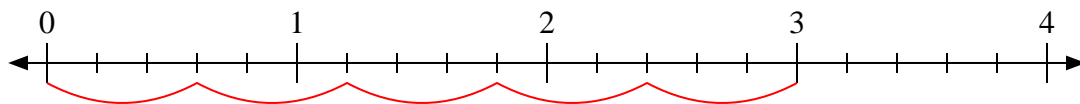
Answers

1. _____
2. _____
3. _____
4. _____
5. _____
6. _____
7. _____
8. _____
9. _____

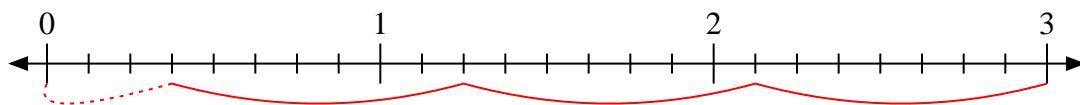


Use the numberline to solve.

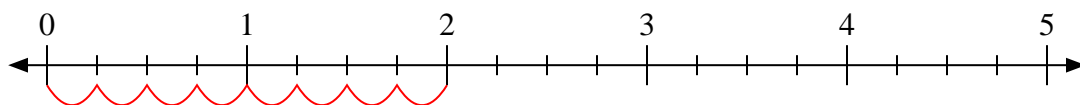
1) $3 \div \frac{3}{5}$



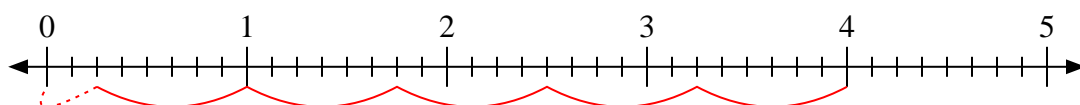
2) $3 \div \frac{7}{8}$



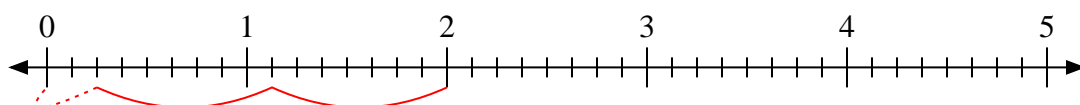
3) $2 \div \frac{1}{4}$



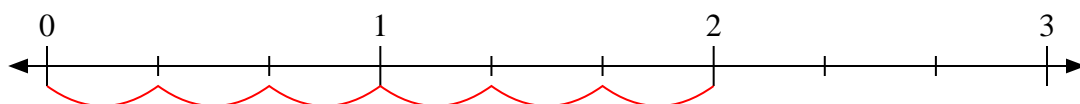
4) $4 \div \frac{6}{8}$



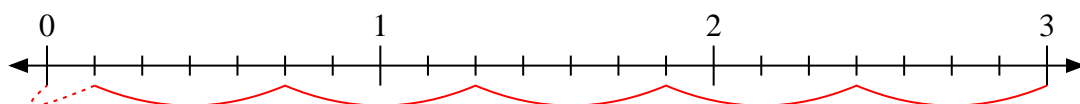
5) $2 \div \frac{7}{8}$



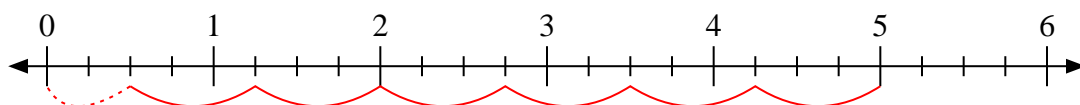
6) $2 \div \frac{1}{3}$



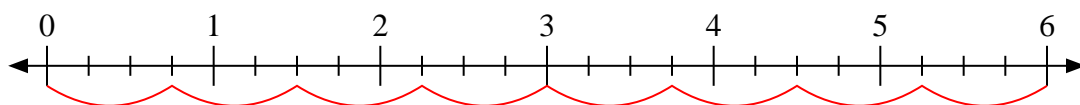
7) $3 \div \frac{4}{7}$



8) $5 \div \frac{3}{4}$



9) $6 \div \frac{3}{4}$



Answers

1. 5

2. $3 \frac{3}{7}$

3. 8

4. $5 \frac{2}{6}$

5. $2 \frac{2}{7}$

6. 6

7. $5 \frac{1}{4}$

8. $6 \frac{2}{3}$

9. 8