



Solve each problem by marking off the fractions. The first is completed for you.

**Answers**

Ex)  $3 \div \frac{1}{5} = ?$  This is the same as saying: How many  $\frac{1}{5}$  are there in 3 wholes?

Ex. **15**

1 Whole					1 Whole					1 Whole				

1. \_\_\_\_\_

1)  $5 \div \frac{1}{5} =$

2. \_\_\_\_\_

1 Whole		1 Whole		1 Whole		1 Whole		1 Whole	

3. \_\_\_\_\_

2)  $2 \div \frac{1}{3} =$

4. \_\_\_\_\_

1 Whole			1 Whole		

5. \_\_\_\_\_

3)  $4 \div \frac{1}{7} =$

6. \_\_\_\_\_

1 Whole		1 Whole		1 Whole		1 Whole	

7. \_\_\_\_\_

4)  $5 \div \frac{1}{6} =$

8. \_\_\_\_\_

1 Whole		1 Whole		1 Whole		1 Whole		1 Whole	

9. \_\_\_\_\_

5)  $2 \div \frac{1}{7} =$

1 Whole			1 Whole		

6)  $4 \div \frac{1}{4} =$

1 Whole		1 Whole		1 Whole		1 Whole	

7)  $3 \div \frac{1}{6} =$

1 Whole		1 Whole		1 Whole	

8)  $3 \div \frac{1}{4} =$

1 Whole		1 Whole		1 Whole	

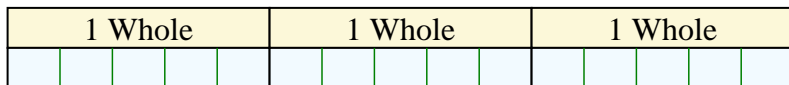
9)  $5 \div \frac{1}{3} =$

1 Whole		1 Whole		1 Whole		1 Whole		1 Whole	

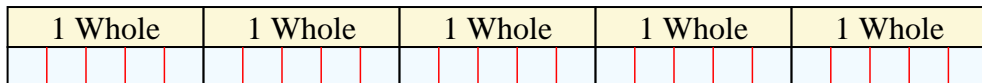


Solve each problem by marking off the fractions. The first is completed for you.


Ex)  $3 \div \frac{1}{5} = ?$  This is the same as saying: How many  $\frac{1}{5}$  are the in 3 wholes?




1)  $5 \div \frac{1}{5} =$  This is the same as saying: How many  $\frac{1}{5}$  are the in 5 wholes?



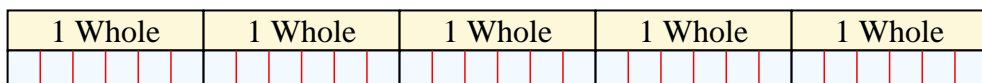
2)  $2 \div \frac{1}{3} =$  This is the same as saying: How many  $\frac{1}{3}$  are the in 2 wholes?




3)  $4 \div \frac{1}{7} =$  This is the same as saying: How many  $\frac{1}{7}$  are the in 4 wholes?



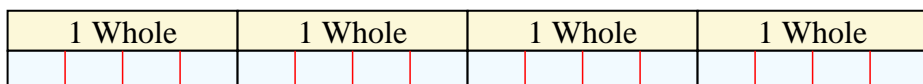
4)  $5 \div \frac{1}{6} =$  This is the same as saying: How many  $\frac{1}{6}$  are the in 5 wholes?



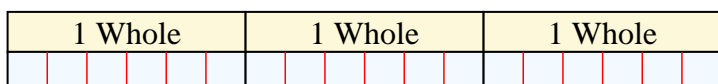
5)  $2 \div \frac{1}{7} =$  This is the same as saying: How many  $\frac{1}{7}$  are the in 2 wholes?



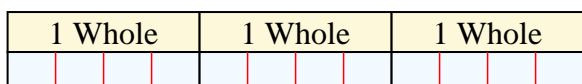
6)  $4 \div \frac{1}{4} =$  This is the same as saying: How many  $\frac{1}{4}$  are the in 4 wholes?



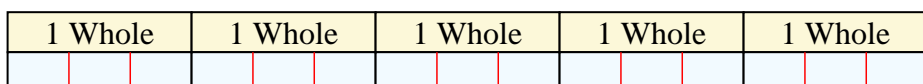
7)  $3 \div \frac{1}{6} =$  This is the same as saying: How many  $\frac{1}{6}$  are the in 3 wholes?



8)  $3 \div \frac{1}{4} =$  This is the same as saying: How many  $\frac{1}{4}$  are the in 3 wholes?



9)  $5 \div \frac{1}{3} =$  This is the same as saying: How many  $\frac{1}{3}$  are the in 5 wholes?



**Answers**

Ex. 15

1. 25

2. 6

3. 28

4. 30

5. 14

6. 16

7. 18

8. 12

9. 15