



Solve each problem by marking off the fractions. The first is completed for you.

Answers

Ex) $4 \div \frac{1}{4} = ?$ This is the same as saying: How many $\frac{1}{4}$ are there in 4 wholes?

Ex. **16**

1 Whole				1 Whole				1 Whole				1 Whole			

1. _____

1) $3 \div \frac{1}{4} =$

2. _____

1 Whole				1 Whole				1 Whole			

3. _____

2) $4 \div \frac{1}{7} =$

4. _____

1 Whole		1 Whole		1 Whole		1 Whole	

5. _____

3) $6 \div \frac{1}{7} =$

6. _____

1 Whole		1 Whole		1 Whole		1 Whole		1 Whole		1 Whole	

7. _____

4) $5 \div \frac{1}{7} =$

8. _____

1 Whole		1 Whole		1 Whole		1 Whole		1 Whole	

9. _____

5) $5 \div \frac{1}{2} =$

1 Whole		1 Whole		1 Whole		1 Whole		1 Whole	

6) $3 \div \frac{1}{3} =$

1 Whole		1 Whole		1 Whole	

7) $3 \div \frac{1}{7} =$

1 Whole			1 Whole			1 Whole		

8) $5 \div \frac{1}{5} =$

1 Whole		1 Whole		1 Whole		1 Whole		1 Whole	

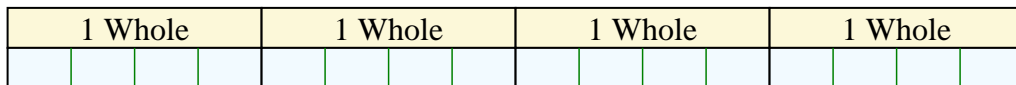
9) $4 \div \frac{1}{6} =$

1 Whole			1 Whole			1 Whole			1 Whole		

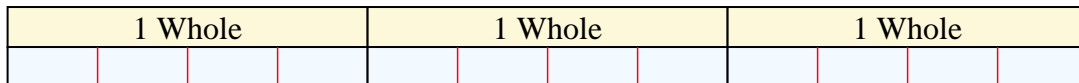


Solve each problem by marking off the fractions. The first is completed for you.


Ex) $4 \div \frac{1}{4} = ?$ This is the same as saying: How many $\frac{1}{4}$ are the in 4 wholes?




1) $3 \div \frac{1}{4} =$ This is the same as saying: How many $\frac{1}{4}$ are the in 3 wholes?



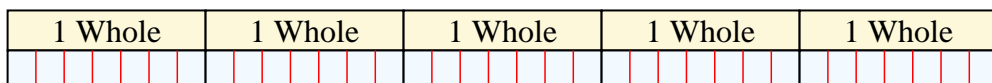
2) $4 \div \frac{1}{7} =$ This is the same as saying: How many $\frac{1}{7}$ are the in 4 wholes?



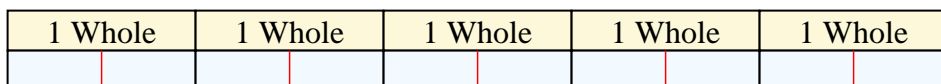
3) $6 \div \frac{1}{7} =$ This is the same as saying: How many $\frac{1}{7}$ are the in 6 wholes?



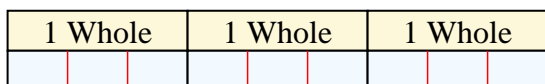
4) $5 \div \frac{1}{7} =$ This is the same as saying: How many $\frac{1}{7}$ are the in 5 wholes?



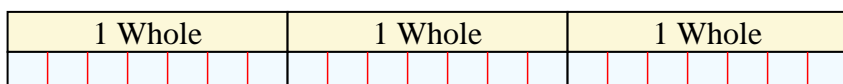
5) $5 \div \frac{1}{2} =$ This is the same as saying: How many $\frac{1}{2}$ are the in 5 wholes?



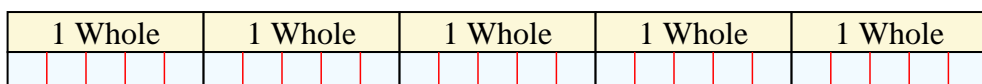
6) $3 \div \frac{1}{3} =$ This is the same as saying: How many $\frac{1}{3}$ are the in 3 wholes?




7) $3 \div \frac{1}{7} =$ This is the same as saying: How many $\frac{1}{7}$ are the in 3 wholes?



8) $5 \div \frac{1}{5} =$ This is the same as saying: How many $\frac{1}{5}$ are the in 5 wholes?



9) $4 \div \frac{1}{6} =$ This is the same as saying: How many $\frac{1}{6}$ are the in 4 wholes?



Answers

Ex. 16

1. 12

2. 28

3. 42

4. 35

5. 10

6. 9

7. 21

8. 25

9. 24