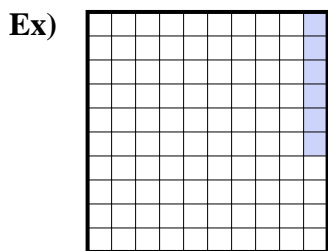
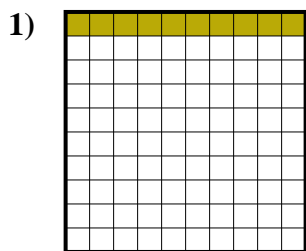




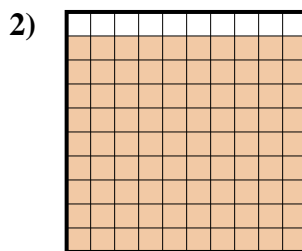
Determine the value written as a fraction , decimal & a percent.



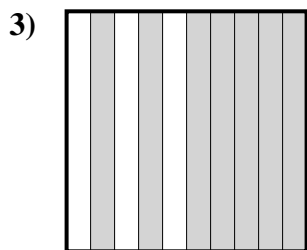
fraction $\frac{6}{100}$
 decimal 0.06
 percent 6



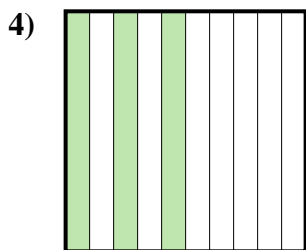
fraction $\frac{10}{100}$
 decimal 0.10
 percent 10



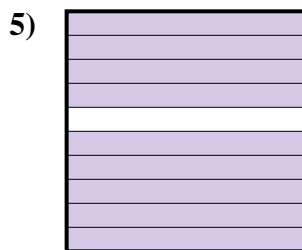
fraction $\frac{90}{100}$
 decimal 0.90
 percent 90



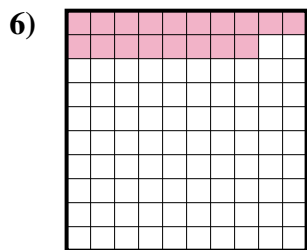
fraction $\frac{7}{10}$
 decimal 0.7
 percent 70



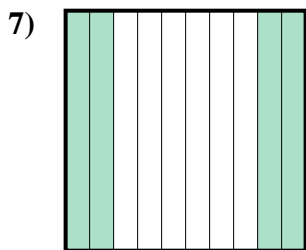
fraction $\frac{3}{10}$
 decimal 0.3
 percent 30



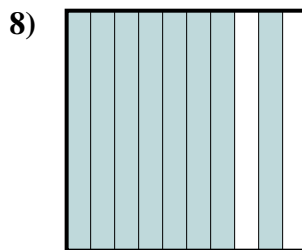
fraction $\frac{9}{10}$
 decimal 0.9
 percent 90



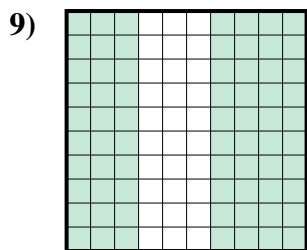
fraction $\frac{18}{100}$
 decimal 0.18
 percent 18




fraction $\frac{4}{10}$
 decimal 0.4
 percent 40



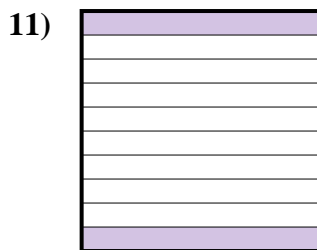
fraction $\frac{8}{10}$
 decimal 0.8
 percent 80



fraction $\frac{70}{100}$
 decimal 0.70
 percent 70



fraction $\frac{1}{10}$
 decimal 0.1
 percent 10



fraction $\frac{2}{10}$
 decimal 0.2
 percent 20

Answers

- Ex. $\frac{6}{100}$ **0.06** **6%**
 1. $\frac{10}{100}$ **0.10** **10%**
 2. $\frac{90}{100}$ **0.90** **90%**
 3. $\frac{7}{10}$ **0.7** **70%**
 4. $\frac{3}{10}$ **0.3** **30%**
 5. $\frac{9}{10}$ **0.9** **90%**
 6. $\frac{18}{100}$ **0.18** **18%**
 7. $\frac{4}{10}$ **0.4** **40%**
 8. $\frac{8}{10}$ **0.8** **80%**
 9. $\frac{70}{100}$ **0.70** **70%**
 10. $\frac{1}{10}$ **0.1** **10%**
 11. $\frac{2}{10}$ **0.2** **20%**