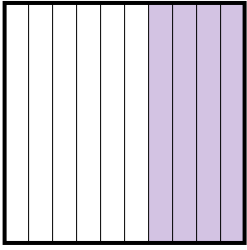




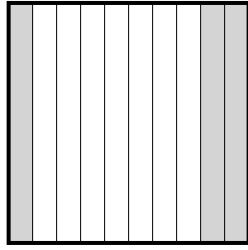
Determine the value written as a fraction , decimal & a percent.

Ex)



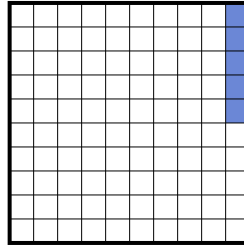
fraction $\frac{4}{10}$
 decimal 0.4
 percent 40

1)



fraction _____
 decimal _____
 percent _____

2)



fraction _____
 decimal _____
 percent _____

Answers

Ex. $\frac{4}{10}$ 0.4 40%

1. _____

2. _____

3. _____

4. _____

5. _____

6. _____

7. _____


8. _____

9. _____

10. _____

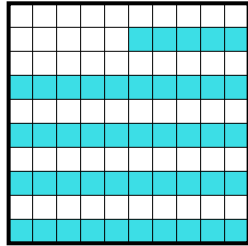
11. _____

3)



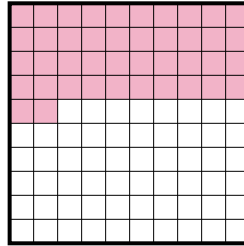
fraction _____
 decimal _____
 percent _____

4)




fraction _____
 decimal _____
 percent _____

5)




fraction _____
 decimal _____
 percent _____

6)



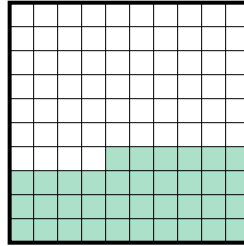
fraction _____
 decimal _____
 percent _____

7)



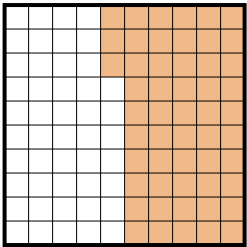
fraction _____
 decimal _____
 percent _____

8)



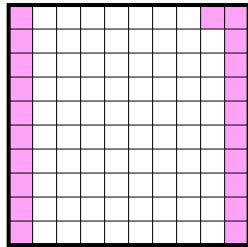
fraction _____
 decimal _____
 percent _____

9)




fraction _____
 decimal _____
 percent _____

10)



fraction _____
 decimal _____
 percent _____

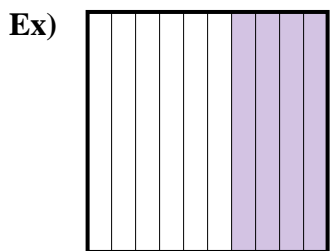
11)



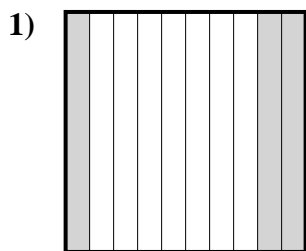
fraction _____
 decimal _____
 percent _____



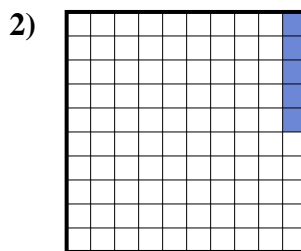
Determine the value written as a fraction , decimal & a percent.



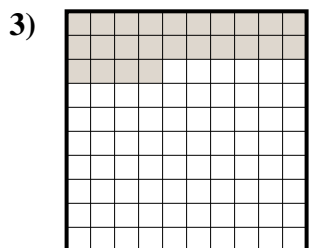
fraction $\frac{4}{10}$
 decimal 0.4
 percent 40



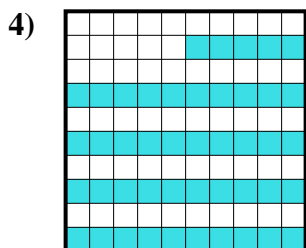
fraction $\frac{3}{10}$
 decimal 0.3
 percent 30



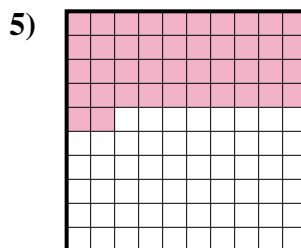
fraction $\frac{5}{100}$
 decimal 0.05
 percent 5




fraction $\frac{24}{100}$
 decimal 0.24
 percent 24




fraction $\frac{45}{100}$
 decimal 0.45
 percent 45



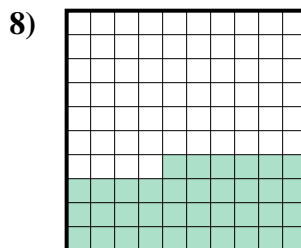
fraction $\frac{42}{100}$
 decimal 0.42
 percent 42



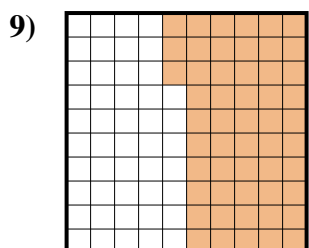
fraction $\frac{2}{10}$
 decimal 0.2
 percent 20



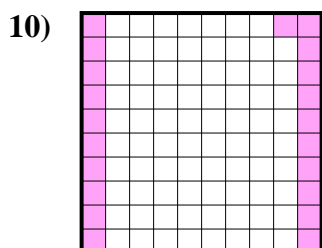
fraction $\frac{1}{10}$
 decimal 0.1
 percent 10



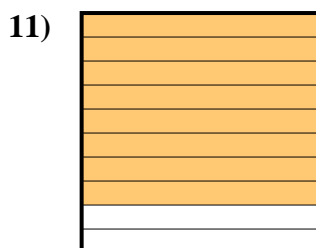
fraction $\frac{36}{100}$
 decimal 0.36
 percent 36



fraction $\frac{53}{100}$
 decimal 0.53
 percent 53



fraction $\frac{21}{100}$
 decimal 0.21
 percent 21



fraction $\frac{8}{10}$
 decimal 0.8
 percent 80

Answers

- Ex. $\frac{4}{10}$ **0.4** **40%**
 1. $\frac{3}{10}$ **0.3** **30%**
 2. $\frac{5}{100}$ **0.05** **5%**
 3. $\frac{24}{100}$ **0.24** **24%**
 4. $\frac{45}{100}$ **0.45** **45%**
 5. $\frac{42}{100}$ **0.42** **42%**
 6. $\frac{2}{10}$ **0.2** **20%**
 7. $\frac{1}{10}$ **0.1** **10%**
 8. $\frac{36}{100}$ **0.36** **36%**
 9. $\frac{53}{100}$ **0.53** **53%**
 10. $\frac{21}{100}$ **0.21** **21%**
 11. $\frac{8}{10}$ **0.8** **80%**