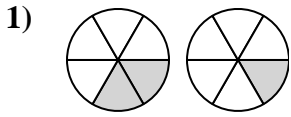


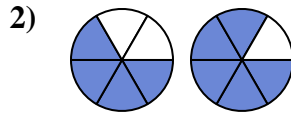


Determine which letter best compares the fractions shown.

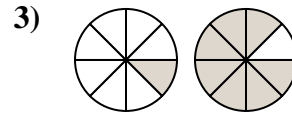
**Answers**



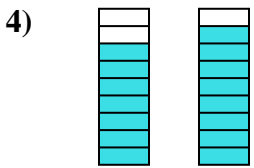
- A.  $\frac{4}{2} < \frac{5}{1}$
- B.  $\frac{2}{6} > \frac{1}{6}$
- C.  $\frac{6}{2} > \frac{6}{1}$
- D.  $\frac{4}{2} > \frac{5}{1}$



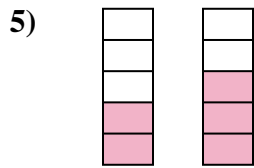
- A.  $\frac{4}{6} < \frac{5}{6}$
- B.  $\frac{2}{4} > \frac{1}{5}$
- C.  $\frac{2}{4} < \frac{1}{5}$
- D.  $\frac{6}{4} > \frac{6}{5}$



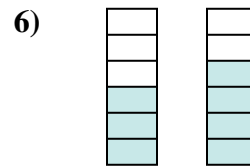
- A.  $\frac{7}{1} > \frac{1}{7}$
- B.  $\frac{7}{1} < \frac{1}{7}$
- C.  $\frac{1}{7} > \frac{7}{1}$
- D.  $\frac{1}{8} < \frac{7}{8}$



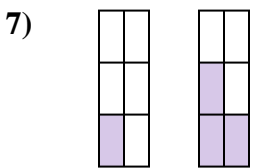
- A.  $\frac{7}{9} < \frac{8}{9}$
- B.  $\frac{9}{7} > \frac{9}{8}$
- C.  $\frac{2}{7} > \frac{1}{8}$
- D.  $\frac{2}{7} < \frac{1}{8}$



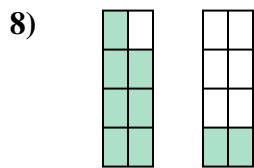
- A.  $\frac{3}{2} < \frac{2}{3}$
- B.  $\frac{3}{2} > \frac{2}{3}$
- C.  $\frac{2}{5} < \frac{3}{5}$
- D.  $\frac{2}{3} > \frac{3}{2}$



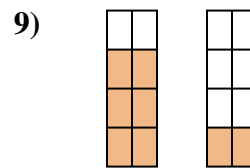
- A.  $\frac{3}{3} > \frac{4}{2}$
- B.  $\frac{3}{6} < \frac{4}{6}$
- C.  $\frac{3}{3} < \frac{4}{2}$
- D.  $\frac{3}{3} < \frac{2}{4}$



- A.  $\frac{6}{1} > \frac{6}{3}$
- B.  $\frac{5}{1} > \frac{3}{3}$
- C.  $\frac{1}{6} < \frac{3}{6}$
- D.  $\frac{1}{6} > \frac{3}{6}$



- A.  $\frac{1}{7} > \frac{6}{2}$
- B.  $\frac{7}{1} > \frac{2}{6}$
- C.  $\frac{1}{7} < \frac{6}{2}$
- D.  $\frac{7}{8} > \frac{2}{8}$

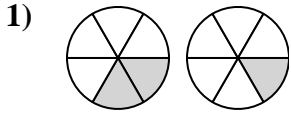


- A.  $\frac{6}{8} > \frac{2}{8}$
- B.  $\frac{6}{2} < \frac{2}{6}$
- C.  $\frac{2}{6} < \frac{6}{2}$
- D.  $\frac{2}{6} > \frac{6}{2}$

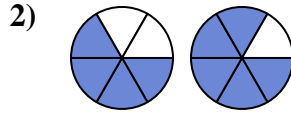
1. \_\_\_\_\_
2. \_\_\_\_\_
3. \_\_\_\_\_
4. \_\_\_\_\_
5. \_\_\_\_\_
6. \_\_\_\_\_
7. \_\_\_\_\_
8. \_\_\_\_\_
9. \_\_\_\_\_



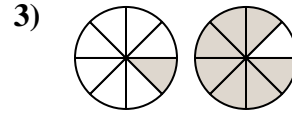
Determine which letter best compares the fractions shown.



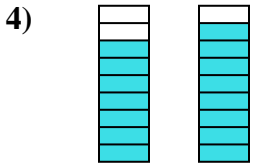
- A.  $\frac{4}{2} < \frac{5}{1}$
- B.  $\frac{2}{6} > \frac{1}{6}$
- C.  $\frac{6}{2} > \frac{6}{1}$
- D.  $\frac{4}{2} > \frac{5}{1}$



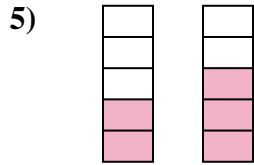
- A.  $\frac{4}{6} < \frac{5}{6}$
- B.  $\frac{2}{4} > \frac{1}{5}$
- C.  $\frac{2}{4} < \frac{1}{5}$
- D.  $\frac{6}{4} > \frac{6}{5}$



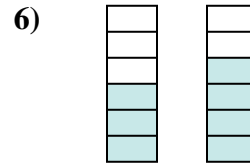
- A.  $\frac{7}{1} > \frac{1}{7}$
- B.  $\frac{7}{1} < \frac{1}{7}$
- C.  $\frac{1}{7} > \frac{7}{1}$
- D.  $\frac{1}{8} < \frac{7}{8}$



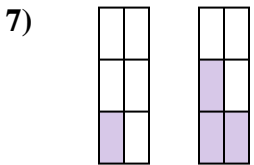
- A.  $\frac{7}{9} < \frac{8}{9}$
- B.  $\frac{9}{7} > \frac{9}{8}$
- C.  $\frac{2}{7} > \frac{1}{8}$
- D.  $\frac{2}{7} < \frac{1}{8}$



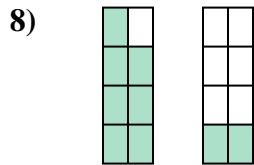
- A.  $\frac{3}{2} < \frac{2}{3}$
- B.  $\frac{3}{2} > \frac{2}{3}$
- C.  $\frac{2}{5} < \frac{3}{5}$
- D.  $\frac{2}{3} > \frac{3}{2}$



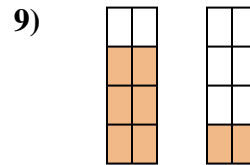
- A.  $\frac{3}{3} > \frac{4}{2}$
- B.  $\frac{3}{6} < \frac{4}{6}$
- C.  $\frac{3}{3} < \frac{4}{2}$
- D.  $\frac{3}{3} < \frac{2}{4}$



- A.  $\frac{6}{1} > \frac{6}{3}$
- B.  $\frac{5}{1} > \frac{3}{3}$
- C.  $\frac{1}{6} < \frac{3}{6}$
- D.  $\frac{1}{6} > \frac{3}{6}$



- A.  $\frac{1}{7} > \frac{6}{2}$
- B.  $\frac{7}{1} > \frac{2}{6}$
- C.  $\frac{1}{7} < \frac{6}{2}$
- D.  $\frac{7}{8} > \frac{2}{8}$



- A.  $\frac{6}{8} > \frac{2}{8}$
- B.  $\frac{6}{2} < \frac{2}{6}$
- C.  $\frac{2}{6} < \frac{6}{2}$
- D.  $\frac{2}{6} > \frac{6}{2}$

**Answers**

- 1.     **B**
- 2.     **A**
- 3.     **D**
- 4.     **A**
- 5.     **C**
- 6.     **B**
- 7.     **C**
- 8.     **D**
- 9.     **A**