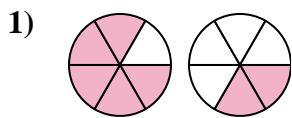


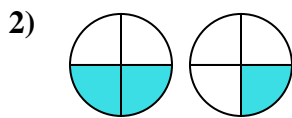


Determine which letter best compares the fractions shown.

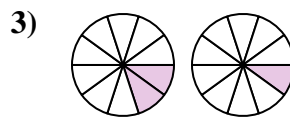
Answers



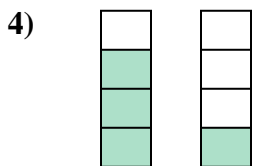
- A. $\frac{5}{1} < \frac{2}{4}$
- B. $\frac{5}{6} < \frac{2}{6}$
- C. $\frac{6}{5} > \frac{6}{2}$
- D. $\frac{5}{6} > \frac{2}{6}$



- A. $\frac{2}{2} > \frac{1}{3}$
- B. $\frac{4}{2} > \frac{4}{1}$
- C. $\frac{2}{4} < \frac{1}{4}$
- D. $\frac{2}{4} > \frac{1}{4}$



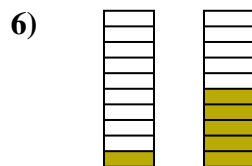
- A. $\frac{2}{10} > \frac{1}{10}$
- B. $\frac{2}{10} < \frac{1}{10}$
- C. $\frac{2}{8} < \frac{1}{9}$
- D. $\frac{8}{2} > \frac{9}{1}$



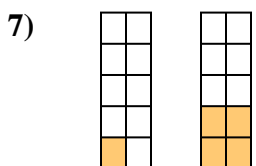
- A. $\frac{3}{1} > \frac{1}{3}$
- B. $\frac{4}{3} > \frac{4}{1}$
- C. $\frac{3}{1} < \frac{1}{3}$
- D. $\frac{3}{4} > \frac{1}{4}$



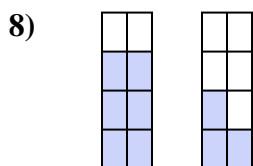
- A. $\frac{2}{4} < \frac{3}{3}$
- B. $\frac{6}{2} > \frac{6}{3}$
- C. $\frac{2}{6} < \frac{3}{6}$
- D. $\frac{4}{2} > \frac{3}{3}$



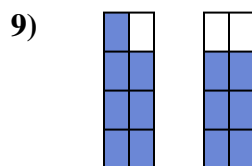
- A. $\frac{1}{9} < \frac{5}{5}$
- B. $\frac{9}{1} < \frac{5}{5}$
- C. $\frac{10}{1} > \frac{10}{5}$
- D. $\frac{1}{10} < \frac{5}{10}$



- A. $\frac{9}{1} > \frac{6}{4}$
- B. $\frac{10}{1} > \frac{10}{4}$
- C. $\frac{1}{10} < \frac{4}{10}$
- D. $\frac{1}{10} > \frac{4}{10}$



- A. $\frac{6}{8} > \frac{3}{8}$
- B. $\frac{8}{6} > \frac{8}{3}$
- C. $\frac{6}{2} < \frac{3}{5}$
- D. $\frac{2}{6} > \frac{5}{3}$

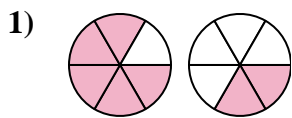


- A. $\frac{1}{7} > \frac{2}{6}$
- B. $\frac{7}{8} > \frac{6}{8}$
- C. $\frac{7}{1} < \frac{6}{2}$
- D. $\frac{1}{7} < \frac{2}{6}$

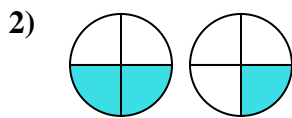
- 1. _____
- 2. _____
- 3. _____
- 4. _____
- 5. _____
- 6. _____
- 7. _____
- 8. _____
- 9. _____



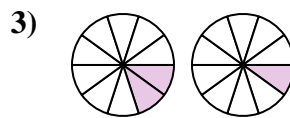
Determine which letter best compares the fractions shown.



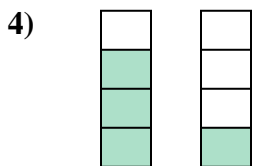
- A. $\frac{5}{1} < \frac{2}{4}$
- B. $\frac{5}{6} < \frac{2}{6}$
- C. $\frac{6}{5} > \frac{6}{2}$
- D. $\frac{5}{6} > \frac{2}{6}$



- A. $\frac{2}{2} > \frac{1}{3}$
- B. $\frac{4}{2} > \frac{4}{1}$
- C. $\frac{2}{4} < \frac{1}{4}$
- D. $\frac{2}{4} > \frac{1}{4}$



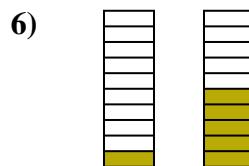
- A. $\frac{2}{10} > \frac{1}{10}$
- B. $\frac{2}{10} < \frac{1}{10}$
- C. $\frac{2}{8} < \frac{1}{9}$
- D. $\frac{8}{2} > \frac{9}{1}$



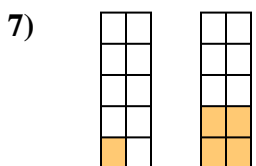
- A. $\frac{3}{1} > \frac{1}{3}$
- B. $\frac{4}{3} > \frac{4}{1}$
- C. $\frac{3}{1} < \frac{1}{3}$
- D. $\frac{3}{4} > \frac{1}{4}$



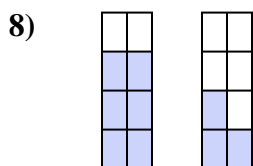
- A. $\frac{2}{4} < \frac{3}{3}$
- B. $\frac{6}{2} > \frac{6}{3}$
- C. $\frac{2}{6} < \frac{3}{6}$
- D. $\frac{4}{2} > \frac{3}{3}$



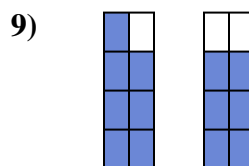
- A. $\frac{1}{9} < \frac{5}{5}$
- B. $\frac{9}{1} < \frac{5}{5}$
- C. $\frac{10}{1} > \frac{10}{5}$
- D. $\frac{1}{10} < \frac{5}{10}$



- A. $\frac{9}{1} > \frac{6}{4}$
- B. $\frac{10}{1} > \frac{10}{4}$
- C. $\frac{1}{10} < \frac{4}{10}$
- D. $\frac{1}{10} > \frac{4}{10}$



- A. $\frac{6}{8} > \frac{3}{8}$
- B. $\frac{8}{6} > \frac{8}{3}$
- C. $\frac{6}{2} < \frac{3}{5}$
- D. $\frac{2}{6} > \frac{5}{3}$



- A. $\frac{1}{7} > \frac{2}{6}$
- B. $\frac{7}{8} > \frac{6}{8}$
- C. $\frac{7}{1} < \frac{6}{2}$
- D. $\frac{1}{7} < \frac{2}{6}$

Answers

- 1. **D**
- 2. **D**
- 3. **A**
- 4. **D**
- 5. **C**
- 6. **D**
- 7. **C**
- 8. **A**
- 9. **B**