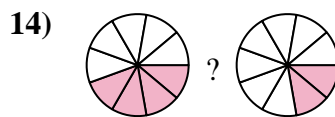
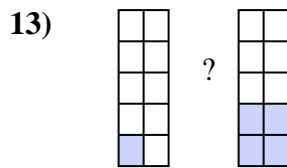
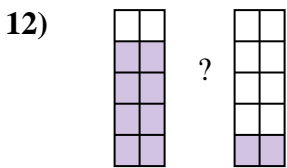
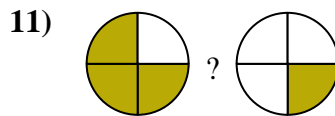
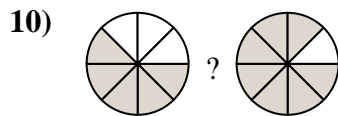
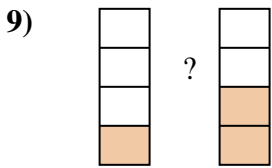
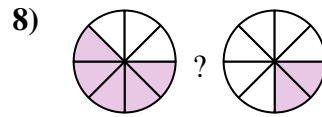
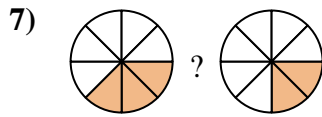
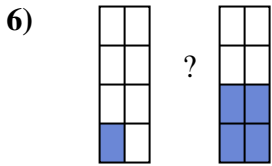
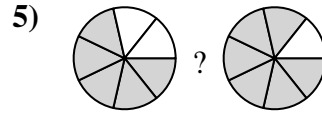
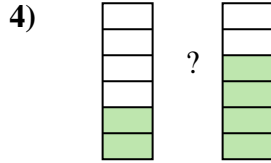
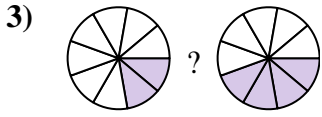
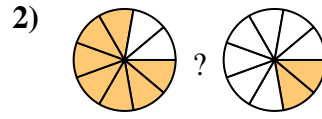
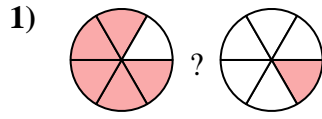
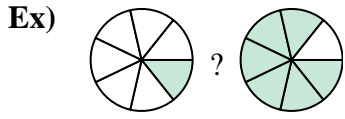




Compare the size of the fractions using  $<$ ,  $>$  or  $=$ .



**Answers**

Ex.  $\frac{1}{7} < \frac{6}{7}$

1. \_\_\_\_\_

2. \_\_\_\_\_

3. \_\_\_\_\_

4. \_\_\_\_\_

5. \_\_\_\_\_

6. \_\_\_\_\_

7. \_\_\_\_\_

8. \_\_\_\_\_

9. \_\_\_\_\_

10. \_\_\_\_\_

11. \_\_\_\_\_

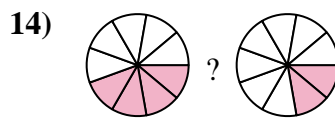
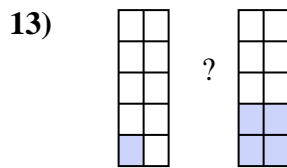
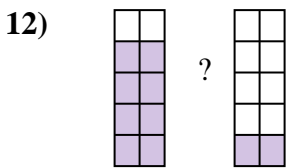
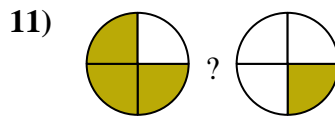
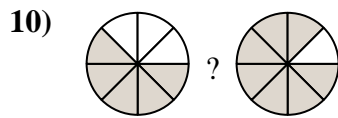
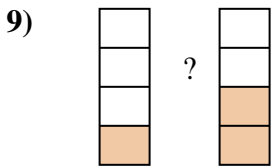
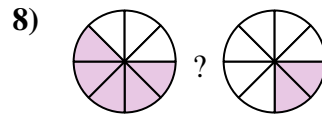
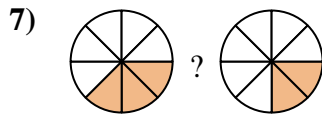
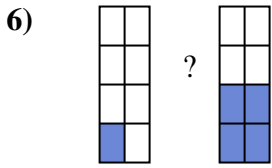
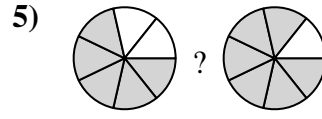
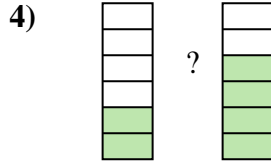
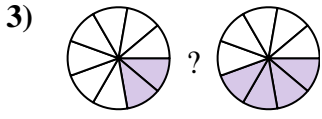
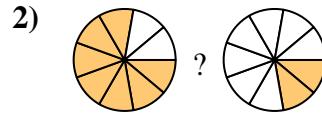
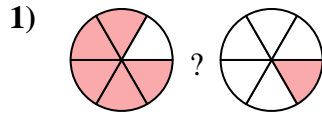
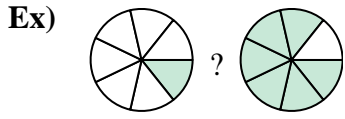
12. \_\_\_\_\_

13. \_\_\_\_\_

14. \_\_\_\_\_



Compare the size of the fractions using  $<$ ,  $>$  or  $=$ .



**Answers**

Ex.	$\frac{1}{7}$	$<$	$\frac{6}{7}$
1.	$\frac{5}{6}$	$>$	$\frac{1}{6}$
2.	$\frac{7}{9}$	$>$	$\frac{2}{9}$
3.	$\frac{2}{9}$	$<$	$\frac{4}{9}$
4.	$\frac{2}{6}$	$<$	$\frac{4}{6}$
5.	$\frac{5}{7}$	$<$	$\frac{6}{7}$
6.	$\frac{1}{8}$	$<$	$\frac{4}{8}$
7.	$\frac{3}{8}$	$>$	$\frac{2}{8}$
8.	$\frac{5}{8}$	$>$	$\frac{2}{8}$
9.	$\frac{1}{4}$	$<$	$\frac{2}{4}$
10.	$\frac{5}{8}$	$<$	$\frac{7}{8}$
11.	$\frac{3}{4}$	$>$	$\frac{1}{4}$
12.	$\frac{8}{10}$	$>$	$\frac{2}{10}$
13.	$\frac{1}{10}$	$<$	$\frac{4}{10}$
14.	$\frac{4}{9}$	$>$	$\frac{2}{9}$