



Match each equation to the answer and write the answer.

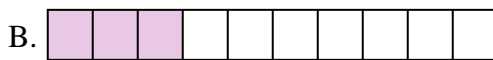
Answers

Ex) $\frac{1}{8} + \frac{1}{8} + \frac{1}{8} + \frac{1}{8} + \frac{1}{8}$



Ex. **J**

1) $\frac{1}{5} + \frac{1}{5} + \frac{1}{5}$




1. _____

2) $\frac{1}{4} + \frac{1}{4}$



2. _____

3) $\frac{1}{5} + \frac{1}{5} + \frac{1}{5} + \frac{1}{5}$




3. _____

4) $\frac{1}{8} + \frac{1}{8}$



5. _____

5) $\frac{1}{4} + \frac{1}{4} + \frac{1}{4}$




6. _____

6) $\frac{1}{5} + \frac{1}{5}$




7. _____

7) $\frac{1}{8} + \frac{1}{8} + \frac{1}{8} + \frac{1}{8} + \frac{1}{8} + \frac{1}{8}$




8. _____

8) $\frac{1}{6} + \frac{1}{6} + \frac{1}{6} + \frac{1}{6} + \frac{1}{6}$



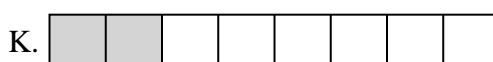
9. _____

9) $\frac{1}{6} + \frac{1}{6} + \frac{1}{6} + \frac{1}{6}$




10. _____

10) $\frac{1}{12} + \frac{1}{12} + \frac{1}{12} + \frac{1}{12} + \frac{1}{12} + \frac{1}{12}$



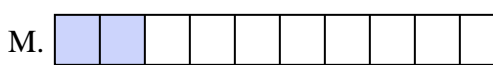
11. _____

11) $\frac{1}{10} + \frac{1}{10} + \frac{1}{10}$



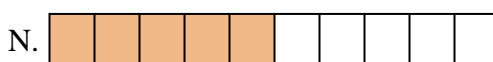
12. _____

12) $\frac{1}{10} + \frac{1}{10} + \frac{1}{10} + \frac{1}{10} + \frac{1}{10}$



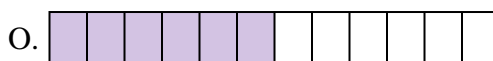
13. _____

13) $\frac{1}{3} + \frac{1}{3}$



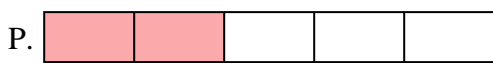
14. _____

14) $\frac{1}{8} + \frac{1}{8} + \frac{1}{8} + \frac{1}{8}$



15. _____


15) $\frac{1}{10} + \frac{1}{10}$





Match each equation to the answer and write the answer.

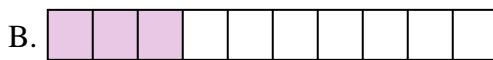
Ex) $\frac{1}{8} + \frac{1}{8} + \frac{1}{8} + \frac{1}{8} + \frac{1}{8}$



Answers

Ex. **J**

1) $\frac{1}{5} + \frac{1}{5} + \frac{1}{5}$




1. **L**

2) $\frac{1}{4} + \frac{1}{4}$




2. **D**

3) $\frac{1}{5} + \frac{1}{5} + \frac{1}{5} + \frac{1}{5}$




3. **H**

4) $\frac{1}{8} + \frac{1}{8}$



4. **K**

5) $\frac{1}{4} + \frac{1}{4} + \frac{1}{4}$




5. **E**

6) $\frac{1}{5} + \frac{1}{5}$




6. **P**

7) $\frac{1}{8} + \frac{1}{8} + \frac{1}{8} + \frac{1}{8} + \frac{1}{8} + \frac{1}{8}$




7. **I**

8) $\frac{1}{6} + \frac{1}{6} + \frac{1}{6} + \frac{1}{6} + \frac{1}{6}$



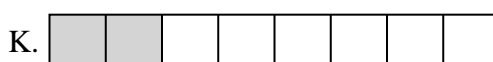
8. **G**

9) $\frac{1}{6} + \frac{1}{6} + \frac{1}{6} + \frac{1}{6}$




9. **A**

10) $\frac{1}{12} + \frac{1}{12} + \frac{1}{12} + \frac{1}{12} + \frac{1}{12} + \frac{1}{12}$



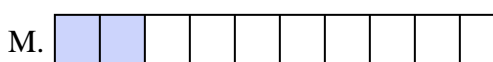
10. **O**

11) $\frac{1}{10} + \frac{1}{10} + \frac{1}{10}$



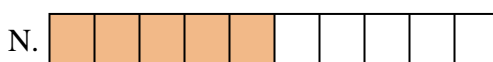
11. **B**

12) $\frac{1}{10} + \frac{1}{10} + \frac{1}{10} + \frac{1}{10} + \frac{1}{10}$



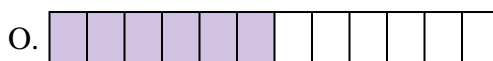
12. **N**

13) $\frac{1}{3} + \frac{1}{3}$



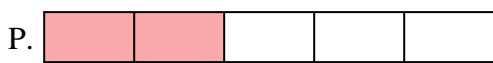
13. **F**

14) $\frac{1}{8} + \frac{1}{8} + \frac{1}{8} + \frac{1}{8}$



14. **C**

15) $\frac{1}{10} + \frac{1}{10}$



15. **M**