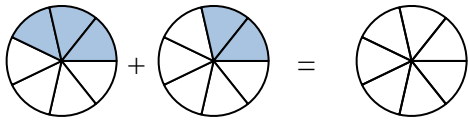




Shade in the fraction to solve the problem.

Answers

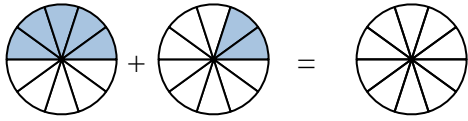
Ex)



Ex.  $\frac{3}{7}$     $\frac{2}{7}$     $\frac{5}{7}$

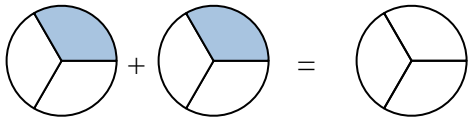
1. \_\_\_\_\_

1)



2. \_\_\_\_\_

2)



3. \_\_\_\_\_

4. \_\_\_\_\_

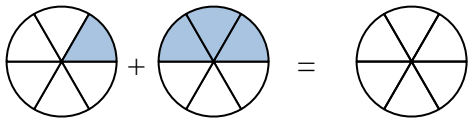
3)



5. \_\_\_\_\_

6. \_\_\_\_\_

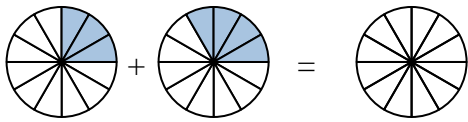
4)



7. \_\_\_\_\_

8. \_\_\_\_\_

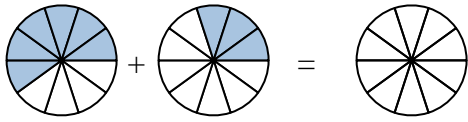
5)



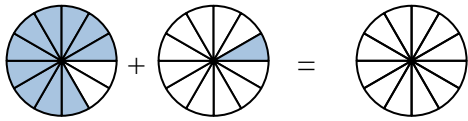
9. \_\_\_\_\_

10. \_\_\_\_\_

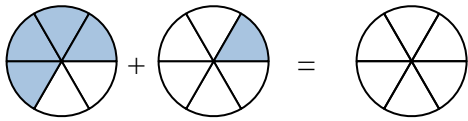
6)



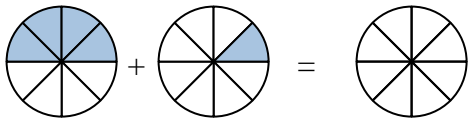
7)



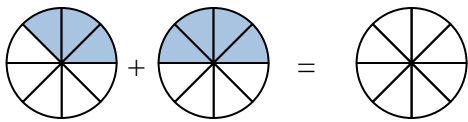
8)



9)



10)

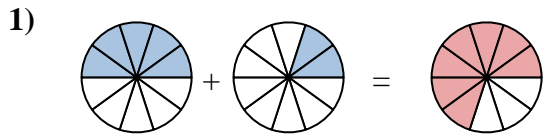




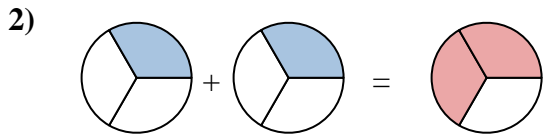
Shade in the fraction to solve the problem.



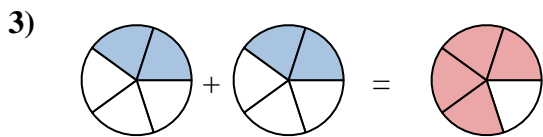
Ex.  $\frac{3}{7}$     $\frac{2}{7}$     $\frac{5}{7}$



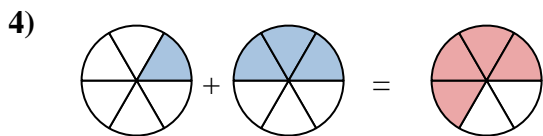
1.  $\frac{5}{10}$     $\frac{2}{10}$     $\frac{7}{10}$



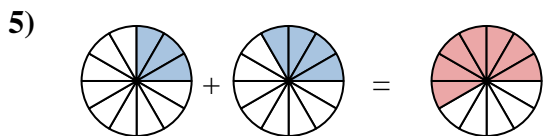
2.  $\frac{1}{3}$     $\frac{1}{3}$     $\frac{2}{3}$



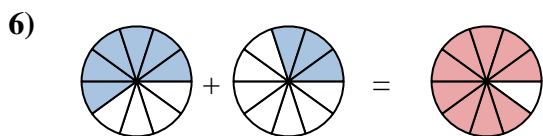
3.  $\frac{2}{5}$     $\frac{2}{5}$     $\frac{4}{5}$



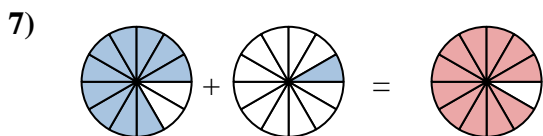
4.  $\frac{1}{6}$     $\frac{3}{6}$     $\frac{4}{6}$



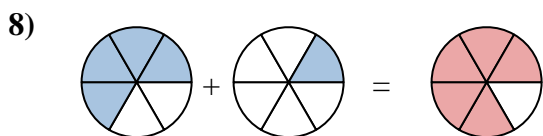
5.  $\frac{3}{12}$     $\frac{4}{12}$     $\frac{7}{12}$



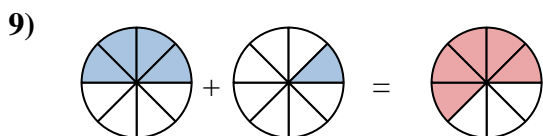
6.  $\frac{6}{10}$     $\frac{3}{10}$     $\frac{9}{10}$



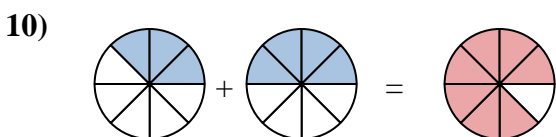
7.  $\frac{10}{12}$     $\frac{1}{12}$     $\frac{11}{12}$



8.  $\frac{4}{6}$     $\frac{1}{6}$     $\frac{5}{6}$



9.  $\frac{4}{8}$     $\frac{1}{8}$     $\frac{5}{8}$



10.  $\frac{3}{8}$     $\frac{4}{8}$     $\frac{7}{8}$

**Answers**