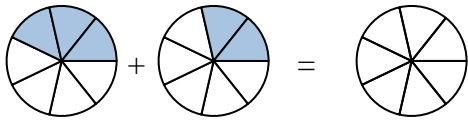




Shade in the fraction to solve the problem.

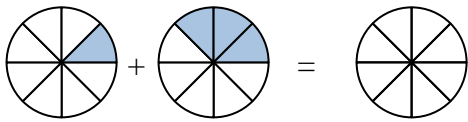
Answers

Ex)



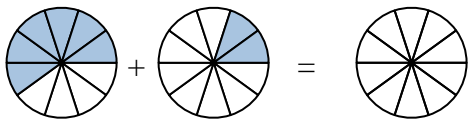
Ex. $\frac{3}{7}$ $\frac{2}{7}$ $\frac{5}{7}$

1)



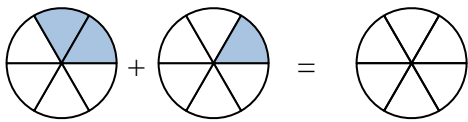
1. _____

2)



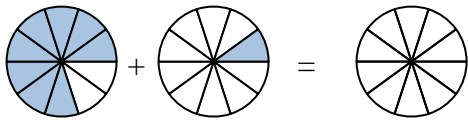
2. _____

3)



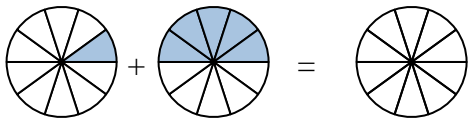
3. _____

4)



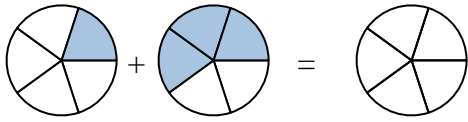
4. _____

5)



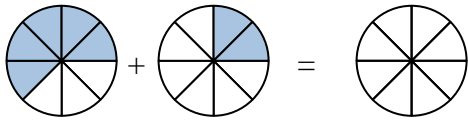
5. _____

6)



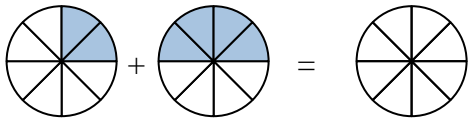
6. _____

7)



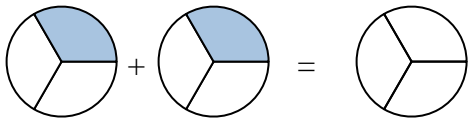
7. _____

8)



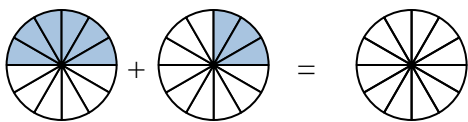
8. _____

9)



9. _____

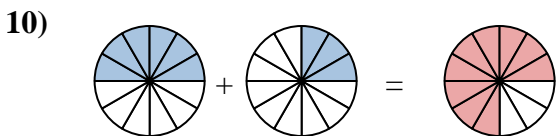
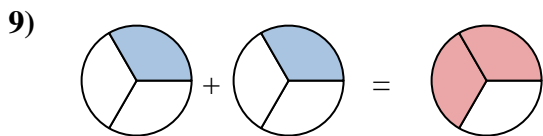
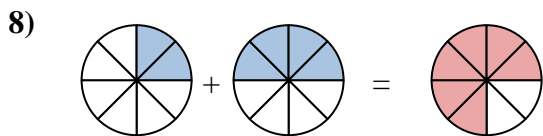
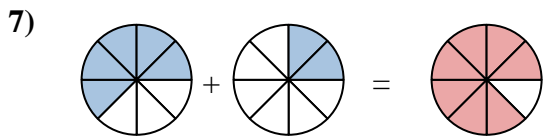
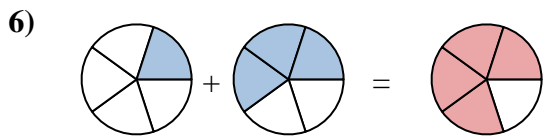
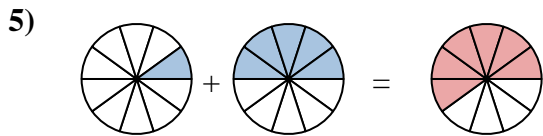
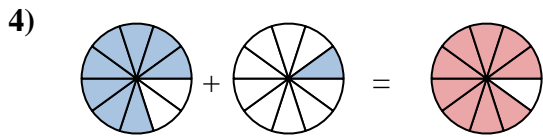
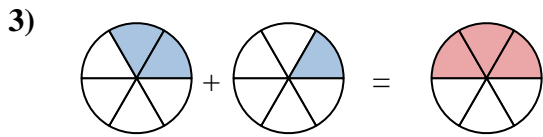
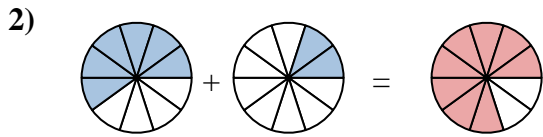
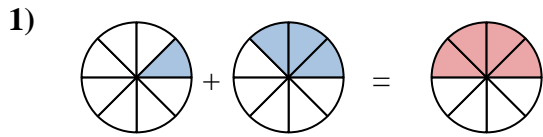
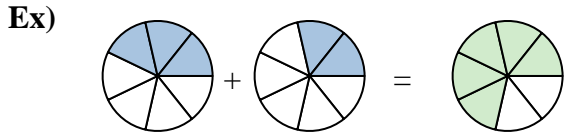
10)



10. _____



Shade in the fraction to solve the problem.



Answers

Ex. $\frac{3}{7}$ $\frac{2}{7}$ $\frac{5}{7}$

1. $\frac{1}{8}$ $\frac{3}{8}$ $\frac{4}{8}$

2. $\frac{6}{10}$ $\frac{2}{10}$ $\frac{8}{10}$

3. $\frac{2}{6}$ $\frac{1}{6}$ $\frac{3}{6}$

4. $\frac{8}{10}$ $\frac{1}{10}$ $\frac{9}{10}$

5. $\frac{1}{10}$ $\frac{5}{10}$ $\frac{6}{10}$

6. $\frac{1}{5}$ $\frac{3}{5}$ $\frac{4}{5}$

7. $\frac{5}{8}$ $\frac{2}{8}$ $\frac{7}{8}$

8. $\frac{2}{8}$ $\frac{4}{8}$ $\frac{6}{8}$

9. $\frac{1}{3}$ $\frac{1}{3}$ $\frac{2}{3}$

10. $\frac{6}{12}$ $\frac{3}{12}$ $\frac{9}{12}$