



Determine which letter best represents the sum.

1) $\frac{7}{12} + \frac{11}{12}$

3) $\frac{1}{2} + \frac{1}{2}$

5) $\frac{3}{12} + \frac{11}{12}$

7) $\frac{3}{6} + \frac{3}{6}$

9) $\frac{5}{8} + \frac{2}{8}$

11) $\frac{5}{12} + \frac{7}{12}$

13) $\frac{3}{8} + \frac{5}{8}$

2) $\frac{7}{8} + \frac{7}{8}$

4) $\frac{3}{5} + \frac{1}{5}$

6) $\frac{3}{4} + \frac{3}{4}$

8) $\frac{9}{12} + \frac{8}{12}$

10) $\frac{8}{10} + \frac{5}{10}$

12) $\frac{3}{6} + \frac{4}{6}$

14) $\frac{7}{8} + \frac{5}{8}$

Answers

1. _____

2. _____

3. _____

4. _____

5. _____

6. _____

7. _____

8. _____

9. _____

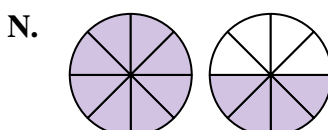
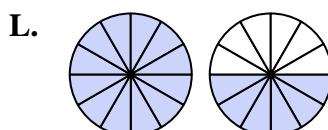
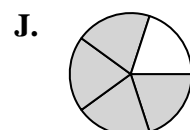
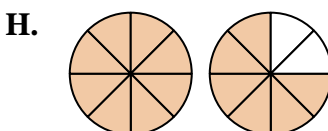
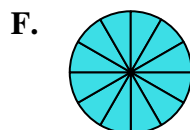
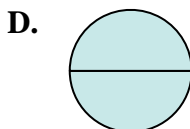
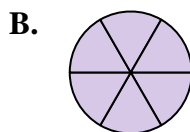
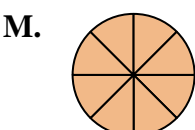
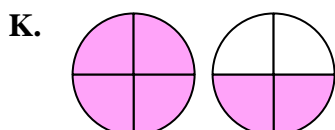
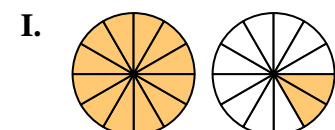
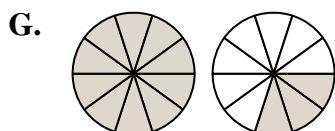
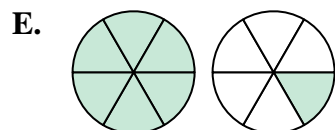
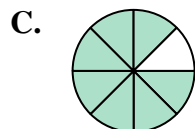
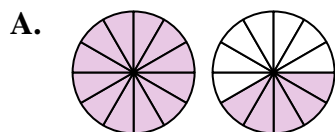
10. _____

11. _____

12. _____

13. _____

14. _____





Determine which letter best represents the sum.

1) $\frac{7}{12} + \frac{11}{12}$

2) $\frac{7}{8} + \frac{7}{8}$

3) $\frac{1}{2} + \frac{1}{2}$

4) $\frac{3}{5} + \frac{1}{5}$

5) $\frac{3}{12} + \frac{11}{12}$

6) $\frac{3}{4} + \frac{3}{4}$

7) $\frac{3}{6} + \frac{3}{6}$

8) $\frac{9}{12} + \frac{8}{12}$

9) $\frac{5}{8} + \frac{2}{8}$

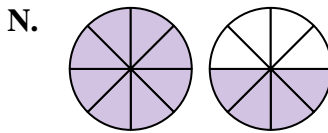
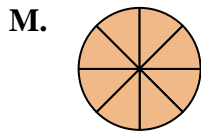
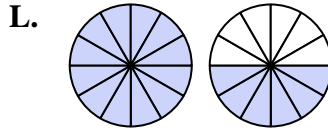
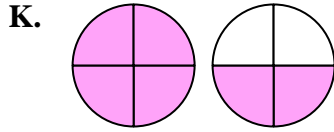
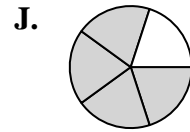
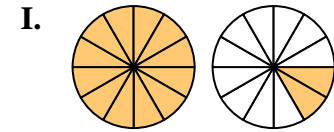
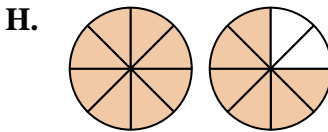
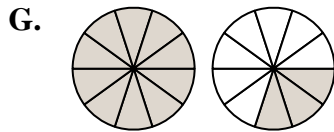
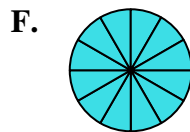
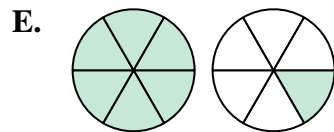
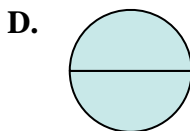
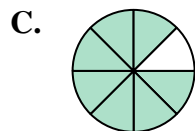
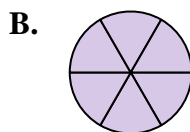
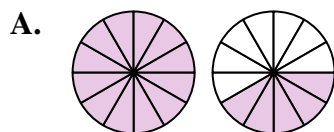
10) $\frac{8}{10} + \frac{5}{10}$

11) $\frac{5}{12} + \frac{7}{12}$

12) $\frac{3}{6} + \frac{4}{6}$

13) $\frac{3}{8} + \frac{5}{8}$

14) $\frac{7}{8} + \frac{5}{8}$



Answers

1. **L** $1\frac{6}{12}$

2. **H** $1\frac{6}{8}$

3. **D** $\frac{2}{2}$

4. **J** $\frac{4}{5}$

5. **I** $1\frac{2}{12}$

6. **K** $1\frac{2}{4}$

7. **B** $\frac{6}{6}$

8. **A** $1\frac{5}{12}$

9. **C** $\frac{7}{8}$

10. **G** $1\frac{3}{10}$

11. **F** $1\frac{12}{12}$

12. **E** $1\frac{1}{6}$

13. **M** $\frac{8}{8}$

14. **N** $1\frac{4}{8}$