



Determine which letter best represents the sum.

1)  $\frac{4}{6} + \frac{5}{6}$

3)  $\frac{3}{6} + \frac{2}{6}$

5)  $\frac{5}{10} + \frac{2}{10}$

7)  $\frac{4}{5} + \frac{3}{5}$

9)  $\frac{7}{12} + \frac{6}{12}$

11)  $\frac{2}{4} + \frac{3}{4}$

13)  $\frac{7}{8} + \frac{4}{8}$

2)  $\frac{8}{12} + \frac{10}{12}$

4)  $\frac{3}{6} + \frac{5}{6}$

6)  $\frac{2}{10} + \frac{7}{10}$

8)  $\frac{1}{3} + \frac{1}{3}$

10)  $\frac{1}{3} + \frac{2}{3}$

12)  $\frac{2}{3} + \frac{2}{3}$

14)  $\frac{1}{2} + \frac{1}{2}$

Answers

1. \_\_\_\_\_

2. \_\_\_\_\_

3. \_\_\_\_\_

4. \_\_\_\_\_

5. \_\_\_\_\_

6. \_\_\_\_\_

7. \_\_\_\_\_

8. \_\_\_\_\_

9. \_\_\_\_\_

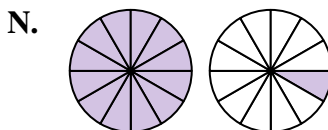
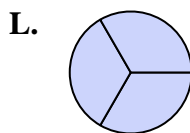
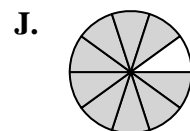
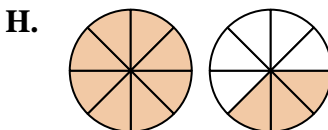
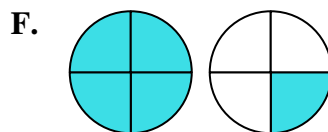
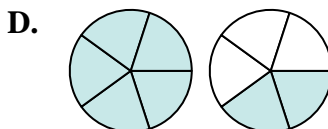
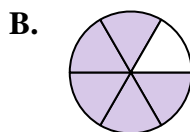
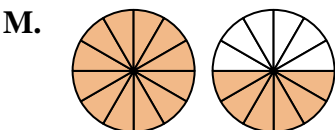
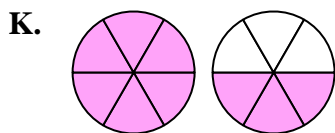
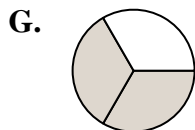
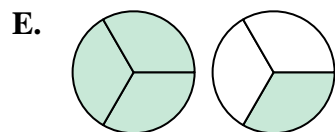
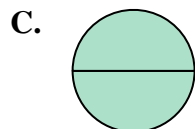
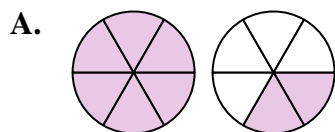
10. \_\_\_\_\_

11. \_\_\_\_\_

12. \_\_\_\_\_

13. \_\_\_\_\_

14. \_\_\_\_\_





Determine which letter best represents the sum.

1)  $\frac{4}{6} + \frac{5}{6}$

2)  $\frac{8}{12} + \frac{10}{12}$

3)  $\frac{3}{6} + \frac{2}{6}$

4)  $\frac{3}{6} + \frac{5}{6}$

5)  $\frac{5}{10} + \frac{2}{10}$

6)  $\frac{2}{10} + \frac{7}{10}$

7)  $\frac{4}{5} + \frac{3}{5}$

8)  $\frac{1}{3} + \frac{1}{3}$

9)  $\frac{7}{12} + \frac{6}{12}$

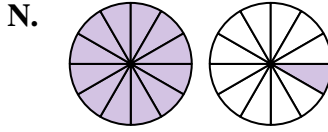
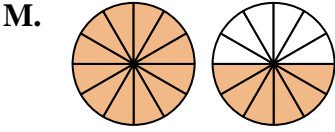
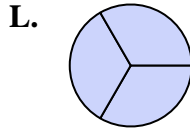
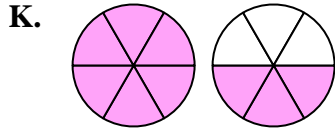
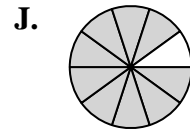
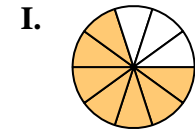
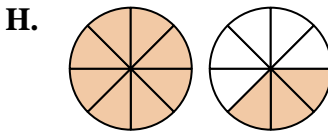
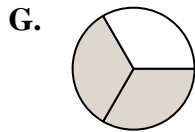
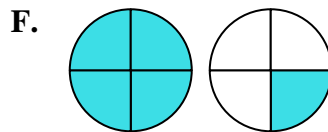
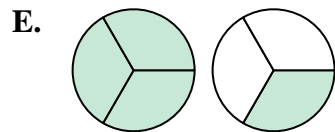
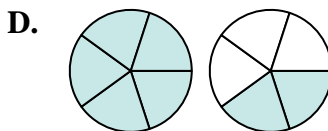
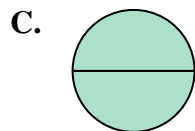
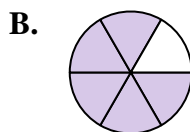
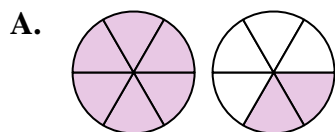
10)  $\frac{1}{3} + \frac{2}{3}$

11)  $\frac{2}{4} + \frac{3}{4}$

12)  $\frac{2}{3} + \frac{2}{3}$

13)  $\frac{7}{8} + \frac{4}{8}$

14)  $\frac{1}{2} + \frac{1}{2}$



**Answers**

1. **K**  $1\frac{3}{6}$

2. **M**  $1\frac{6}{12}$

3. **B**  $\frac{5}{6}$

4. **A**  $1\frac{2}{6}$

5. **I**  $\frac{7}{10}$

6. **J**  $\frac{9}{10}$

7. **D**  $1\frac{2}{5}$

8. **G**  $\frac{2}{3}$

9. **N**  $1\frac{1}{12}$

10. **L**  $\frac{3}{3}$

11. **F**  $1\frac{1}{4}$

12. **E**  $1\frac{1}{3}$

13. **H**  $1\frac{3}{8}$

14. **C**  $\frac{2}{2}$