



Determine which letter best represents the sum.

1)  $\frac{2}{3} + \frac{1}{3}$

3)  $\frac{3}{6} + \frac{1}{6}$

5)  $\frac{5}{6} + \frac{4}{6}$

7)  $\frac{5}{12} + \frac{1}{12}$

9)  $\frac{4}{8} + \frac{1}{8}$

11)  $\frac{1}{5} + \frac{1}{5}$

13)  $\frac{1}{4} + \frac{3}{4}$

2)  $\frac{1}{2} + \frac{1}{2}$

4)  $\frac{3}{5} + \frac{2}{5}$

6)  $\frac{4}{12} + \frac{8}{12}$

8)  $\frac{4}{6} + \frac{2}{6}$

10)  $\frac{2}{3} + \frac{2}{3}$

12)  $\frac{2}{10} + \frac{7}{10}$

14)  $\frac{3}{4} + \frac{2}{4}$

Answers

1. \_\_\_\_\_

2. \_\_\_\_\_

3. \_\_\_\_\_

4. \_\_\_\_\_

5. \_\_\_\_\_

6. \_\_\_\_\_

7. \_\_\_\_\_

8. \_\_\_\_\_

9. \_\_\_\_\_

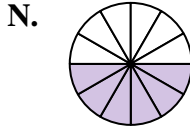
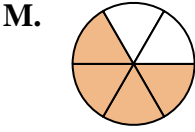
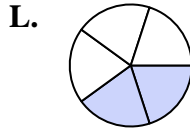
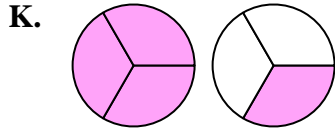
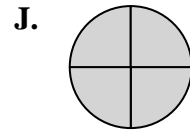
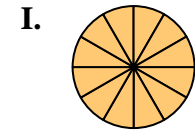
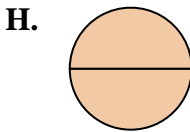
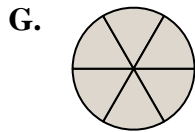
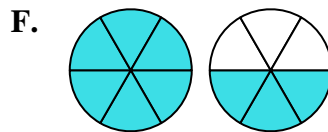
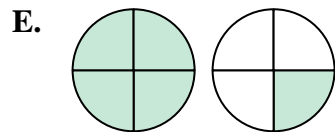
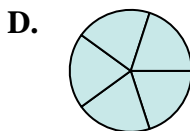
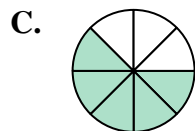
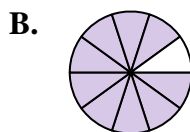
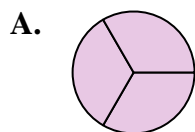
10. \_\_\_\_\_

11. \_\_\_\_\_

12. \_\_\_\_\_

13. \_\_\_\_\_

14. \_\_\_\_\_





Determine which letter best represents the sum.

1)  $\frac{2}{3} + \frac{1}{3}$

3)  $\frac{3}{6} + \frac{1}{6}$

5)  $\frac{5}{6} + \frac{4}{6}$

7)  $\frac{5}{12} + \frac{1}{12}$

9)  $\frac{4}{8} + \frac{1}{8}$

11)  $\frac{1}{5} + \frac{1}{5}$

13)  $\frac{1}{4} + \frac{3}{4}$

2)  $\frac{1}{2} + \frac{1}{2}$

4)  $\frac{3}{5} + \frac{2}{5}$

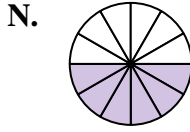
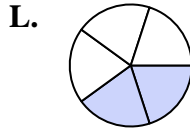
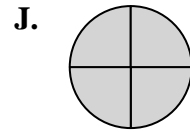
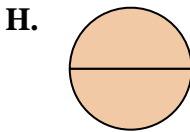
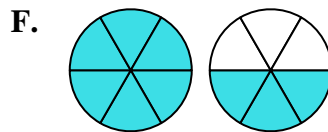
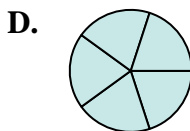
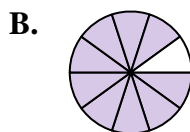
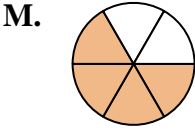
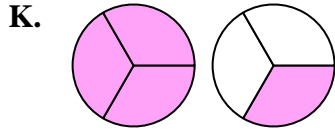
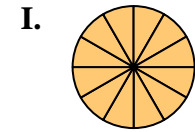
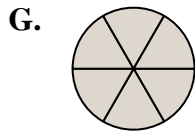
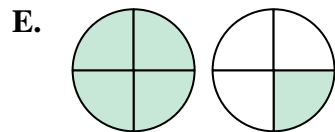
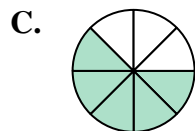
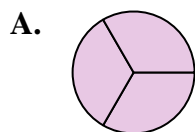
6)  $\frac{4}{12} + \frac{8}{12}$

8)  $\frac{4}{6} + \frac{2}{6}$

10)  $\frac{2}{3} + \frac{2}{3}$

12)  $\frac{2}{10} + \frac{7}{10}$

14)  $\frac{3}{4} + \frac{2}{4}$



**Answers**

1. **A**  $\frac{3}{3}$

2. **H**  $\frac{2}{2}$

3. **M**  $\frac{4}{6}$

4. **D**  $\frac{5}{5}$

5. **F**  $1\frac{3}{6}$

6. **I**  $\frac{12}{12}$

7. **N**  $\frac{6}{12}$

8. **G**  $\frac{6}{6}$

9. **C**  $\frac{5}{8}$

10. **K**  $1\frac{1}{3}$

11. **L**  $\frac{2}{5}$

12. **B**  $\frac{9}{10}$

13. **J**  $\frac{4}{4}$

14. **E**  $1\frac{1}{4}$