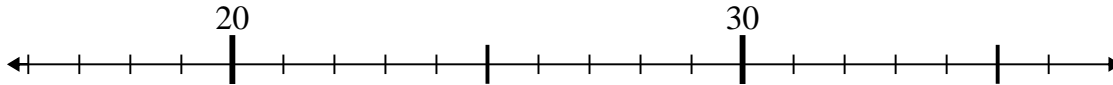




Use the numberlines to solve each problem.

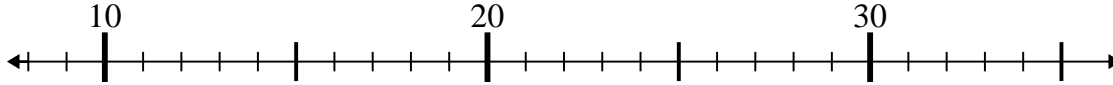
Answers

1) $21 - 2 =$



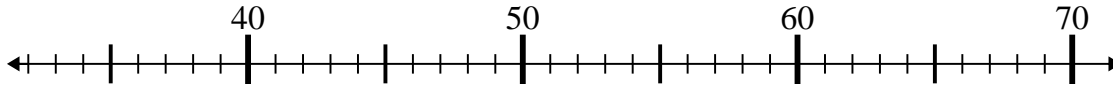
1. _____

2) $28 - 14 =$



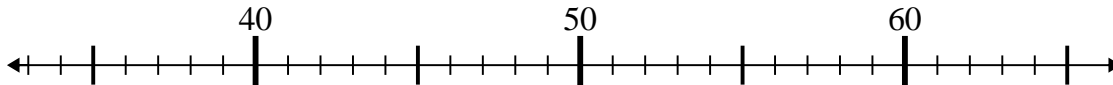
2. _____

3) $67 - 9 =$



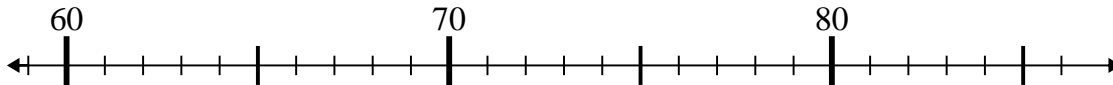
3. _____

4) $54 - 21 =$



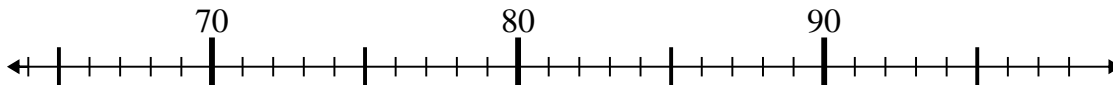
4. _____

5) $62 + 15 =$



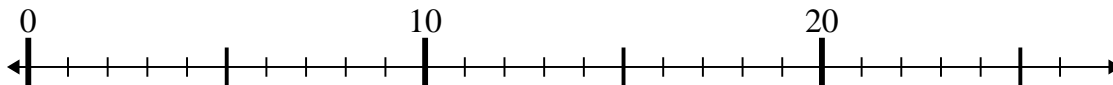
5. _____

6) $77 + 12 =$



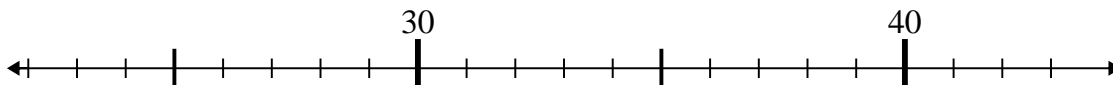
6. _____

7) $14 - 3 =$



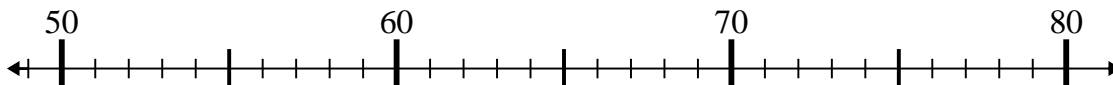
7. _____

8) $36 - 12 =$



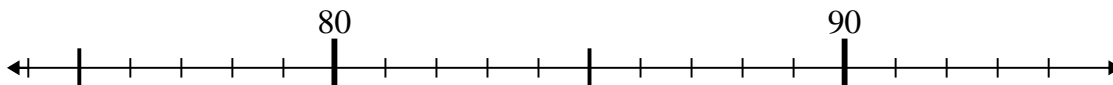
8. _____

9) $70 - 16 =$



9. _____

10) $88 - 9 =$

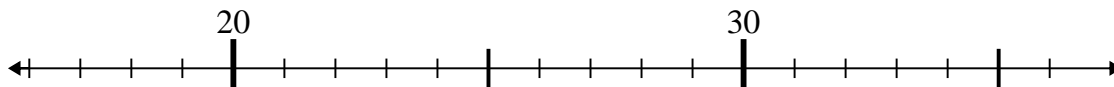


10. _____

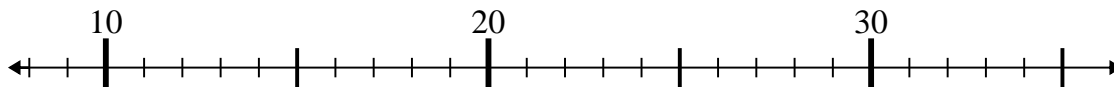


Use the numberlines to solve each problem.

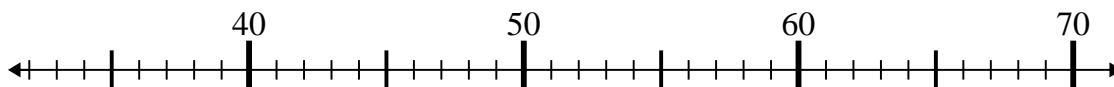
1) $21 - 2 =$



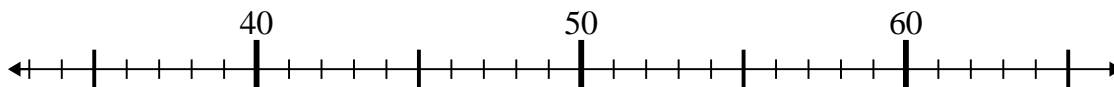
2) $28 - 14 =$



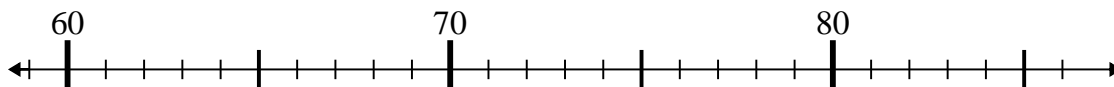
3) $67 - 9 =$



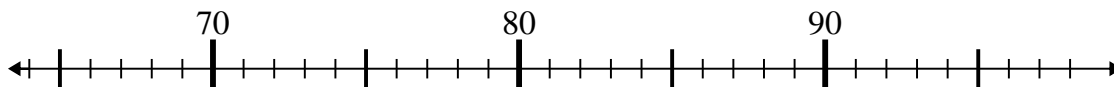
4) $54 - 21 =$



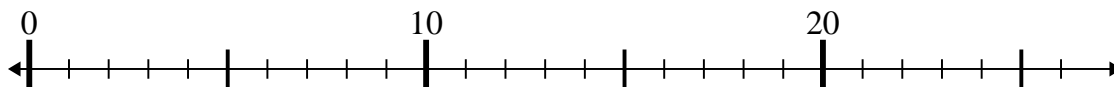
5) $62 + 15 =$



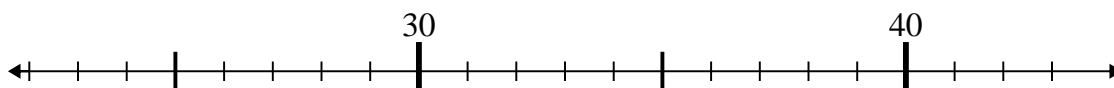
6) $77 + 12 =$



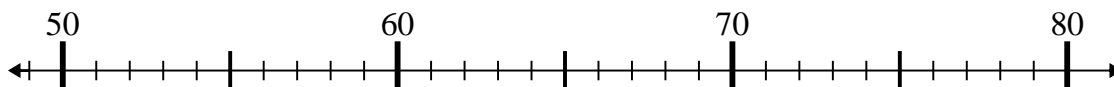
7) $14 - 3 =$



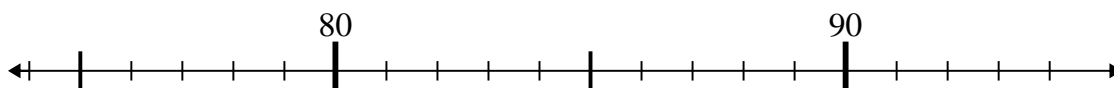
8) $36 - 12 =$



9) $70 - 16 =$



10) $88 - 9 =$



Answers

1. 19

2. 14

3. 58

4. 33

5. 77

6. 89

7. 11

8. 24

9. 54

10. 79