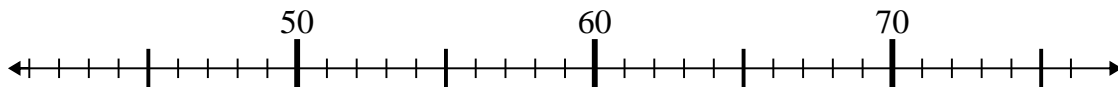


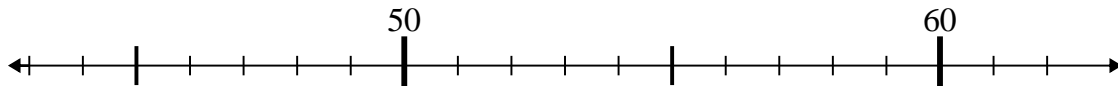


Use the numberlines to solve each problem.

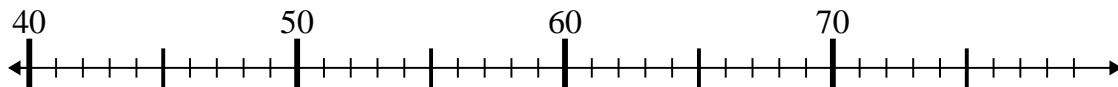
1)  $52 - 10 =$



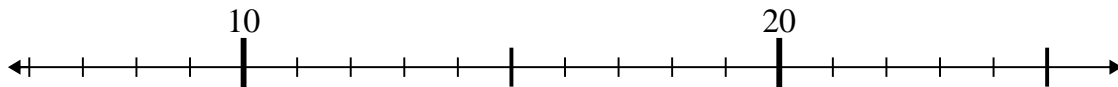
2)  $60 - 1 =$



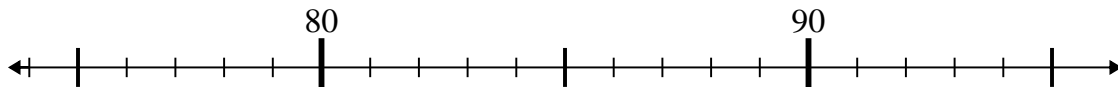
3)  $58 - 6 =$



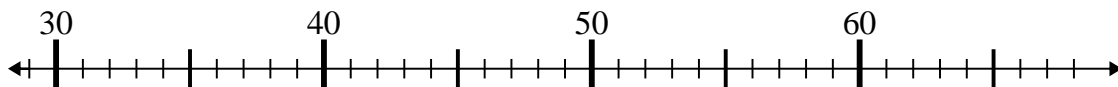
4)  $13 - 1 =$



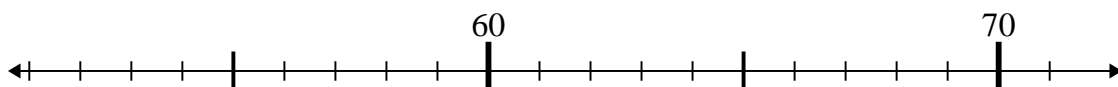
5)  $86 + 9 =$



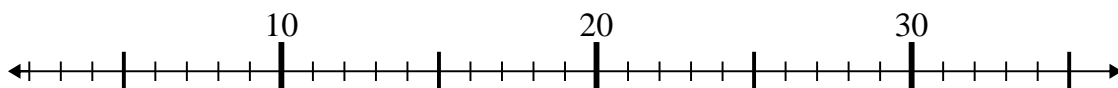
6)  $31 + 26 =$



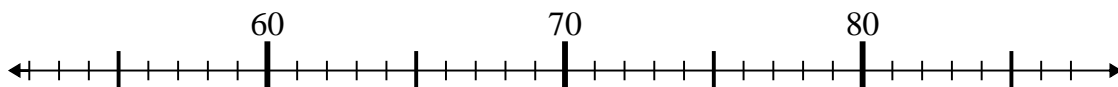
7)  $55 + 2 =$



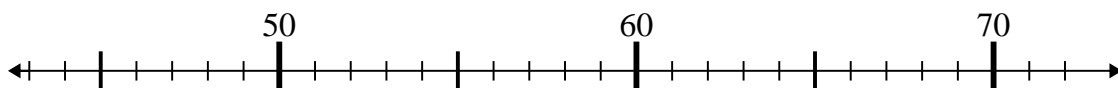
8)  $35 - 18 =$



9)  $76 - 24 =$



10)  $46 + 15 =$



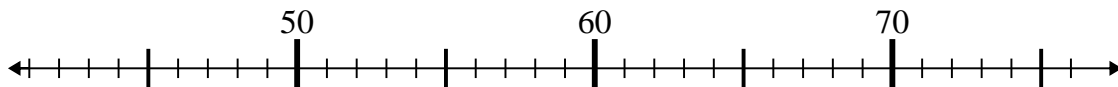
Answers

1. \_\_\_\_\_
2. \_\_\_\_\_
3. \_\_\_\_\_
4. \_\_\_\_\_
5. \_\_\_\_\_
6. \_\_\_\_\_
7. \_\_\_\_\_
8. \_\_\_\_\_
9. \_\_\_\_\_
10. \_\_\_\_\_

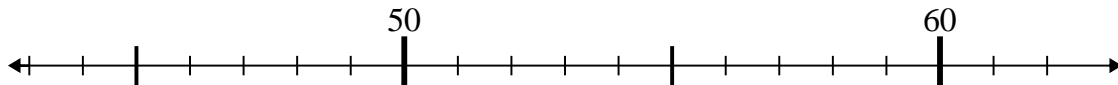


Use the numberlines to solve each problem.

1)  $52 - 10 =$



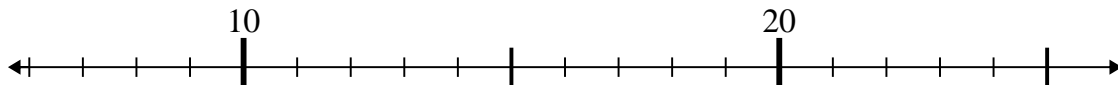
2)  $60 - 1 =$



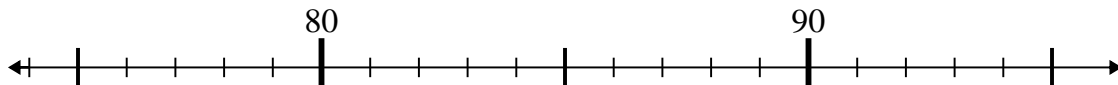
3)  $58 - 6 =$



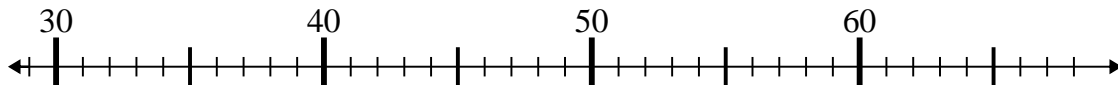
4)  $13 - 1 =$



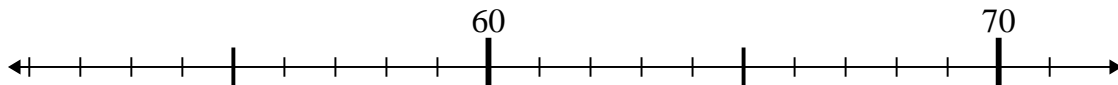
5)  $86 + 9 =$



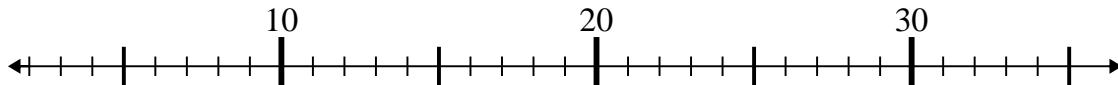
6)  $31 + 26 =$



7)  $55 + 2 =$



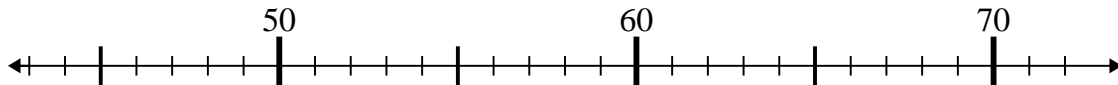
8)  $35 - 18 =$



9)  $76 - 24 =$



10)  $46 + 15 =$



Answers

1. 42

2. 59

3. 52

4. 12

5. 95

6. 57

7. 57

8. 17

9. 52

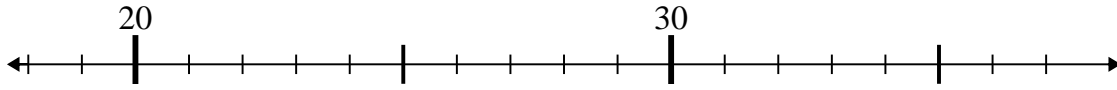
10. 61



Use the numberlines to solve each problem.

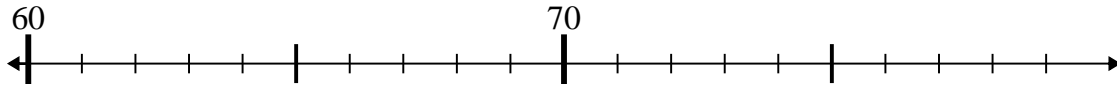
Answers

1)  $23 - 4 =$



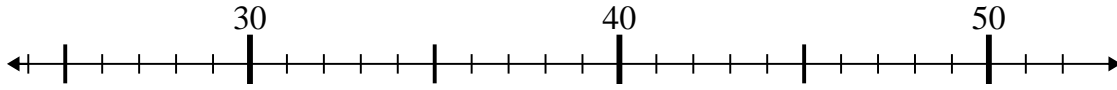
1. \_\_\_\_\_

2)  $73 - 6 =$



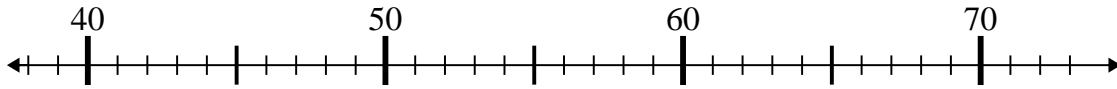
2. \_\_\_\_\_

3)  $44 + 2 =$



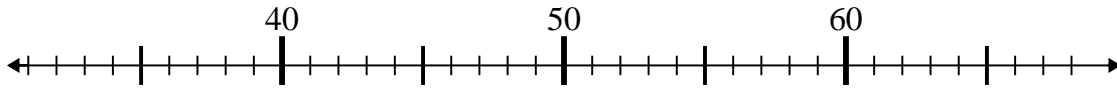
3. \_\_\_\_\_

4)  $42 + 1 =$



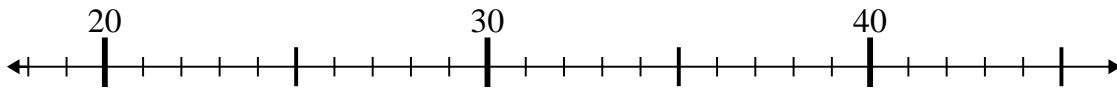
4. \_\_\_\_\_

5)  $40 + 13 =$



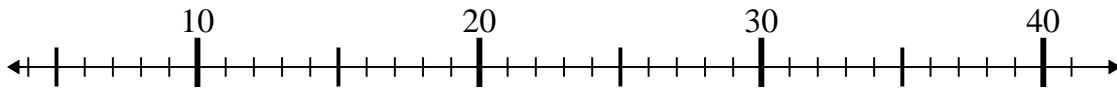
5. \_\_\_\_\_

6)  $26 + 0 =$



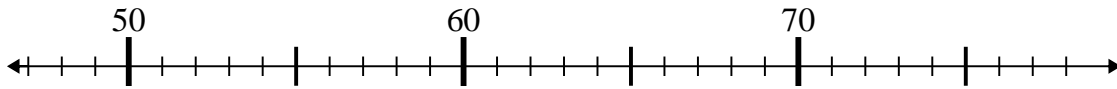
6. \_\_\_\_\_

7)  $36 - 27 =$



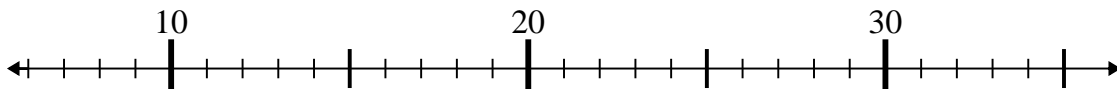
7. \_\_\_\_\_

8)  $54 - 5 =$



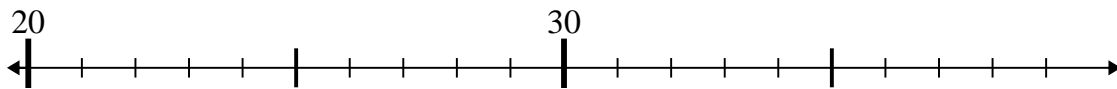
8. \_\_\_\_\_

9)  $10 + 1 =$



9. \_\_\_\_\_

10)  $24 + 1 =$

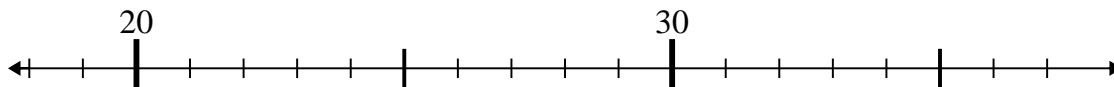


10. \_\_\_\_\_

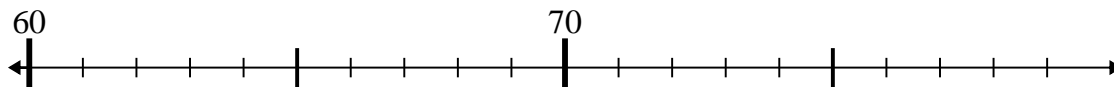


Use the numberlines to solve each problem.

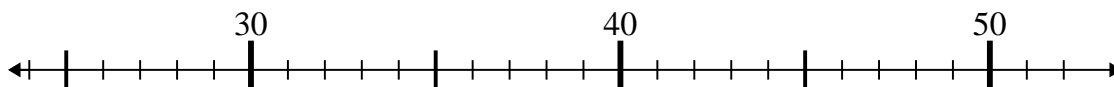
1)  $23 - 4 =$



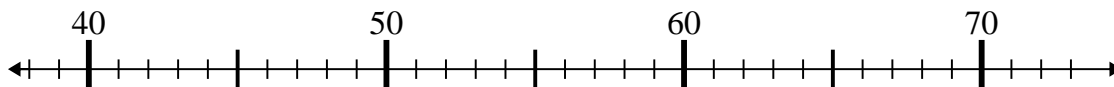
2)  $73 - 6 =$



3)  $44 + 2 =$



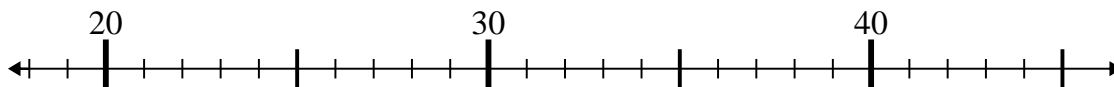
4)  $42 + 1 =$



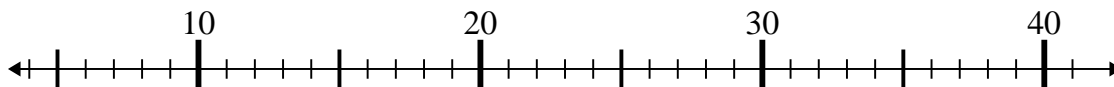
5)  $40 + 13 =$



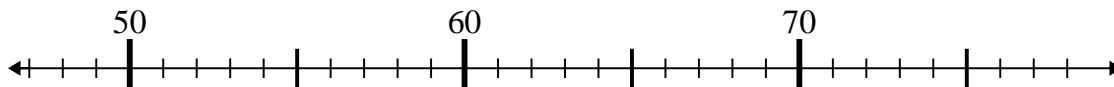
6)  $26 + 0 =$



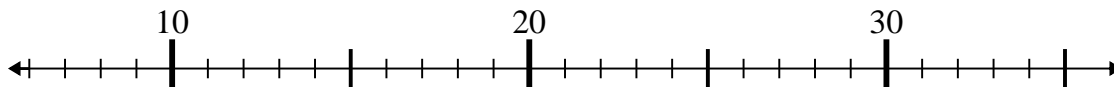
7)  $36 - 27 =$



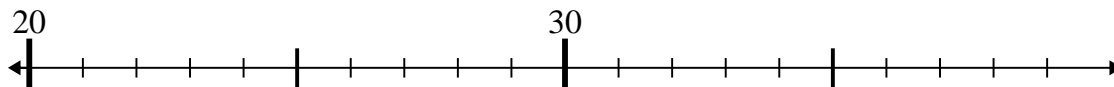
8)  $54 - 5 =$



9)  $10 + 1 =$



10)  $24 + 1 =$



Answers

1. 19

2. 67

3. 46

4. 43

5. 53

6. 26

7. 9

8. 49

9. 11

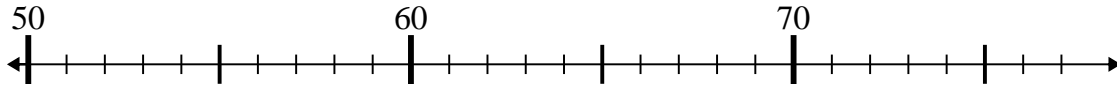
10. 25



Use the numberlines to solve each problem.

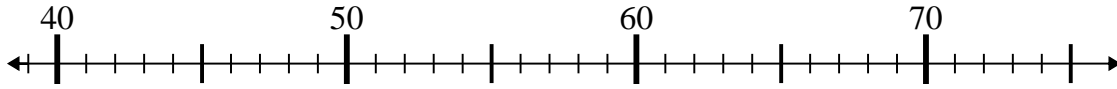
Answers

1)  $70 - 16 =$



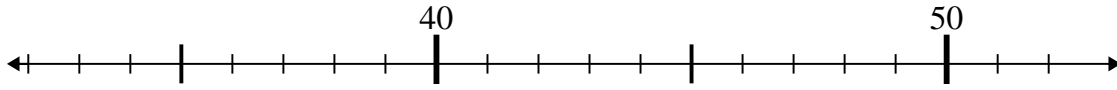
1. \_\_\_\_\_

2)  $39 + 6 =$



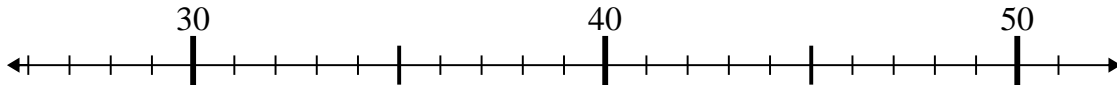
2. \_\_\_\_\_

3)  $46 + 3 =$



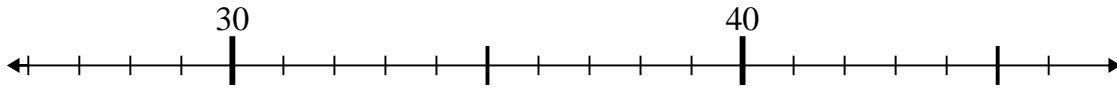
3. \_\_\_\_\_

4)  $31 + 8 =$



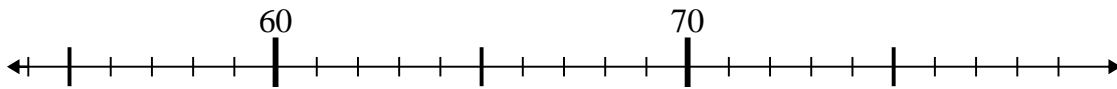
4. \_\_\_\_\_

5)  $36 - 1 =$



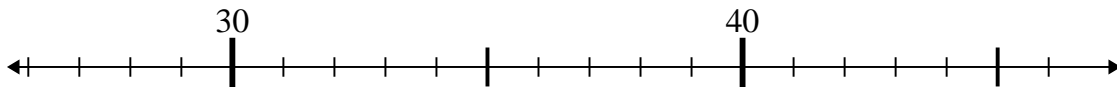
5. \_\_\_\_\_

6)  $70 + 8 =$



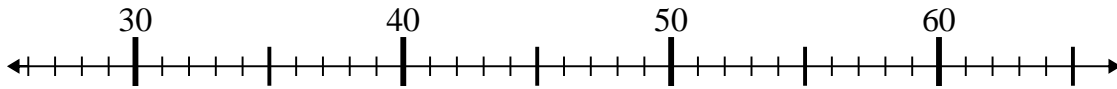
6. \_\_\_\_\_

7)  $46 - 1 =$



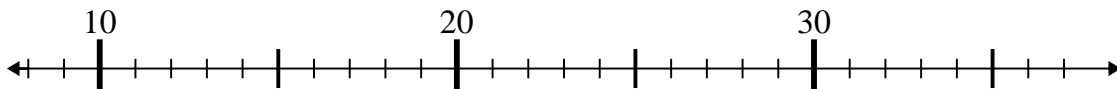
7. \_\_\_\_\_

8)  $27 + 8 =$



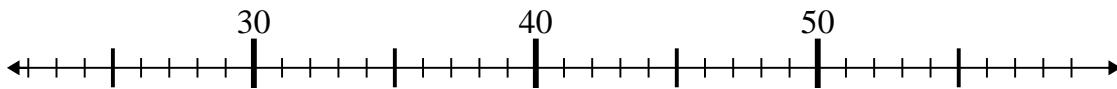
8. \_\_\_\_\_

9)  $18 + 1 =$



9. \_\_\_\_\_

10)  $25 + 3 =$

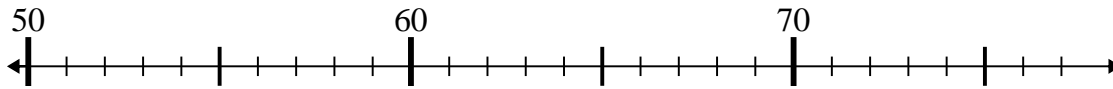


10. \_\_\_\_\_

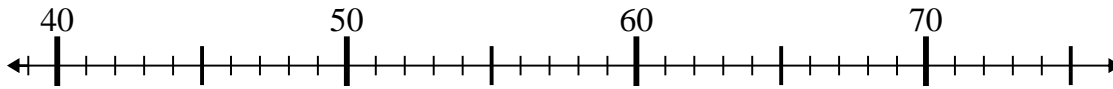


Use the numberlines to solve each problem.

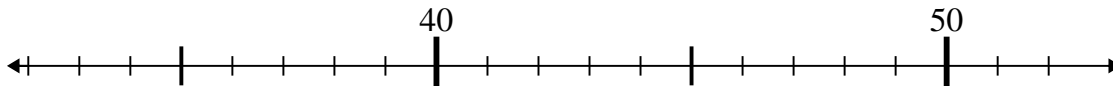
1)  $70 - 16 =$



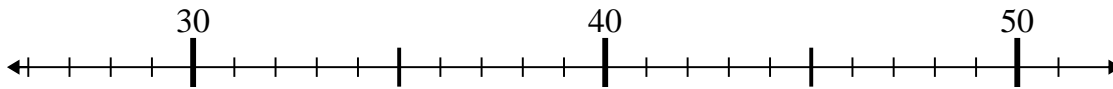
2)  $39 + 6 =$



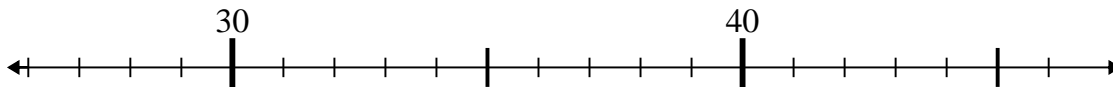
3)  $46 + 3 =$



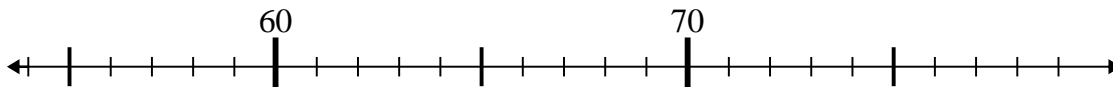
4)  $31 + 8 =$



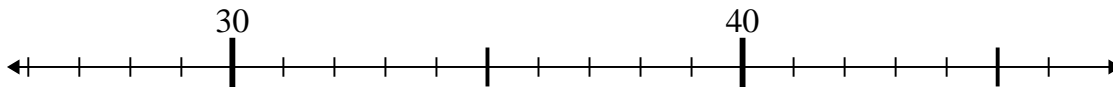
5)  $36 - 1 =$



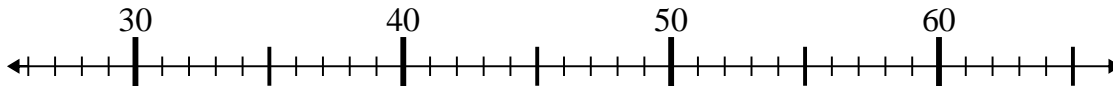
6)  $70 + 8 =$



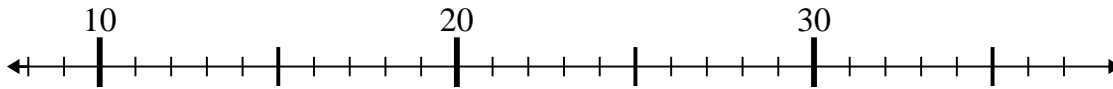
7)  $46 - 1 =$



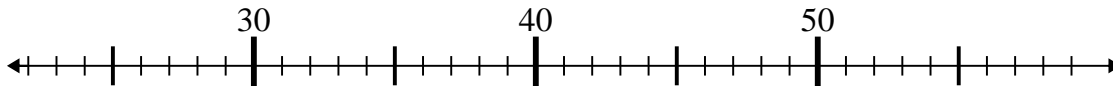
8)  $27 + 8 =$



9)  $18 + 1 =$



10)  $25 + 3 =$



Answers

1. 54

2. 45

3. 49

4. 39

5. 35

6. 78

7. 45

8. 35

9. 19

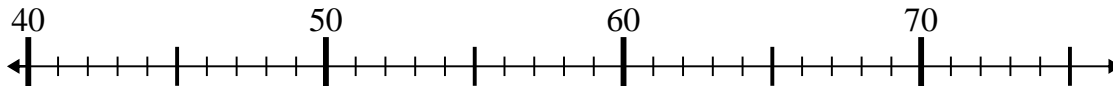
10. 28



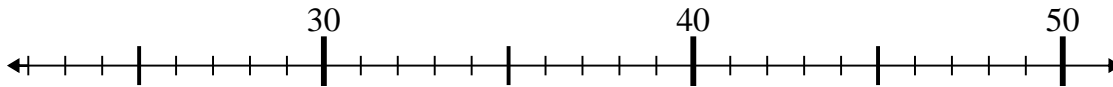
Use the numberlines to solve each problem.

**Answers**

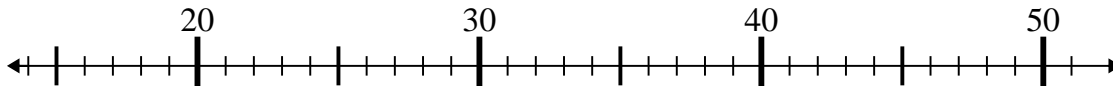
1)  $46 - 5 =$



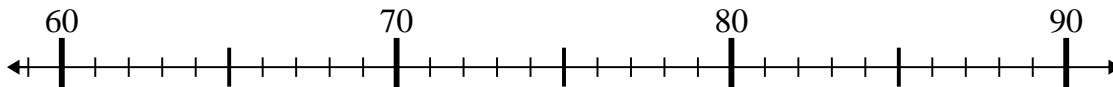
2)  $22 + 19 =$



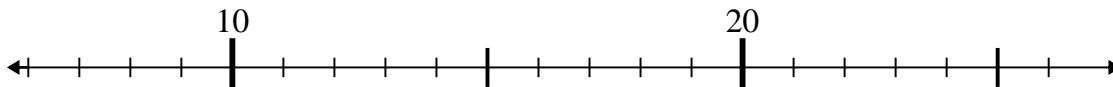
3)  $21 + 25 =$



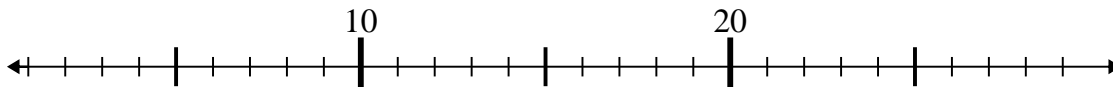
4)  $73 + 15 =$



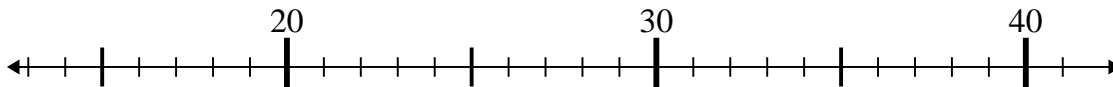
5)  $11 + 2 =$



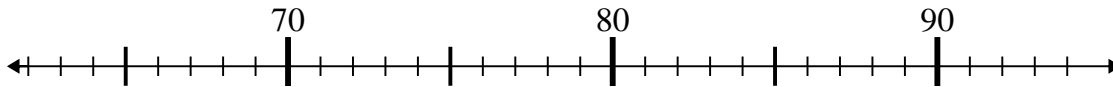
6)  $5 + 1 =$



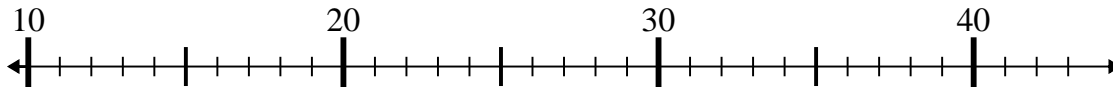
7)  $23 + 4 =$



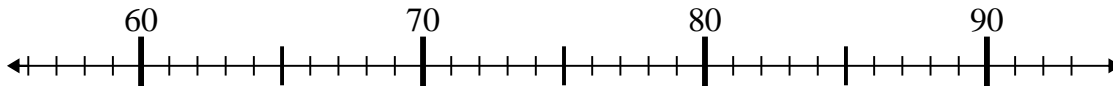
8)  $82 - 14 =$



9)  $22 - 10 =$



10)  $65 + 1 =$

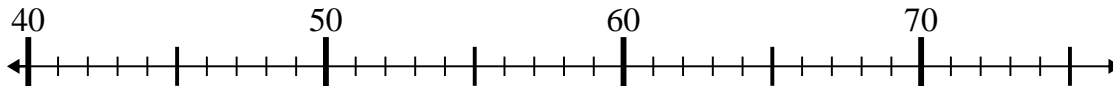


1. \_\_\_\_\_
2. \_\_\_\_\_
3. \_\_\_\_\_
4. \_\_\_\_\_
5. \_\_\_\_\_
6. \_\_\_\_\_
7. \_\_\_\_\_
8. \_\_\_\_\_
9. \_\_\_\_\_
10. \_\_\_\_\_

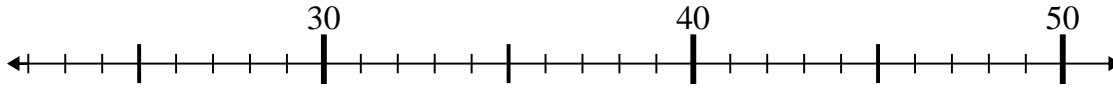


Use the numberlines to solve each problem.

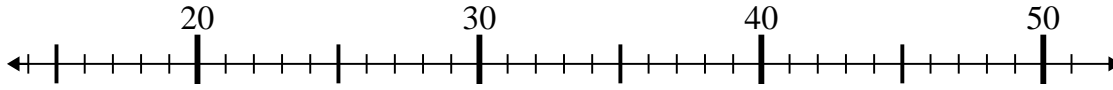
1)  $46 - 5 =$



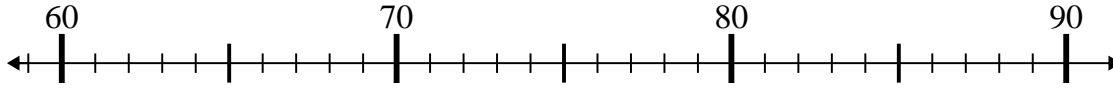
2)  $22 + 19 =$



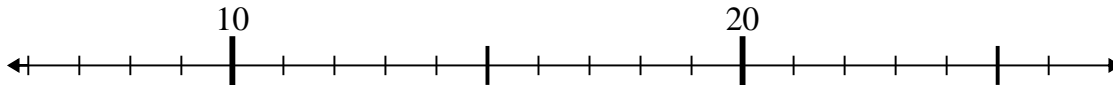
3)  $21 + 25 =$



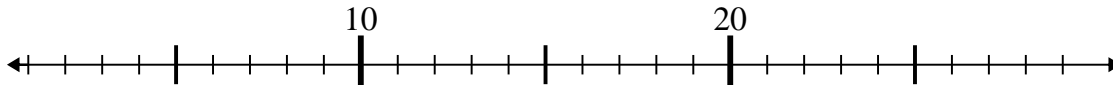
4)  $73 + 15 =$



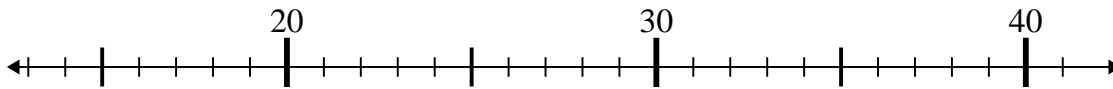
5)  $11 + 2 =$



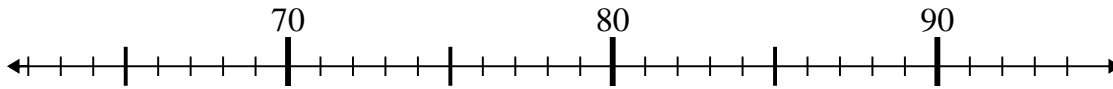
6)  $5 + 1 =$



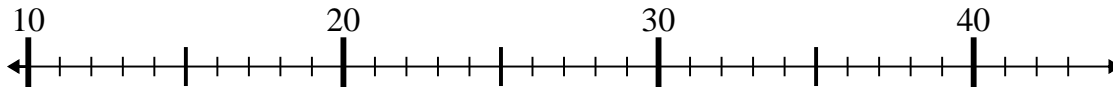
7)  $23 + 4 =$



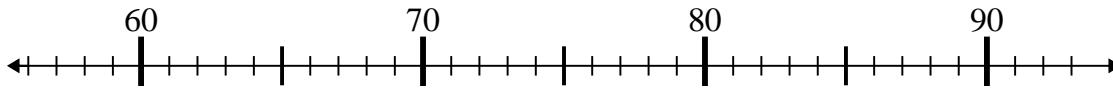
8)  $82 - 14 =$



9)  $22 - 10 =$



10)  $65 + 1 =$



Answers

1. 41

2. 41

3. 46

4. 88

5. 13

6. 6

7. 27

8. 68

9. 12

10. 66

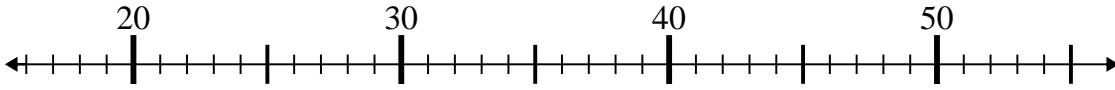




Use the numberlines to solve each problem.

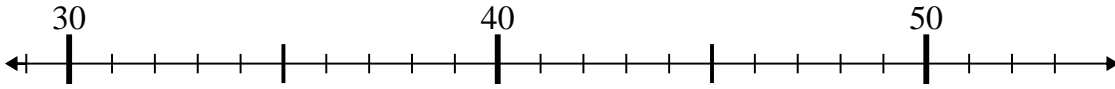
Answers

1)  $26 - 4 =$



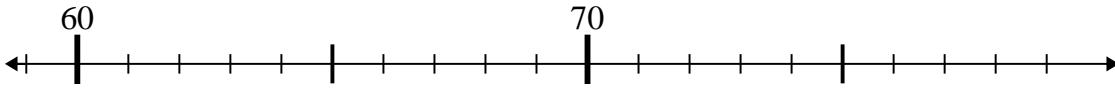
1. \_\_\_\_\_

2)  $45 - 2 =$



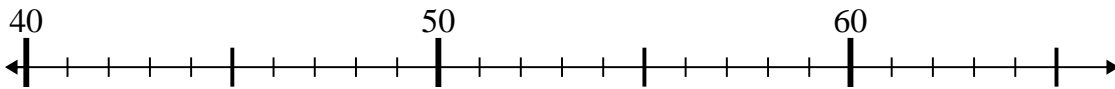
2. \_\_\_\_\_

3)  $62 + 14 =$



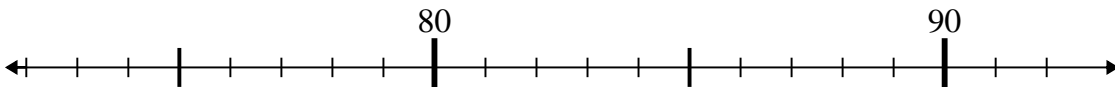
3. \_\_\_\_\_

4)  $51 - 7 =$



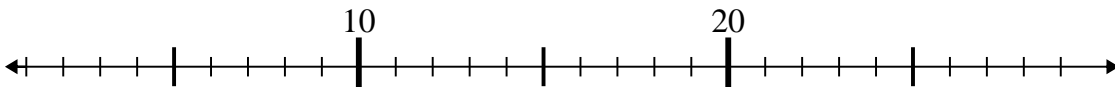
4. \_\_\_\_\_

5)  $76 + 1 =$



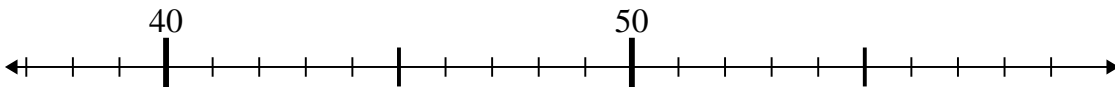
5. \_\_\_\_\_

6)  $27 - 21 =$



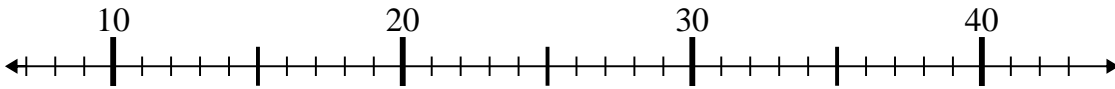
6. \_\_\_\_\_

7)  $55 - 15 =$



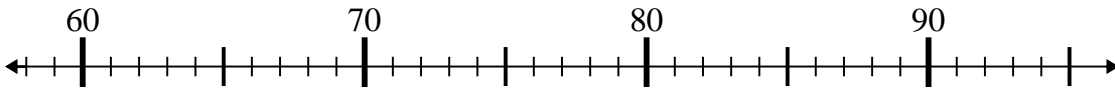
7. \_\_\_\_\_

8)  $31 - 17 =$



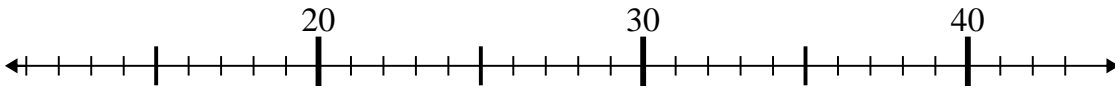
8. \_\_\_\_\_

9)  $66 + 9 =$



9. \_\_\_\_\_

10)  $27 + 15 =$

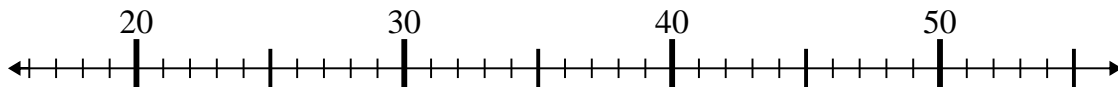


10. \_\_\_\_\_

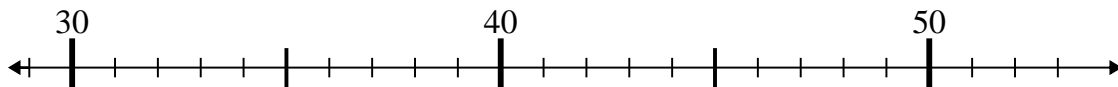


Use the numberlines to solve each problem.

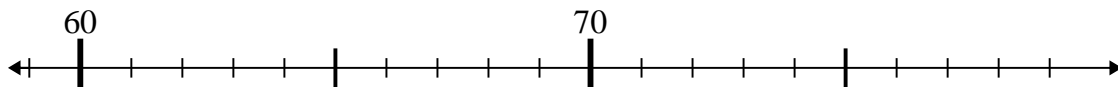
1)  $26 - 4 =$



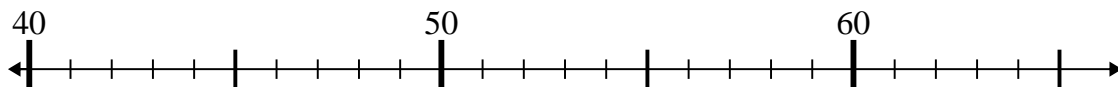
2)  $45 - 2 =$



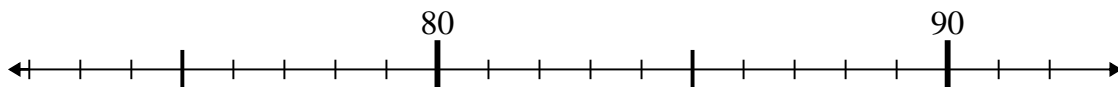
3)  $62 + 14 =$



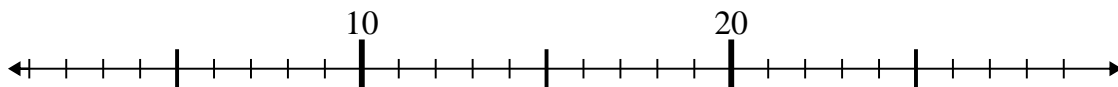
4)  $51 - 7 =$



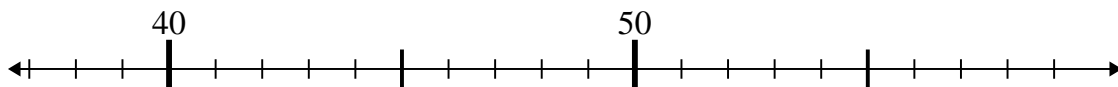
5)  $76 + 1 =$



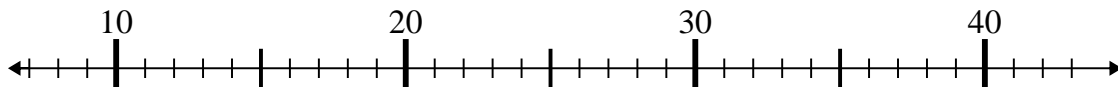
6)  $27 - 21 =$



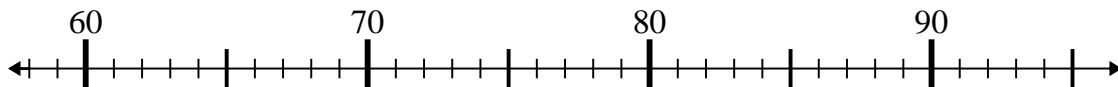
7)  $55 - 15 =$



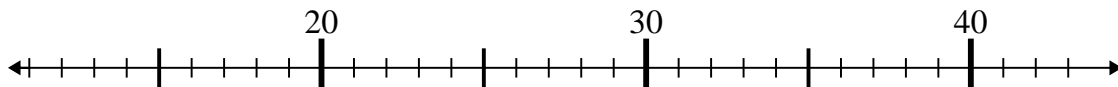
8)  $31 - 17 =$



9)  $66 + 9 =$



10)  $27 + 15 =$



Answers

1. 22

2. 43

3. 76

4. 44

5. 77

6. 6

7. 40

8. 14

9. 75

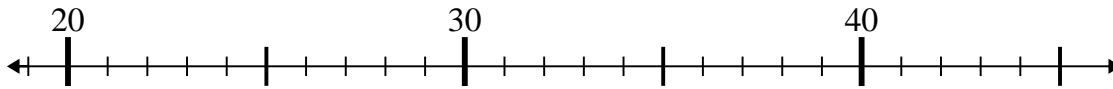
10. 42



Use the numberlines to solve each problem.

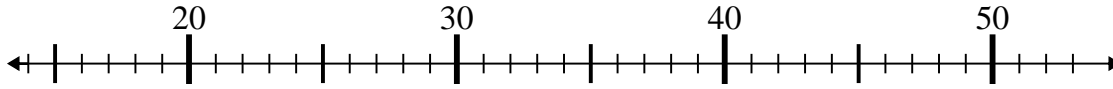
Answers

1)  $29 + 7 =$



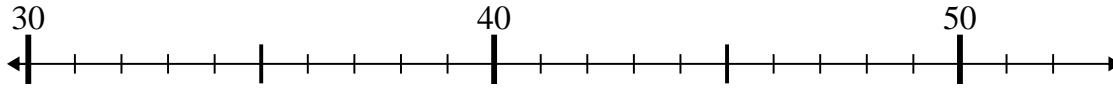
1. \_\_\_\_\_

2)  $36 - 6 =$



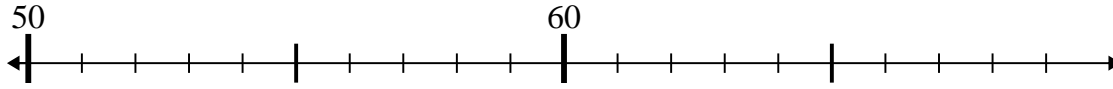
2. \_\_\_\_\_

3)  $50 - 1 =$



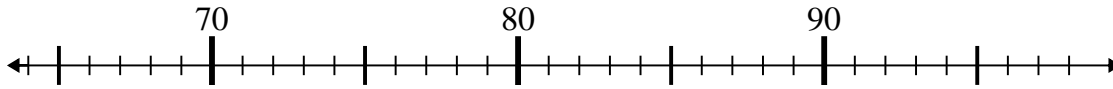
3. \_\_\_\_\_

4)  $68 - 6 =$



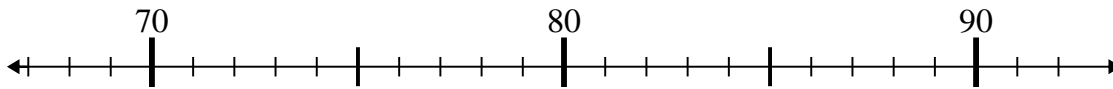
4. \_\_\_\_\_

5)  $71 + 11 =$



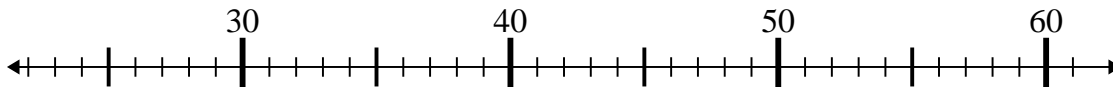
5. \_\_\_\_\_

6)  $68 + 4 =$



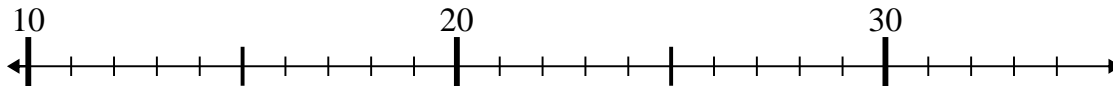
6. \_\_\_\_\_

7)  $35 - 9 =$



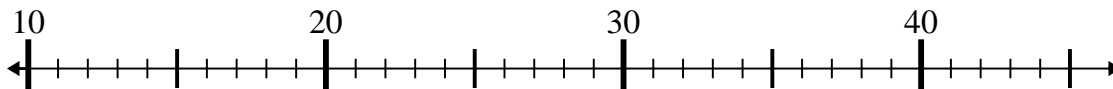
7. \_\_\_\_\_

8)  $34 + 0 =$



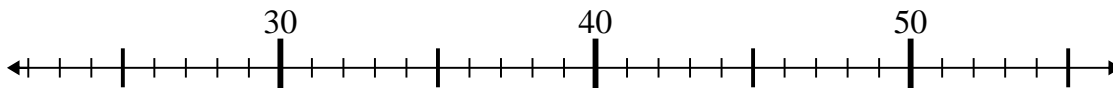
8. \_\_\_\_\_

9)  $42 - 21 =$



9. \_\_\_\_\_

10)  $45 - 3 =$

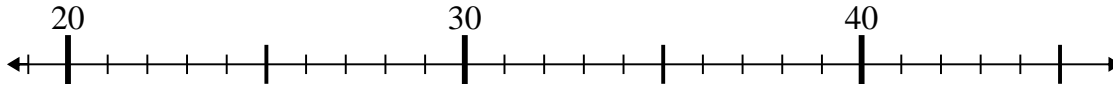


10. \_\_\_\_\_

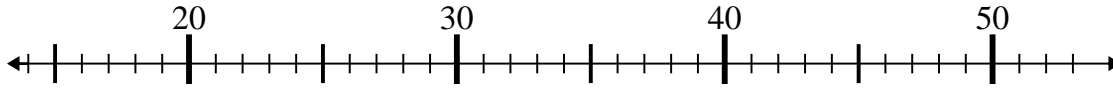


Use the numberlines to solve each problem.

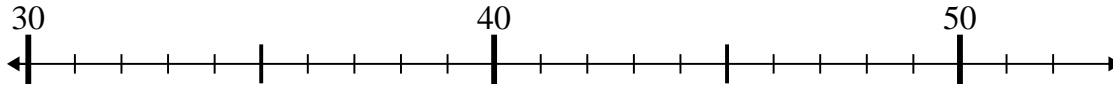
1)  $29 + 7 =$



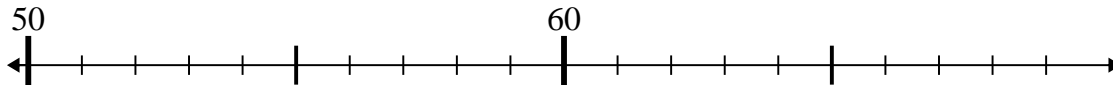
2)  $36 - 6 =$



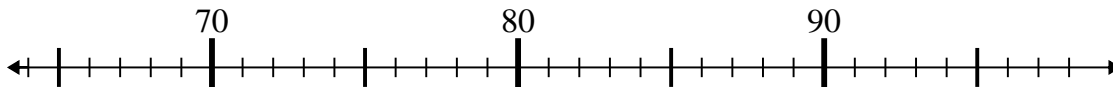
3)  $50 - 1 =$



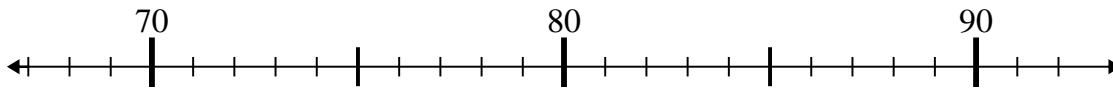
4)  $68 - 6 =$



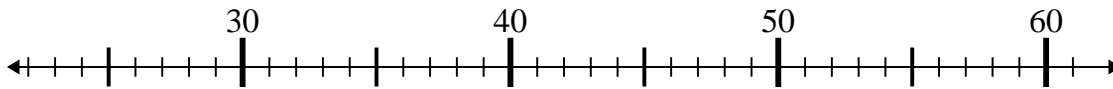
5)  $71 + 11 =$



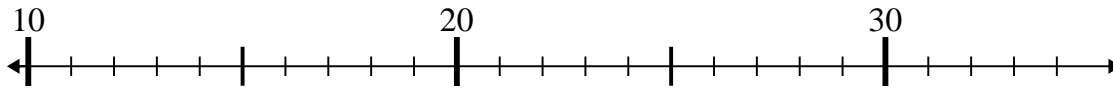
6)  $68 + 4 =$



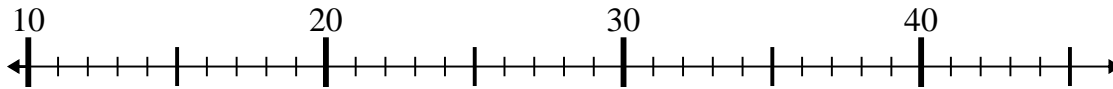
7)  $35 - 9 =$



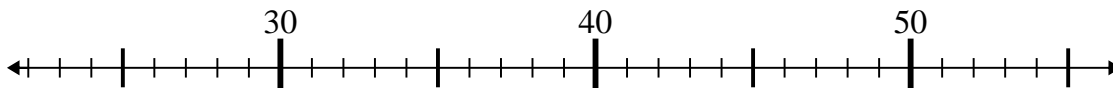
8)  $34 + 0 =$



9)  $42 - 21 =$



10)  $45 - 3 =$



Answers

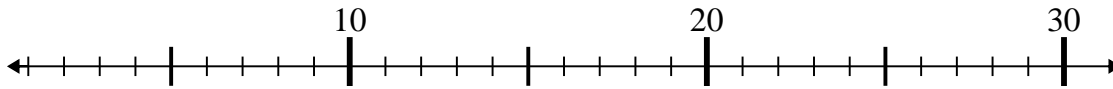
1. 36
2. 30
3. 49
4. 62
5. 82
6. 72
7. 26
8. 34
9. 21
10. 42



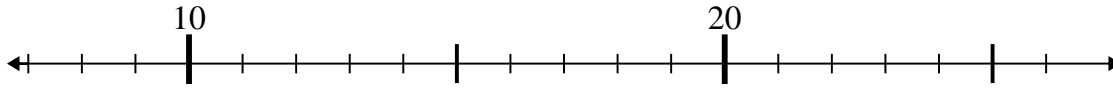
Use the numberlines to solve each problem.

Answers

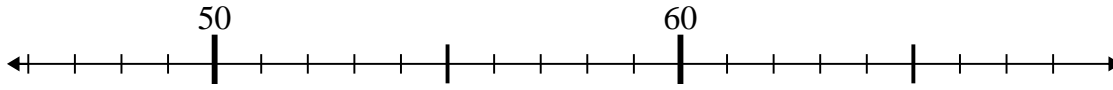
1)  $3 + 17 =$



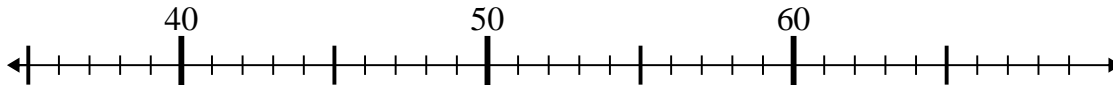
2)  $14 + 9 =$



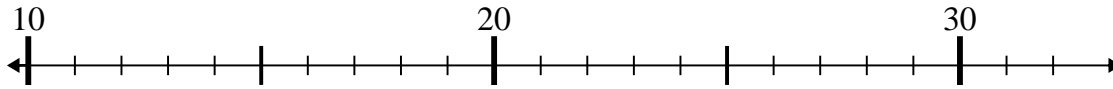
3)  $59 - 8 =$



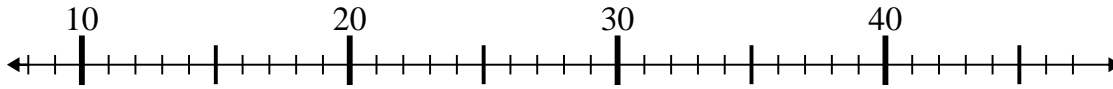
4)  $43 - 5 =$



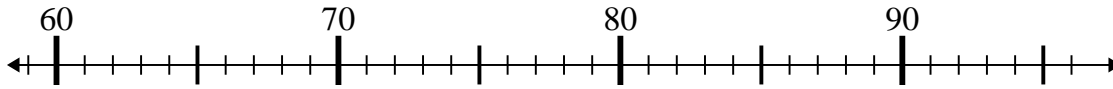
5)  $26 - 14 =$



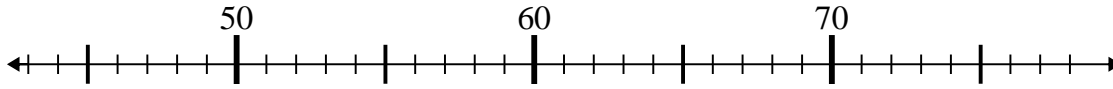
6)  $15 + 23 =$



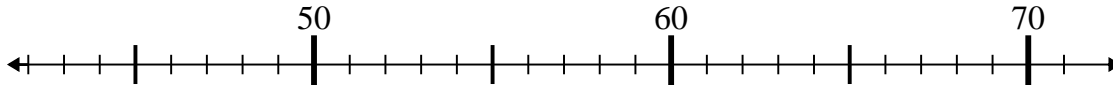
7)  $91 + 2 =$



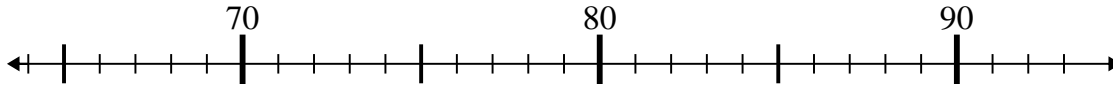
8)  $47 + 1 =$



9)  $71 - 8 =$



10)  $72 + 16 =$

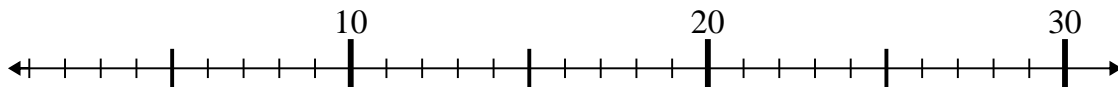


- 1. \_\_\_\_\_
- 2. \_\_\_\_\_
- 3. \_\_\_\_\_
- 4. \_\_\_\_\_
- 5. \_\_\_\_\_
- 6. \_\_\_\_\_
- 7. \_\_\_\_\_
- 8. \_\_\_\_\_
- 9. \_\_\_\_\_
- 10. \_\_\_\_\_

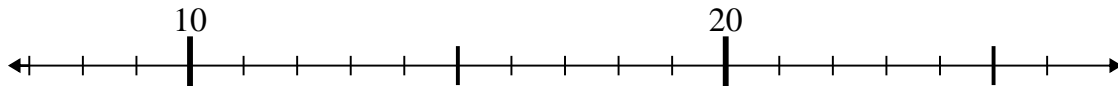


Use the numberlines to solve each problem.

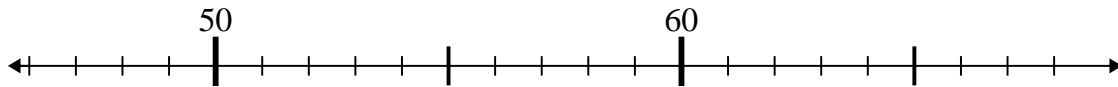
1)  $3 + 17 =$



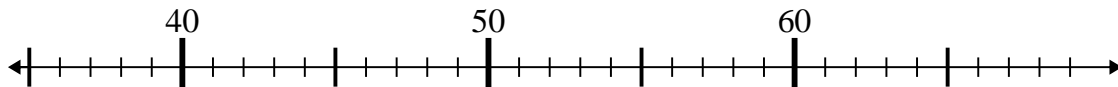
2)  $14 + 9 =$



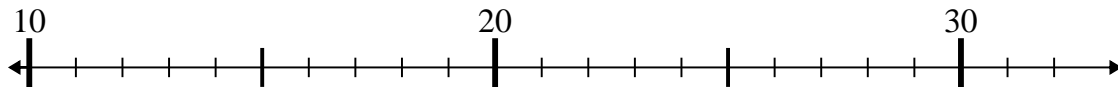
3)  $59 - 8 =$



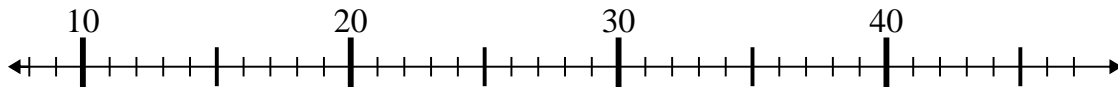
4)  $43 - 5 =$



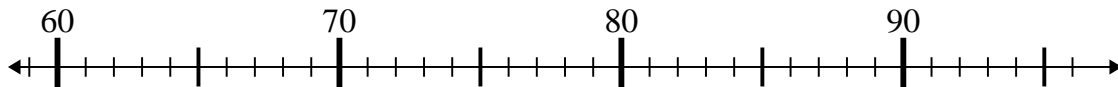
5)  $26 - 14 =$



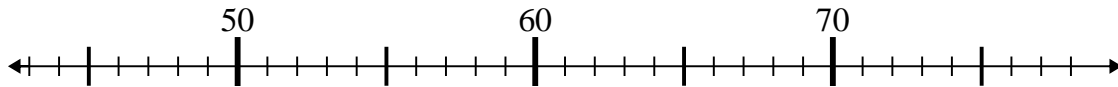
6)  $15 + 23 =$



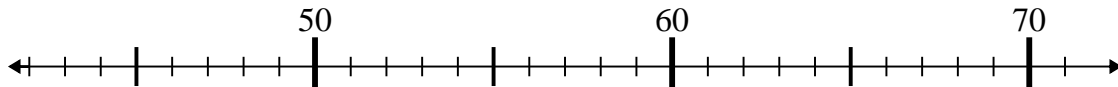
7)  $91 + 2 =$



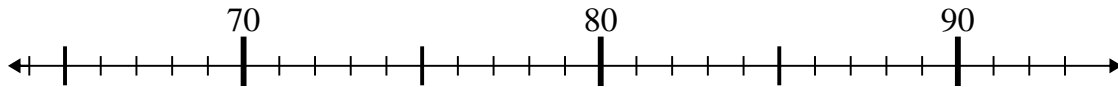
8)  $47 + 1 =$



9)  $71 - 8 =$



10)  $72 + 16 =$



Answers

1. 20

2. 23

3. 51

4. 38

5. 12

6. 38

7. 93

8. 48

9. 63

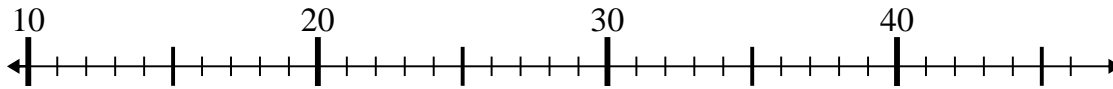
10. 88



Use the numberlines to solve each problem.

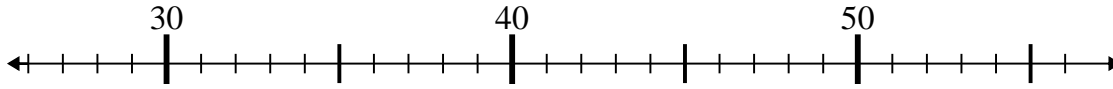
Answers

1)  $24 - 11 =$



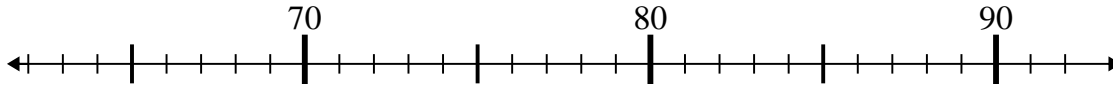
1. \_\_\_\_\_

2)  $29 + 6 =$



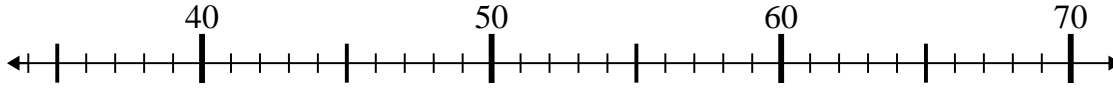
2. \_\_\_\_\_

3)  $72 + 7 =$



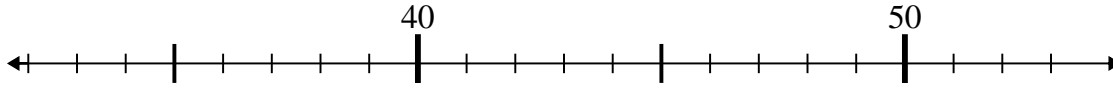
3. \_\_\_\_\_

4)  $41 + 16 =$



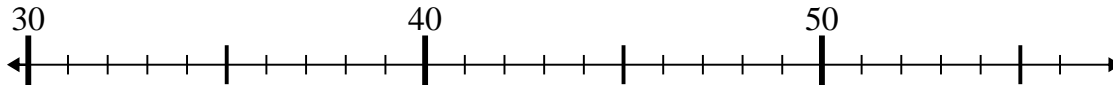
4. \_\_\_\_\_

5)  $51 - 3 =$



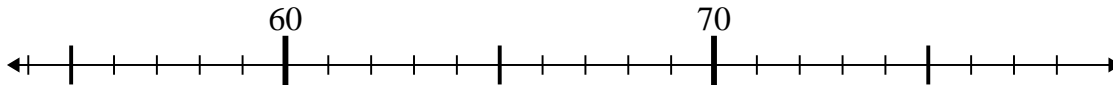
5. \_\_\_\_\_

6)  $35 - 0 =$



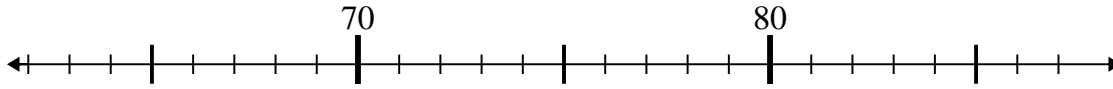
6. \_\_\_\_\_

7)  $65 + 10 =$



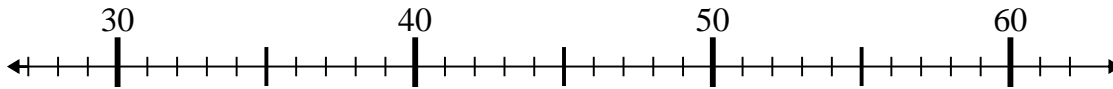
7. \_\_\_\_\_

8)  $65 + 14 =$



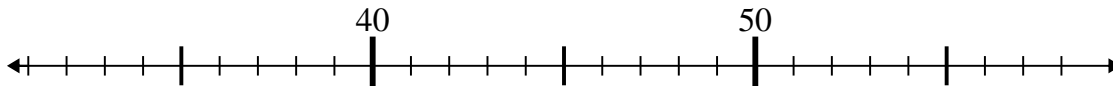
8. \_\_\_\_\_

9)  $57 - 16 =$



9. \_\_\_\_\_

10)  $58 - 19 =$

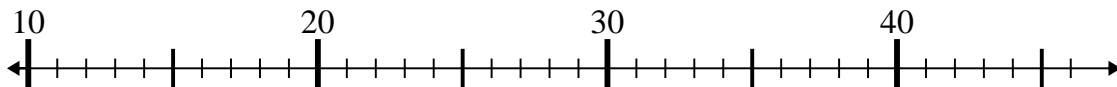


10. \_\_\_\_\_

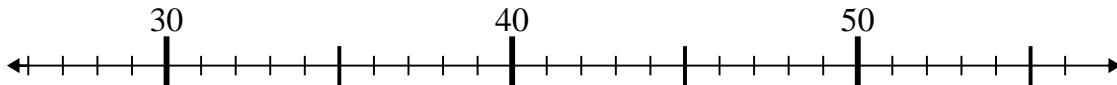


Use the numberlines to solve each problem.

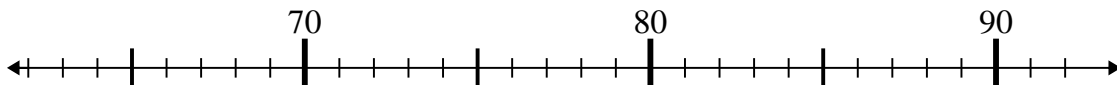
1)  $24 - 11 =$



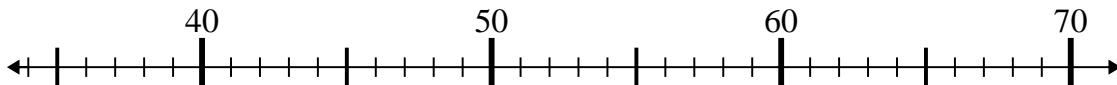
2)  $29 + 6 =$



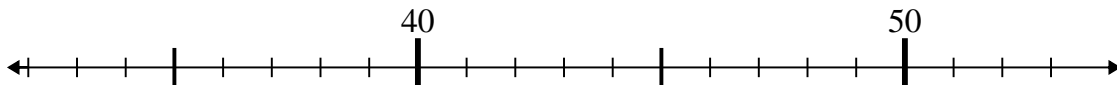
3)  $72 + 7 =$



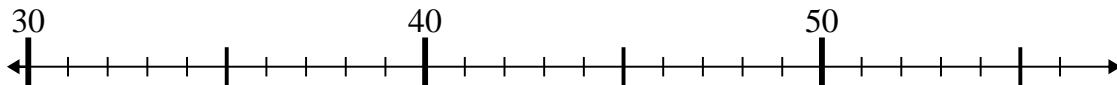
4)  $41 + 16 =$



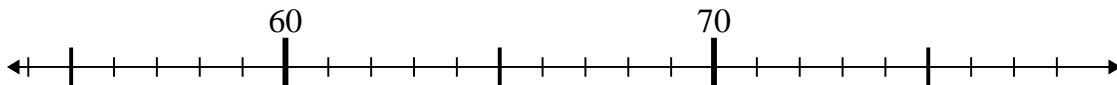
5)  $51 - 3 =$



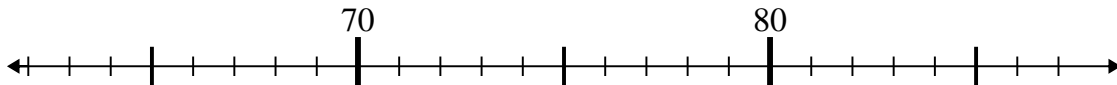
6)  $35 - 0 =$



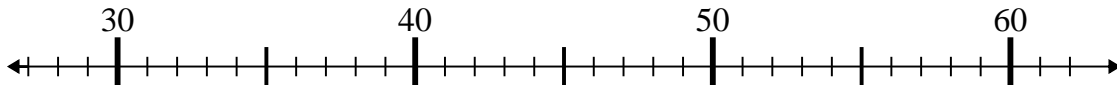
7)  $65 + 10 =$



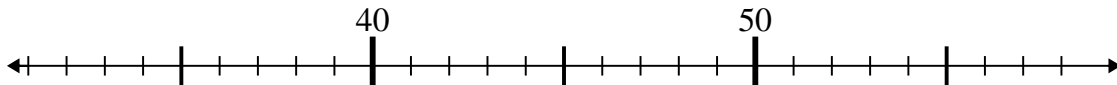
8)  $65 + 14 =$



9)  $57 - 16 =$



10)  $58 - 19 =$



Answers

1. **13**

2. **35**

3. **79**

4. **57**

5. **48**

6. **35**

7. **75**

8. **79**

9. **41**

10. **39**

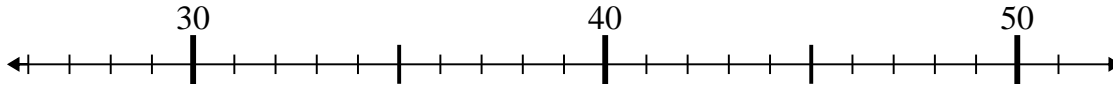




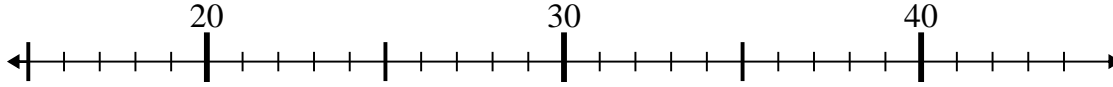
Use the numberlines to solve each problem.

Answers

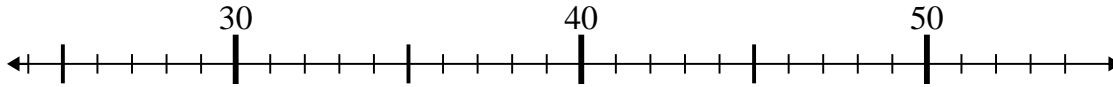
1)  $32 - 5 =$



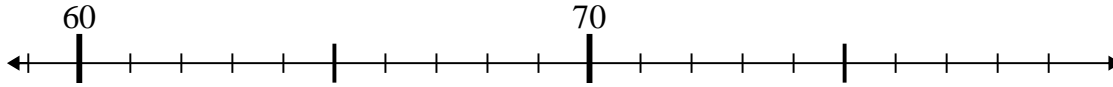
2)  $16 + 7 =$



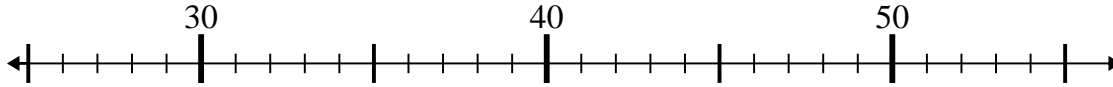
3)  $25 + 12 =$



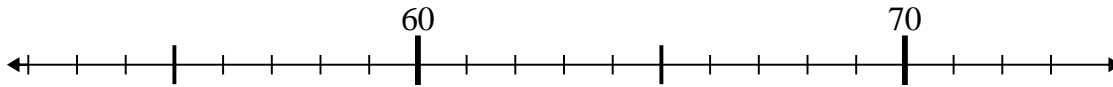
4)  $75 - 14 =$



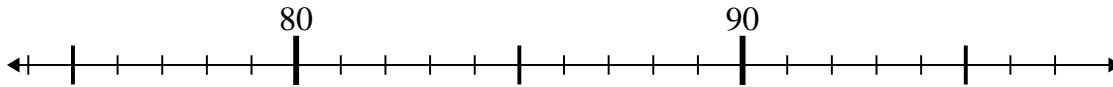
5)  $28 + 26 =$



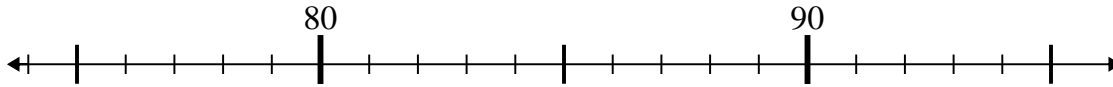
6)  $65 - 10 =$



7)  $81 - 2 =$



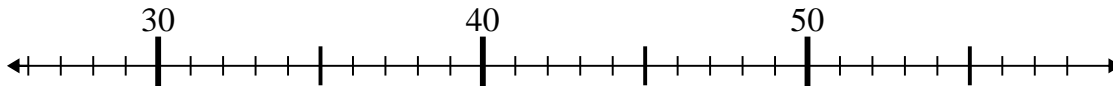
8)  $95 - 8 =$



9)  $48 - 11 =$



10)  $32 + 18 =$

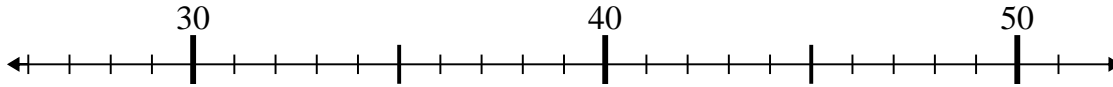


1. \_\_\_\_\_
2. \_\_\_\_\_
3. \_\_\_\_\_
4. \_\_\_\_\_
5. \_\_\_\_\_
6. \_\_\_\_\_
7. \_\_\_\_\_
8. \_\_\_\_\_
9. \_\_\_\_\_
10. \_\_\_\_\_

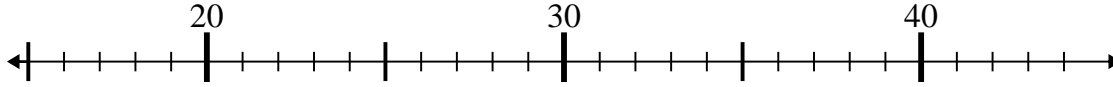


Use the numberlines to solve each problem.

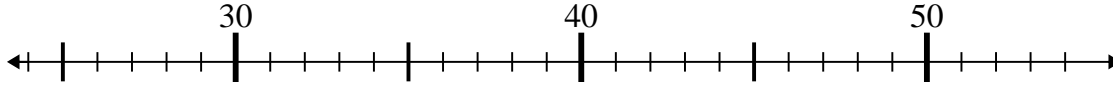
1)  $32 - 5 =$



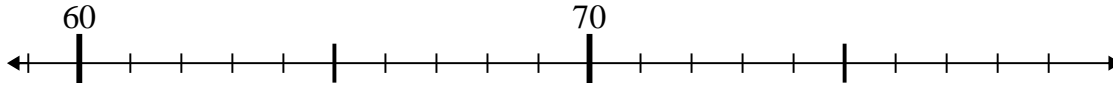
2)  $16 + 7 =$



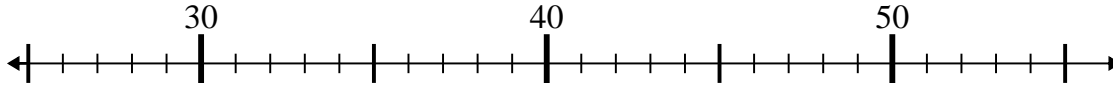
3)  $25 + 12 =$



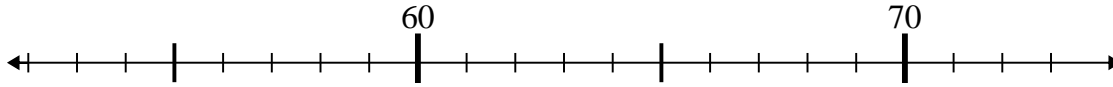
4)  $75 - 14 =$



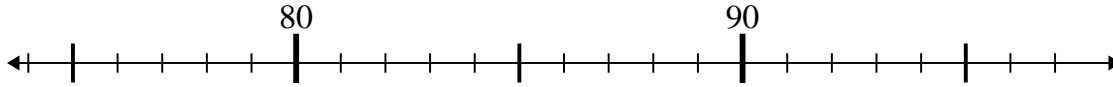
5)  $28 + 26 =$



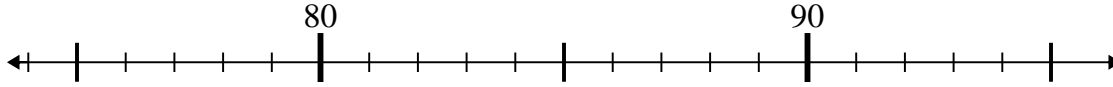
6)  $65 - 10 =$



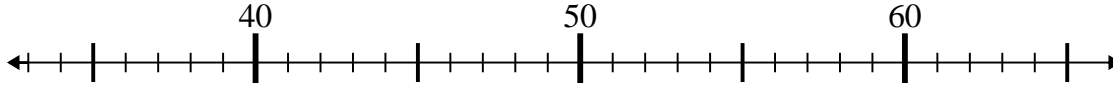
7)  $81 - 2 =$



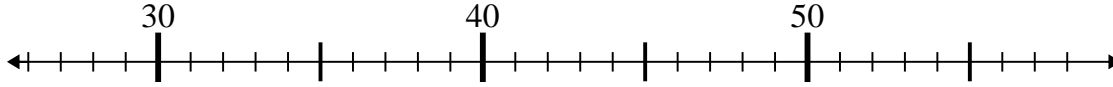
8)  $95 - 8 =$



9)  $48 - 11 =$



10)  $32 + 18 =$



Answers

1. 27

2. 23

3. 37

4. 61

5. 54

6. 55

7. 79

8. 87

9. 37

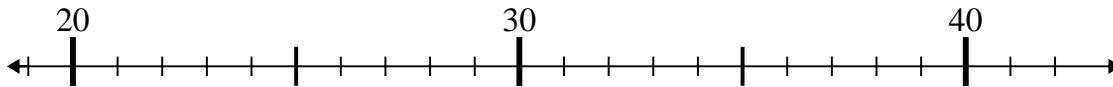
10. 50



Use the numberlines to solve each problem.

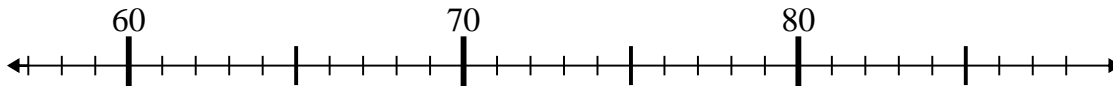
Answers

1)  $31 + 4 =$



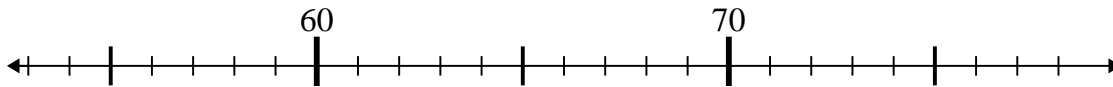
1. \_\_\_\_\_

2)  $76 - 18 =$



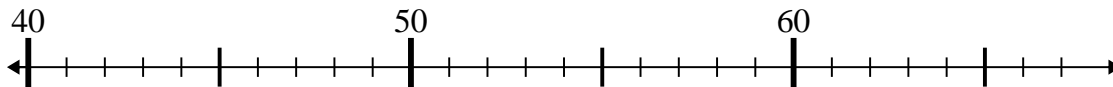
2. \_\_\_\_\_

3)  $57 + 5 =$



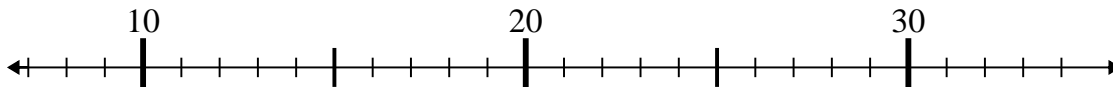
3. \_\_\_\_\_

4)  $40 + 8 =$



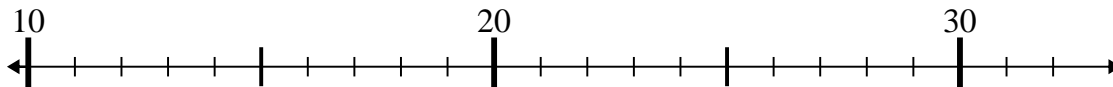
4. \_\_\_\_\_

5)  $8 + 20 =$



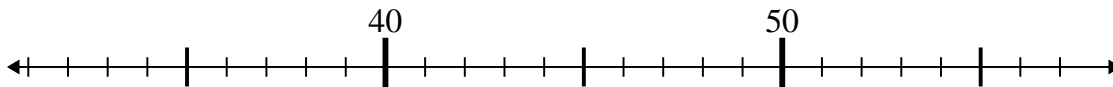
5. \_\_\_\_\_

6)  $13 + 4 =$



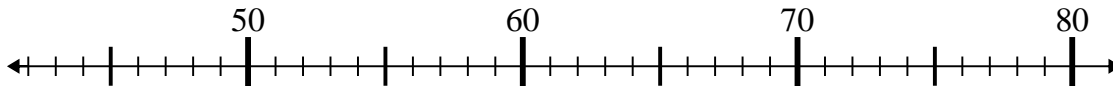
6. \_\_\_\_\_

7)  $56 - 18 =$



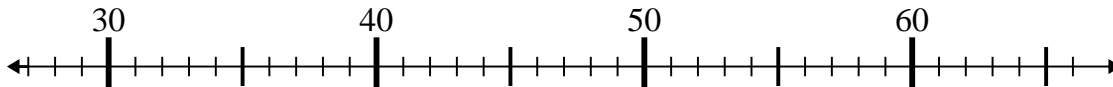
7. \_\_\_\_\_

8)  $61 - 13 =$



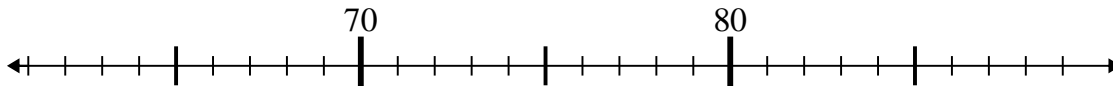
8. \_\_\_\_\_

9)  $40 + 16 =$



9. \_\_\_\_\_

10)  $78 + 3 =$

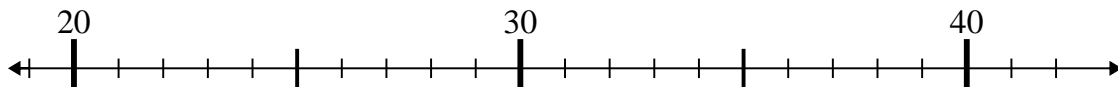


10. \_\_\_\_\_

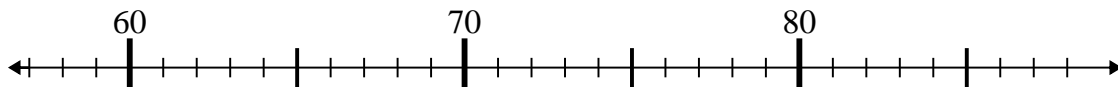


Use the numberlines to solve each problem.

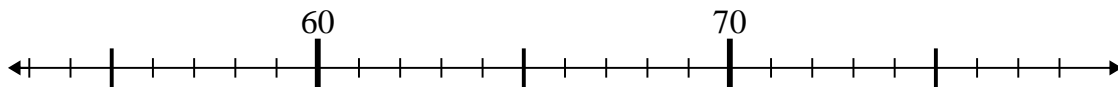
1)  $31 + 4 =$



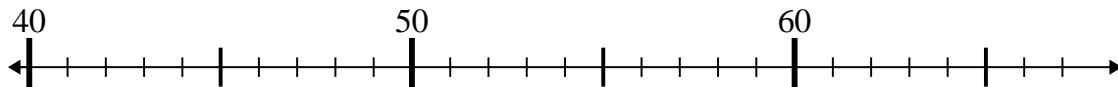
2)  $76 - 18 =$



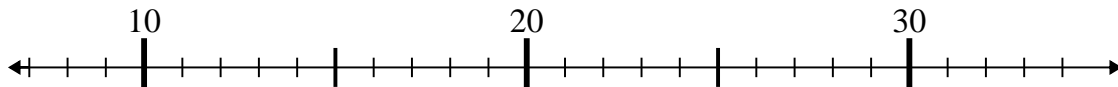
3)  $57 + 5 =$



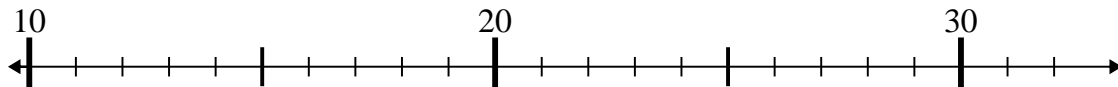
4)  $40 + 8 =$



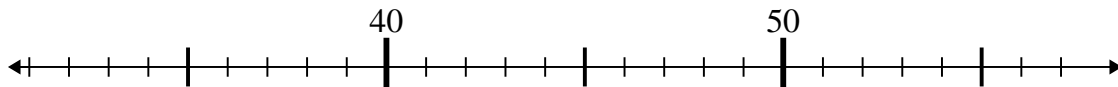
5)  $8 + 20 =$



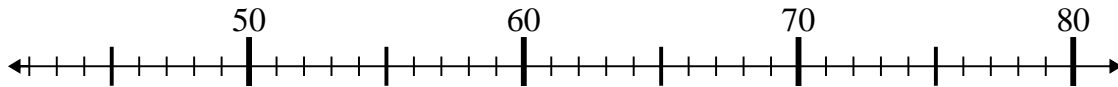
6)  $13 + 4 =$



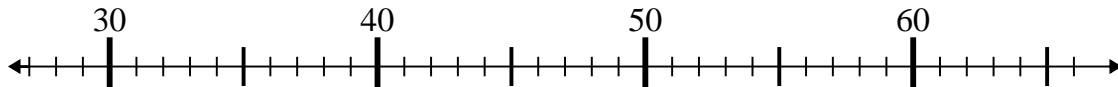
7)  $56 - 18 =$



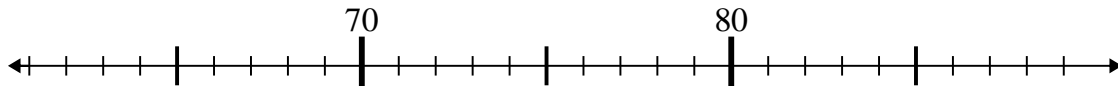
8)  $61 - 13 =$



9)  $40 + 16 =$



10)  $78 + 3 =$



Answers

1. 35

2. 58

3. 62

4. 48

5. 28

6. 17

7. 38

8. 48

9. 56

10. 81