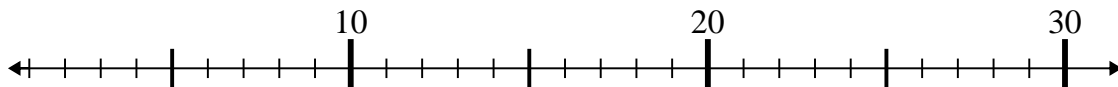




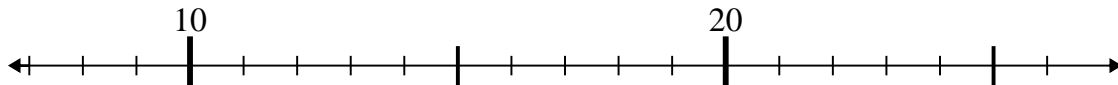
Use the numberlines to solve each problem.

Answers

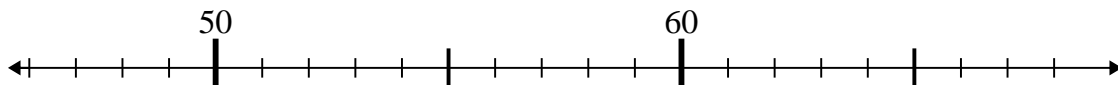
1) $3 + 17 =$



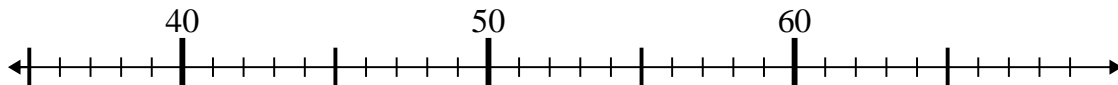
2) $14 + 9 =$



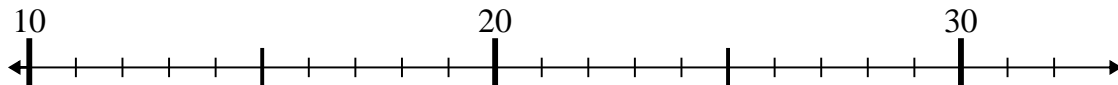
3) $59 - 8 =$



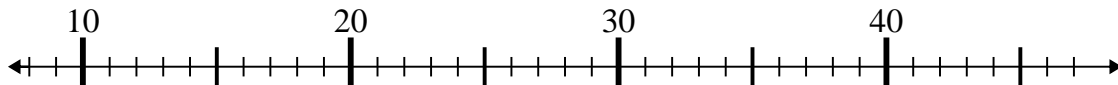
4) $43 - 5 =$



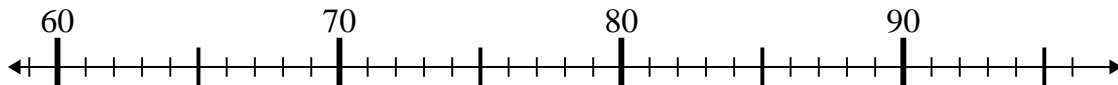
5) $26 - 14 =$



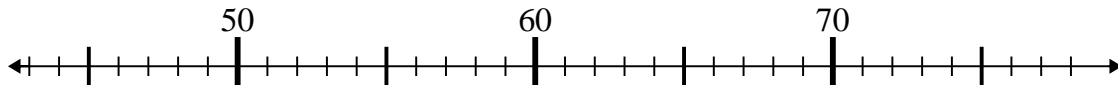
6) $15 + 23 =$



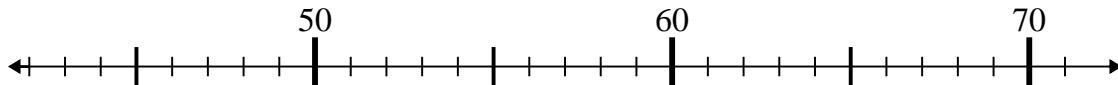
7) $91 + 2 =$



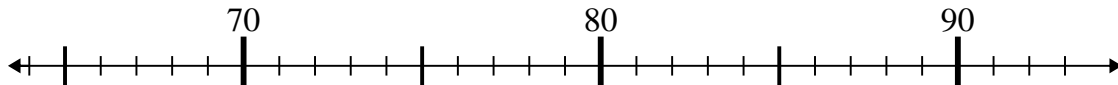
8) $47 + 1 =$



9) $71 - 8 =$



10) $72 + 16 =$

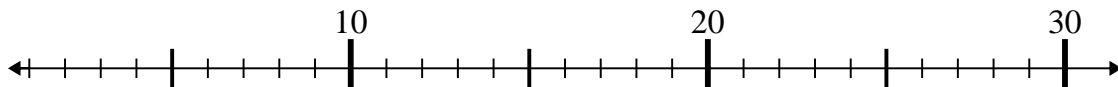


1. _____
2. _____
3. _____
4. _____
5. _____
6. _____
7. _____
8. _____
9. _____
10. _____

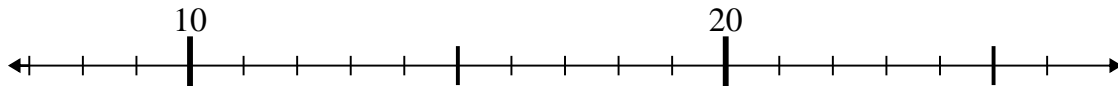


Use the numberlines to solve each problem.

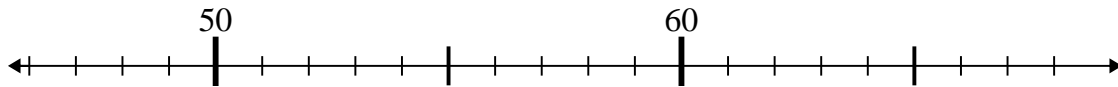
1) $3 + 17 =$



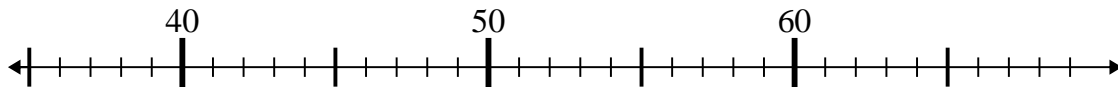
2) $14 + 9 =$



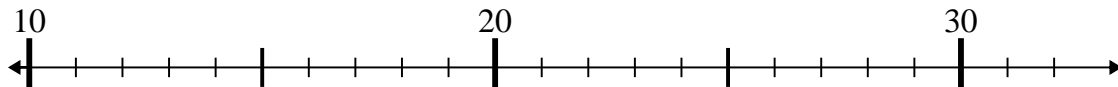
3) $59 - 8 =$



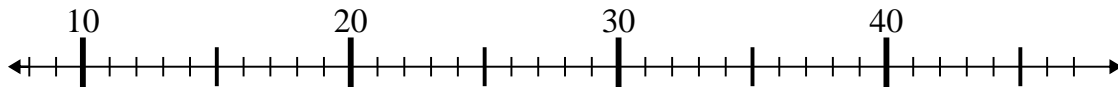
4) $43 - 5 =$



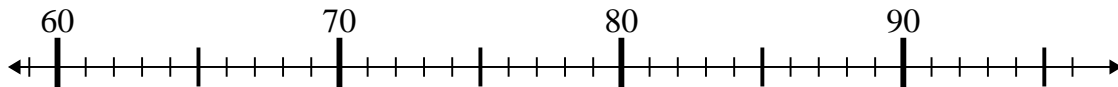
5) $26 - 14 =$



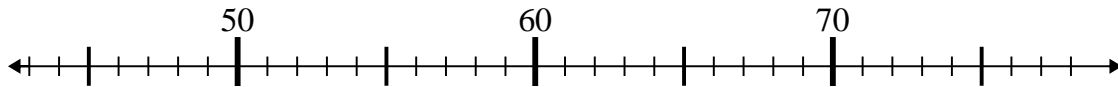
6) $15 + 23 =$



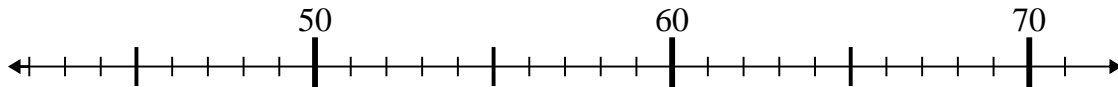
7) $91 + 2 =$



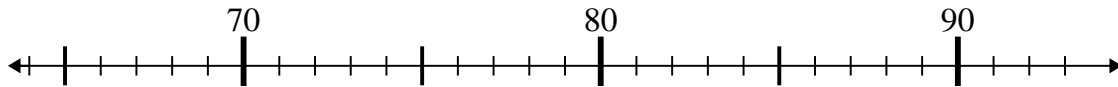
8) $47 + 1 =$



9) $71 - 8 =$



10) $72 + 16 =$



Answers

1. 20

2. 23

3. 51

4. 38

5. 12

6. 38

7. 93

8. 48

9. 63

10. 88