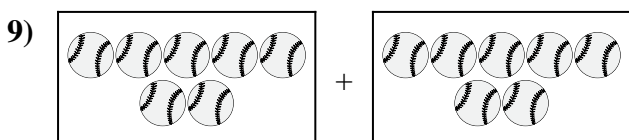
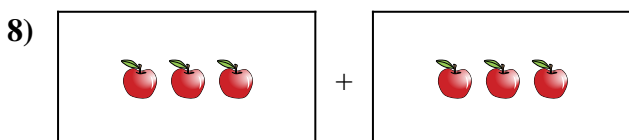
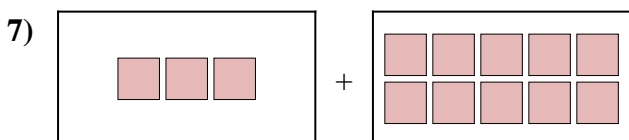
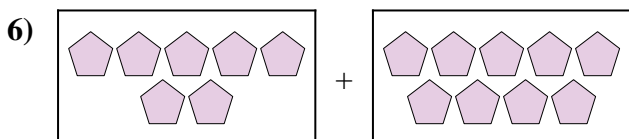
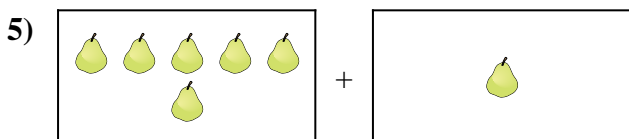
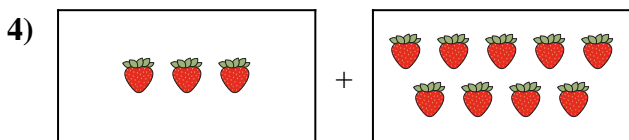
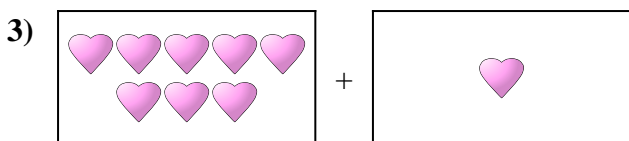
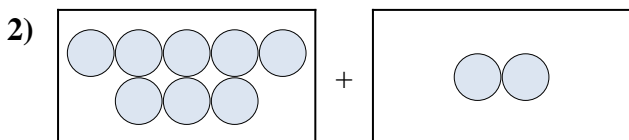





Express the visual problem as an equation with answer.

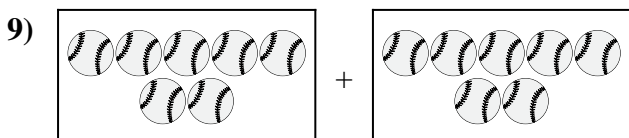
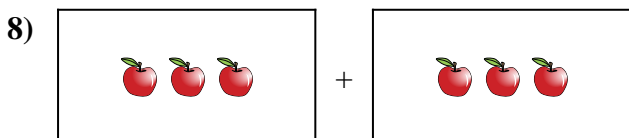
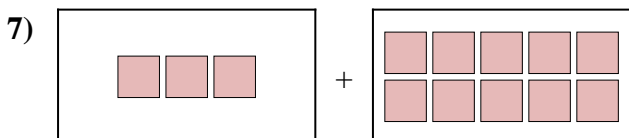
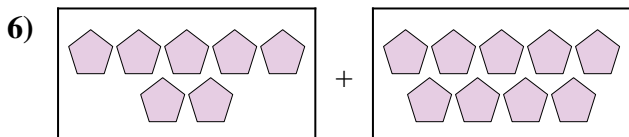
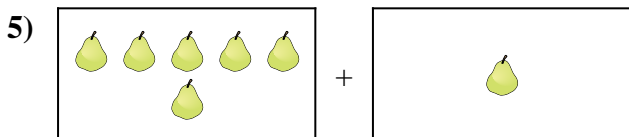
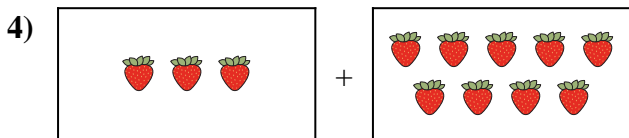
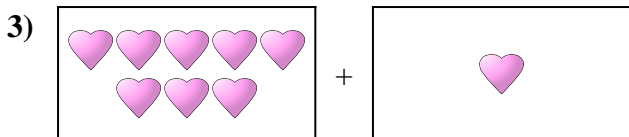
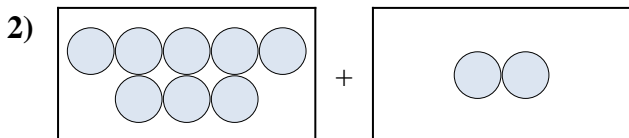

Answers



1. \_\_\_\_\_
2. \_\_\_\_\_
3. \_\_\_\_\_
4. \_\_\_\_\_
5. \_\_\_\_\_
6. \_\_\_\_\_
7. \_\_\_\_\_
8. \_\_\_\_\_
9. \_\_\_\_\_
10. \_\_\_\_\_



Express the visual problem as an equation with answer.



Answers

1.  $9 + 1 = 10$

2.  $8 + 2 = 10$

3.  $8 + 1 = 9$

4.  $3 + 9 = 12$

5.  $6 + 1 = 7$

6.  $7 + 9 = 16$

7.  $3 + 10 = 13$

8.  $3 + 3 = 6$

9.  $7 + 7 = 14$

10.  $5 + 2 = 7$