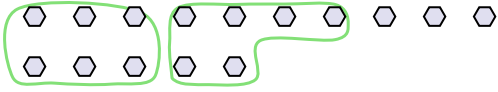




Use the shapes provided to answer the questions.

Answers

Ex) There are 15 shapes below. How many groups of 6 can you make with them? How many will you have left over?

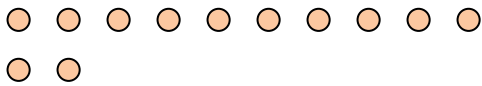


1) There are 10 shapes below. How many groups of 5 can you make with them? How many will you have left over?

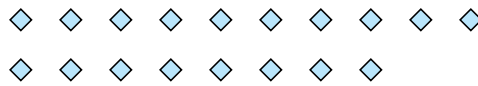


Ex. 2 3

2) There are 12 shapes below. How many groups of 2 can you make with them? How many will you have left over?



3) There are 18 shapes below. How many groups of 9 can you make with them? How many will you have left over?



1. _____

2. _____

3. _____

4. _____

5. _____

6. _____

7. _____

4) There are 20 shapes below. How many groups of 2 can you make with them? How many will you have left over?



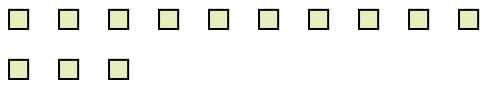
5) There are 20 shapes below. How many groups of 8 can you make with them? How many will you have left over?




8. _____

9. _____

6) There are 13 shapes below. How many groups of 9 can you make with them? How many will you have left over?



7) There are 27 shapes below. How many groups of 6 can you make with them? How many will you have left over?



8) There are 25 shapes below. How many groups of 3 can you make with them? How many will you have left over?



9) There are 28 shapes below. How many groups of 9 can you make with them? How many will you have left over?





Use the shapes provided to answer the questions.

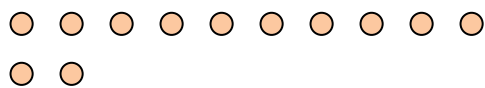
Ex) There are 15 shapes below. How many groups of 6 can you make with them? How many will you have left over?



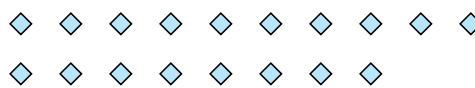
1) There are 10 shapes below. How many groups of 5 can you make with them? How many will you have left over?



2) There are 12 shapes below. How many groups of 2 can you make with them? How many will you have left over?



3) There are 18 shapes below. How many groups of 9 can you make with them? How many will you have left over?



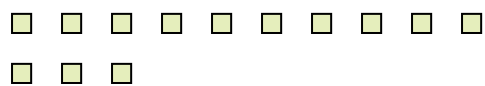
4) There are 20 shapes below. How many groups of 2 can you make with them? How many will you have left over?




5) There are 20 shapes below. How many groups of 8 can you make with them? How many will you have left over?



6) There are 13 shapes below. How many groups of 9 can you make with them? How many will you have left over?



7) There are 27 shapes below. How many groups of 6 can you make with them? How many will you have left over?



8) There are 25 shapes below. How many groups of 3 can you make with them? How many will you have left over?



9) There are 28 shapes below. How many groups of 9 can you make with them? How many will you have left over?



Answers

Ex. 2 3

1. 2 0

2. 6 0

3. 2 0

4. 10 0

5. 2 4

6. 1 4

7. 4 3

8. 8 1

9. 3 1