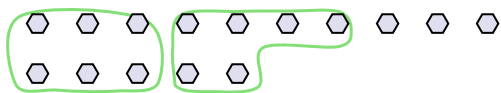




Use the shapes provided to answer the questions.

Ex) There are 15 shapes below. How many groups of 6 can you make with them? How many will you have left over?



1) There are 14 shapes below. How many groups of 6 can you make with them? How many will you have left over?



Answers

Ex. 2 3

1. _____

2. _____

3. _____

4. _____

5. _____

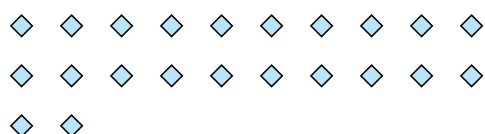
6. _____

7. _____

8. _____

9. _____

2) There are 22 shapes below. How many groups of 7 can you make with them? How many will you have left over?



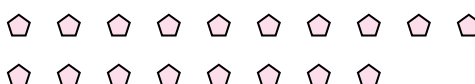
3) There are 16 shapes below. How many groups of 4 can you make with them? How many will you have left over?




4) There are 18 shapes below. How many groups of 8 can you make with them? How many will you have left over?



5) There are 18 shapes below. How many groups of 4 can you make with them? How many will you have left over?




6) There are 13 shapes below. How many groups of 6 can you make with them? How many will you have left over?



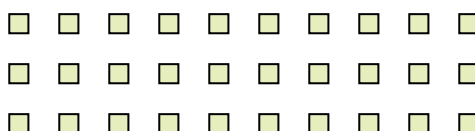
7) There are 17 shapes below. How many groups of 5 can you make with them? How many will you have left over?



8) There are 29 shapes below. How many groups of 9 can you make with them? How many will you have left over?



9) There are 30 shapes below. How many groups of 8 can you make with them? How many will you have left over?





Use the shapes provided to answer the questions.

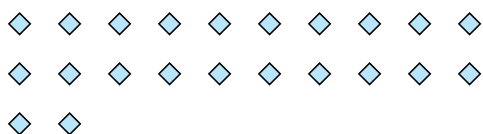
Ex) There are 15 shapes below. How many groups of 6 can you make with them? How many will you have left over?



1) There are 14 shapes below. How many groups of 6 can you make with them? How many will you have left over?



2) There are 22 shapes below. How many groups of 7 can you make with them? How many will you have left over?



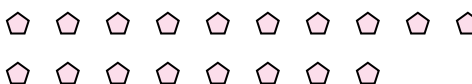
3) There are 16 shapes below. How many groups of 4 can you make with them? How many will you have left over?




4) There are 18 shapes below. How many groups of 8 can you make with them? How many will you have left over?



5) There are 18 shapes below. How many groups of 4 can you make with them? How many will you have left over?




6) There are 13 shapes below. How many groups of 6 can you make with them? How many will you have left over?



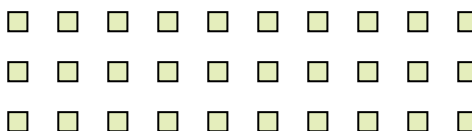
7) There are 17 shapes below. How many groups of 5 can you make with them? How many will you have left over?



8) There are 29 shapes below. How many groups of 9 can you make with them? How many will you have left over?



9) There are 30 shapes below. How many groups of 8 can you make with them? How many will you have left over?



Answers

Ex.	<u>2</u>	<u>3</u>
1.	<u>2</u>	<u>2</u>
2.	<u>3</u>	<u>1</u>
3.	<u>4</u>	<u>0</u>
4.	<u>2</u>	<u>2</u>
5.	<u>4</u>	<u>2</u>
6.	<u>2</u>	<u>1</u>
7.	<u>3</u>	<u>2</u>
8.	<u>3</u>	<u>2</u>
9.	<u>3</u>	<u>6</u>