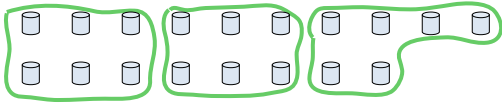







Use the shapes provided to answer the questions.

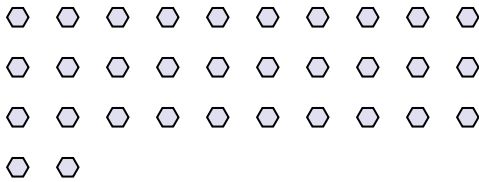
Ex) How many groups of 6 can you make with the 18 shapes below?




1) How many groups of 6 can you make with the 36 shapes below?



2) How many groups of 8 can you make with the 32 shapes below?



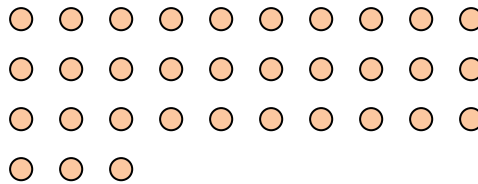
3) How many groups of 5 can you make with the 25 shapes below?



4) How many groups of 5 can you make with the 10 shapes below?



5) How many groups of 3 can you make with the 33 shapes below?




6) How many groups of 2 can you make with the 14 shapes below?



7) How many groups of 9 can you make with the 36 shapes below?



8) How many groups of 2 can you make with the 34 shapes below?



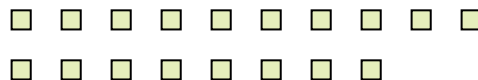
9) How many groups of 5 can you make with the 10 shapes below?



10) How many groups of 7 can you make with the 28 shapes below?



11) How many groups of 6 can you make with the 18 shapes below?



Answers

Ex. 3

1. 6

2. 4

3. 5

4. 2

5. 11

6. 7

7. 4

8. 17

9. 2

10. 4

11. 3