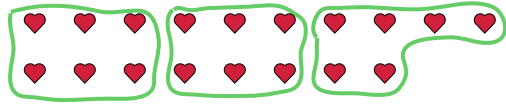




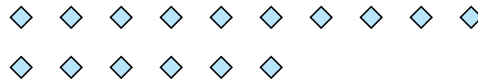
Use the shapes provided to answer the questions.

Answers

Ex) How many groups of 6 can you make with the 18 shapes below?




1) How many groups of 8 can you make with the 16 shapes below?



Ex. 3

2) How many groups of 6 can you make with the 36 shapes below?



3) How many groups of 5 can you make with the 25 shapes below?



1. _____

2. _____

3. _____

4. _____

5. _____

6. _____

7. _____

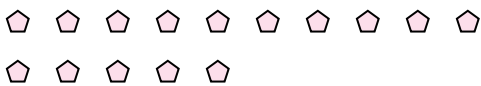
8. _____

9. _____

10. _____

11. _____

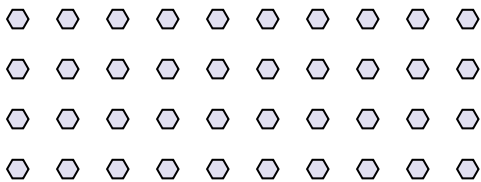
4) How many groups of 5 can you make with the 15 shapes below?



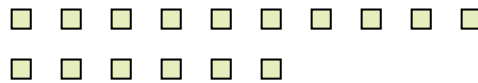
5) How many groups of 3 can you make with the 6 shapes below?




6) How many groups of 4 can you make with the 40 shapes below?




7) How many groups of 2 can you make with the 16 shapes below?



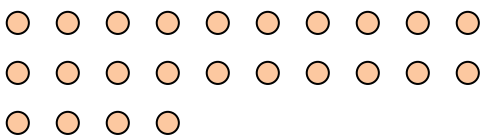
8) How many groups of 6 can you make with the 30 shapes below?




9) How many groups of 7 can you make with the 21 shapes below?



10) How many groups of 8 can you make with the 24 shapes below?




11) How many groups of 2 can you make with the 22 shapes below?



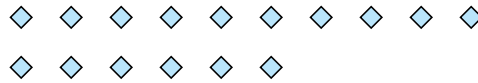


Use the shapes provided to answer the questions.


Ex) How many groups of 6 can you make with the 18 shapes below?



1) How many groups of 8 can you make with the 16 shapes below?



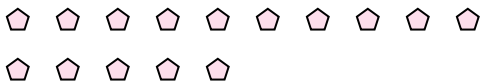
2) How many groups of 6 can you make with the 36 shapes below?



3) How many groups of 5 can you make with the 25 shapes below?



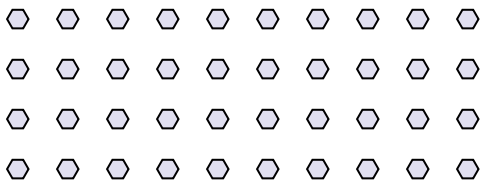
4) How many groups of 5 can you make with the 15 shapes below?



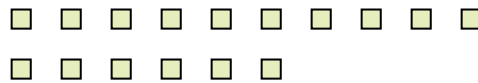
5) How many groups of 3 can you make with the 6 shapes below?




6) How many groups of 4 can you make with the 40 shapes below?



7) How many groups of 2 can you make with the 16 shapes below?



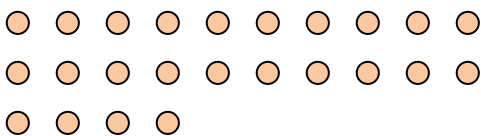
8) How many groups of 6 can you make with the 30 shapes below?




9) How many groups of 7 can you make with the 21 shapes below?



10) How many groups of 8 can you make with the 24 shapes below?



11) How many groups of 2 can you make with the 22 shapes below?



Answers

Ex. 3

1. 2

2. 6

3. 5

4. 3

5. 2

6. 10

7. 8

8. 5

9. 3

10. 3

11. 11