




Use the shapes provided to answer the questions.

**Answers**

Ex) How many groups of 6 can you make with the 18 shapes below?




1) How many groups of 5 can you make with the 40 shapes below?



Ex. 3

2) How many groups of 7 can you make with the 21 shapes below?



3) How many groups of 6 can you make with the 12 shapes below?



1. \_\_\_\_\_

2. \_\_\_\_\_


3. \_\_\_\_\_

4. \_\_\_\_\_

5. \_\_\_\_\_

6. \_\_\_\_\_

4) How many groups of 3 can you make with the 24 shapes below?



5) How many groups of 2 can you make with the 4 shapes below?

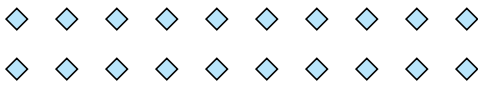


7. \_\_\_\_\_

8. \_\_\_\_\_

9. \_\_\_\_\_

6) How many groups of 5 can you make with the 20 shapes below?




7) How many groups of 9 can you make with the 18 shapes below?



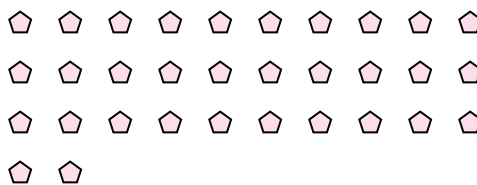
10. \_\_\_\_\_

11. \_\_\_\_\_

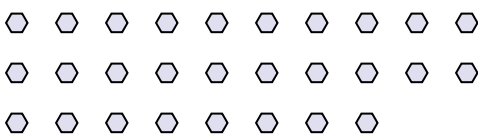
8) How many groups of 9 can you make with the 36 shapes below?



9) How many groups of 2 can you make with the 32 shapes below?



10) How many groups of 2 can you make with the 28 shapes below?




11) How many groups of 8 can you make with the 24 shapes below?





Use the shapes provided to answer the questions.


Ex) How many groups of 6 can you make with the 18 shapes below?



1) How many groups of 5 can you make with the 40 shapes below?




2) How many groups of 7 can you make with the 21 shapes below?



3) How many groups of 6 can you make with the 12 shapes below?



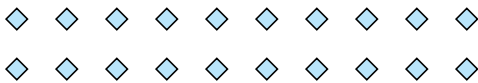
4) How many groups of 3 can you make with the 24 shapes below?



5) How many groups of 2 can you make with the 4 shapes below?




6) How many groups of 5 can you make with the 20 shapes below?



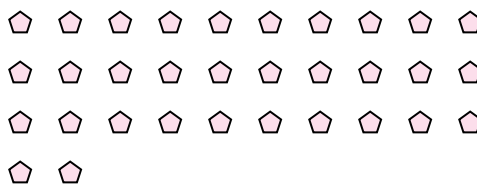
7) How many groups of 9 can you make with the 18 shapes below?



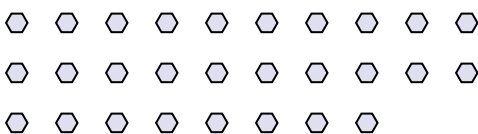
8) How many groups of 9 can you make with the 36 shapes below?



9) How many groups of 2 can you make with the 32 shapes below?



10) How many groups of 2 can you make with the 28 shapes below?



11) How many groups of 8 can you make with the 24 shapes below?



Answers

Ex. 3

1. 8

2. 3

3. 2

4. 8

5. 2

6. 4

7. 2

8. 4

9. 16

10. 14

11. 3