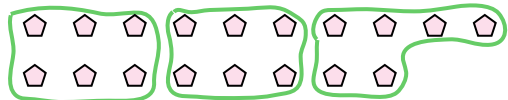




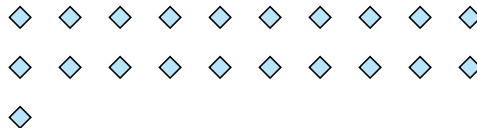


Use the shapes provided to answer the questions.

Ex) How many groups of 6 can you make with the 18 shapes below?



1) How many groups of 7 can you make with the 21 shapes below?



Ex. 3

2) How many groups of 3 can you make with the 6 shapes below?



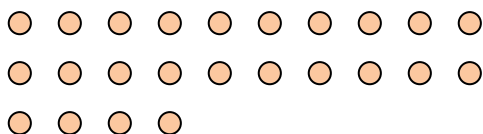
3) How many groups of 6 can you make with the 18 shapes below?



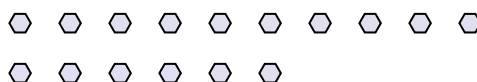
1. 3

2. 2

4) How many groups of 8 can you make with the 24 shapes below?



5) How many groups of 8 can you make with the 16 shapes below?




3. 3


4. 3

5. 2

6) How many groups of 4 can you make with the 16 shapes below?



7) How many groups of 7 can you make with the 35 shapes below?



6. 4

7. 5

8. 5

8) How many groups of 3 can you make with the 15 shapes below?



9) How many groups of 2 can you make with the 18 shapes below?



9. 9

10. 2

11. 2

10) How many groups of 4 can you make with the 8 shapes below?



11) How many groups of 7 can you make with the 14 shapes below?

