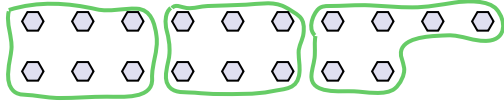




Use the shapes provided to answer the questions.

Answers

Ex) How many groups of 6 can you make with the 18 shapes below?

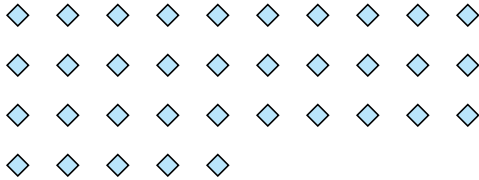


1) How many groups of 6 can you make with the 12 shapes below?



Ex. 3

2) How many groups of 7 can you make with the 35 shapes below?




3) How many groups of 4 can you make with the 8 shapes below?



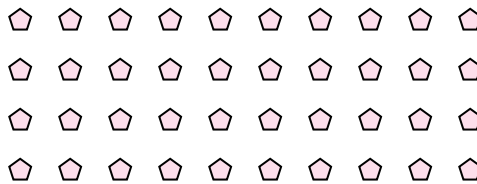
1. _____

2. _____

4) How many groups of 8 can you make with the 24 shapes below?



5) How many groups of 4 can you make with the 40 shapes below?




3. _____

4. _____

5. _____

6. _____

6) How many groups of 6 can you make with the 36 shapes below?



7) How many groups of 5 can you make with the 10 shapes below?



7. _____


8. _____

9. _____

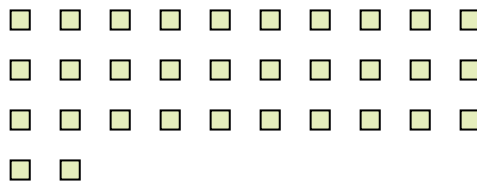
10. _____

11. _____

8) How many groups of 9 can you make with the 27 shapes below?



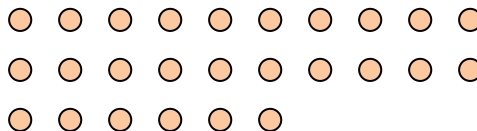
9) How many groups of 8 can you make with the 32 shapes below?



10) How many groups of 6 can you make with the 18 shapes below?



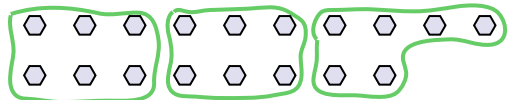
11) How many groups of 2 can you make with the 26 shapes below?





Use the shapes provided to answer the questions.


Ex) How many groups of 6 can you make with the 18 shapes below?



1) How many groups of 6 can you make with the 12 shapes below?




2) How many groups of 7 can you make with the 35 shapes below?



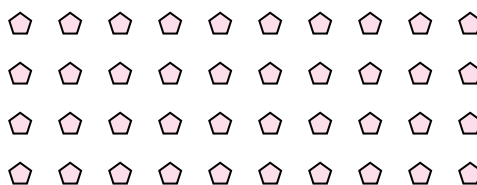
3) How many groups of 4 can you make with the 8 shapes below?




4) How many groups of 8 can you make with the 24 shapes below?



5) How many groups of 4 can you make with the 40 shapes below?




6) How many groups of 6 can you make with the 36 shapes below?



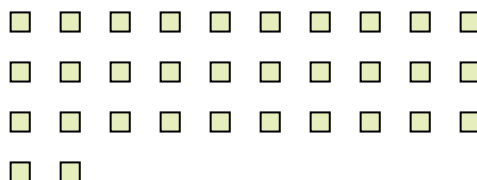
7) How many groups of 5 can you make with the 10 shapes below?



8) How many groups of 9 can you make with the 27 shapes below?



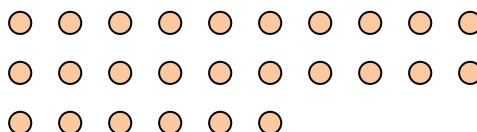
9) How many groups of 8 can you make with the 32 shapes below?



10) How many groups of 6 can you make with the 18 shapes below?



11) How many groups of 2 can you make with the 26 shapes below?



Answers

Ex. 3

1. 2

2. 5

3. 2

4. 3

5. 10

6. 6

7. 2

8. 3

9. 4

10. 3

11. 13